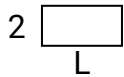
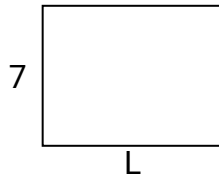


**Berechne den Wert von 'L'.****Antworten**

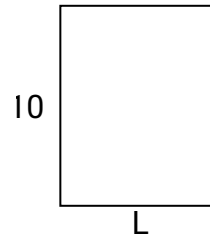
1) Fläche = $8u^2$



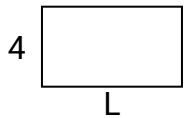
2) Fläche = $63u^2$



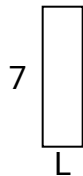
3) Fläche = $80u^2$



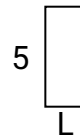
4) Fläche = $28u^2$



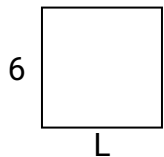
5) Fläche = $14u^2$



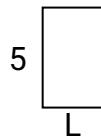
6) Fläche = $10u^2$



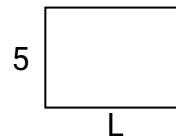
7) Fläche = $36u^2$




8) Fläche = $15u^2$



9) Fläche = $35u^2$



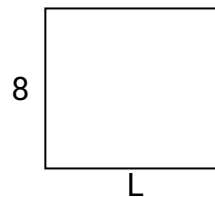
10) Fläche = $20u^2$



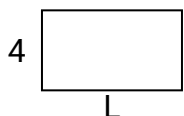
11) Fläche = $40u^2$



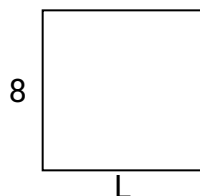
12) Fläche = $72u^2$



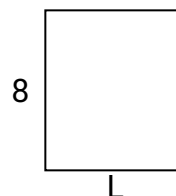
13) Fläche = $28u^2$



14) Fläche = $64u^2$



15) Fläche = $56u^2$

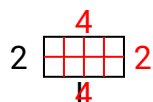


1. _____
2. _____
3. _____
4. _____
5. _____
6. _____
7. _____
8. _____
9. _____
10. _____
11. _____
12. _____
13. _____
14. _____
15. _____

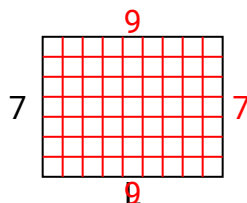


Berechne den Wert von 'L'.

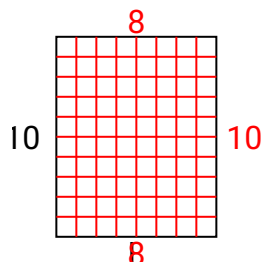
1) Fläche = $8u^2$



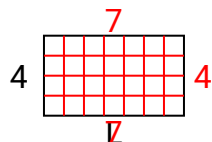
2) Fläche = $63u^2$



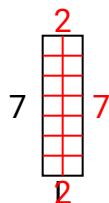
3) Fläche = $80u^2$



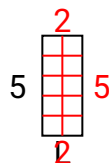
4) Fläche = $28u^2$



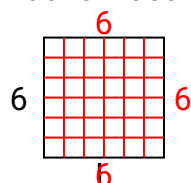
5) Fläche = $14u^2$



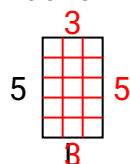
6) Fläche = $10u^2$



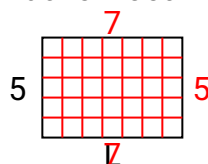
7) Fläche = $36u^2$



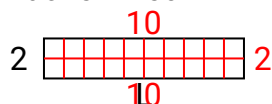
8) Fläche = $15u^2$



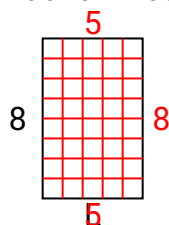
9) Fläche = $35u^2$



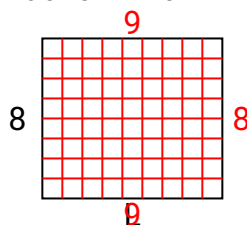
10) Fläche = $20u^2$



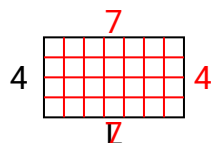
11) Fläche = $40u^2$



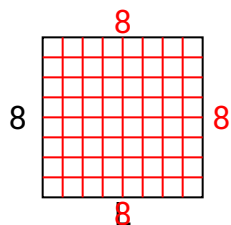
12) Fläche = $72u^2$



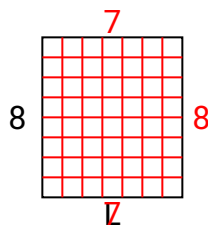
13) Fläche = $28u^2$



14) Fläche = $64u^2$



15) Fläche = $56u^2$

**Antworten**

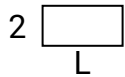
1. **4**
2. **9**
3. **8**
4. **7**
5. **2**
6. **2**
7. **6**
8. **3**
9. **7**
10. **10**
11. **5**
12. **9**
13. **7**
14. **8**
15. **7**



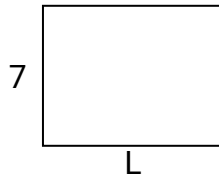
Berechne den Wert von 'L'.

Antworten

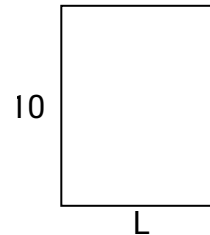
1) Fläche = $8u^2$



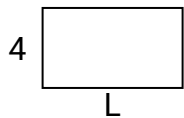
2) Fläche = $63u^2$



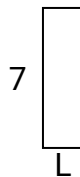
3) Fläche = $80u^2$



4) Fläche = $28u^2$



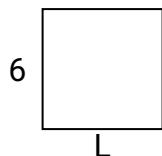
5) Fläche = $14u^2$



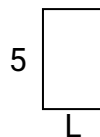
6) Fläche = $10u^2$



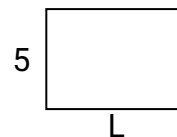
7) Fläche = $36u^2$



8) Fläche = $15u^2$



9) Fläche = $35u^2$



1. _____
2. _____
3. _____
4. _____
5. _____
6. _____
7. _____
8. _____
9. _____
10. _____
11. _____
12. _____
13. _____
14. _____
15. _____