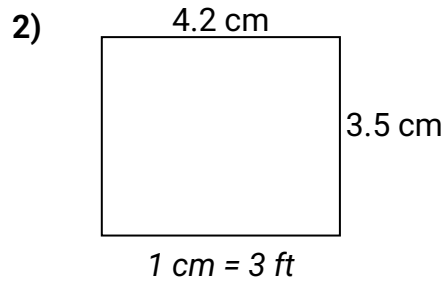
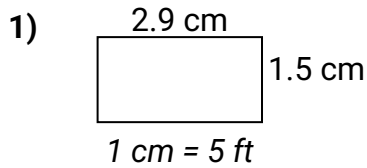




**Bestimmen Sie die tatsächliche Breite, Höhe und Fläche jedes Maßstabsrechtecks. Runden Sie den Bereich auf die nächste ganze Zahl.**

**Antworten**



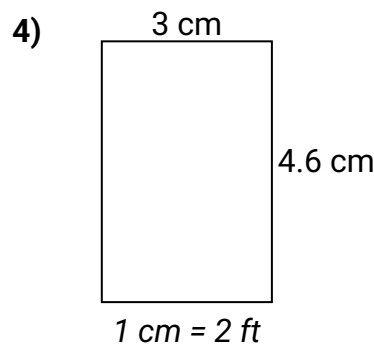
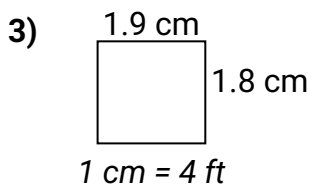
1. \_\_\_\_\_

2. \_\_\_\_\_

3. \_\_\_\_\_

4. \_\_\_\_\_

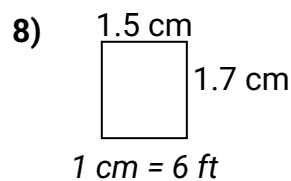
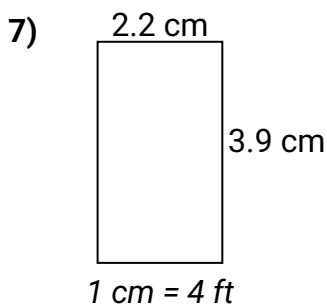
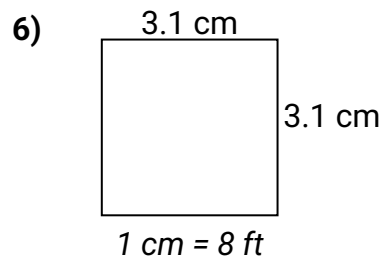
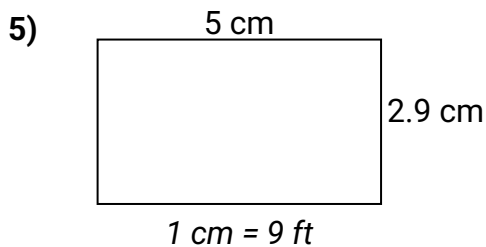
5. \_\_\_\_\_



6. \_\_\_\_\_

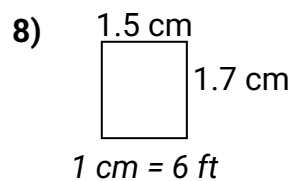
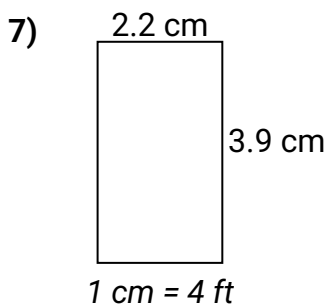
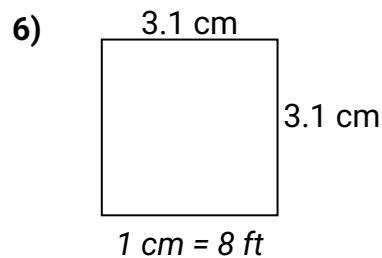
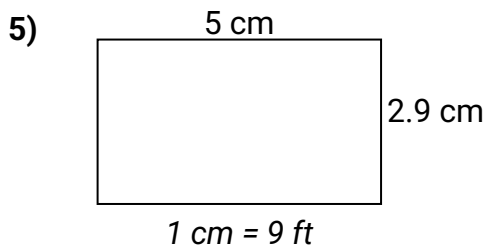
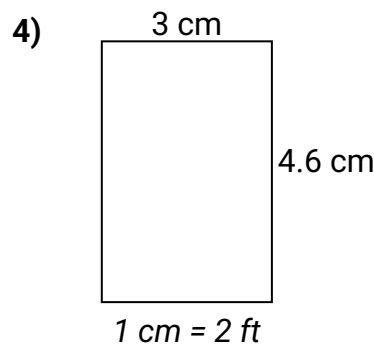
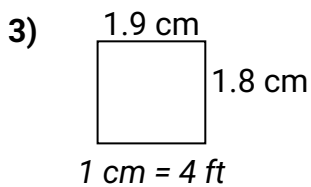
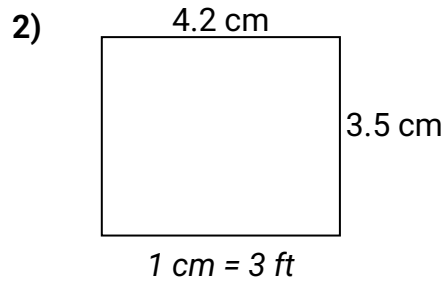
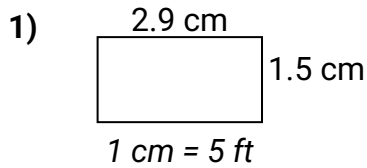
7. \_\_\_\_\_

8. \_\_\_\_\_





Bestimmen Sie die tatsächliche Breite, Höhe und Fläche jedes Maßstabsrechtecks. Runden Sie den Bereich auf die nächste ganze Zahl.

**Antworten**

1.	<u>14.5</u>	<u>7.5</u>	<u>109</u>
2.	<u>12.6</u>	<u>10.5</u>	<u>132</u>
3.	<u>7.6</u>	<u>7.2</u>	<u>55</u>
4.	<u>6</u>	<u>9.2</u>	<u>55</u>
5.	<u>45</u>	<u>26.1</u>	<u>1.175</u>
6.	<u>24.8</u>	<u>24.8</u>	<u>615</u>
7.	<u>8.8</u>	<u>15.6</u>	<u>137</u>
8.	<u>9</u>	<u>10.2</u>	<u>92</u>