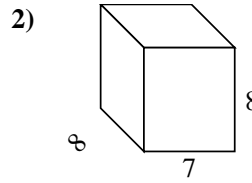
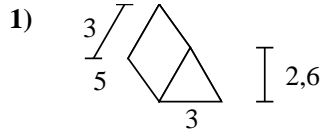
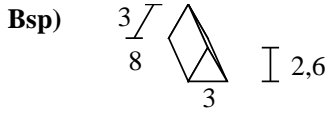




Berechne die Oberfläche jeder Figur.

Antworten



Bsp. **79,8 cm²**

1. _____

2. _____

3. _____

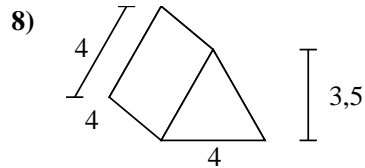
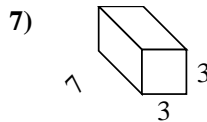
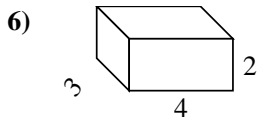
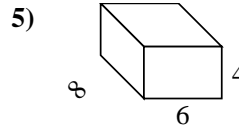
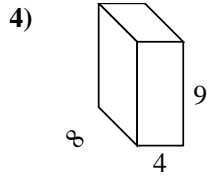
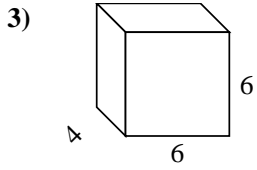
4. _____

5. _____

6. _____

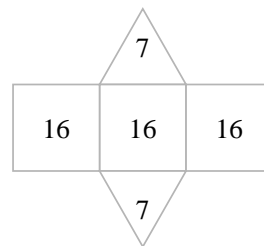
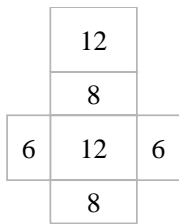
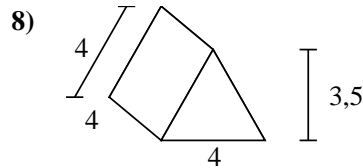
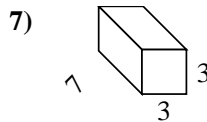
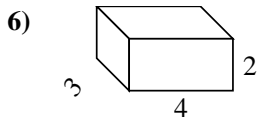
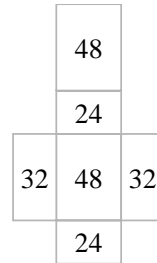
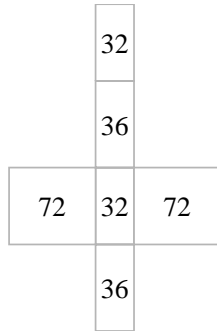
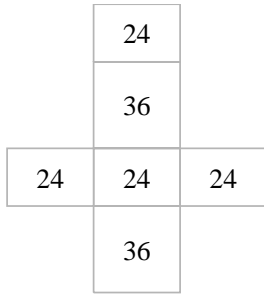
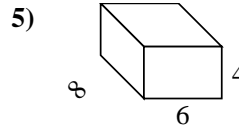
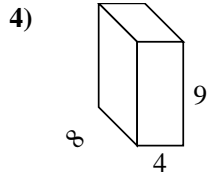
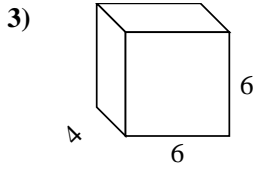
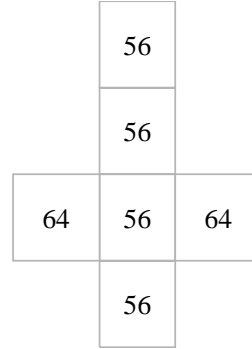
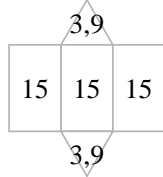
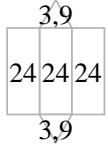
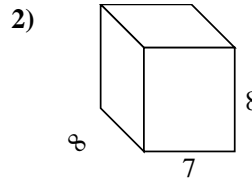
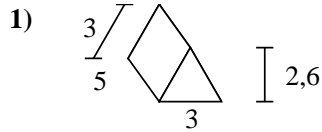
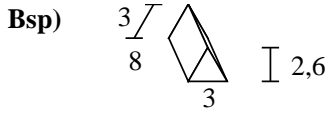
7. _____

8. _____





Berechne die Oberfläche jeder Figur.



Antworten

- Bsp. 79,8 cm²
1. 52,8 cm²
2. 352 cm²
3. 168 cm²
4. 280 cm²
5. 208 cm²
6. 52 cm²
7. 102 cm²
8. 62 cm²