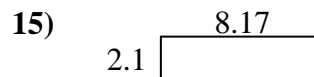
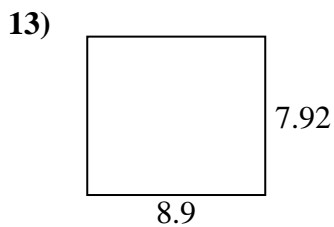
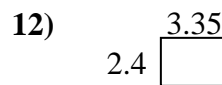
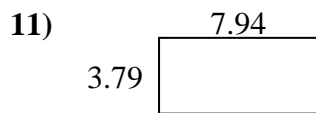
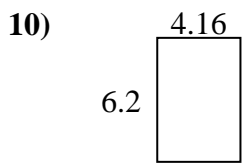
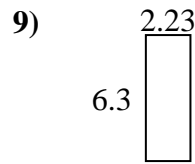
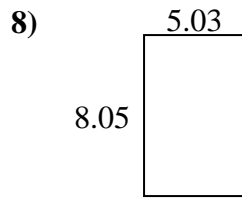
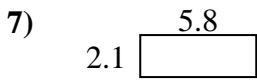
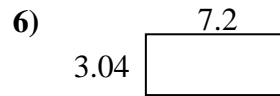
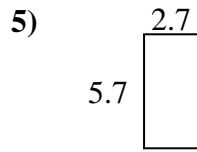
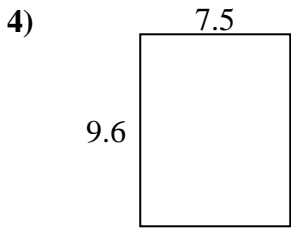
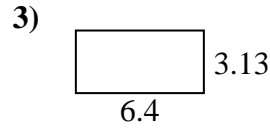
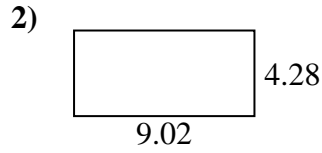




Finden Sie den Umfang und die Fläche jeder Figur. Antworten Sie auf das nächste Zehntel.

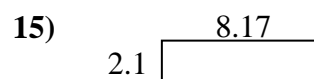
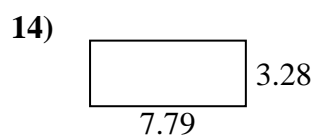
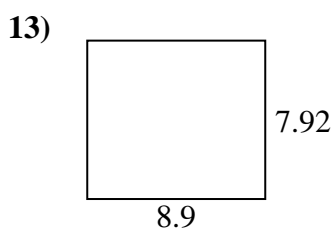
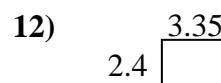
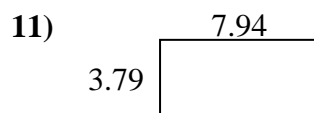
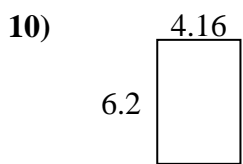
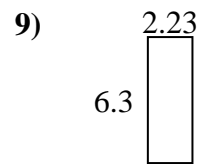
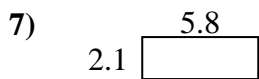
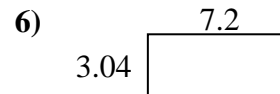
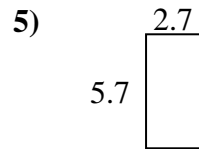
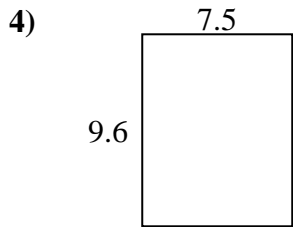
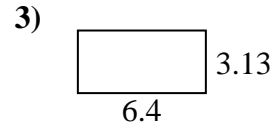



Antworten

1. _____
2. _____
3. _____
4. _____
5. _____
6. _____
7. _____
8. _____
9. _____
10. _____
11. _____
12. _____
13. _____
14. _____
15. _____



Finden Sie den Umfang und die Fläche jeder Figur. Antworten Sie auf das nächste Zehntel.

**Antworten**

1.	<u>30,7</u>	<u>25,2</u>
2.	<u>38,6</u>	<u>26,6</u>
3.	<u>20,0</u>	<u>19,1</u>
4.	<u>72,0</u>	<u>34,2</u>
5.	<u>15,4</u>	<u>16,8</u>
6.	<u>21,9</u>	<u>20,5</u>
7.	<u>12,2</u>	<u>15,8</u>
8.	<u>40,5</u>	<u>26,2</u>
9.	<u>14,0</u>	<u>17,1</u>
10.	<u>25,8</u>	<u>20,7</u>
11.	<u>30,1</u>	<u>23,5</u>
12.	<u>8,0</u>	<u>11,5</u>
13.	<u>70,5</u>	<u>33,6</u>
14.	<u>25,6</u>	<u>22,1</u>
15.	<u>17,2</u>	<u>20,5</u>