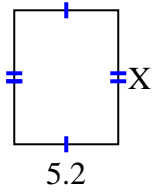




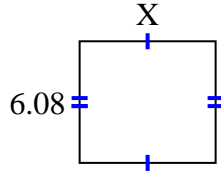
Finden Sie den Wert von X für jede Figur. Jede Zahl ist in Zentimetern (cm) angegeben. Nicht maßstabsgetreu.

Antworten

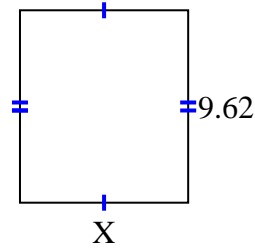
1) area = $34,84 \text{ cm}^2$



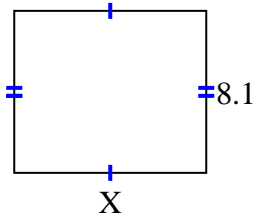
2) area = $41,344 \text{ cm}^2$



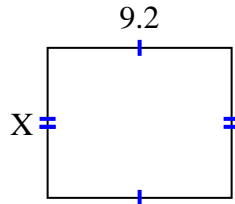
3) area = $80,9042 \text{ cm}^2$



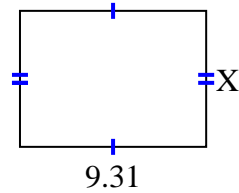
4) area = $77,76 \text{ cm}^2$



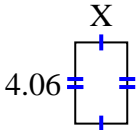
5) area = 69 cm^2



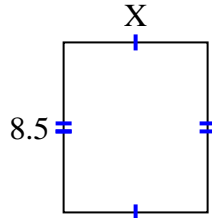
6) area = $63,308 \text{ cm}^2$



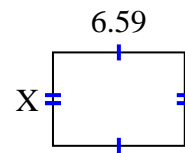
7) area = $10,556 \text{ cm}^2$



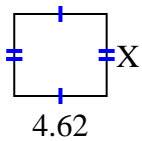
8) area = $61,2 \text{ cm}^2$



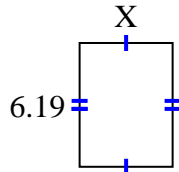
9) area = $30,7753 \text{ cm}^2$



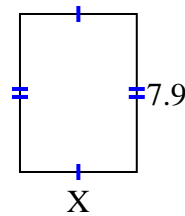
10) area = $18,942 \text{ cm}^2$



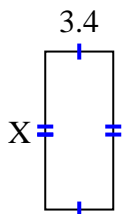
11) area = $28,7835 \text{ cm}^2$



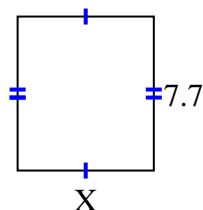
12) area = $46,136 \text{ cm}^2$



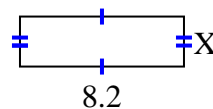
13) area = $26,86 \text{ cm}^2$



14) area = $52,437 \text{ cm}^2$



15) area = $20,5 \text{ cm}^2$



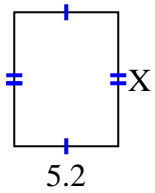
1. _____
2. _____
3. _____
4. _____
5. _____
6. _____
7. _____
8. _____
9. _____
10. _____
11. _____
12. _____
13. _____
14. _____
15. _____



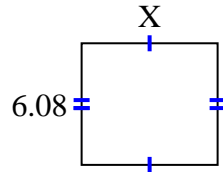
Finden Sie den Wert von X für jede Figur. Jede Zahl ist in Zentimetern (cm) angegeben.

Nicht maßstabsgetreu.

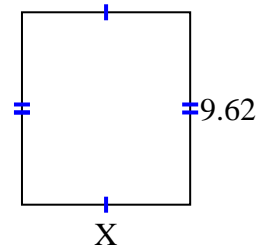
1) area = $34,84 \text{ cm}^2$



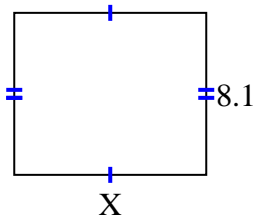
2) area = $41,344 \text{ cm}^2$



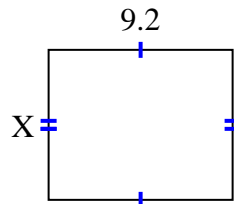
3) area = $80,9042 \text{ cm}^2$



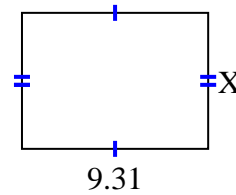
4) area = $77,76 \text{ cm}^2$



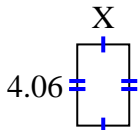
5) area = 69 cm^2



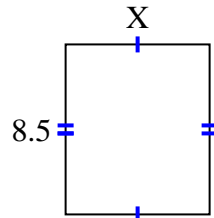
6) area = $63,308 \text{ cm}^2$



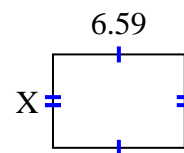
7) area = $10,556 \text{ cm}^2$



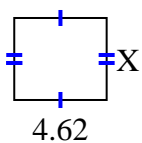
8) area = $61,2 \text{ cm}^2$



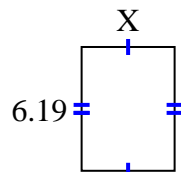
9) area = $30,7753 \text{ cm}^2$



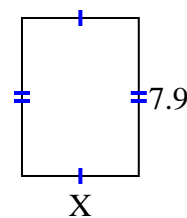
10) area = $18,942 \text{ cm}^2$



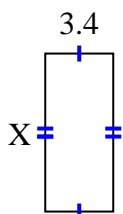
11) area = $28,7835 \text{ cm}^2$



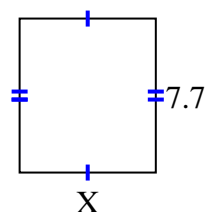
12) area = $46,136 \text{ cm}^2$



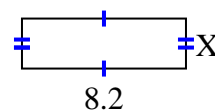
13) area = $26,86 \text{ cm}^2$



14) area = $52,437 \text{ cm}^2$



15) area = $20,5 \text{ cm}^2$

**Antworten**1. 6.72. 6.83. 8.414. 9.65. 7.56. 6.87. 2.68. 7.29. 4.6710. 4.111. 4.6512. 5.8413. 7.914. 6.8115. 2.5