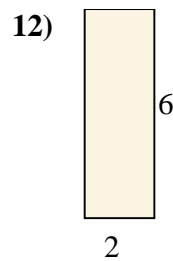
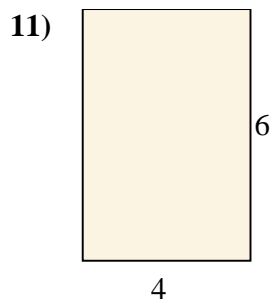
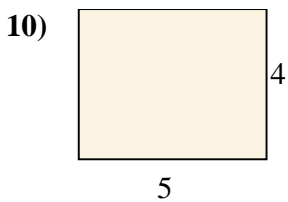
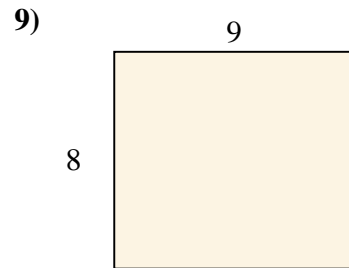
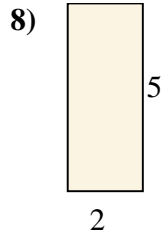
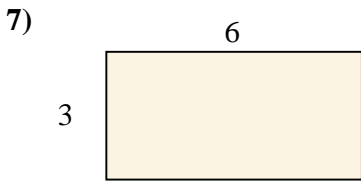
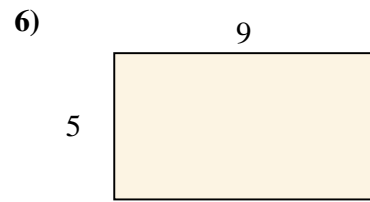
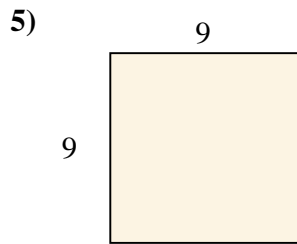
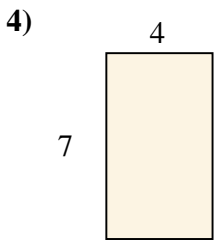
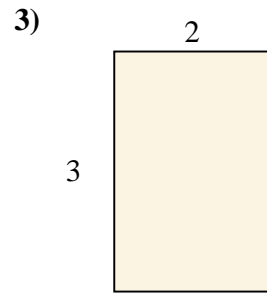
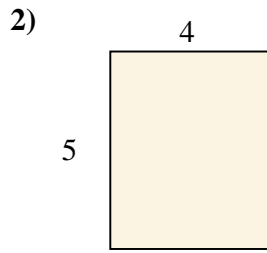
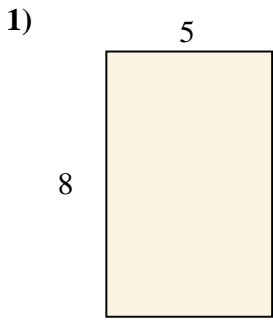




Berechne die Fläche der gezeigten Rechtecke.

**Antworten**

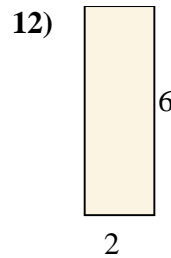
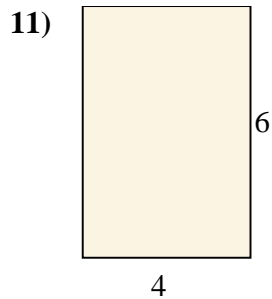
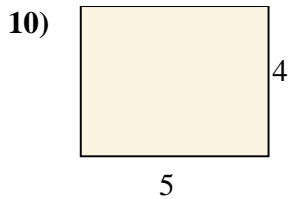
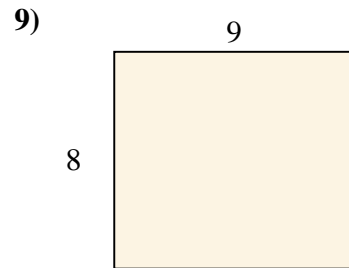
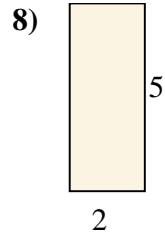
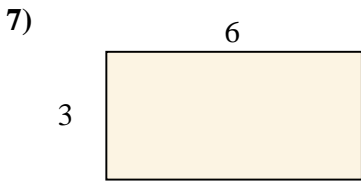
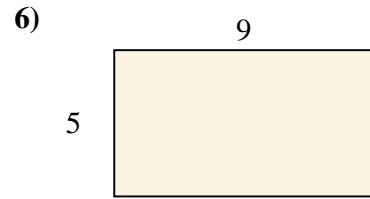
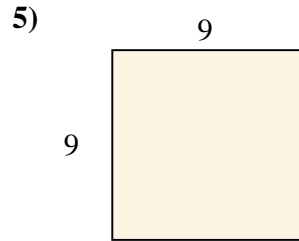
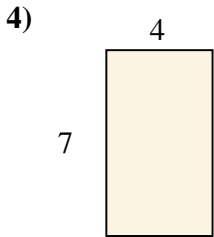
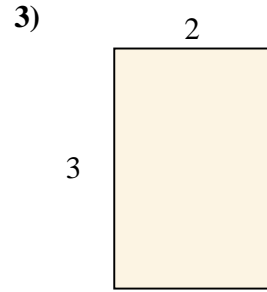
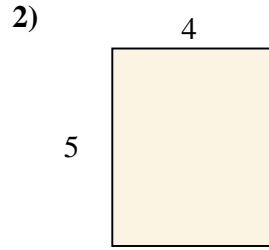
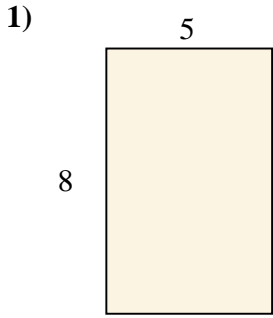


- 1. \_\_\_\_\_
- 2. \_\_\_\_\_
- 3. \_\_\_\_\_
- 4. \_\_\_\_\_
- 5. \_\_\_\_\_
- 6. \_\_\_\_\_
- 7. \_\_\_\_\_
- 8. \_\_\_\_\_
- 9. \_\_\_\_\_
- 10. \_\_\_\_\_
- 11. \_\_\_\_\_
- 12. \_\_\_\_\_



Berechne die Fläche der gezeigten Rechtecke.

**Antworten**



1. 40

2. 20

3. 6

4. 28

5. 81

6. 45

7. 18

8. 10

9. 72

10. 20

11. 24

12. 12