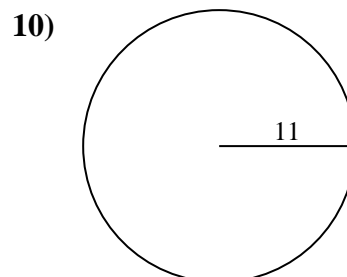
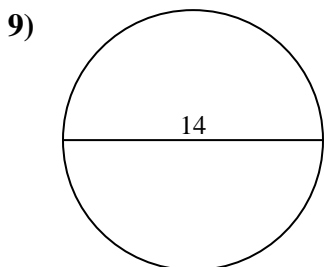
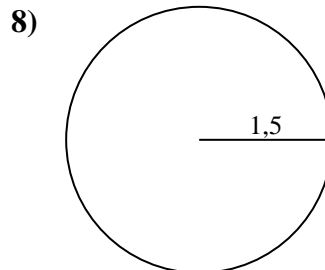
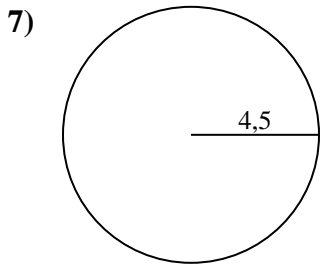
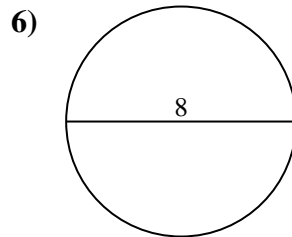
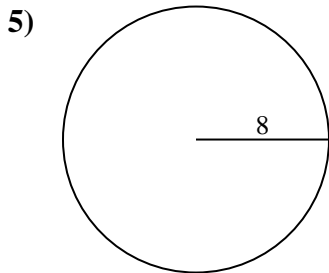
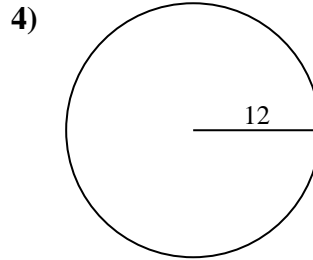
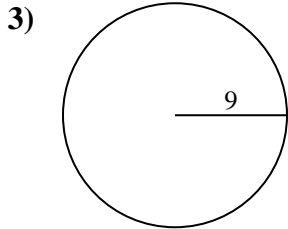
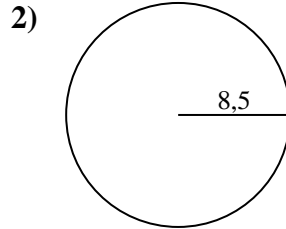
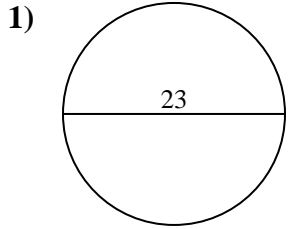




Berechne jeden Kreisumfang. Die Kreise sind nicht maßstäblich.

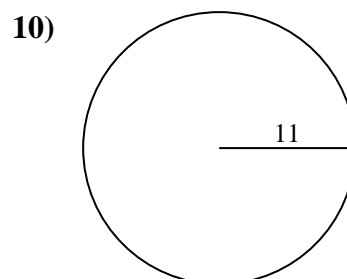
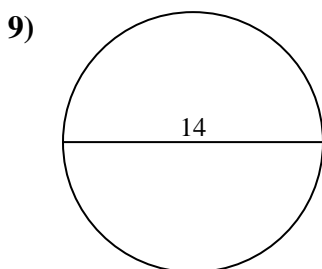
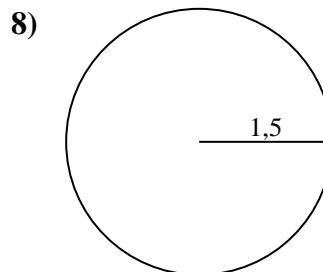
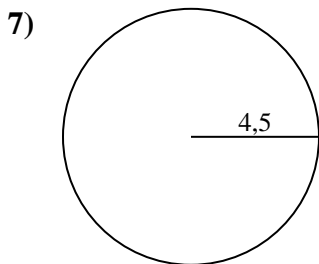
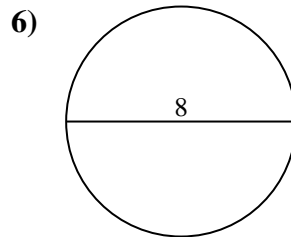
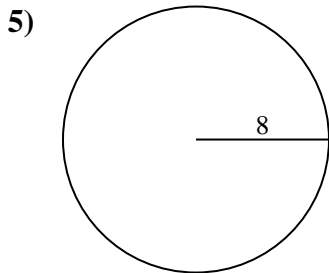
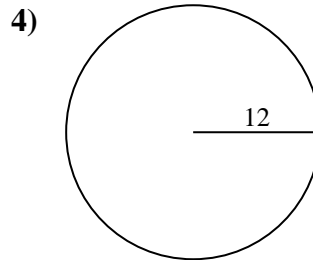
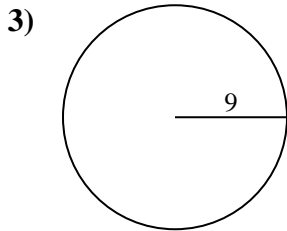
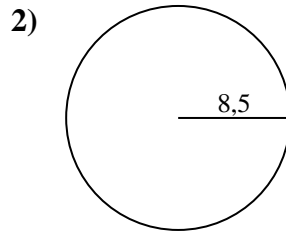
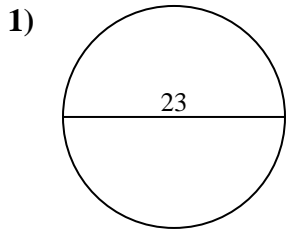


**Antworten**

- 1. \_\_\_\_\_
- 2. \_\_\_\_\_
- 3. \_\_\_\_\_
- 4. \_\_\_\_\_
- 5. \_\_\_\_\_
- 6. \_\_\_\_\_
- 7. \_\_\_\_\_
- 8. \_\_\_\_\_
- 9. \_\_\_\_\_
- 10. \_\_\_\_\_



Berechne jeden Kreisumfang. Die Kreise sind nicht maßstäblich.

**Antworten**1. 72,26 cm2. 53,41 cm3. 56,55 cm4. 75,4 cm5. 50,27 cm6. 25,13 cm7. 28,27 cm8. 9,42 cm9. 43,98 cm10. 69,12 cm



Berechne jeden Kreisumfang. Die Kreise sind nicht maßstäblich.

43,98 cm

72,26 cm

69,12 cm

53,41 cm

9,42 cm

75,4 cm

50,27 cm

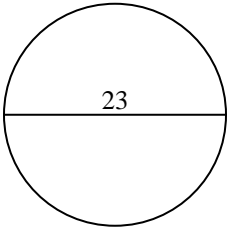
25,13 cm

56,55 cm

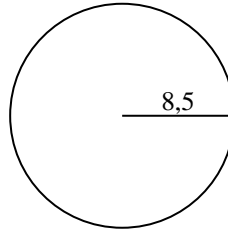
28,27 cm

**Antworten**

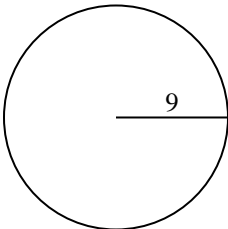
1)



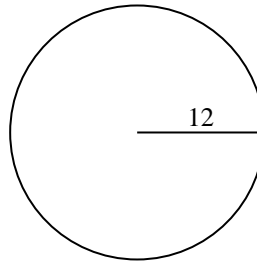
2)



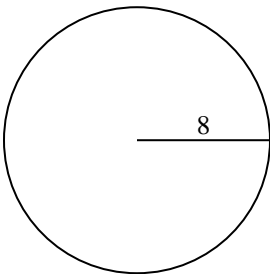
3)



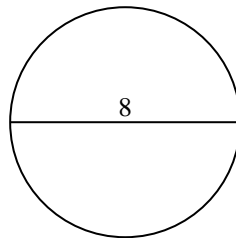
4)



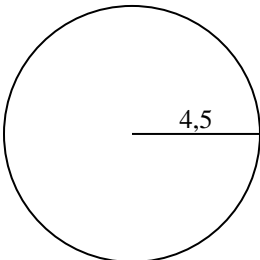
5)



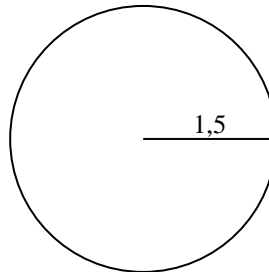
6)



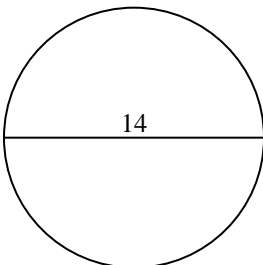
7)



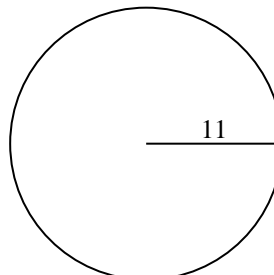
8)



9)



10)



- 1. \_\_\_\_\_
- 2. \_\_\_\_\_
- 3. \_\_\_\_\_
- 4. \_\_\_\_\_
- 5. \_\_\_\_\_
- 6. \_\_\_\_\_
- 7. \_\_\_\_\_
- 8. \_\_\_\_\_
- 9. \_\_\_\_\_
- 10. \_\_\_\_\_