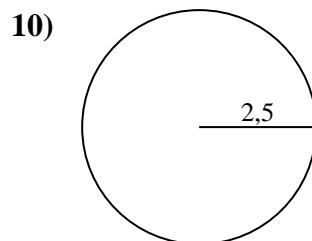
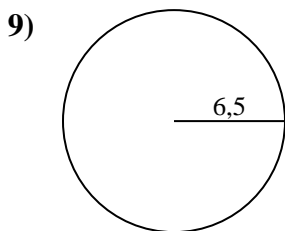
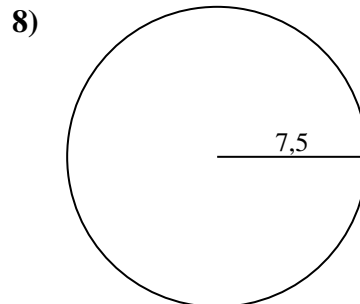
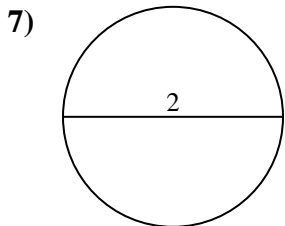
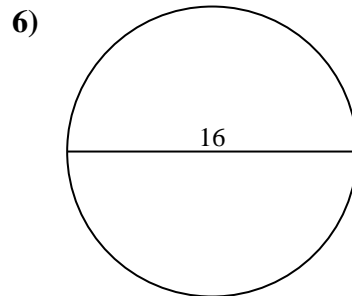
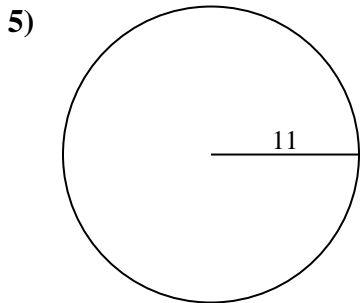
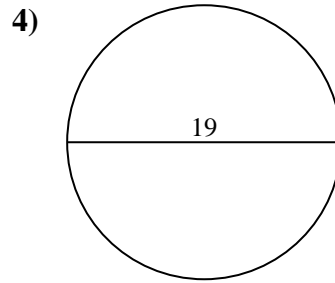
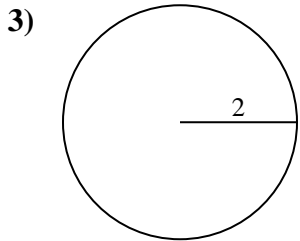
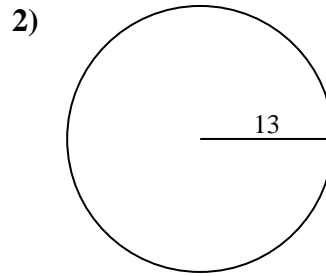
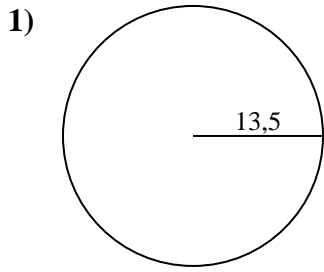




Berechne jeden Kreisumfang. Die Kreise sind nicht maßstäblich.

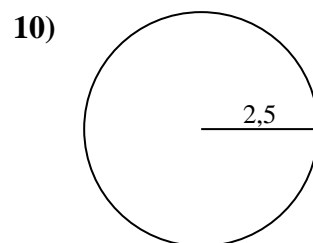
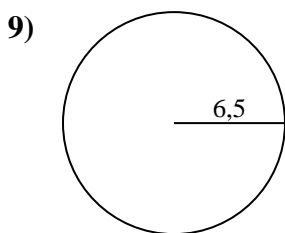
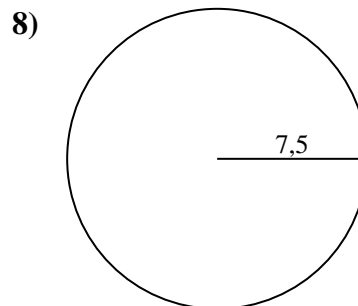
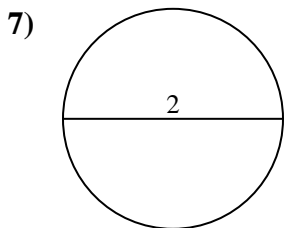
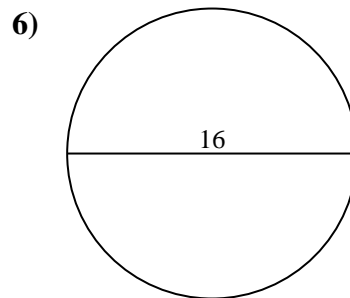
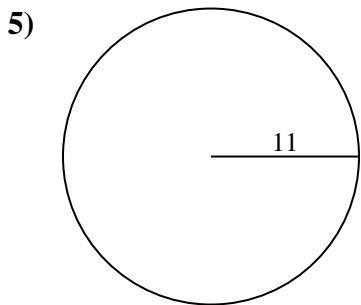
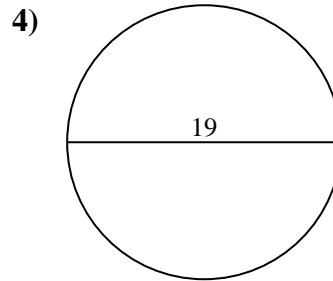
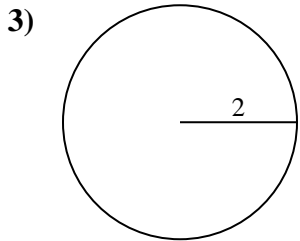
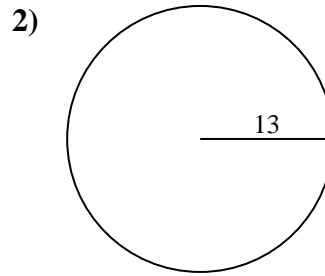
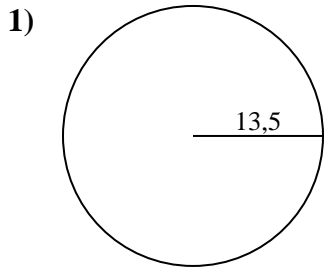


**Antworten**

- 1. \_\_\_\_\_
- 2. \_\_\_\_\_
- 3. \_\_\_\_\_
- 4. \_\_\_\_\_
- 5. \_\_\_\_\_
- 6. \_\_\_\_\_
- 7. \_\_\_\_\_
- 8. \_\_\_\_\_
- 9. \_\_\_\_\_
- 10. \_\_\_\_\_



Berechne jeden Kreisumfang. Die Kreise sind nicht maßstäblich.

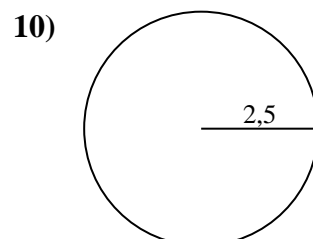
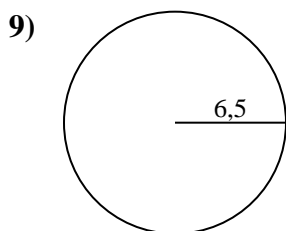
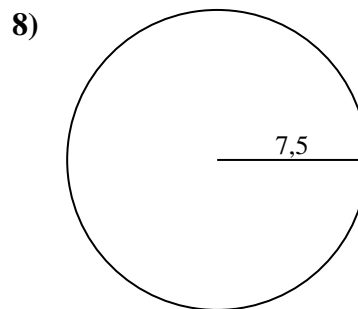
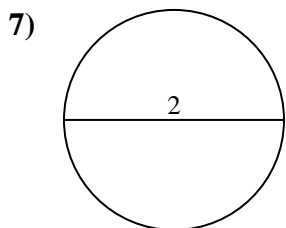
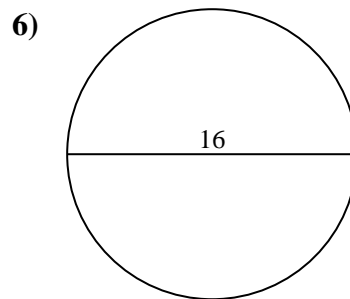
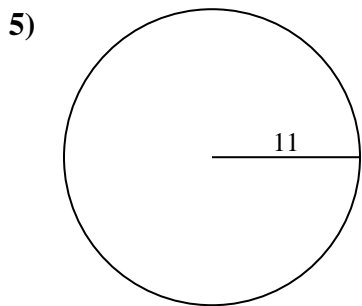
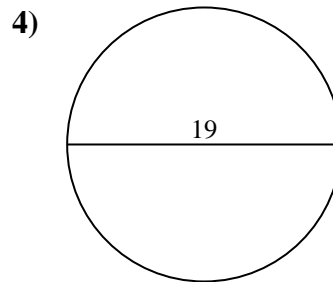
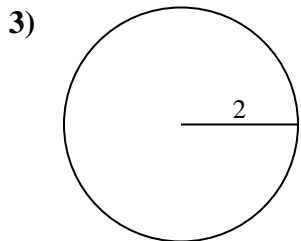
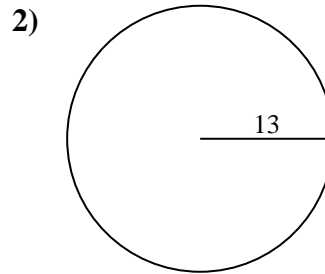
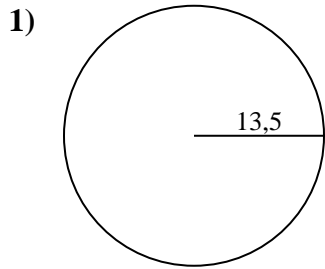
**Antworten**1. **84,82 cm**2. **81,68 cm**3. **12,57 cm**4. **59,69 cm**5. **69,12 cm**6. **50,27 cm**7. **6,28 cm**8. **47,12 cm**9. **40,84 cm**10. **15,71 cm**



**Berechne jeden Kreisumfang. Die Kreise sind nicht maßstäblich.**

|          |          |          |          |          |
|----------|----------|----------|----------|----------|
| 69,12 cm | 6,28 cm  | 81,68 cm | 15,71 cm | 12,57 cm |
| 50,27 cm | 47,12 cm | 84,82 cm | 59,69 cm | 40,84 cm |

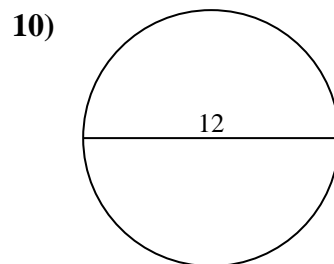
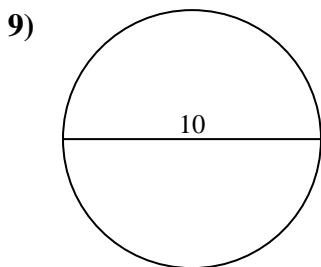
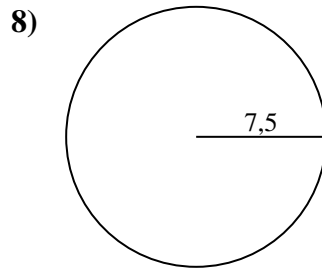
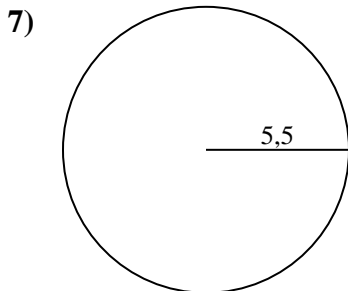
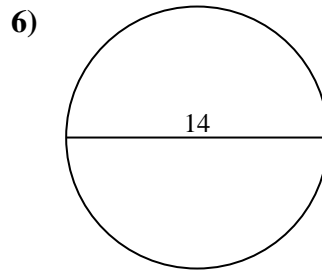
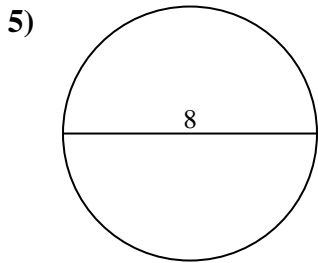
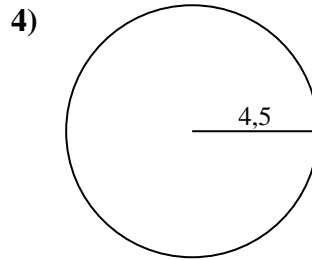
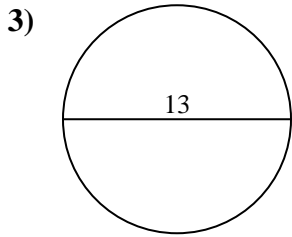
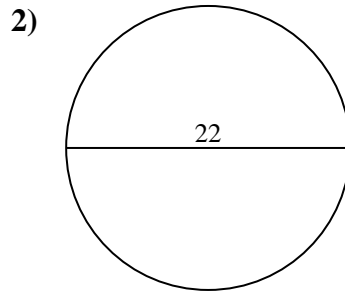
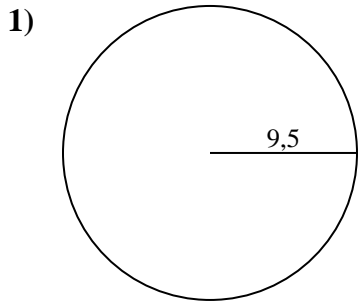
**Antworten**



- 1. \_\_\_\_\_
- 2. \_\_\_\_\_
- 3. \_\_\_\_\_
- 4. \_\_\_\_\_
- 5. \_\_\_\_\_
- 6. \_\_\_\_\_
- 7. \_\_\_\_\_
- 8. \_\_\_\_\_
- 9. \_\_\_\_\_
- 10. \_\_\_\_\_



Berechne jeden Kreisumfang. Die Kreise sind nicht maßstäblich.

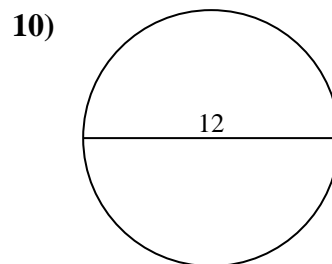
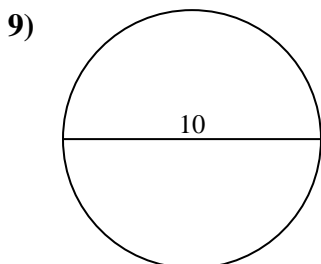
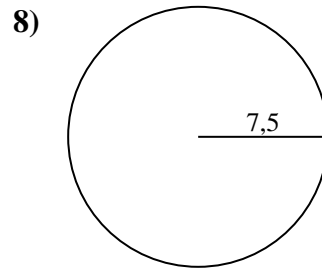
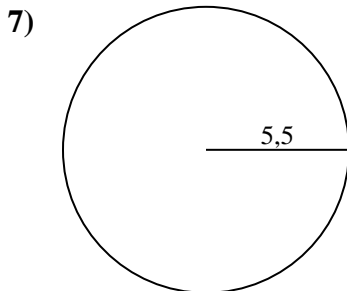
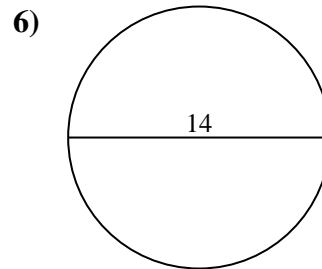
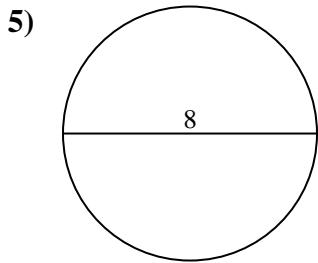
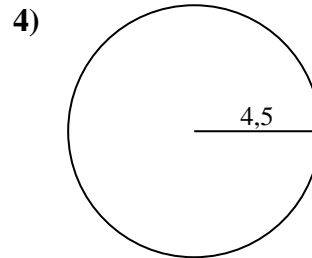
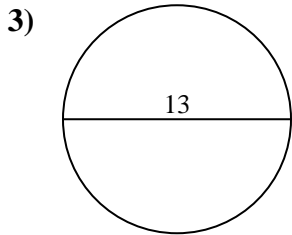
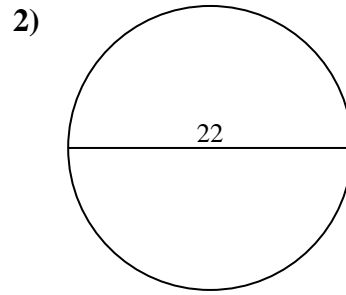
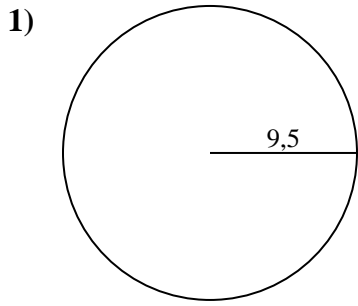


**Antworten**

- 1. \_\_\_\_\_
- 2. \_\_\_\_\_
- 3. \_\_\_\_\_
- 4. \_\_\_\_\_
- 5. \_\_\_\_\_
- 6. \_\_\_\_\_
- 7. \_\_\_\_\_
- 8. \_\_\_\_\_
- 9. \_\_\_\_\_
- 10. \_\_\_\_\_



Berechne jeden Kreisumfang. Die Kreise sind nicht maßstäblich.

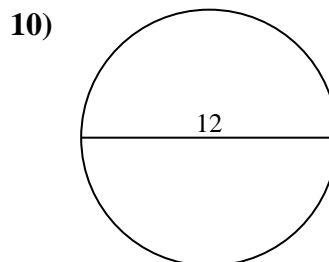
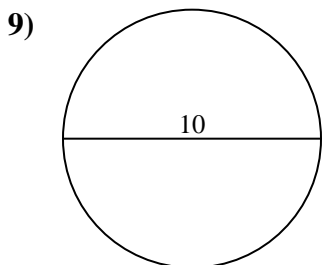
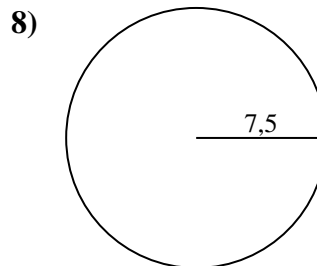
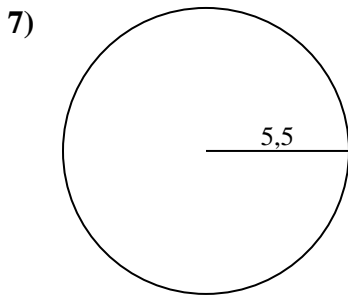
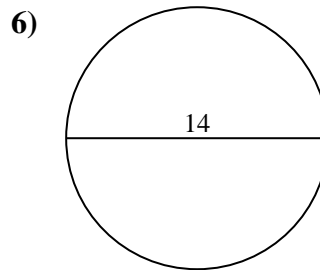
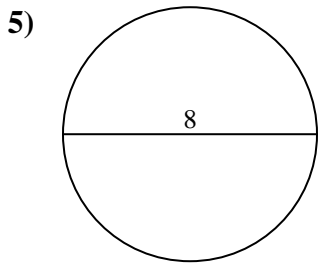
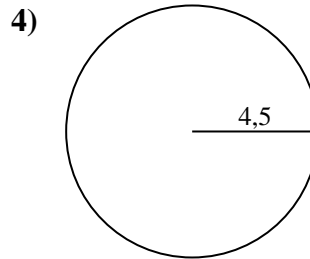
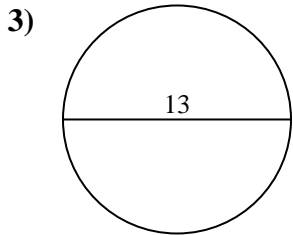
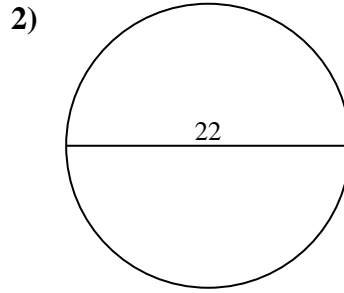
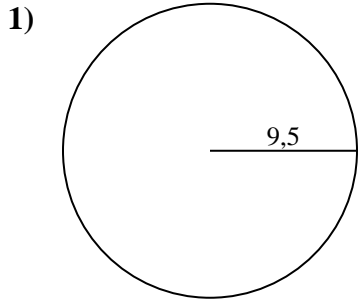
**Antworten**1. **59,69 cm**2. **69,12 cm**3. **40,84 cm**4. **28,27 cm**5. **25,13 cm**6. **43,98 cm**7. **34,56 cm**8. **47,12 cm**9. **31,42 cm**10. **37,7 cm**



Berechne jeden Kreisumfang. Die Kreise sind nicht maßstäblich.

|          |          |          |          |          |
|----------|----------|----------|----------|----------|
| 59,69 cm | 25,13 cm | 31,42 cm | 40,84 cm | 34,56 cm |
| 28,27 cm | 37,7 cm  | 69,12 cm | 47,12 cm | 43,98 cm |

**Antworten**

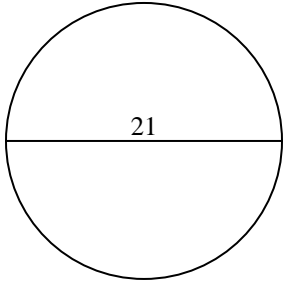


- 1. \_\_\_\_\_
- 2. \_\_\_\_\_
- 3. \_\_\_\_\_
- 4. \_\_\_\_\_
- 5. \_\_\_\_\_
- 6. \_\_\_\_\_
- 7. \_\_\_\_\_
- 8. \_\_\_\_\_
- 9. \_\_\_\_\_
- 10. \_\_\_\_\_

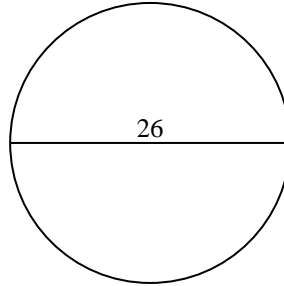


Berechne jeden Kreisumfang. Die Kreise sind nicht maßstäblich.

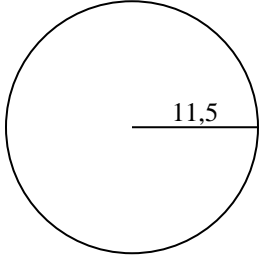
1)



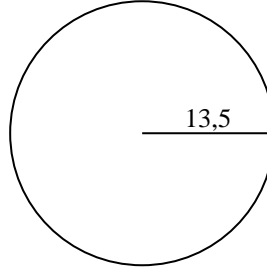
2)



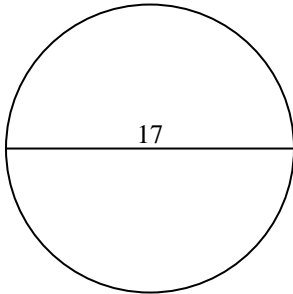
3)



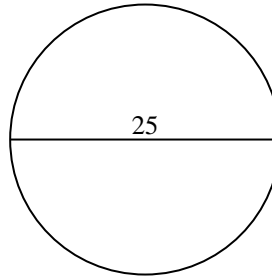
4)



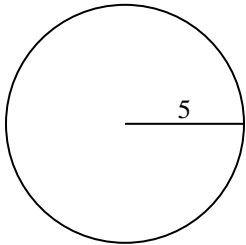
5)



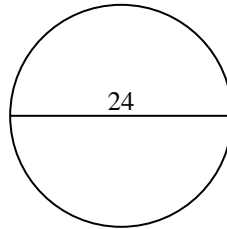
6)



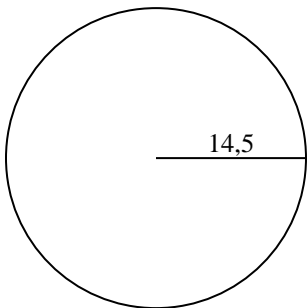
7)



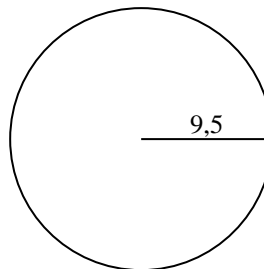
8)



9)



10)

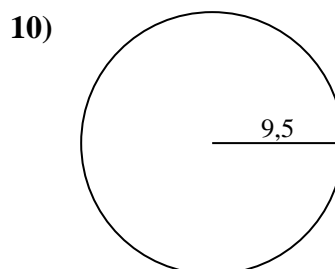
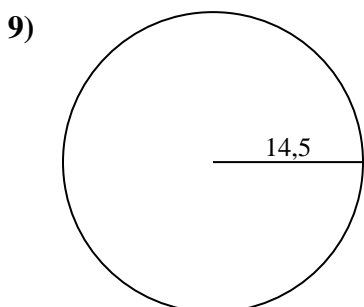
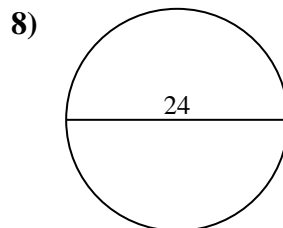
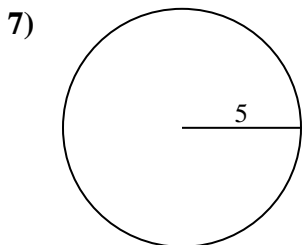
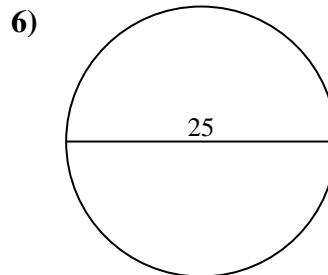
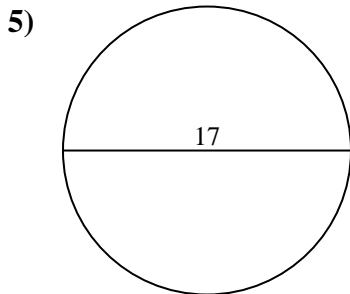
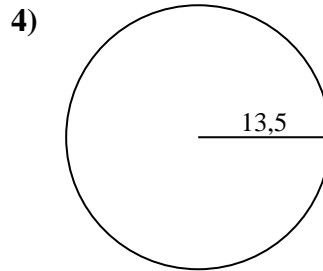
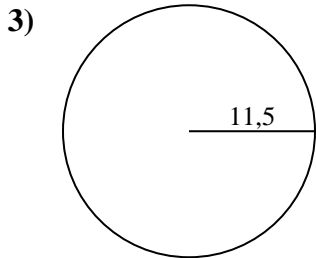
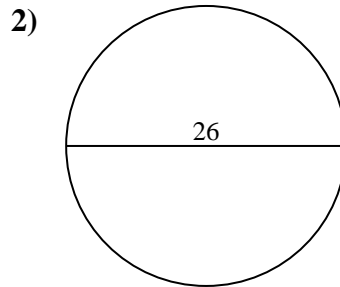
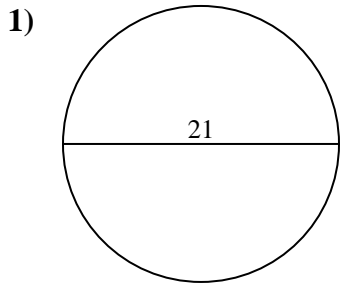


**Antworten**

- 1. \_\_\_\_\_
- 2. \_\_\_\_\_
- 3. \_\_\_\_\_
- 4. \_\_\_\_\_
- 5. \_\_\_\_\_
- 6. \_\_\_\_\_
- 7. \_\_\_\_\_
- 8. \_\_\_\_\_
- 9. \_\_\_\_\_
- 10. \_\_\_\_\_



Berechne jeden Kreisumfang. Die Kreise sind nicht maßstäblich.

**Antworten**1. **65,97 cm**2. **81,68 cm**3. **72,26 cm**4. **84,82 cm**5. **53,41 cm**6. **78,54 cm**7. **31,42 cm**8. **75,4 cm**9. **91,11 cm**10. **59,69 cm**

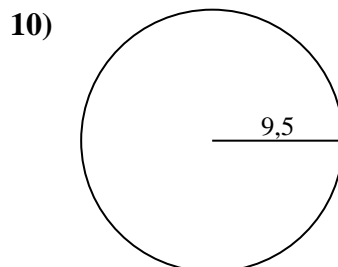
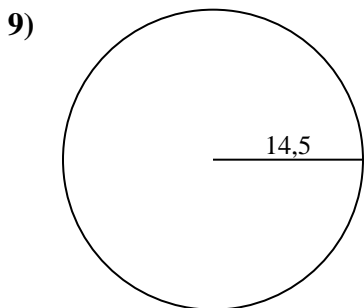
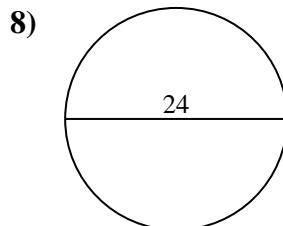
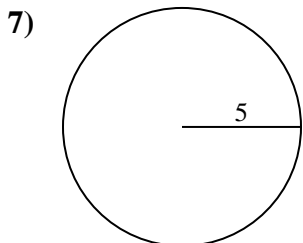
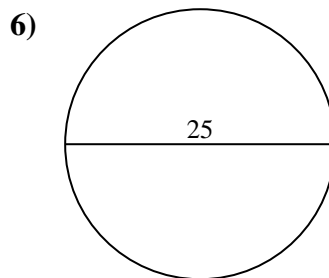
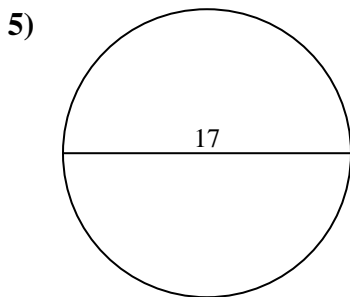
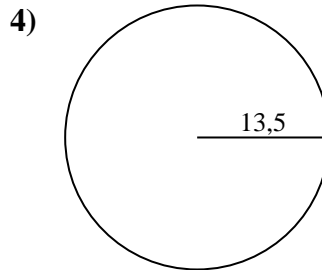
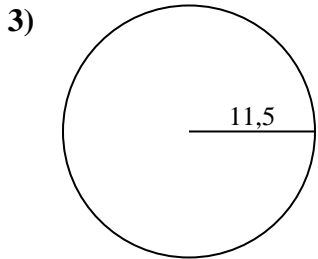
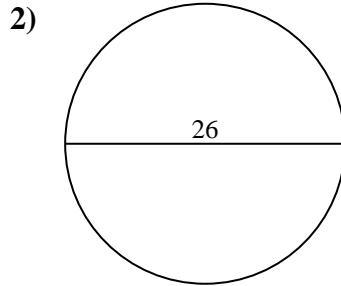
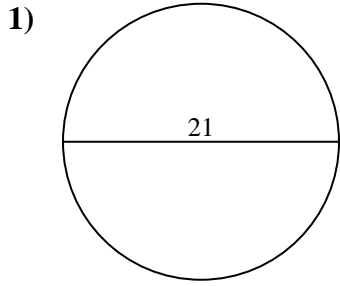




Berechne jeden Kreisumfang. Die Kreise sind nicht maßstäblich.

**Antworten**

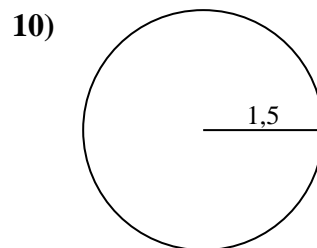
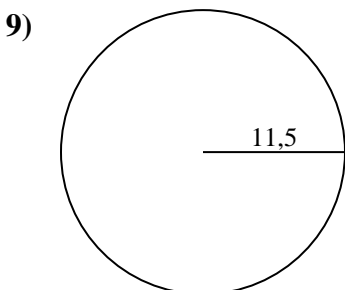
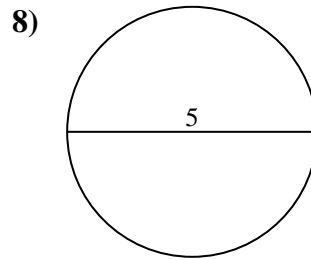
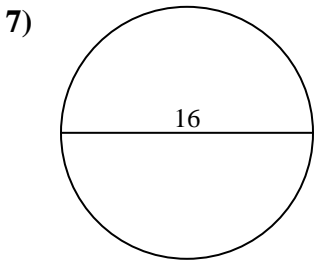
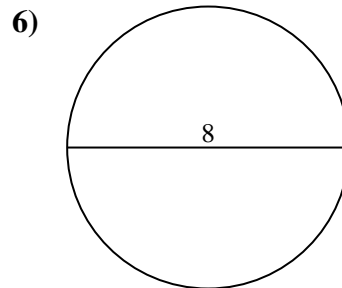
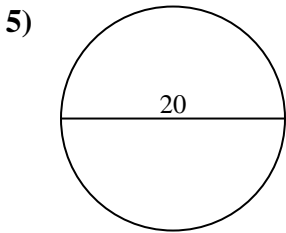
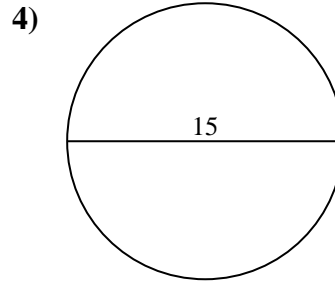
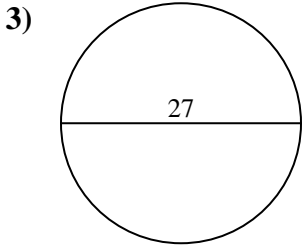
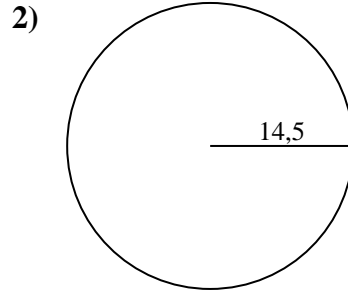
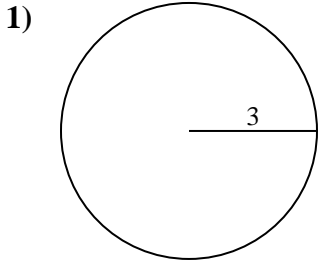
|          |          |          |          |          |
|----------|----------|----------|----------|----------|
| 84,82 cm | 78,54 cm | 53,41 cm | 65,97 cm | 91,11 cm |
| 72,26 cm | 31,42 cm | 75,4 cm  | 59,69 cm | 81,68 cm |



- 1. \_\_\_\_\_
- 2. \_\_\_\_\_
- 3. \_\_\_\_\_
- 4. \_\_\_\_\_
- 5. \_\_\_\_\_
- 6. \_\_\_\_\_
- 7. \_\_\_\_\_
- 8. \_\_\_\_\_
- 9. \_\_\_\_\_
- 10. \_\_\_\_\_



Berechne jeden Kreisumfang. Die Kreise sind nicht maßstäblich.

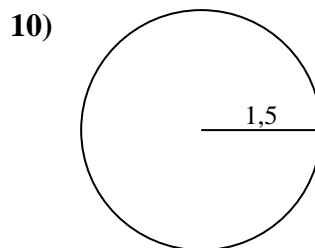
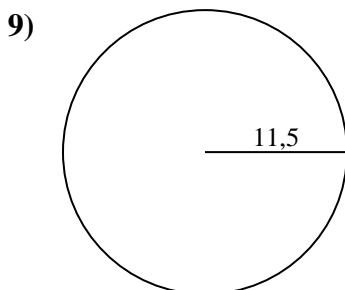
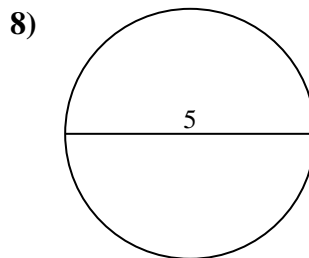
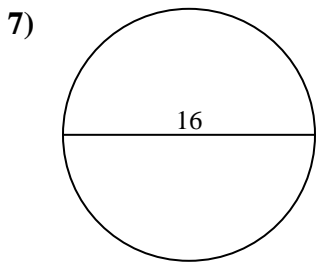
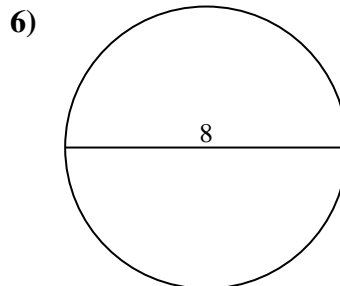
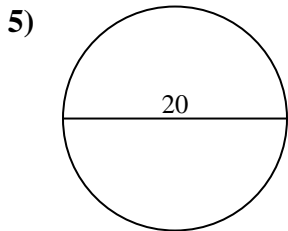
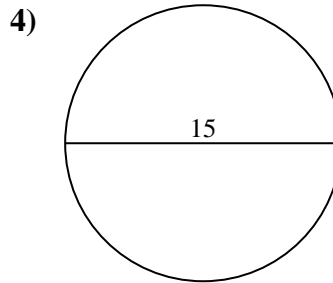
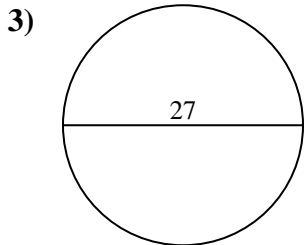
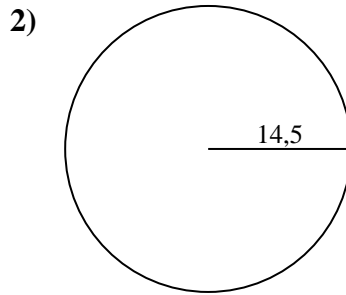
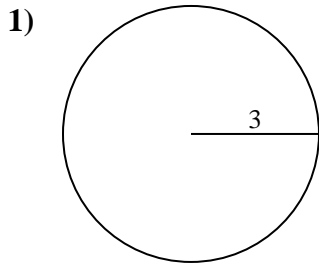


**Antworten**

- 1. \_\_\_\_\_
- 2. \_\_\_\_\_
- 3. \_\_\_\_\_
- 4. \_\_\_\_\_
- 5. \_\_\_\_\_
- 6. \_\_\_\_\_
- 7. \_\_\_\_\_
- 8. \_\_\_\_\_
- 9. \_\_\_\_\_
- 10. \_\_\_\_\_



Berechne jeden Kreisumfang. Die Kreise sind nicht maßstäblich.

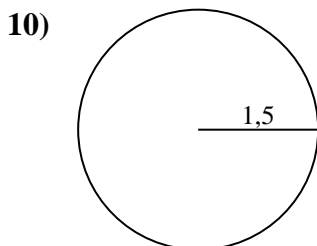
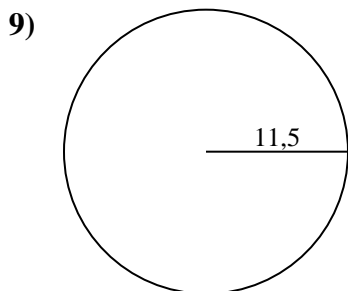
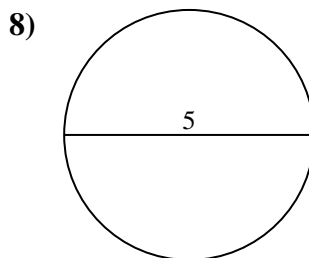
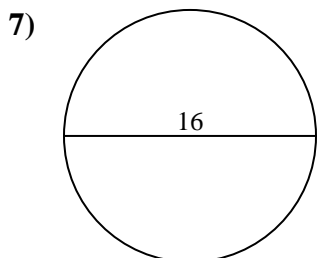
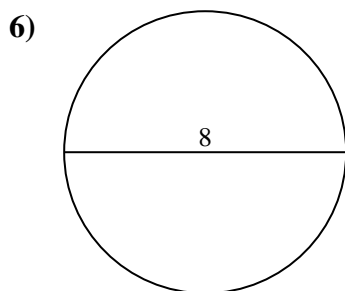
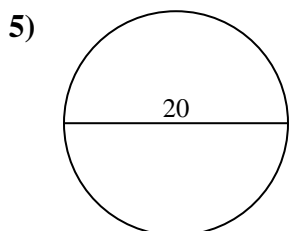
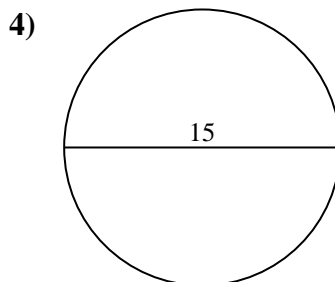
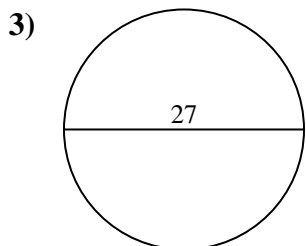
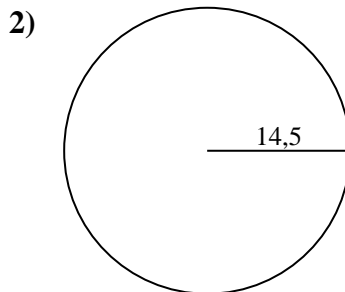
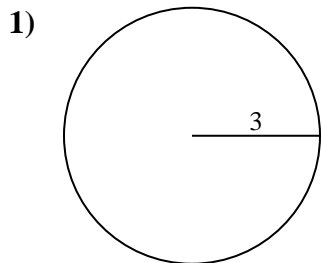
**Antworten**1. **18,85 cm**2. **91,11 cm**3. **84,82 cm**4. **47,12 cm**5. **62,83 cm**6. **25,13 cm**7. **50,27 cm**8. **15,71 cm**9. **72,26 cm**10. **9,42 cm**



Berechne jeden Kreisumfang. Die Kreise sind nicht maßstäblich.

|          |          |          |          |          |
|----------|----------|----------|----------|----------|
| 72,26 cm | 9,42 cm  | 18,85 cm | 62,83 cm | 50,27 cm |
| 91,11 cm | 47,12 cm | 84,82 cm | 15,71 cm | 25,13 cm |

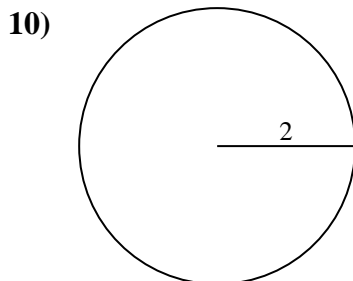
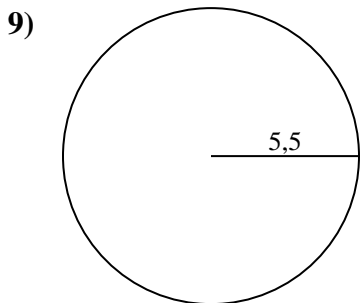
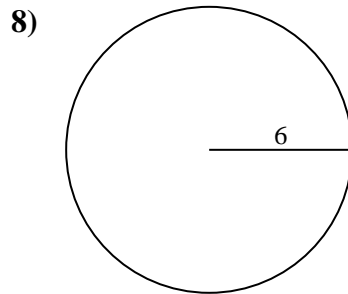
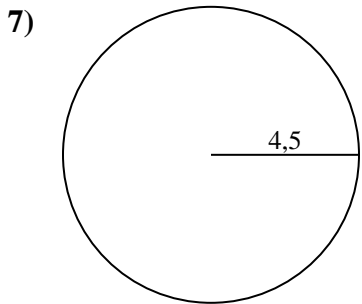
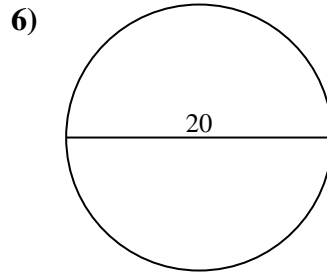
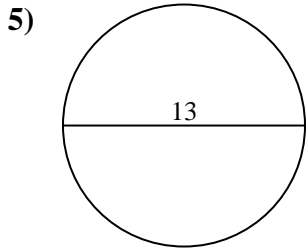
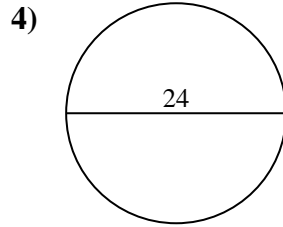
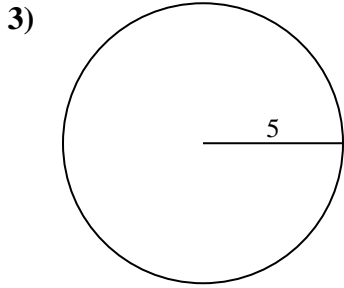
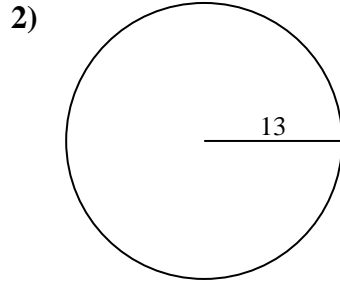
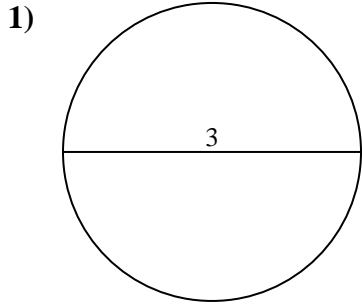
**Antworten**



- 1. \_\_\_\_\_
- 2. \_\_\_\_\_
- 3. \_\_\_\_\_
- 4. \_\_\_\_\_
- 5. \_\_\_\_\_
- 6. \_\_\_\_\_
- 7. \_\_\_\_\_
- 8. \_\_\_\_\_
- 9. \_\_\_\_\_
- 10. \_\_\_\_\_



Berechne jeden Kreisumfang. Die Kreise sind nicht maßstäblich.

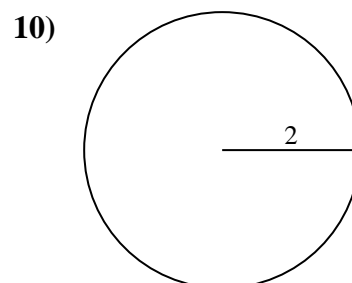
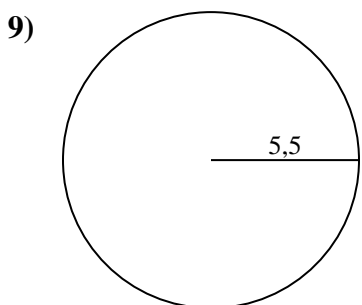
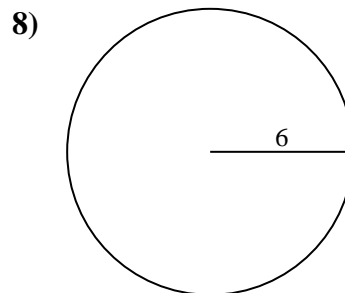
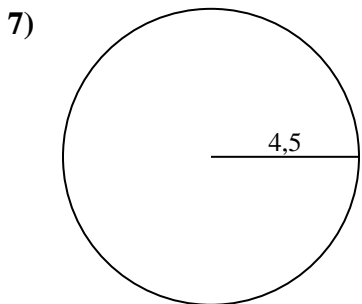
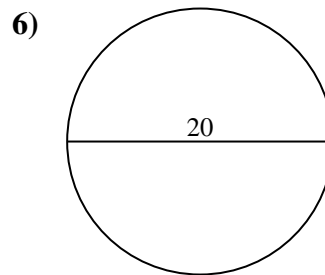
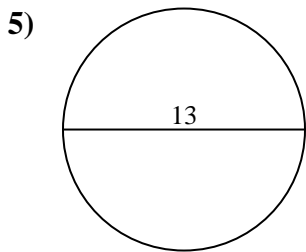
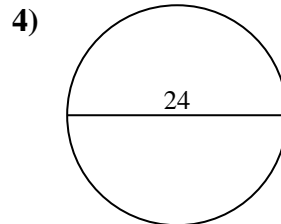
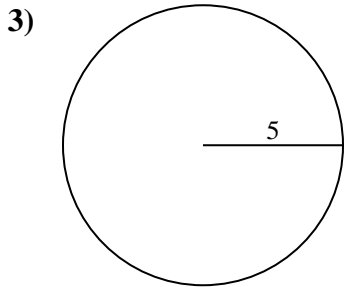
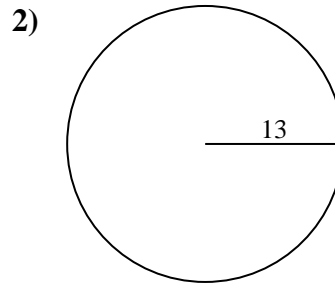
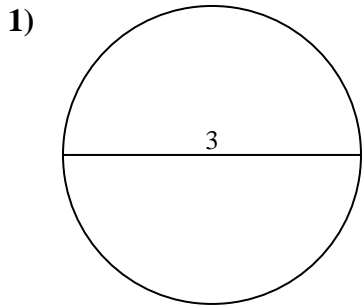


**Antworten**

- 1. \_\_\_\_\_
- 2. \_\_\_\_\_
- 3. \_\_\_\_\_
- 4. \_\_\_\_\_
- 5. \_\_\_\_\_
- 6. \_\_\_\_\_
- 7. \_\_\_\_\_
- 8. \_\_\_\_\_
- 9. \_\_\_\_\_
- 10. \_\_\_\_\_



Berechne jeden Kreisumfang. Die Kreise sind nicht maßstäblich.

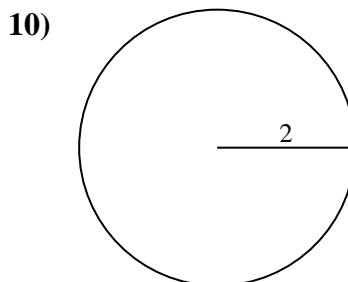
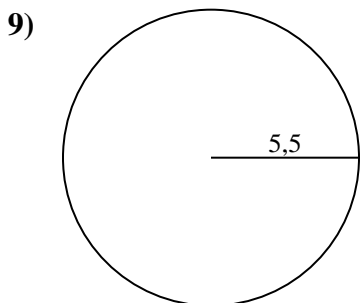
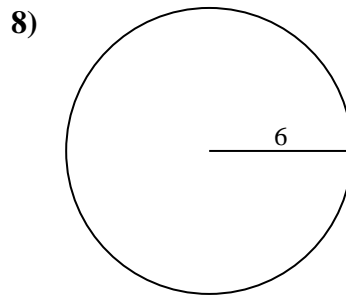
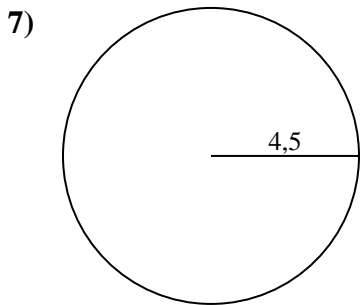
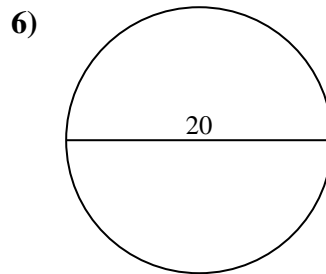
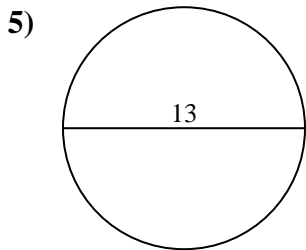
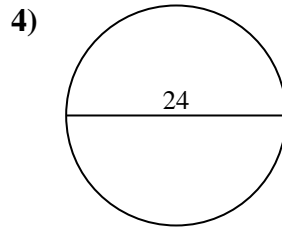
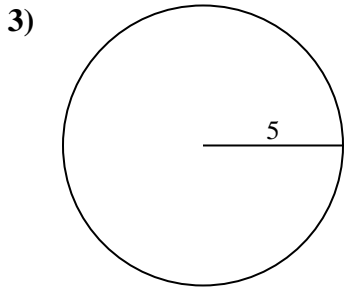
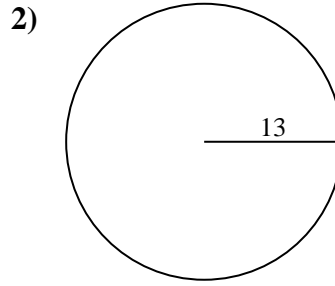
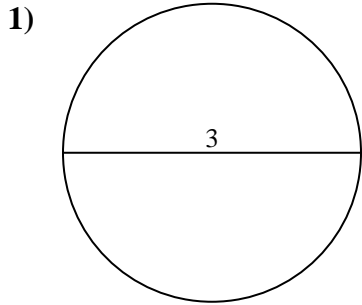
**Antworten**1. 9,42 cm2. 81,68 cm3. 31,42 cm4. 75,4 cm5. 40,84 cm6. 62,83 cm7. 28,27 cm8. 37,7 cm9. 34,56 cm10. 12,57 cm



Berechne jeden Kreisumfang. Die Kreise sind nicht maßstäblich.

**Antworten**

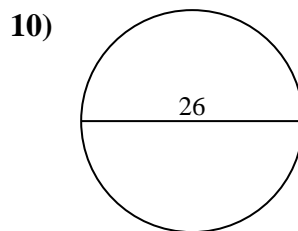
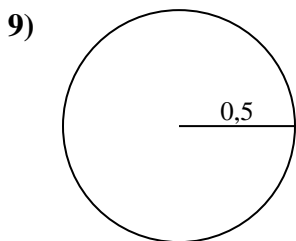
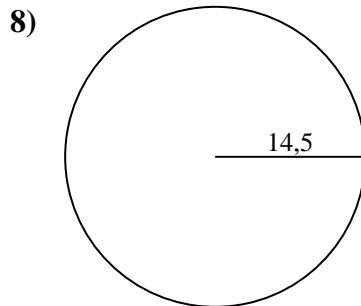
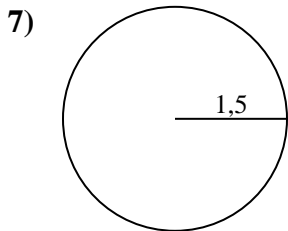
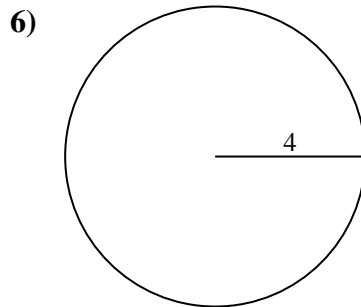
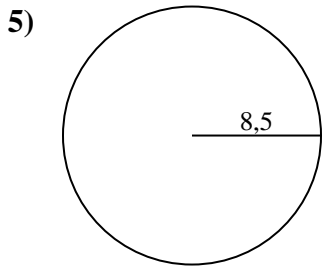
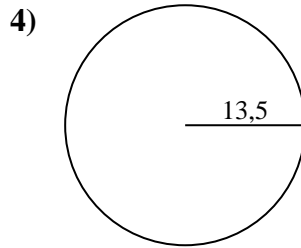
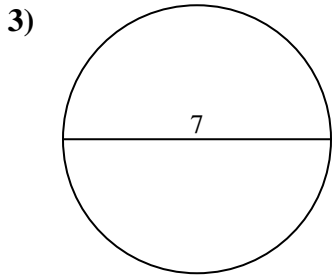
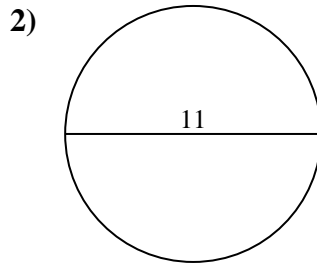
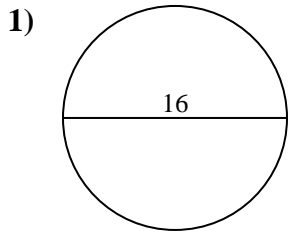
|          |          |          |          |          |
|----------|----------|----------|----------|----------|
| 12,57 cm | 28,27 cm | 62,83 cm | 34,56 cm | 81,68 cm |
| 9,42 cm  | 37,7 cm  | 75,4 cm  | 31,42 cm | 40,84 cm |



1. \_\_\_\_\_
2. \_\_\_\_\_
3. \_\_\_\_\_
4. \_\_\_\_\_
5. \_\_\_\_\_
6. \_\_\_\_\_
7. \_\_\_\_\_
8. \_\_\_\_\_
9. \_\_\_\_\_
10. \_\_\_\_\_



Berechne jeden Kreisumfang. Die Kreise sind nicht maßstäblich.



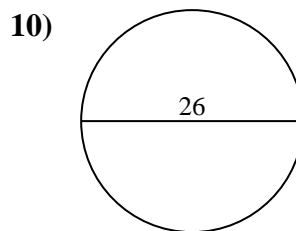
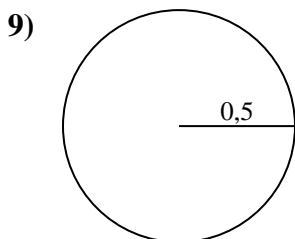
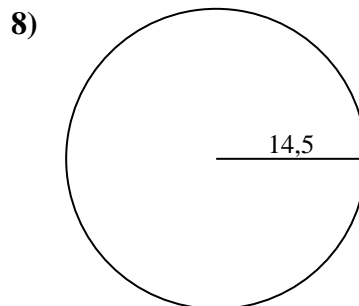
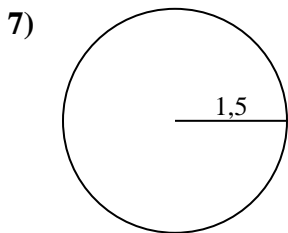
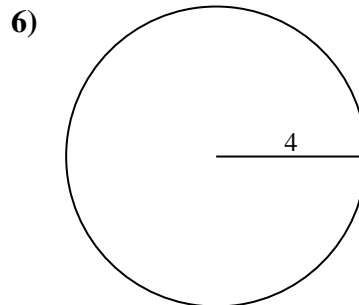
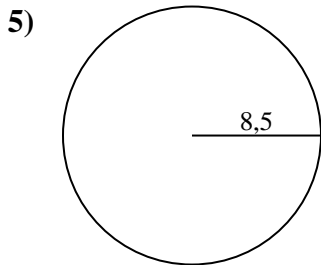
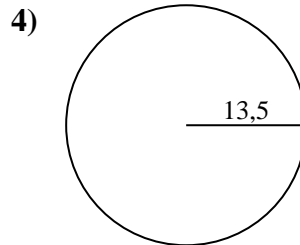
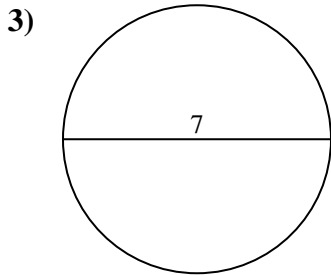
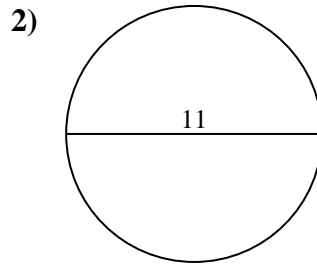
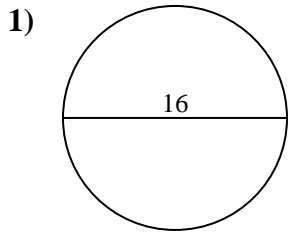
**Antworten**

- 1. \_\_\_\_\_
- 2. \_\_\_\_\_
- 3. \_\_\_\_\_
- 4. \_\_\_\_\_
- 5. \_\_\_\_\_
- 6. \_\_\_\_\_
- 7. \_\_\_\_\_
- 8. \_\_\_\_\_
- 9. \_\_\_\_\_
- 10. \_\_\_\_\_





Berechne jeden Kreisumfang. Die Kreise sind nicht maßstäblich.

**Antworten**1. **50,27 cm**2. **34,56 cm**3. **21,99 cm**4. **84,82 cm**5. **53,41 cm**6. **25,13 cm**7. **9,42 cm**8. **91,11 cm**9. **3,14 cm**10. **81,68 cm**



Berechne jeden Kreisumfang. Die Kreise sind nicht maßstäblich.

25,13 cm

81,68 cm

53,41 cm

91,11 cm

50,27 cm

34,56 cm

9,42 cm

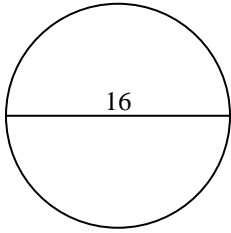
21,99 cm

3,14 cm

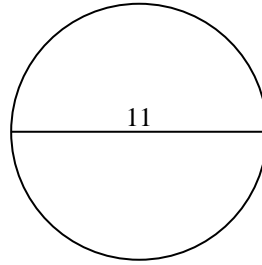
84,82 cm

**Antworten**

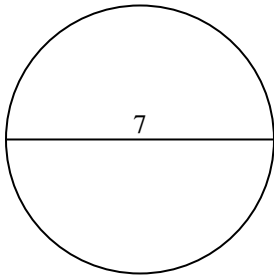
1)



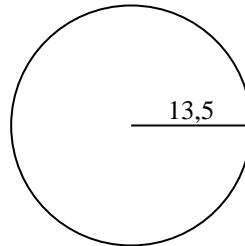
2)



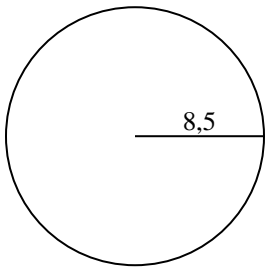
3)



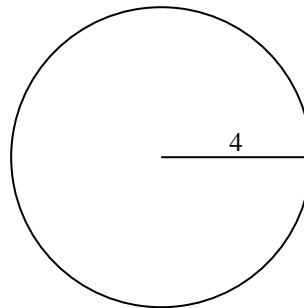
4)



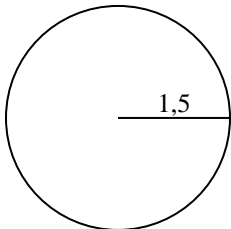
5)



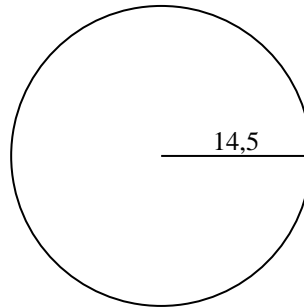
6)



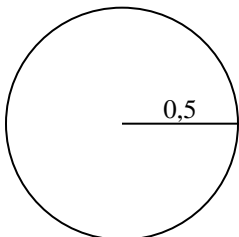
7)



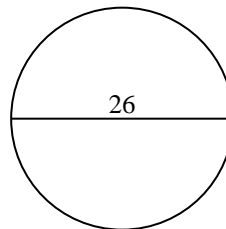
8)



9)



10)

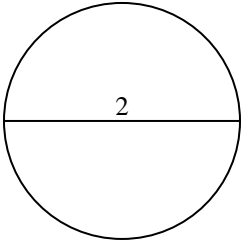


- 1. \_\_\_\_\_
- 2. \_\_\_\_\_
- 3. \_\_\_\_\_
- 4. \_\_\_\_\_
- 5. \_\_\_\_\_
- 6. \_\_\_\_\_
- 7. \_\_\_\_\_
- 8. \_\_\_\_\_
- 9. \_\_\_\_\_
- 10. \_\_\_\_\_

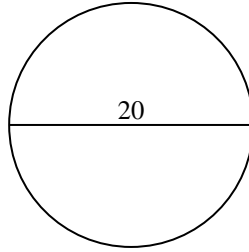


Berechne jeden Kreisumfang. Die Kreise sind nicht maßstäblich.

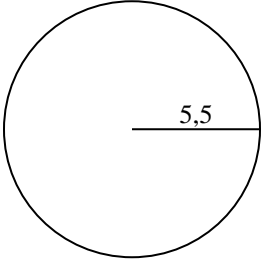
1)



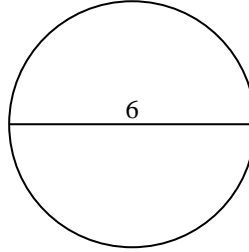
2)



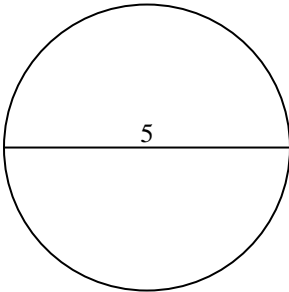
3)



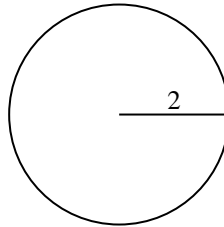
4)



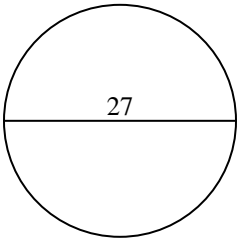
5)



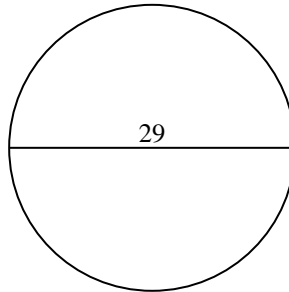
6)



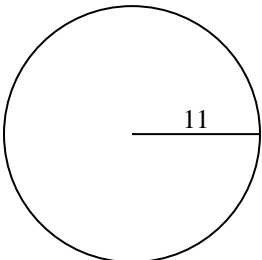
7)



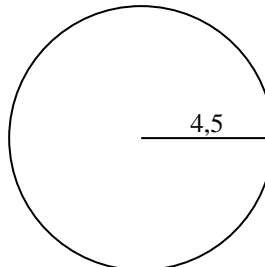
8)



9)



10)

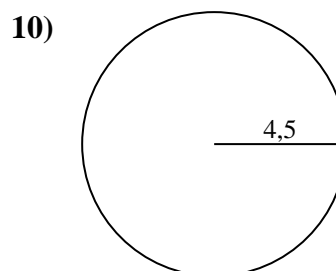
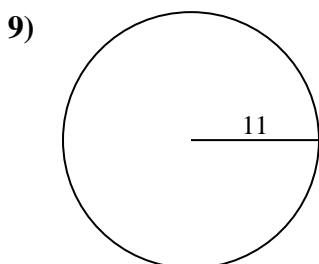
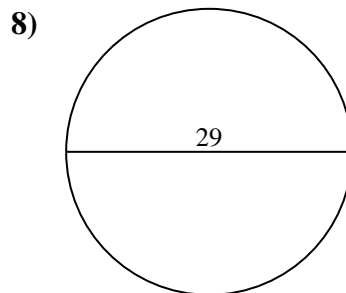
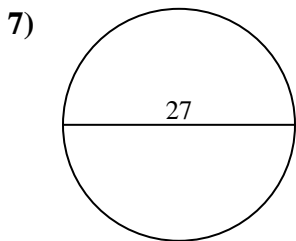
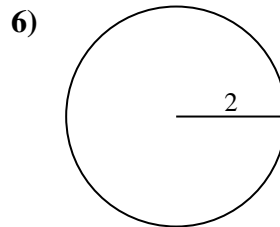
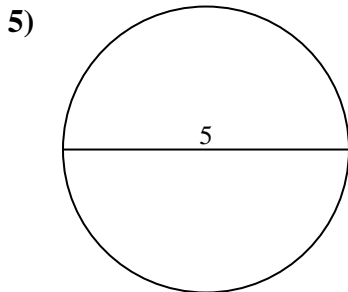
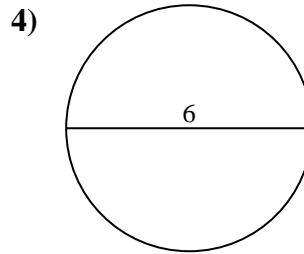
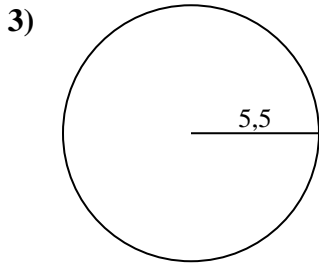
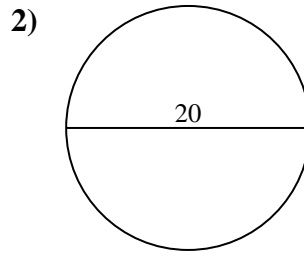
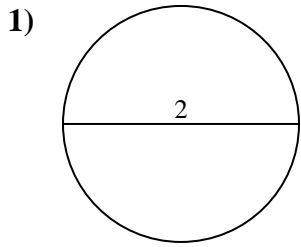


**Antworten**

- 1. \_\_\_\_\_
- 2. \_\_\_\_\_
- 3. \_\_\_\_\_
- 4. \_\_\_\_\_
- 5. \_\_\_\_\_
- 6. \_\_\_\_\_
- 7. \_\_\_\_\_
- 8. \_\_\_\_\_
- 9. \_\_\_\_\_
- 10. \_\_\_\_\_



Berechne jeden Kreisumfang. Die Kreise sind nicht maßstäblich.

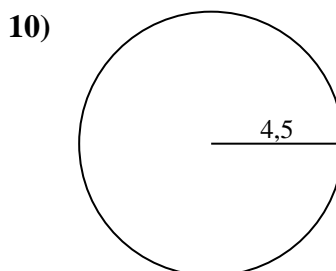
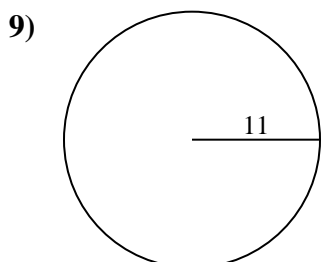
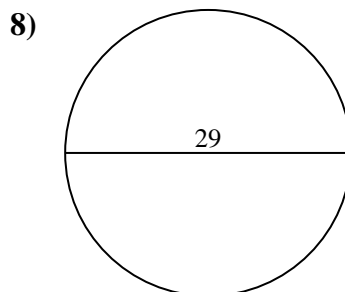
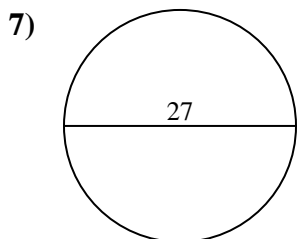
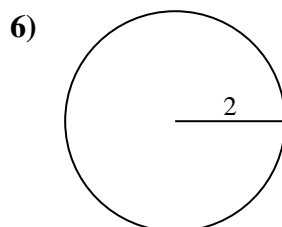
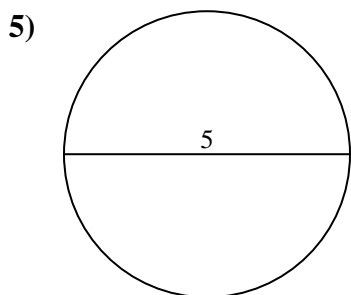
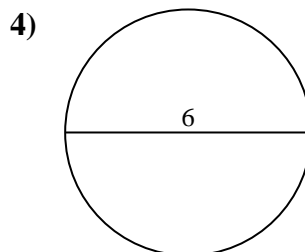
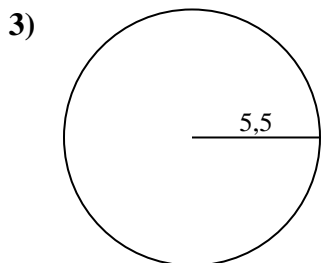
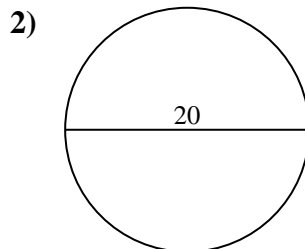
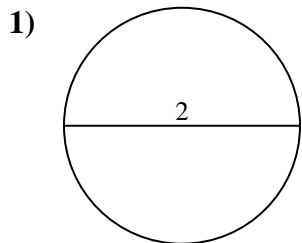
**Antworten**1. 6,28 cm2. 62,83 cm3. 34,56 cm4. 18,85 cm5. 15,71 cm6. 12,57 cm7. 84,82 cm8. 91,11 cm9. 69,12 cm10. 28,27 cm



Berechne jeden Kreisumfang. Die Kreise sind nicht maßstäblich.

|          |          |          |          |          |
|----------|----------|----------|----------|----------|
| 12,57 cm | 34,56 cm | 18,85 cm | 28,27 cm | 91,11 cm |
| 84,82 cm | 6,28 cm  | 69,12 cm | 15,71 cm | 62,83 cm |

**Antworten**

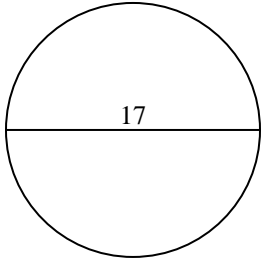


- 1. \_\_\_\_\_
- 2. \_\_\_\_\_
- 3. \_\_\_\_\_
- 4. \_\_\_\_\_
- 5. \_\_\_\_\_
- 6. \_\_\_\_\_
- 7. \_\_\_\_\_
- 8. \_\_\_\_\_
- 9. \_\_\_\_\_
- 10. \_\_\_\_\_

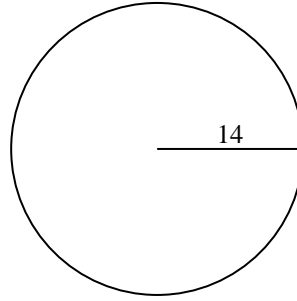


Berechne jeden Kreisumfang. Die Kreise sind nicht maßstäblich.

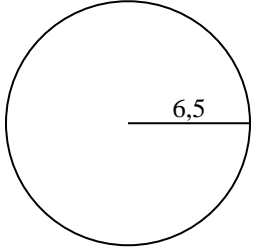
1)



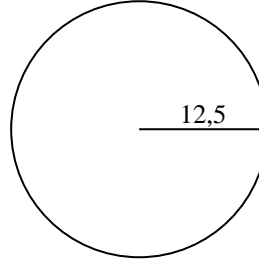
2)



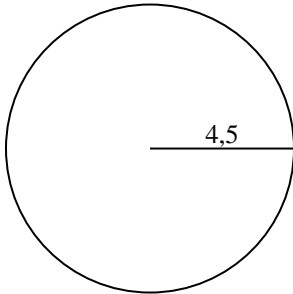
3)



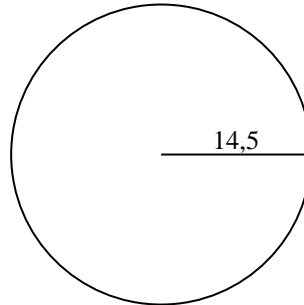
4)



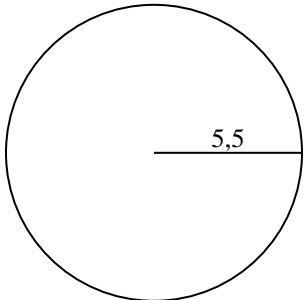
5)



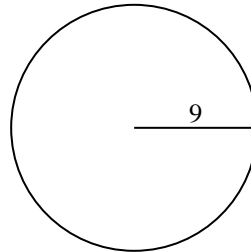
6)



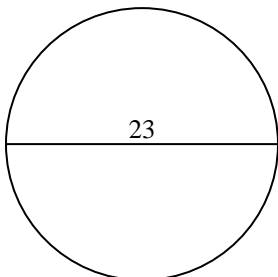
7)



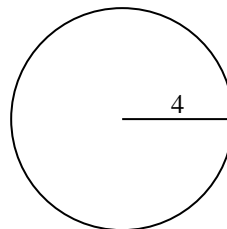
8)



9)



10)



**Antworten**

1. \_\_\_\_\_

2. \_\_\_\_\_

3. \_\_\_\_\_

4. \_\_\_\_\_

5. \_\_\_\_\_

6. \_\_\_\_\_

7. \_\_\_\_\_

8. \_\_\_\_\_

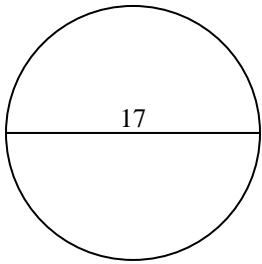
9. \_\_\_\_\_

10. \_\_\_\_\_

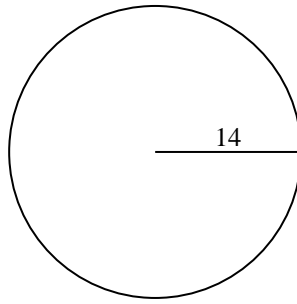


Berechne jeden Kreisumfang. Die Kreise sind nicht maßstäblich.

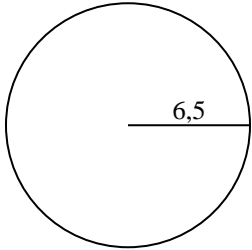
1)



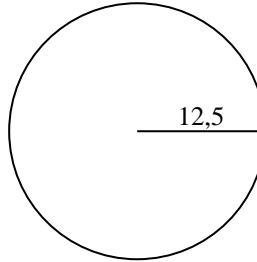
2)



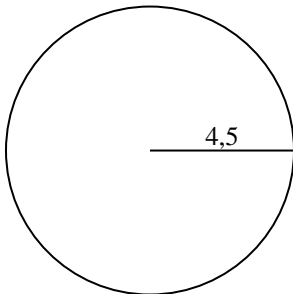
3)



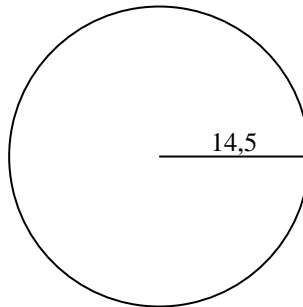
4)



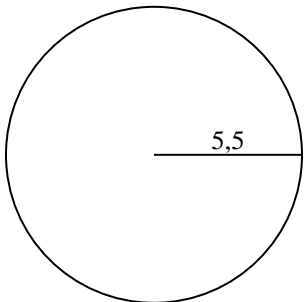
5)



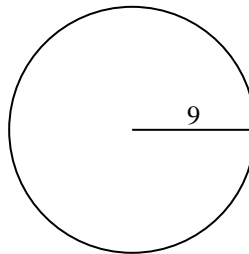
6)



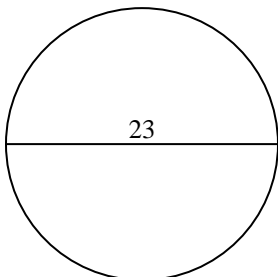
7)



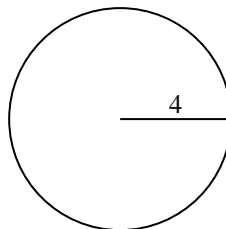
8)



9)



10)

**Antworten**1. **53,41 cm**2. **87,96 cm**3. **40,84 cm**4. **78,54 cm**5. **28,27 cm**6. **91,11 cm**7. **34,56 cm**8. **56,55 cm**9. **72,26 cm**10. **25,13 cm**

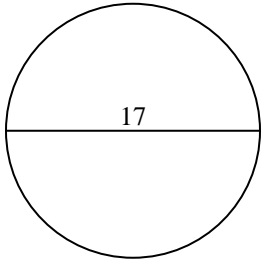


Berechne jeden Kreisumfang. Die Kreise sind nicht maßstäblich.

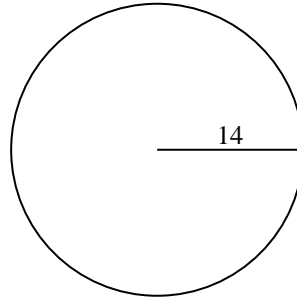
|          |          |          |          |          |
|----------|----------|----------|----------|----------|
| 72,26 cm | 40,84 cm | 34,56 cm | 53,41 cm | 25,13 cm |
| 28,27 cm | 87,96 cm | 78,54 cm | 91,11 cm | 56,55 cm |

**Antworten**

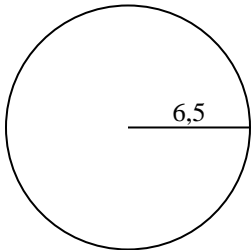
1)



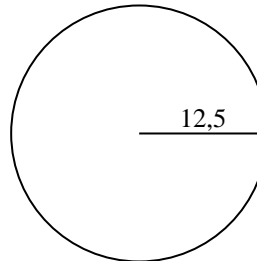
2)



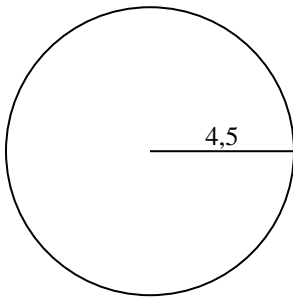
3)



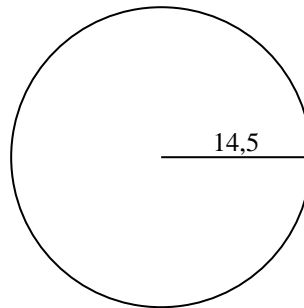
4)



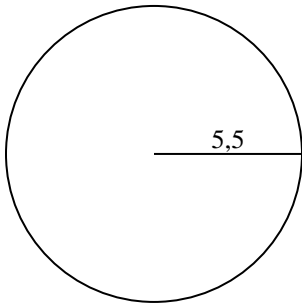
5)



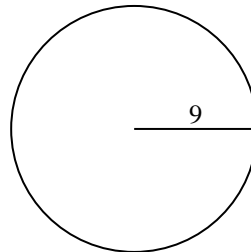
6)



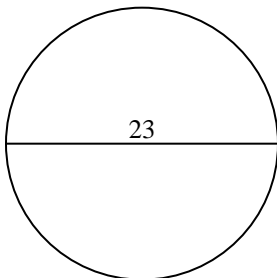
7)



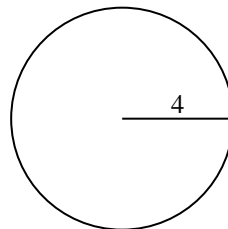
8)



9)



10)

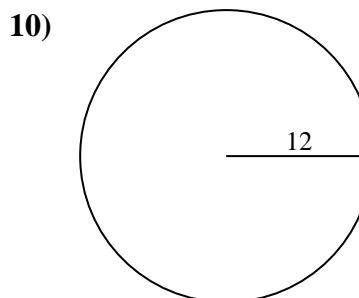
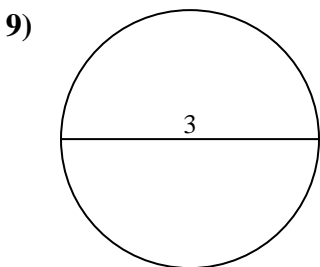
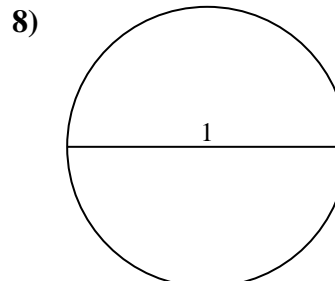
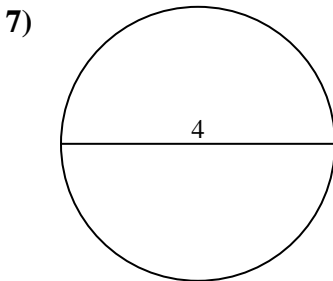
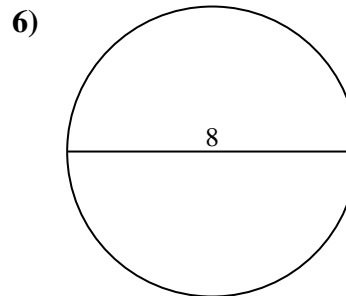
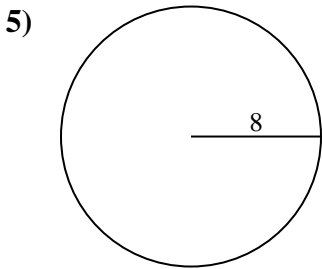
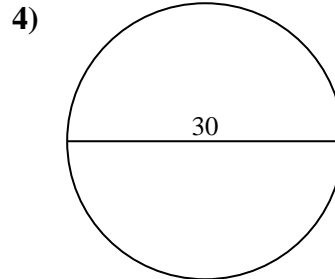
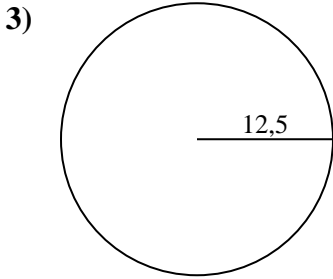
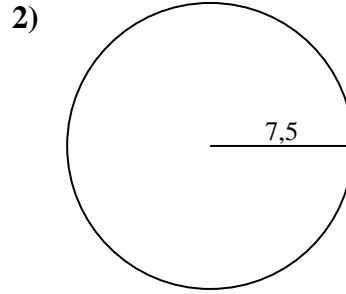
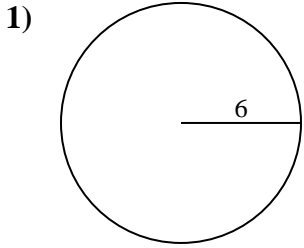


- 1. \_\_\_\_\_
- 2. \_\_\_\_\_
- 3. \_\_\_\_\_
- 4. \_\_\_\_\_
- 5. \_\_\_\_\_
- 6. \_\_\_\_\_
- 7. \_\_\_\_\_
- 8. \_\_\_\_\_
- 9. \_\_\_\_\_
- 10. \_\_\_\_\_





Berechne jeden Kreisumfang. Die Kreise sind nicht maßstäblich.

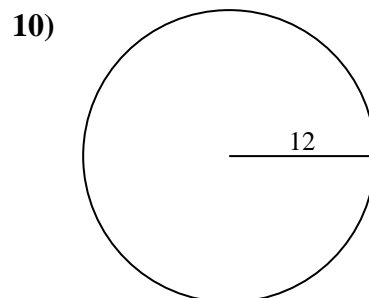
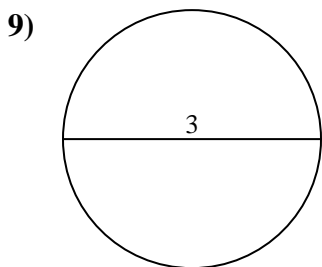
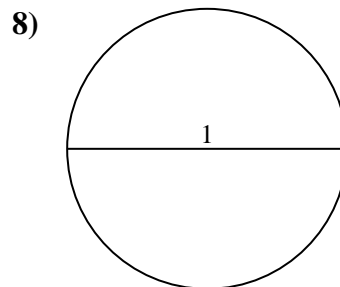
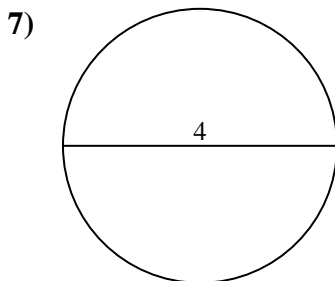
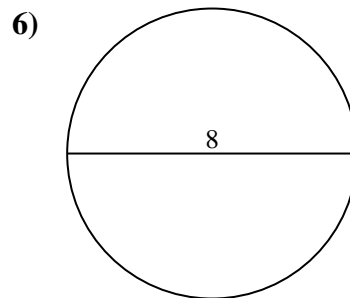
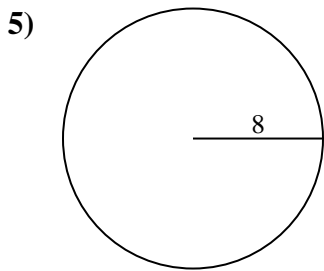
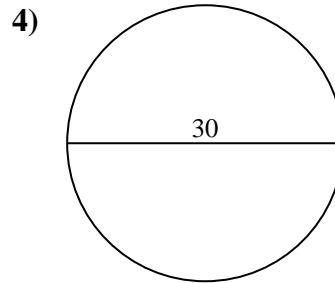
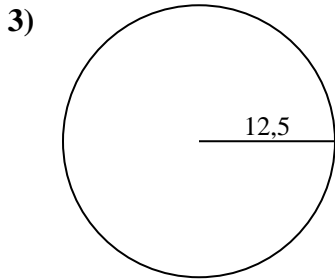
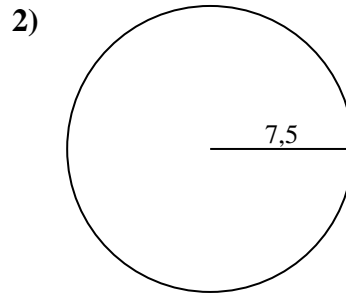
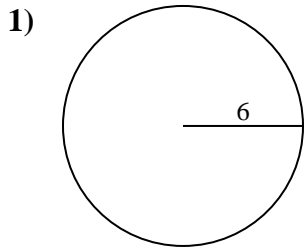


**Antworten**

- 1. \_\_\_\_\_
- 2. \_\_\_\_\_
- 3. \_\_\_\_\_
- 4. \_\_\_\_\_
- 5. \_\_\_\_\_
- 6. \_\_\_\_\_
- 7. \_\_\_\_\_
- 8. \_\_\_\_\_
- 9. \_\_\_\_\_
- 10. \_\_\_\_\_



Berechne jeden Kreisumfang. Die Kreise sind nicht maßstäblich.

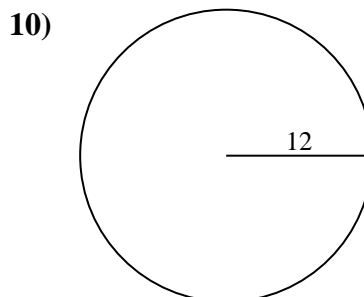
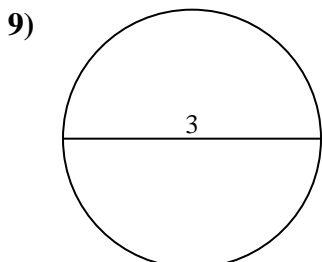
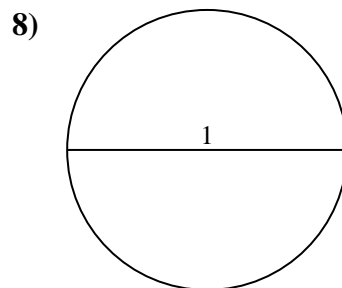
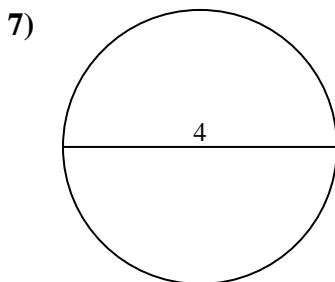
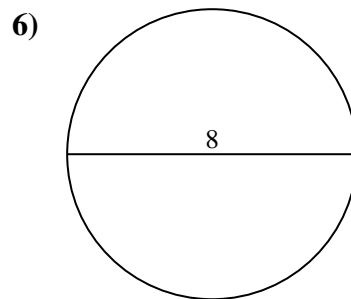
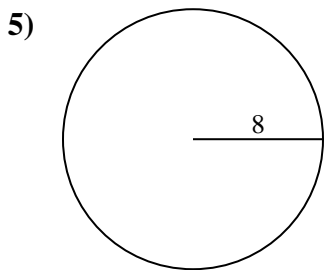
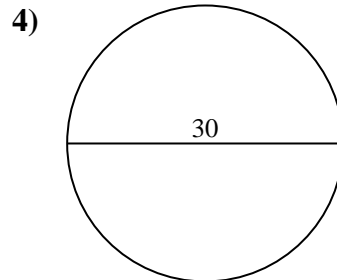
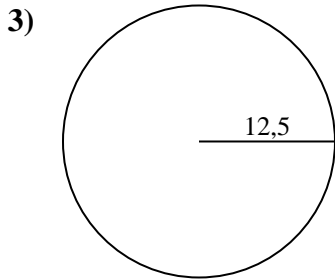
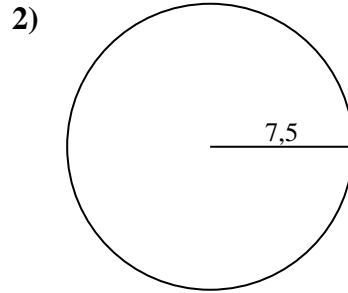
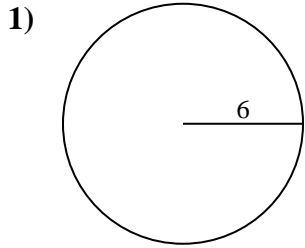
**Antworten**1. 37,7 cm2. 47,12 cm3. 78,54 cm4. 94,25 cm5. 50,27 cm6. 25,13 cm7. 12,57 cm8. 3,14 cm9. 9,42 cm10. 75,4 cm



Berechne jeden Kreisumfang. Die Kreise sind nicht maßstäblich.

**Antworten**

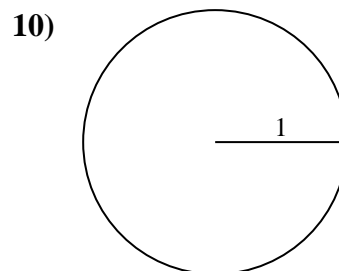
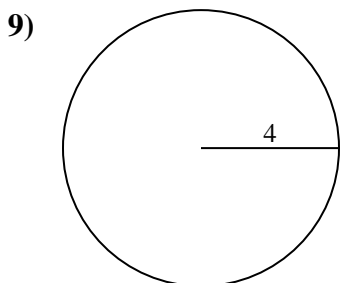
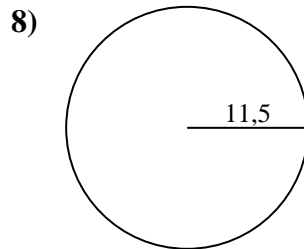
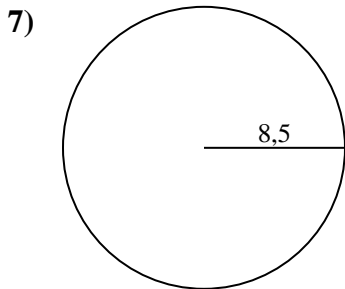
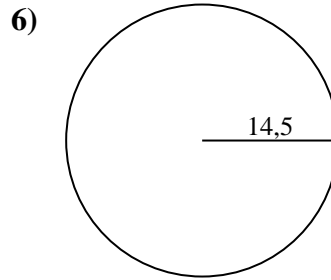
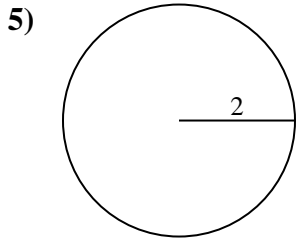
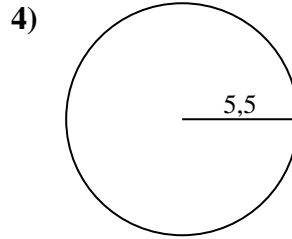
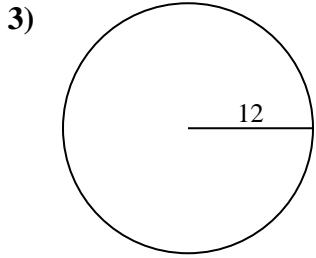
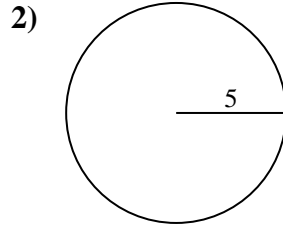
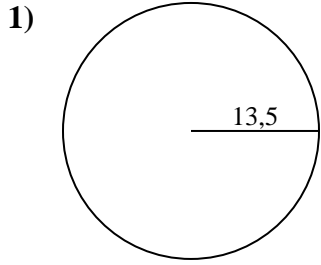
|          |          |          |          |          |
|----------|----------|----------|----------|----------|
| 12,57 cm | 75,4 cm  | 25,13 cm | 94,25 cm | 50,27 cm |
| 9,42 cm  | 78,54 cm | 37,7 cm  | 47,12 cm | 3,14 cm  |



- 1. \_\_\_\_\_
- 2. \_\_\_\_\_
- 3. \_\_\_\_\_
- 4. \_\_\_\_\_
- 5. \_\_\_\_\_
- 6. \_\_\_\_\_
- 7. \_\_\_\_\_
- 8. \_\_\_\_\_
- 9. \_\_\_\_\_
- 10. \_\_\_\_\_



Berechne jeden Kreisumfang. Die Kreise sind nicht maßstäblich.

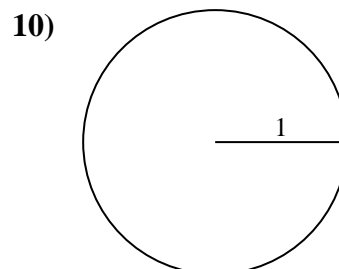
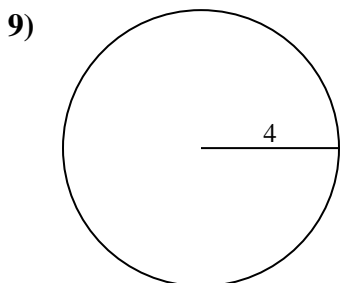
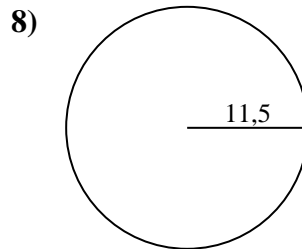
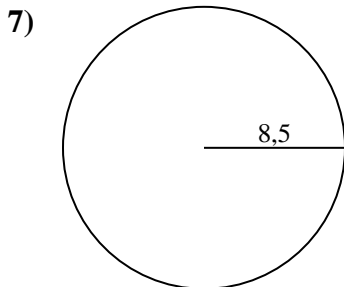
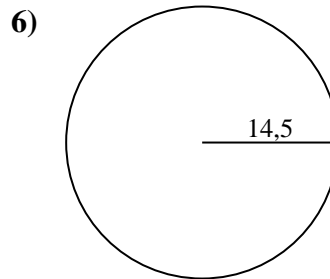
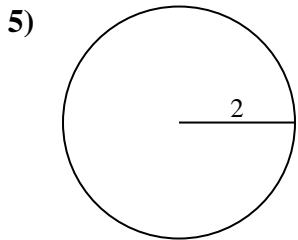
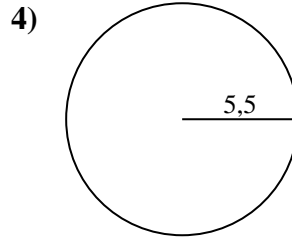
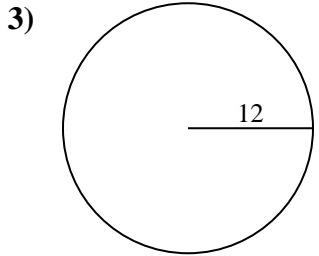
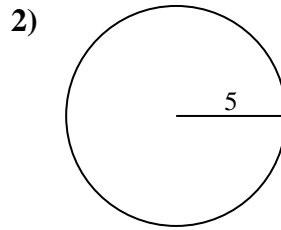
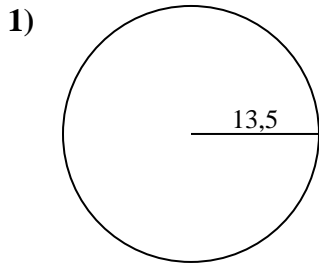


**Antworten**

- 1. \_\_\_\_\_
- 2. \_\_\_\_\_
- 3. \_\_\_\_\_
- 4. \_\_\_\_\_
- 5. \_\_\_\_\_
- 6. \_\_\_\_\_
- 7. \_\_\_\_\_
- 8. \_\_\_\_\_
- 9. \_\_\_\_\_
- 10. \_\_\_\_\_



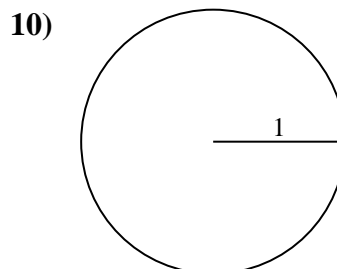
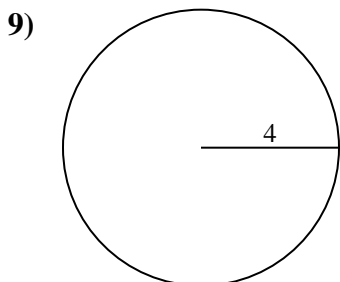
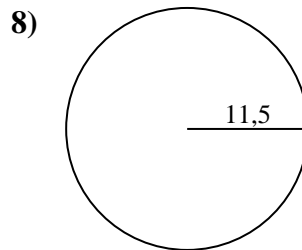
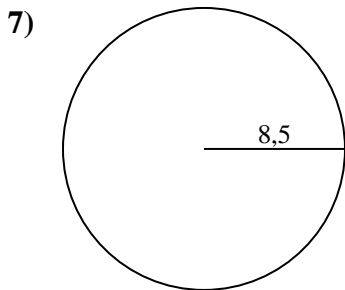
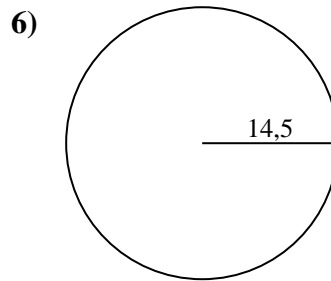
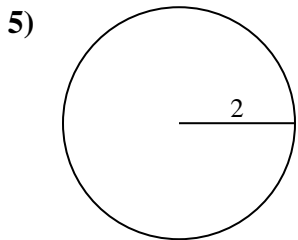
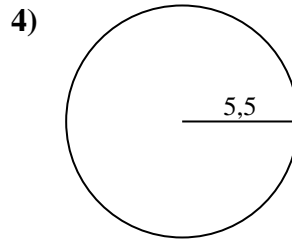
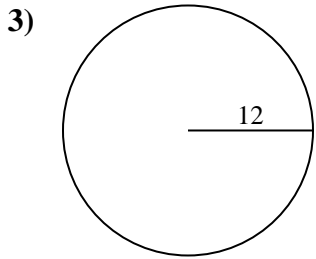
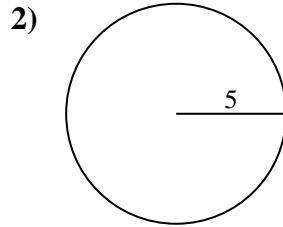
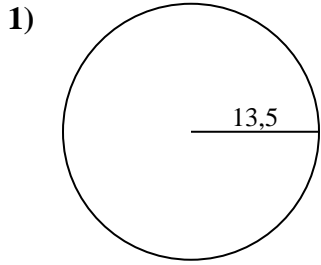
Berechne jeden Kreisumfang. Die Kreise sind nicht maßstäblich.

**Antworten**1. 84,82 cm2. 31,42 cm3. 75,4 cm4. 34,56 cm5. 12,57 cm6. 91,11 cm7. 53,41 cm8. 72,26 cm9. 25,13 cm10. 6,28 cm



Berechne jeden Kreisumfang. Die Kreise sind nicht maßstäblich.

|          |          |          |          |          |
|----------|----------|----------|----------|----------|
| 53,41 cm | 84,82 cm | 31,42 cm | 72,26 cm | 34,56 cm |
| 12,57 cm | 75,4 cm  | 91,11 cm | 6,28 cm  | 25,13 cm |



**Antworten**

- 1. \_\_\_\_\_
- 2. \_\_\_\_\_
- 3. \_\_\_\_\_
- 4. \_\_\_\_\_
- 5. \_\_\_\_\_
- 6. \_\_\_\_\_
- 7. \_\_\_\_\_
- 8. \_\_\_\_\_
- 9. \_\_\_\_\_
- 10. \_\_\_\_\_