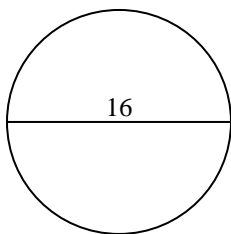
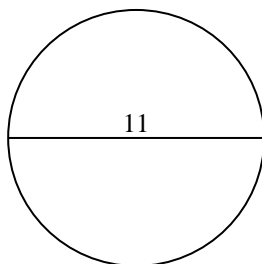


**Berechne jeden Kreisumfang. Die Kreise sind nicht maßstäblich.****Antworten**

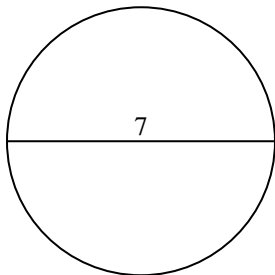
1)



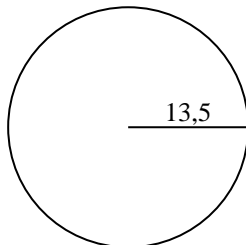
2)



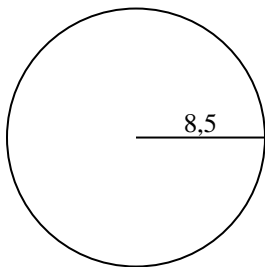
3)



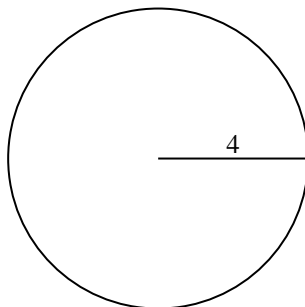
4)



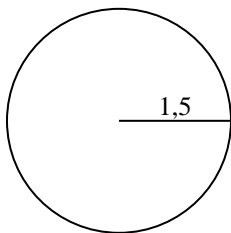
5)



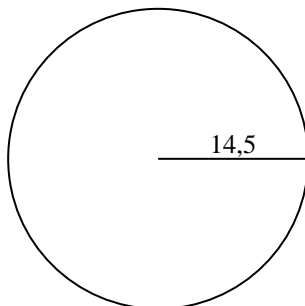
6)



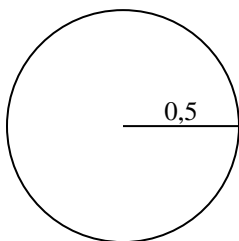
7)



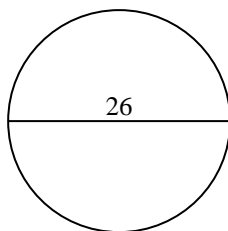
8)



9)



10)



1. _____

2. _____

3. _____

4. _____

5. _____

6. _____

7. _____

8. _____

9. _____

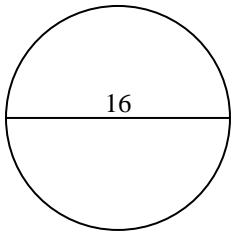
10. _____



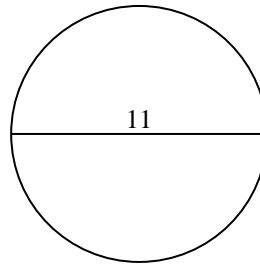
Berechne jeden Kreisumfang. Die Kreise sind nicht maßstäblich.

Antworten

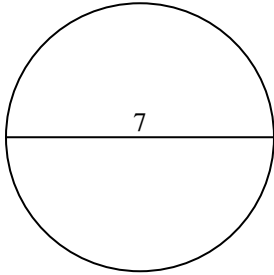
1)



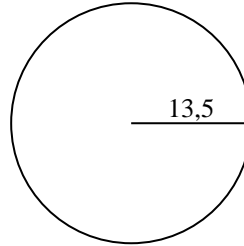
2)



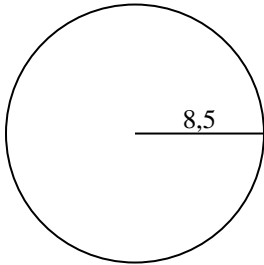
3)



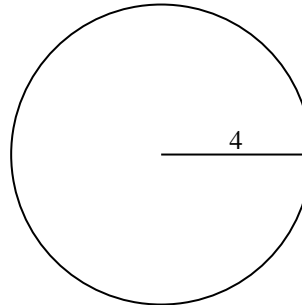
4)



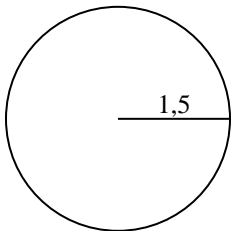
5)



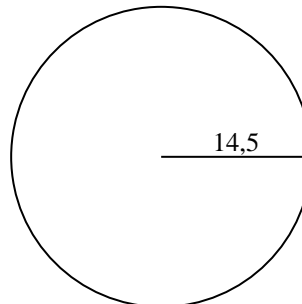
6)



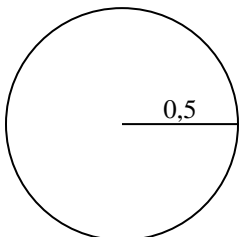
7)



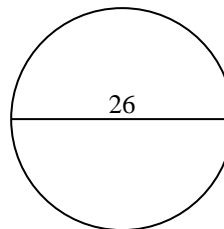
8)



9)



10)

1. **50,27 cm**2. **34,56 cm**3. **21,99 cm**4. **84,82 cm**5. **53,41 cm**6. **25,13 cm**7. **9,42 cm**8. **91,11 cm**9. **3,14 cm**10. **81,68 cm**

**Berechne jeden Kreisumfang. Die Kreise sind nicht maßstäblich.**

25,13 cm

81,68 cm

53,41 cm

91,11 cm

50,27 cm

34,56 cm

9,42 cm

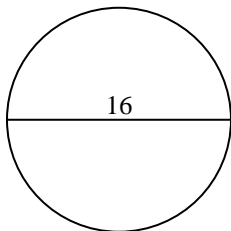
21,99 cm

3,14 cm

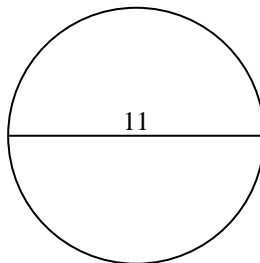
84,82 cm

Antworten

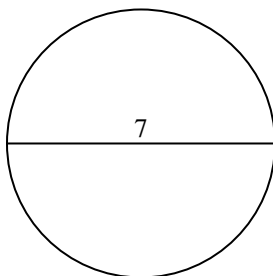
1)



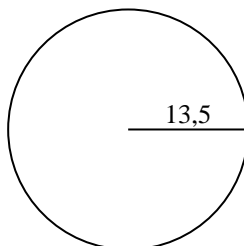
2)



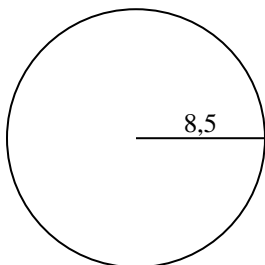
3)



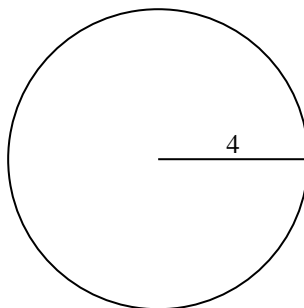
4)



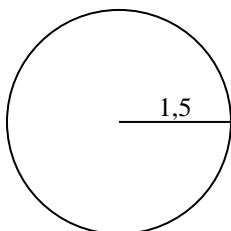
5)



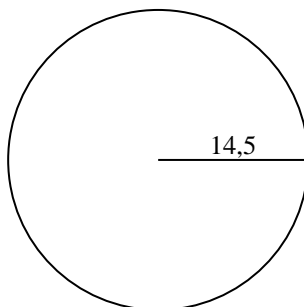
6)



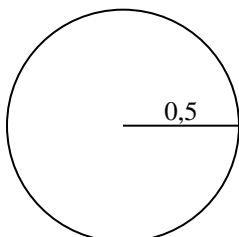
7)



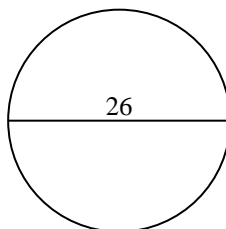
8)



9)



10)



1. _____
2. _____
3. _____
4. _____
5. _____
6. _____
7. _____
8. _____
9. _____
10. _____