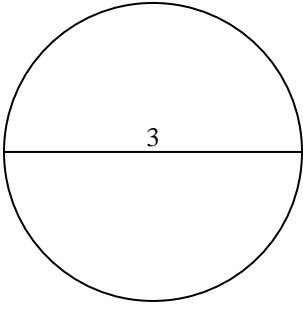


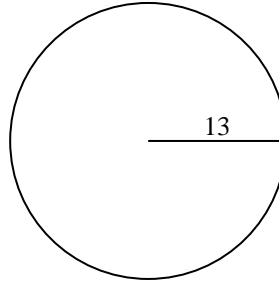


Berechne jeden Kreisumfang. Die Kreise sind nicht maßstäblich.

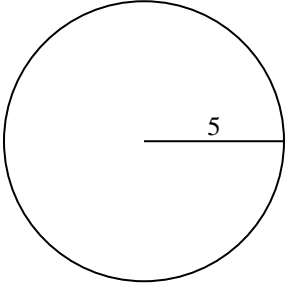
1)



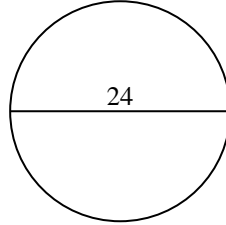
2)



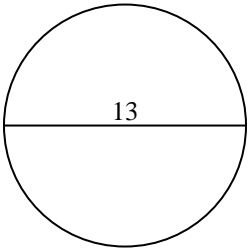
3)



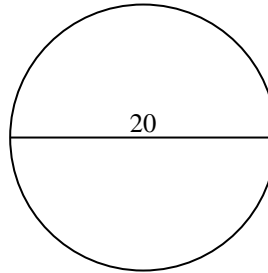
4)



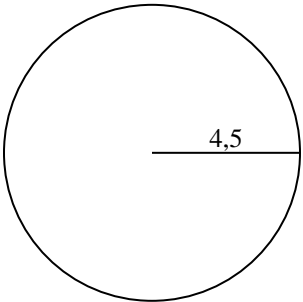
5)



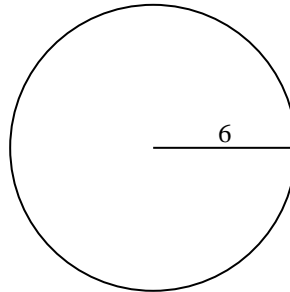
6)



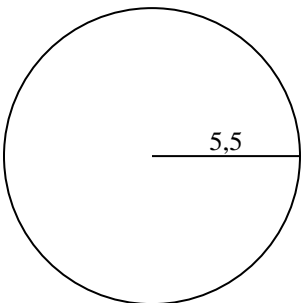
7)



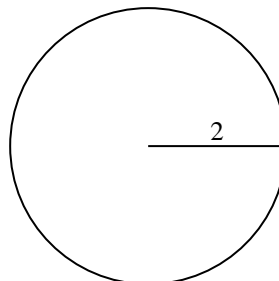
8)



9)



10)



Antworten

1. _____

2. _____

3. _____

4. _____

5. _____

6. _____

7. _____

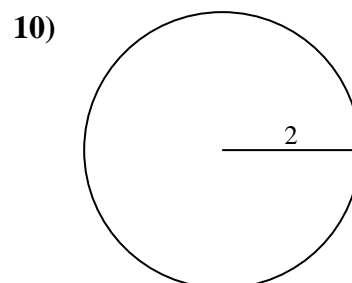
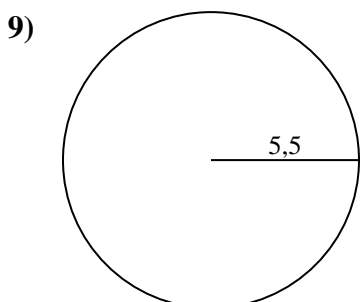
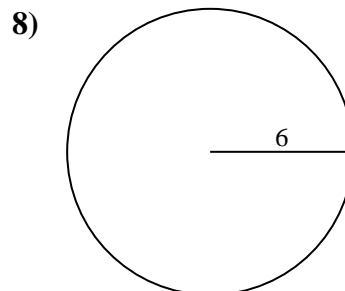
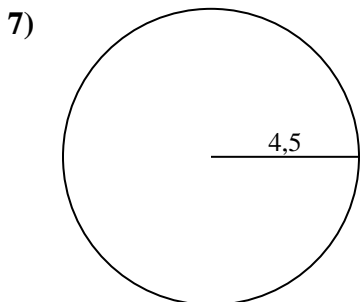
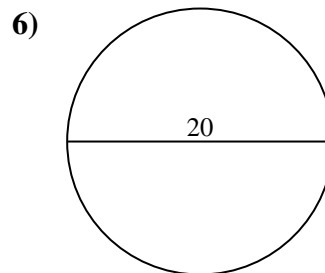
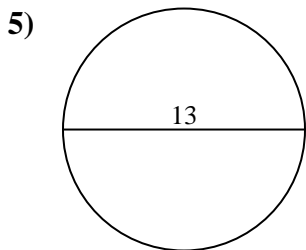
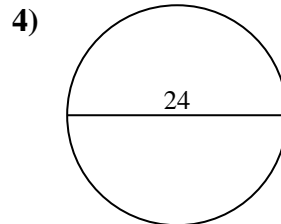
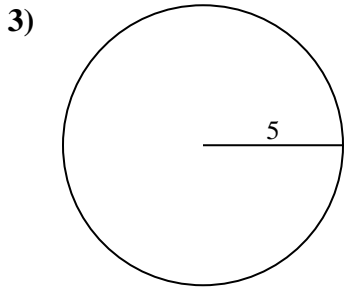
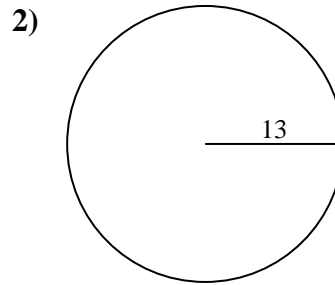
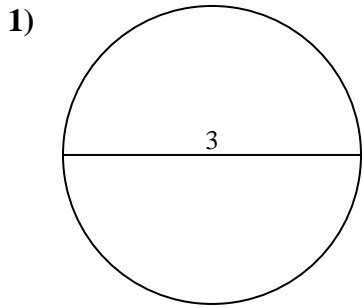
8. _____

9. _____

10. _____



Berechne jeden Kreisumfang. Die Kreise sind nicht maßstäblich.

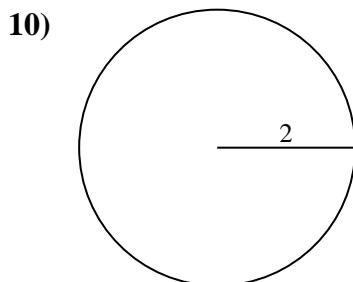
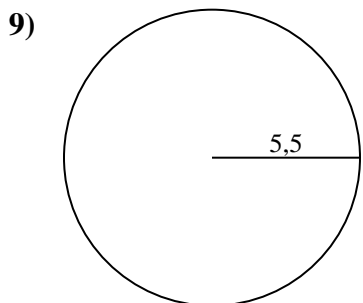
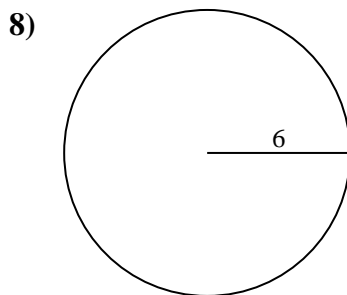
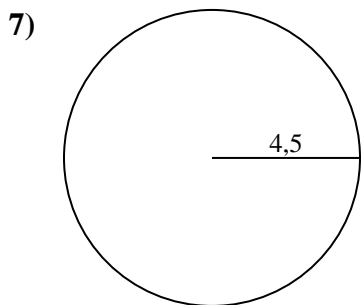
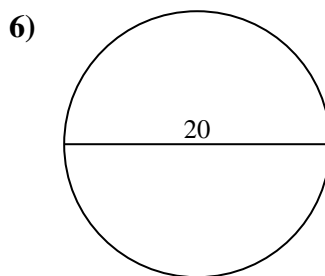
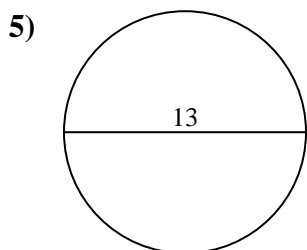
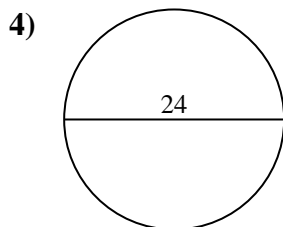
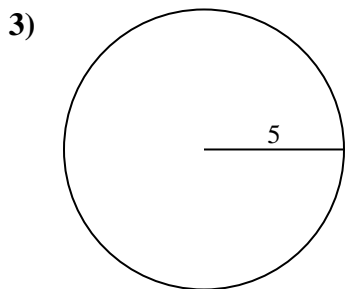
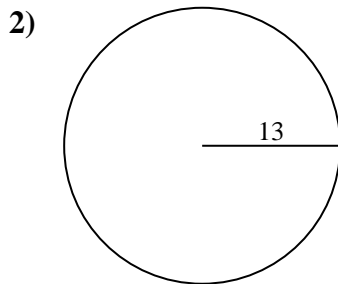
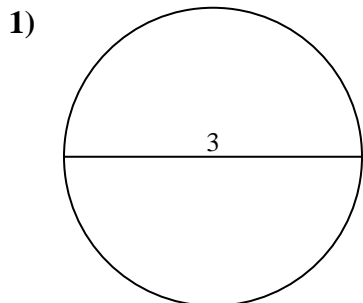
**Antworten**1. 9,42 cm2. 81,68 cm3. 31,42 cm4. 75,4 cm5. 40,84 cm6. 62,83 cm7. 28,27 cm8. 37,7 cm9. 34,56 cm10. 12,57 cm



Berechne jeden Kreisumfang. Die Kreise sind nicht maßstäblich.

12,57 cm	28,27 cm	62,83 cm	34,56 cm	81,68 cm
9,42 cm	37,7 cm	75,4 cm	31,42 cm	40,84 cm

Antworten



- 1. _____
- 2. _____
- 3. _____
- 4. _____
- 5. _____
- 6. _____
- 7. _____
- 8. _____
- 9. _____
- 10. _____