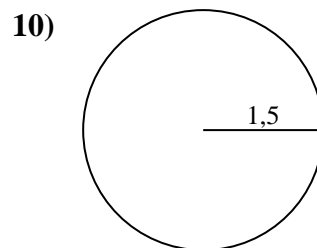
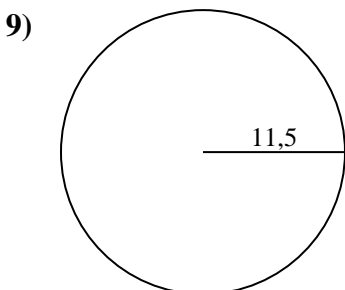
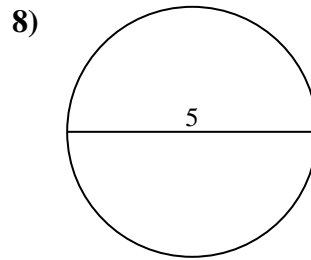
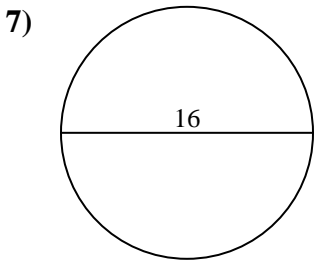
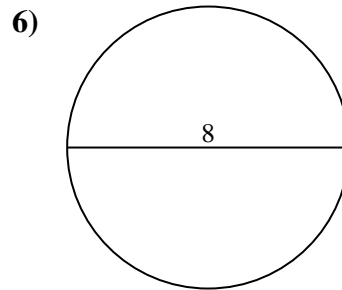
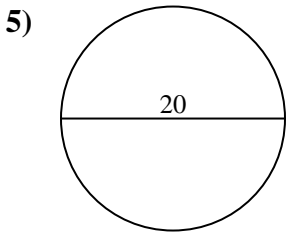
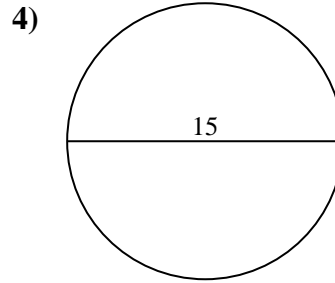
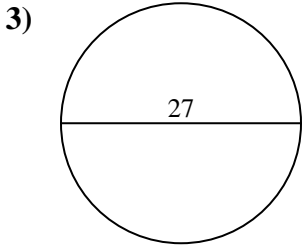
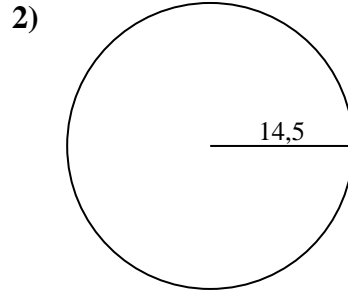
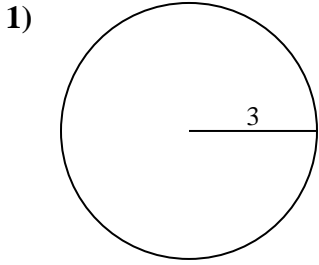




Berechne jeden Kreisumfang. Die Kreise sind nicht maßstäblich.

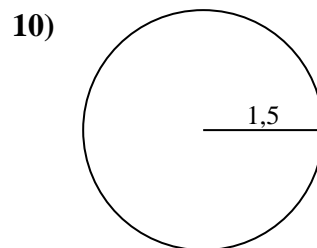
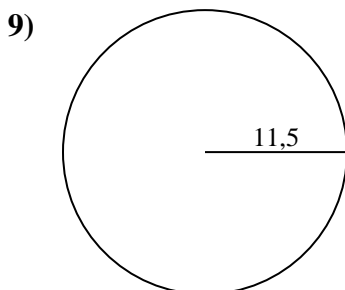
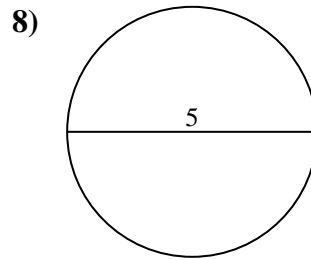
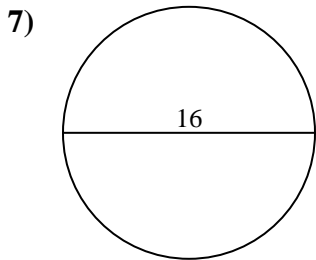
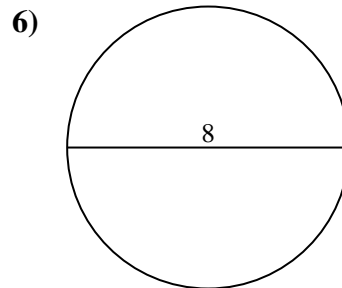
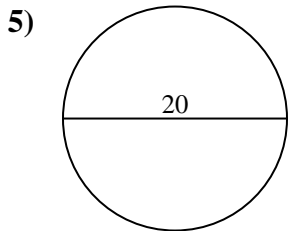
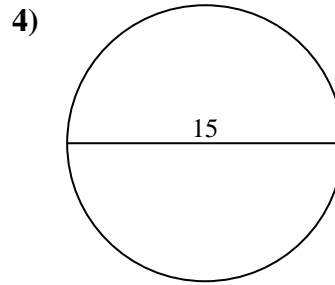
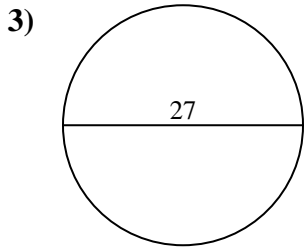
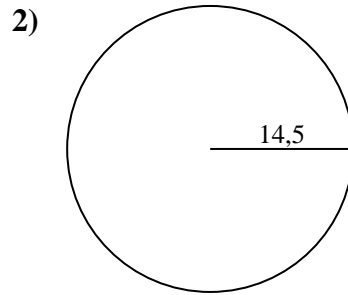
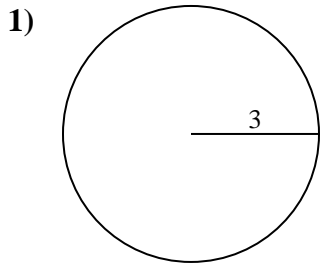


Antworten

- 1. _____
- 2. _____
- 3. _____
- 4. _____
- 5. _____
- 6. _____
- 7. _____
- 8. _____
- 9. _____
- 10. _____



Berechne jeden Kreisumfang. Die Kreise sind nicht maßstäblich.



Antworten

1. **18,85 cm**

2. **91,11 cm**

3. **84,82 cm**

4. **47,12 cm**

5. **62,83 cm**

6. **25,13 cm**

7. **50,27 cm**

8. **15,71 cm**

9. **72,26 cm**

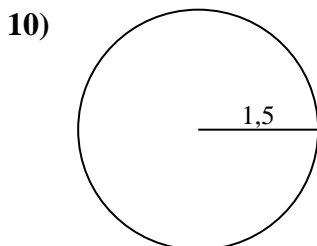
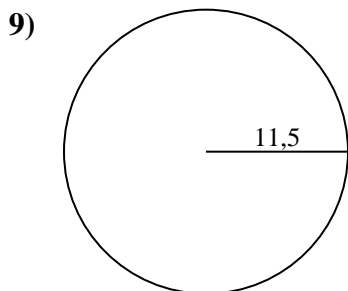
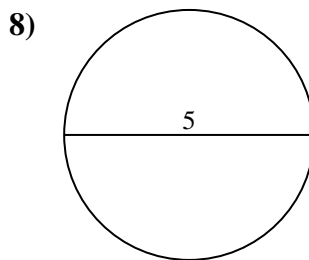
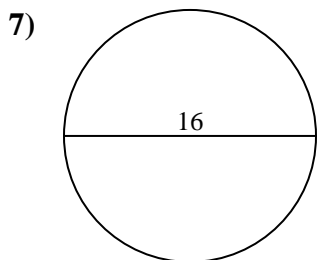
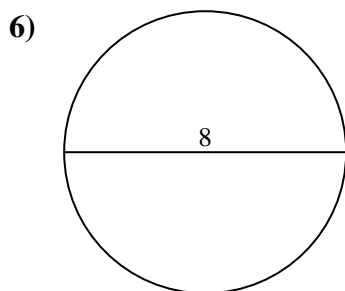
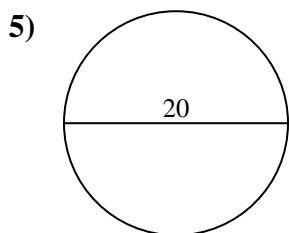
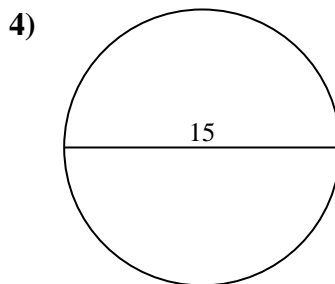
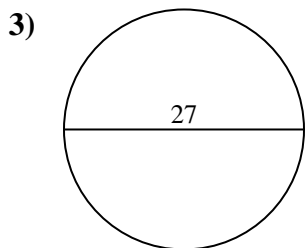
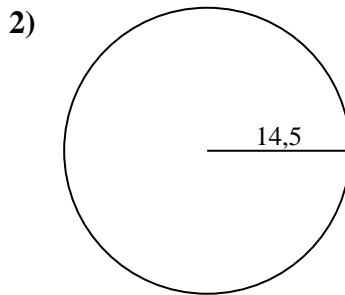
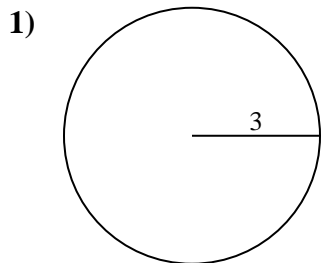
10. **9,42 cm**



Berechne jeden Kreisumfang. Die Kreise sind nicht maßstäblich.

72,26 cm	9,42 cm	18,85 cm	62,83 cm	50,27 cm
91,11 cm	47,12 cm	84,82 cm	15,71 cm	25,13 cm

Antworten



- 1. _____
- 2. _____
- 3. _____
- 4. _____
- 5. _____
- 6. _____
- 7. _____
- 8. _____
- 9. _____
- 10. _____