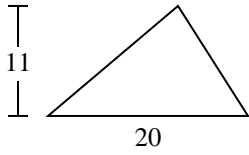


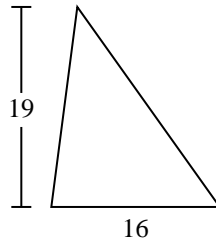


Berechne die Fläche jedes Dreiecks. Die Einheiten sind nicht maßstäblich.

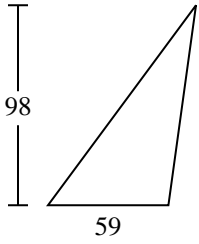
1)



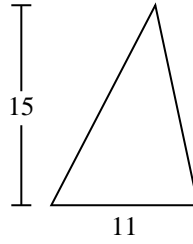
2)



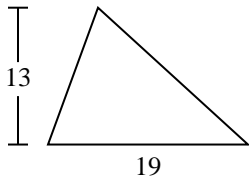
3)



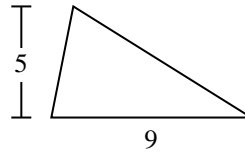
4)



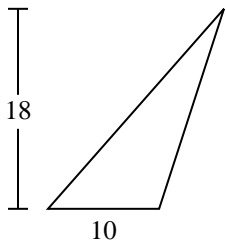
5)



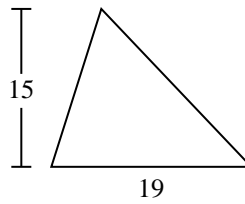
6)



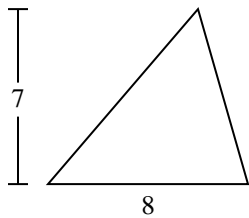
7)



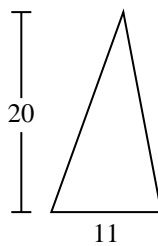
8)



9)



10)



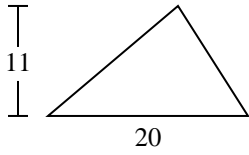
**Antworten**

- 1. \_\_\_\_\_
- 2. \_\_\_\_\_
- 3. \_\_\_\_\_
- 4. \_\_\_\_\_
- 5. \_\_\_\_\_
- 6. \_\_\_\_\_
- 7. \_\_\_\_\_
- 8. \_\_\_\_\_
- 9. \_\_\_\_\_
- 10. \_\_\_\_\_

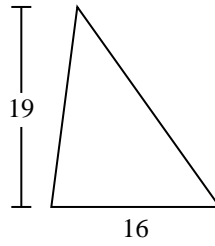


Berechne die Fläche jedes Dreiecks. Die Einheiten sind nicht maßstäblich.

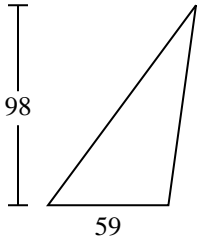
1)



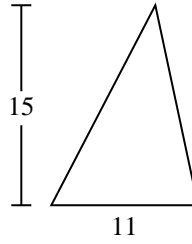
2)



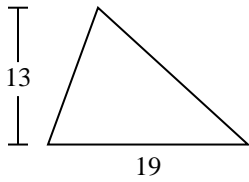
3)



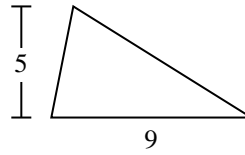
4)



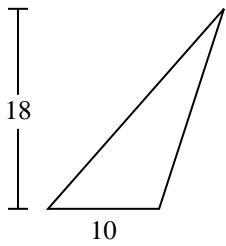
5)



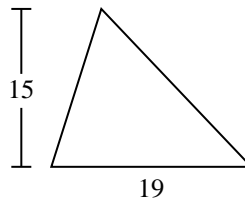
6)



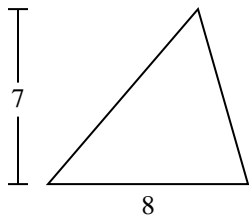
7)



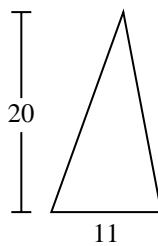
8)



9)



10)



**Antworten**

1. **110**

2. **152**

3. **2.891**

4. **82,5**

5. **123,5**

6. **22,5**

7. **90**

8. **142,5**

9. **28**

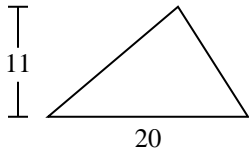
10. **110**



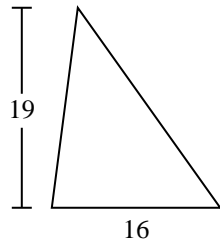
Berechne die Fläche jedes Dreiecks. Die Einheiten sind nicht maßstäblich.

22,5	152	28	90	142,5
123,5	2.891	82,5	110	

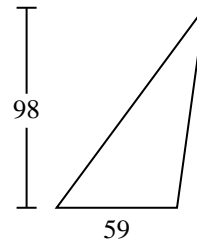
1)



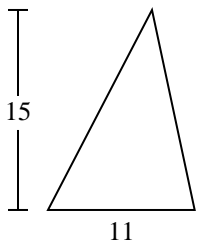
2)



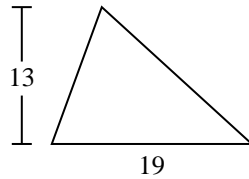
3)



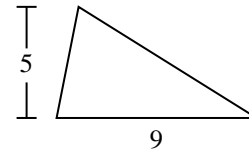
4)



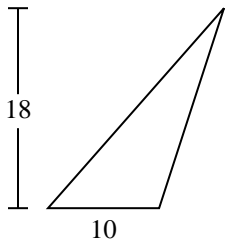
5)



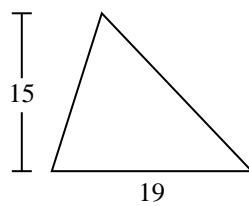
6)



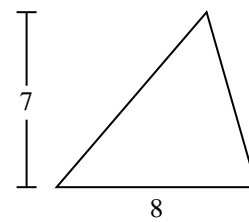
7)



8)



9)



**Antworten**

1. \_\_\_\_\_
2. \_\_\_\_\_
3. \_\_\_\_\_
4. \_\_\_\_\_
5. \_\_\_\_\_
6. \_\_\_\_\_
7. \_\_\_\_\_
8. \_\_\_\_\_
9. \_\_\_\_\_