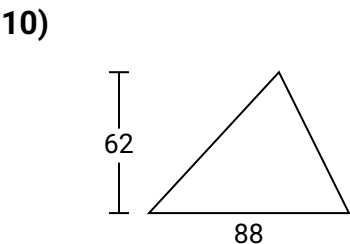
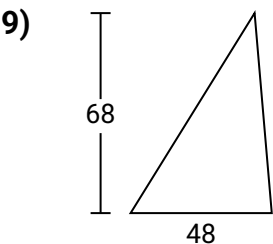
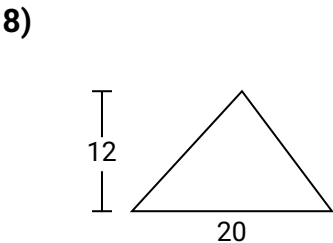
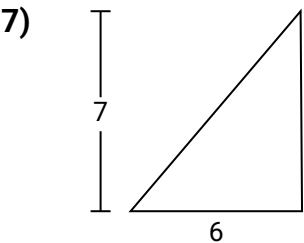
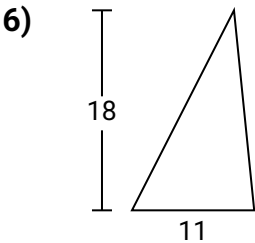
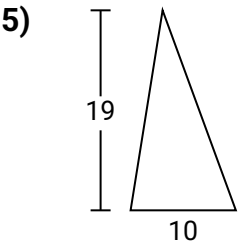
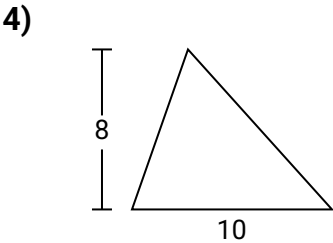
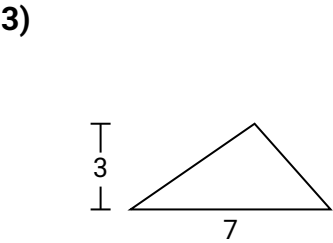
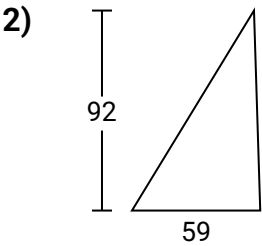
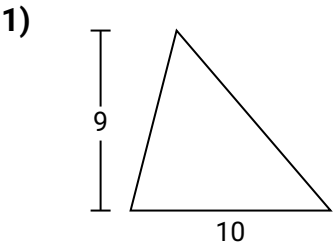




Berechne die Fläche jedes Dreiecks. Die Einheiten sind nicht maßstäblich.

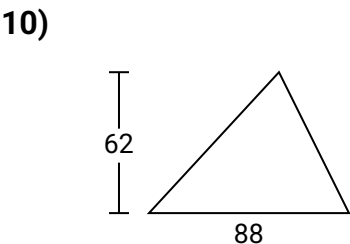
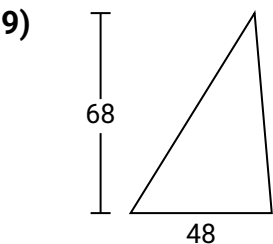
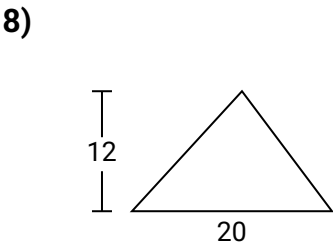
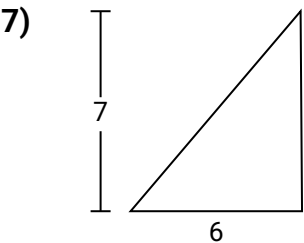
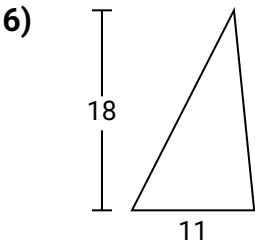
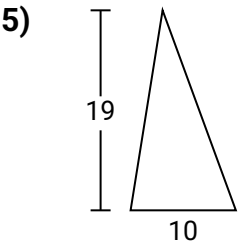
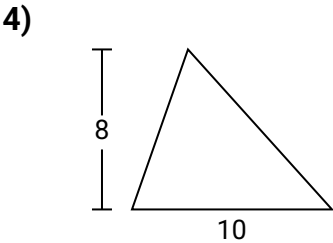
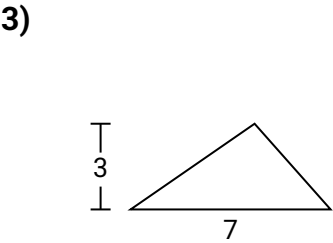
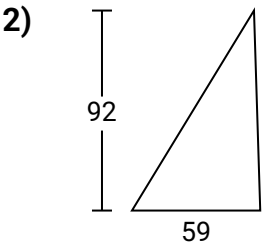
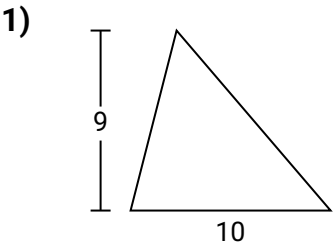
Antworten



- 1. _____
- 2. _____
- 3. _____
- 4. _____
- 5. _____
- 6. _____
- 7. _____
- 8. _____
- 9. _____
- 10. _____



Berechne die Fläche jedes Dreiecks. Die Einheiten sind nicht maßstäblich.



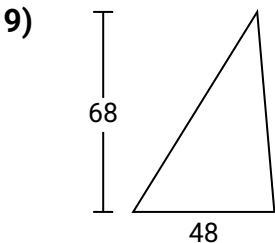
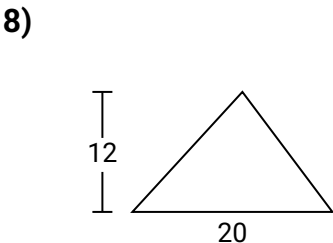
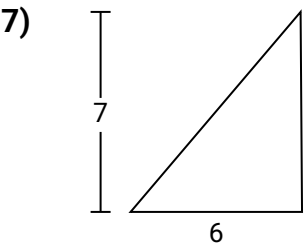
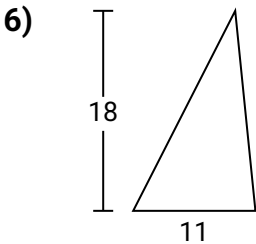
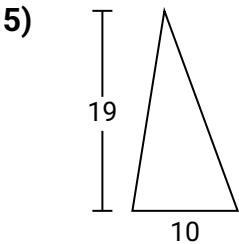
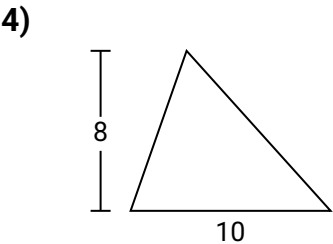
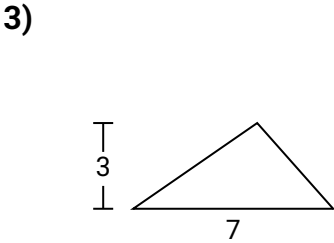
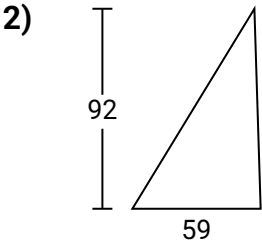
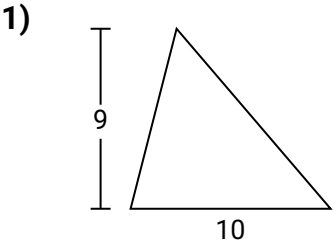
Antworten

- 1. **45**
- 2. **2.714**
- 3. **10,5**
- 4. **40**
- 5. **95**
- 6. **99**
- 7. **21**
- 8. **120**
- 9. **1.632**
- 10. **2.728**



Berechne die Fläche jedes Dreiecks. Die Einheiten sind nicht maßstäblich.

45	95	40
1.632	10,5	2.714
99	21	120



Antworten

- 1. _____
- 2. _____
- 3. _____
- 4. _____
- 5. _____
- 6. _____
- 7. _____
- 8. _____
- 9. _____
- 10. _____