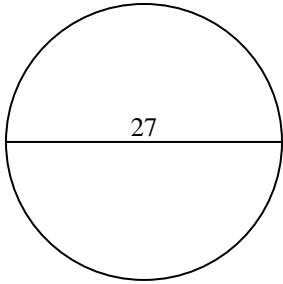




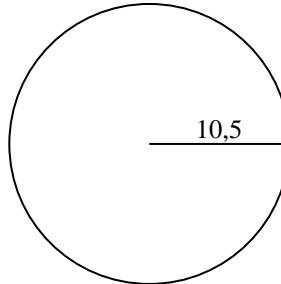
Berechne die Kreisfläche. Die Kreise sind nicht maßstäblich.

Antworten

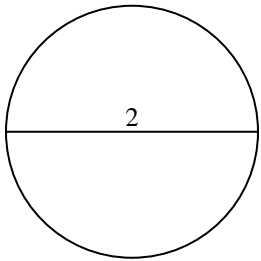
1)



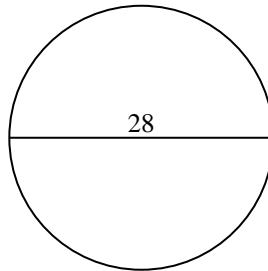
2)



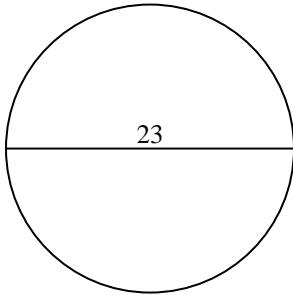
3)



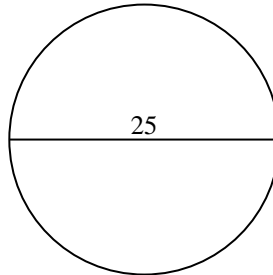
4)



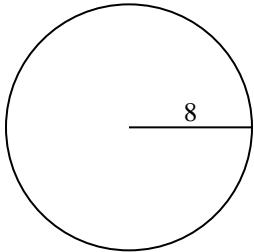
5)



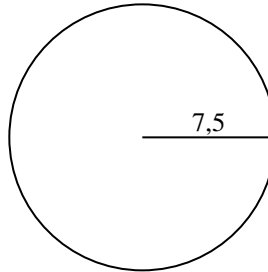
6)



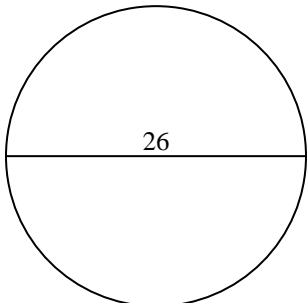
7)



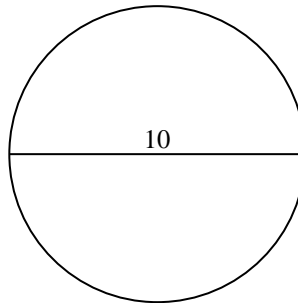
8)



9)



10)

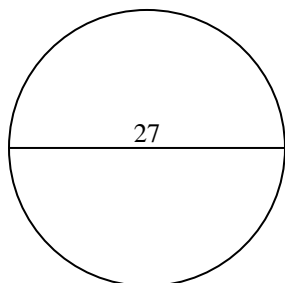


- 1. _____
- 2. _____
- 3. _____
- 4. _____
- 5. _____
- 6. _____
- 7. _____
- 8. _____
- 9. _____
- 10. _____

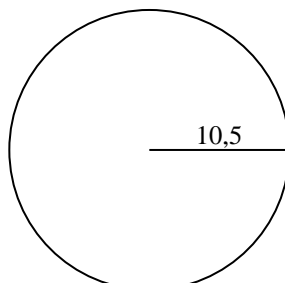


Berechne die Kreisfläche. Die Kreise sind nicht maßstäblich.

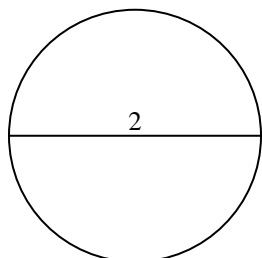
1)



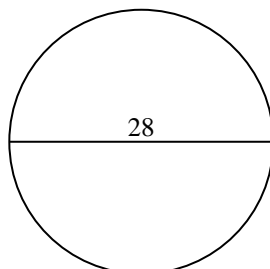
2)



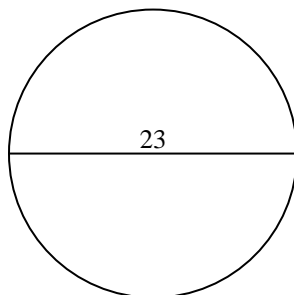
3)



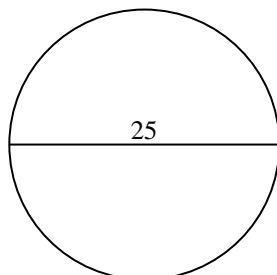
4)



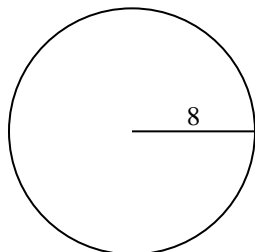
5)



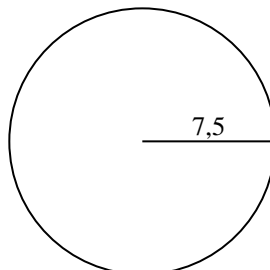
6)



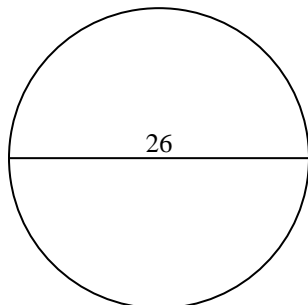
7)



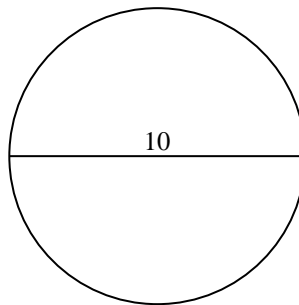
8)



9)



10)

**Antworten**1. **572,6**2. **346,4**3. **3,1**4. **615,8**5. **415,5**6. **490,9**7. **201,1**8. **176,7**9. **530,9**10. **78,5**



Berechne die Kreisfläche. Die Kreise sind nicht maßstäblich.

530,9	3,1	615,8	201,1	490,9
572,6	415,5	176,7	346,4	

Antworten

- 1. _____
- 2. _____
- 3. _____
- 4. _____
- 5. _____
- 6. _____
- 7. _____
- 8. _____
- 9. _____

