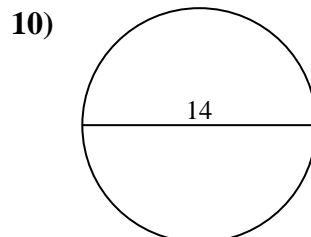
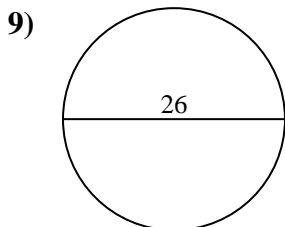
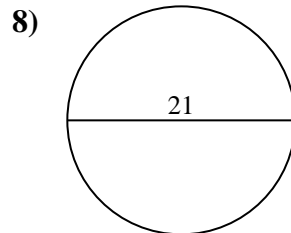
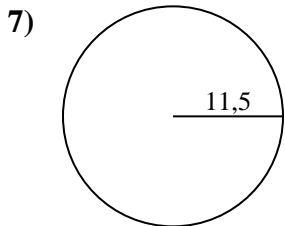
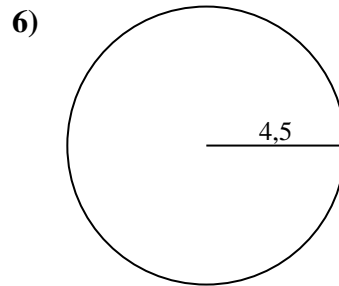
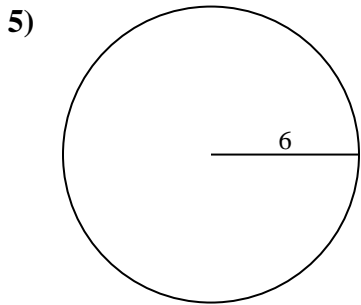
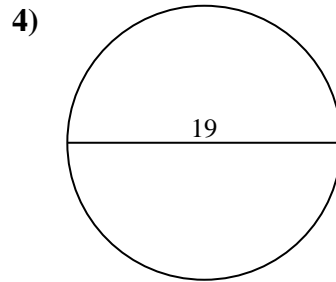
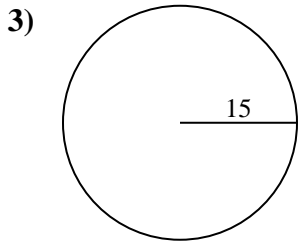
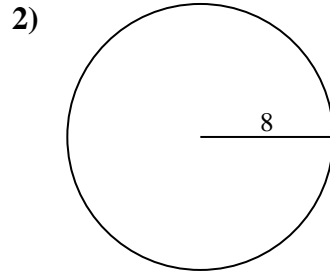
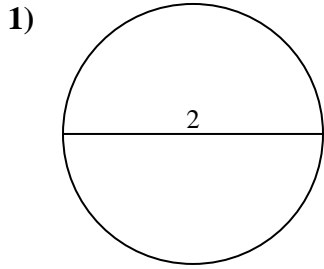




**Berechne die Kreisfläche. Die Kreise sind nicht maßstäblich.**

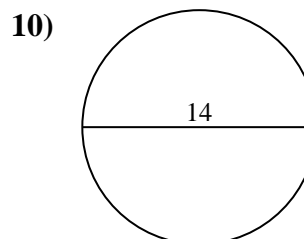
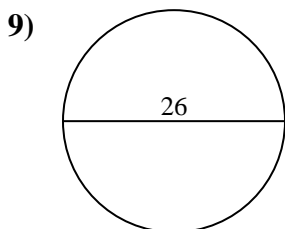
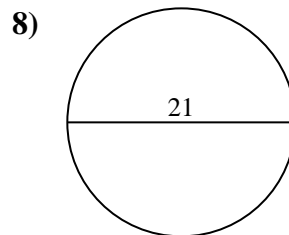
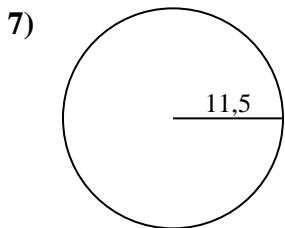
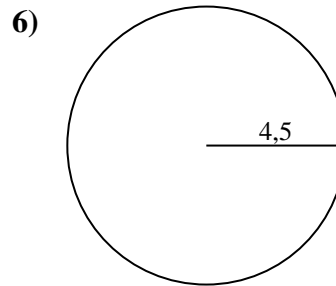
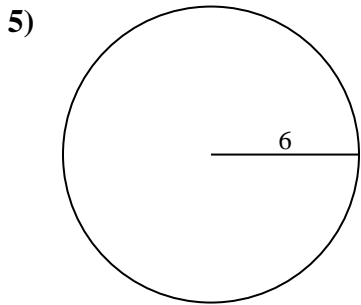
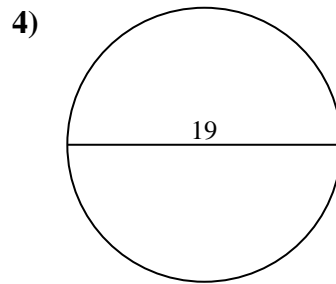
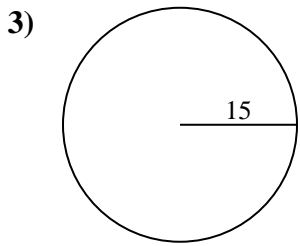
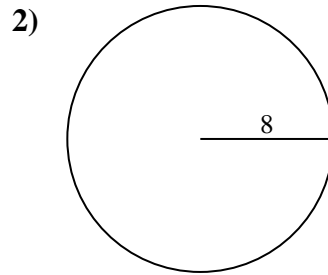
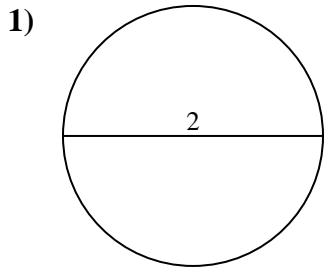


**Antworten**

- 1. \_\_\_\_\_
- 2. \_\_\_\_\_
- 3. \_\_\_\_\_
- 4. \_\_\_\_\_
- 5. \_\_\_\_\_
- 6. \_\_\_\_\_
- 7. \_\_\_\_\_
- 8. \_\_\_\_\_
- 9. \_\_\_\_\_
- 10. \_\_\_\_\_



Berechne die Kreisfläche. Die Kreise sind nicht maßstäblich.



**Antworten**

1. 3,1

2. 201,1

3. 706,9

4. 283,5

5. 113,1

6. 63,6

7. 415,5

8. 346,4

9. 530,9

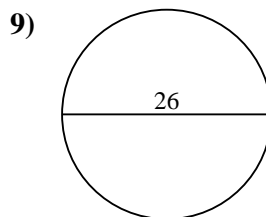
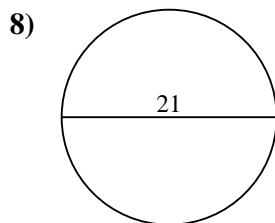
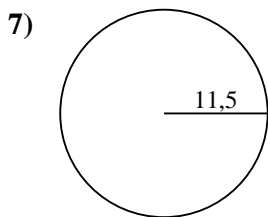
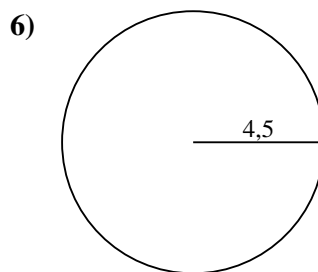
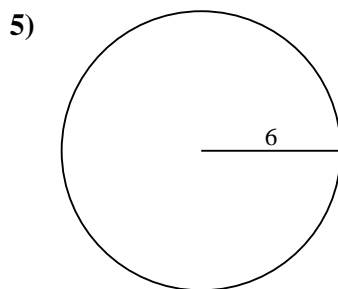
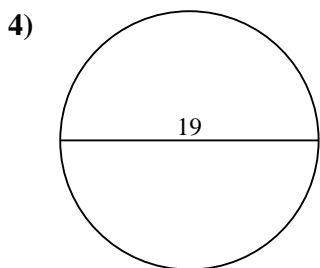
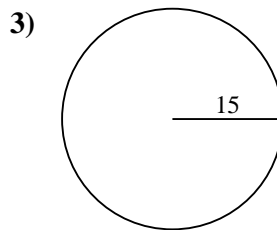
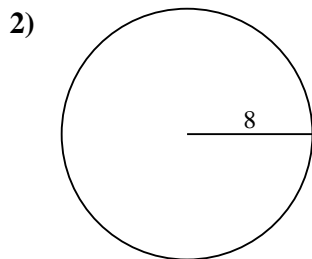
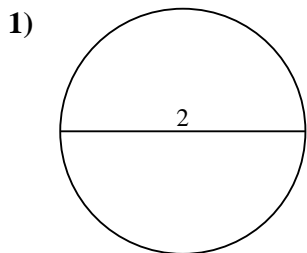
10. 153,9



**Berechne die Kreisfläche. Die Kreise sind nicht maßstäblich.**

201,1	3,1	283,5	346,4	63,6
706,9	113,1	530,9	415,5	

**Antworten**



- 1. \_\_\_\_\_
- 2. \_\_\_\_\_
- 3. \_\_\_\_\_
- 4. \_\_\_\_\_
- 5. \_\_\_\_\_
- 6. \_\_\_\_\_
- 7. \_\_\_\_\_
- 8. \_\_\_\_\_
- 9. \_\_\_\_\_