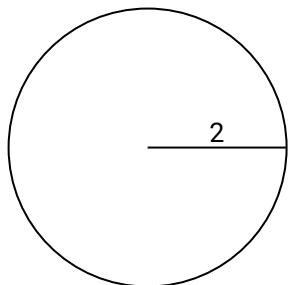




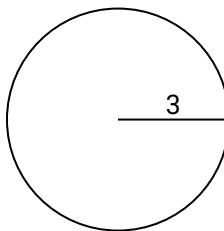
Berechne die Kreisfläche. Die Kreise sind nicht maßstäblich.

Antworten

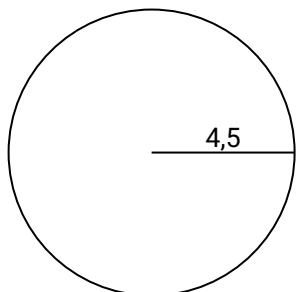
1)



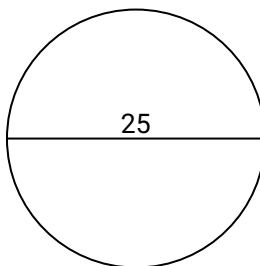
2)



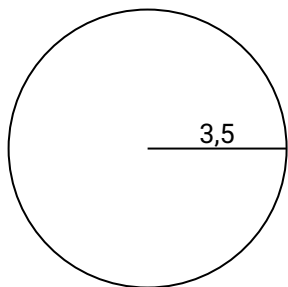
3)



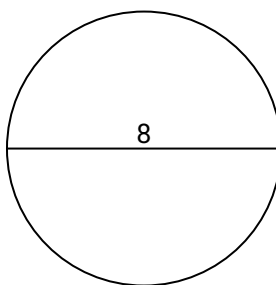
4)



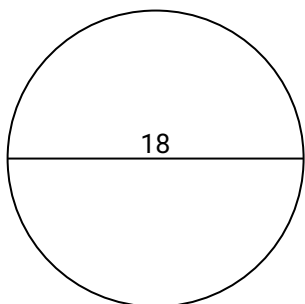
5)



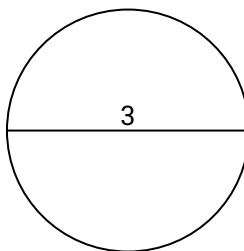
6)



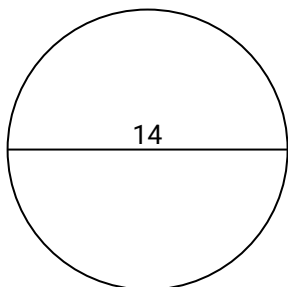
7)



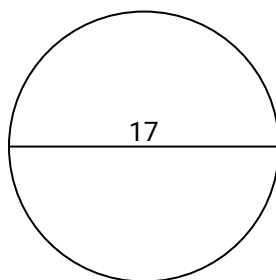
8)



9)



10)



1. _____

2. _____

3. _____

4. _____

5. _____

6. _____

7. _____

8. _____

9. _____

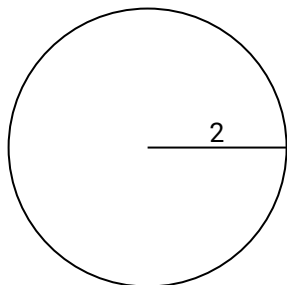
10. _____



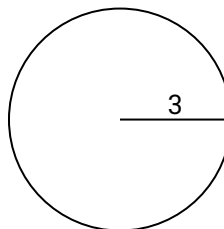
Berechne die Kreisfläche. Die Kreise sind nicht maßstäblich.

Antworten

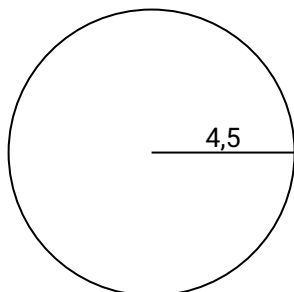
1)



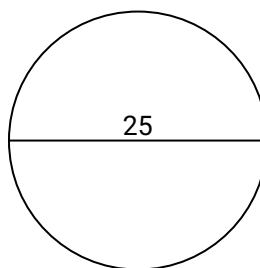
2)



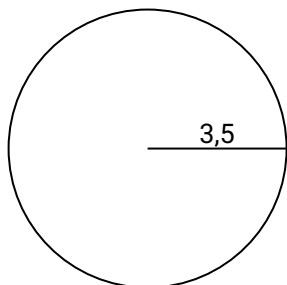
3)



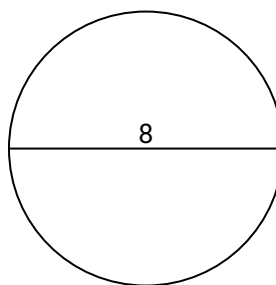
4)



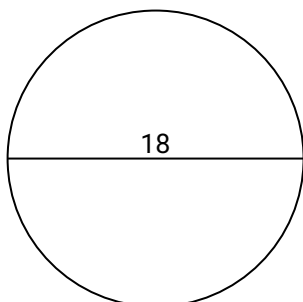
5)



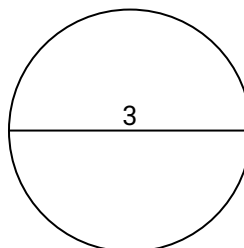
6)



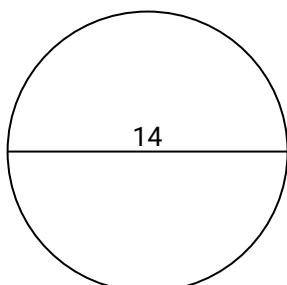
7)



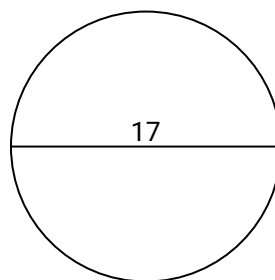
8)



9)



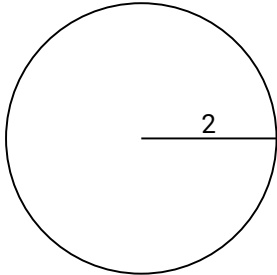
10)

1. **12,6**2. **28,3**3. **63,6**4. **490,9**5. **38,5**6. **50,3**7. **254,5**8. **7,1**9. **153,9**10. **227**

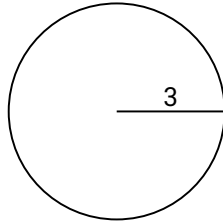
**Berechne die Kreisfläche. Die Kreise sind nicht maßstäblich.****Antworten**

153,9	7,1	38,5	254,5	63,6
490,9	12,6	28,3	50,3	

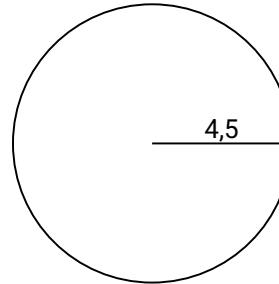
1)



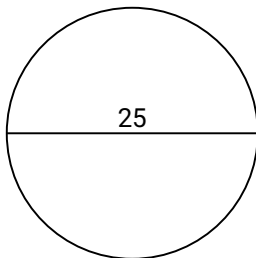
2)



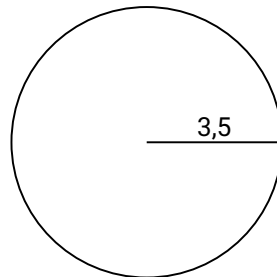
3)



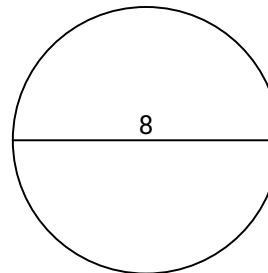
4)



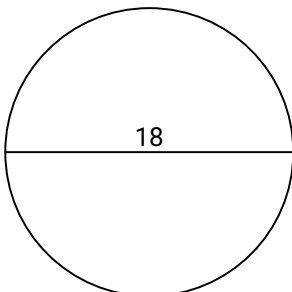
5)



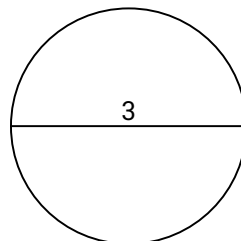
6)



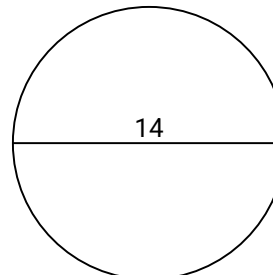
7)



8)



9)



1. _____
2. _____
3. _____
4. _____
5. _____
6. _____
7. _____
8. _____
9. _____
10. _____