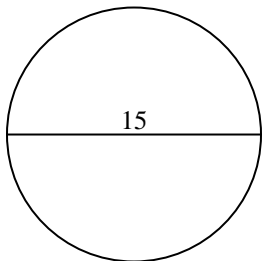


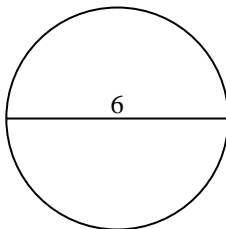


Berechne die Kreisfläche und den Kreisumfang jedes Kreises. Die Kreise sind nicht maßstäblich.

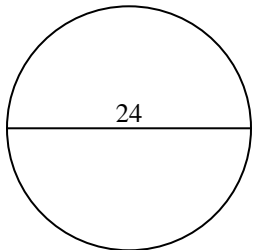
1)



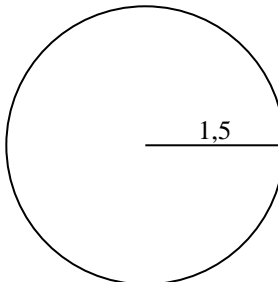
2)



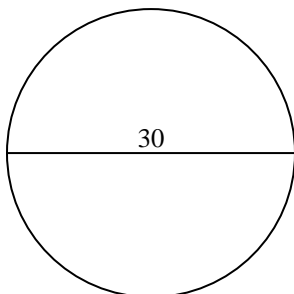
3)



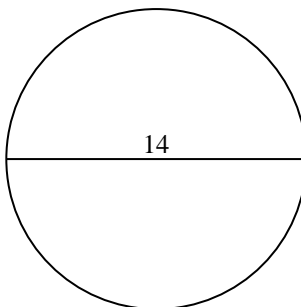
4)



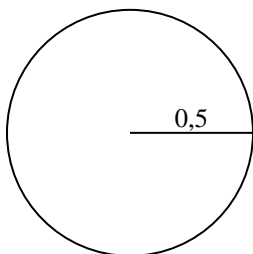
5)



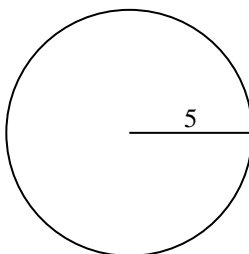
6)



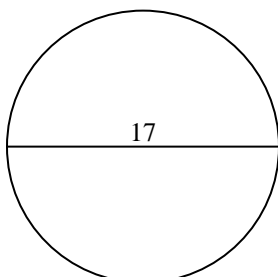
7)



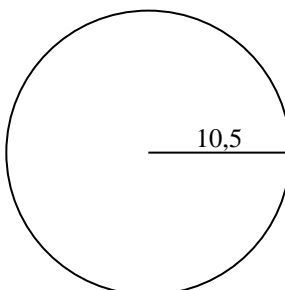
8)



9)



10)



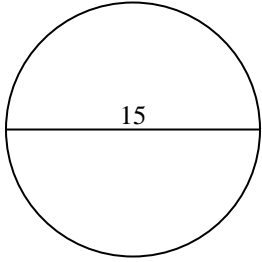
Antworten

- 1. _____
- 2. _____
- 3. _____
- 4. _____
- 5. _____
- 6. _____
- 7. _____
- 8. _____
- 9. _____
- 10. _____

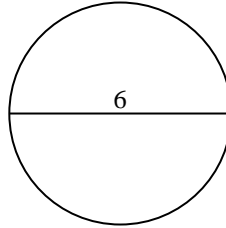


Berechne die Kreisfläche und den Kreisumfang jedes Kreises. Die Kreise sind nicht maßstäblich.

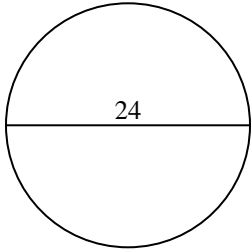
1)



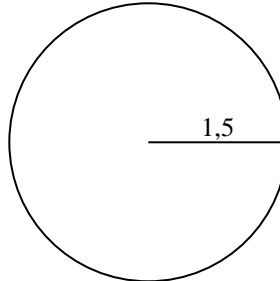
2)



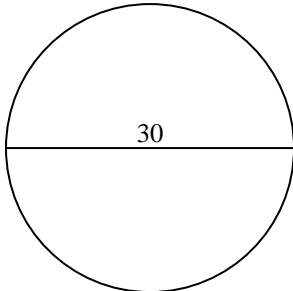
3)



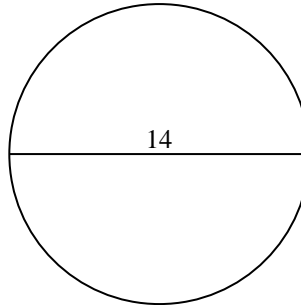
4)



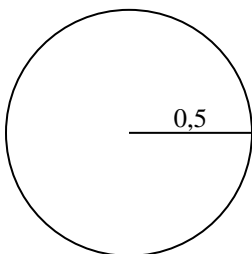
5)



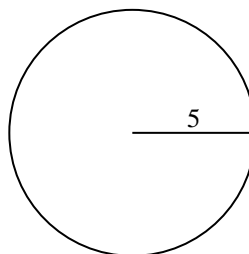
6)



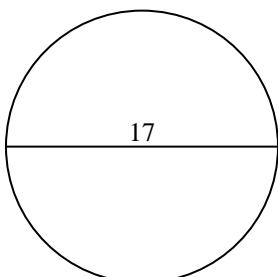
7)



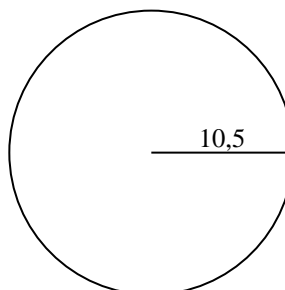
8)



9)



10)



Antworten

1.	<u>176,7</u>	<u>47,1</u>
2.	<u>28,3</u>	<u>18,8</u>
3.	<u>452,4</u>	<u>75,4</u>
4.	<u>7,1</u>	<u>9,4</u>
5.	<u>706,9</u>	<u>94,2</u>
6.	<u>153,9</u>	<u>44</u>
7.	<u>0,8</u>	<u>3,1</u>
8.	<u>78,5</u>	<u>31,4</u>
9.	<u>227</u>	<u>53,4</u>
10.	<u>346,4</u>	<u>66</u>



Berechne die Kreisfläche und den Kreisumfang jedes Kreises. Die Kreise sind nicht maßstäblich.

78,5	75,4	7,1	18,8	53,4
31,4	28,3	153,9	3,1	9,4
176,7	0,8	452,4	706,9	47,1
227	44	94,2		

Antworten

1. _____
2. _____
3. _____
4. _____
5. _____
6. _____
7. _____
8. _____
9. _____

