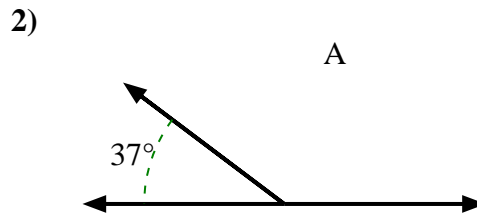
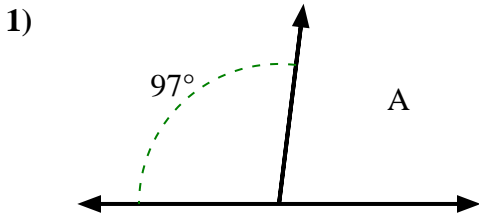


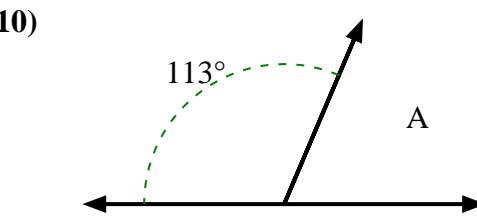
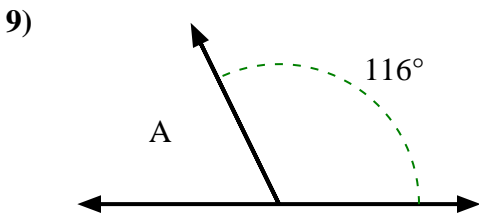
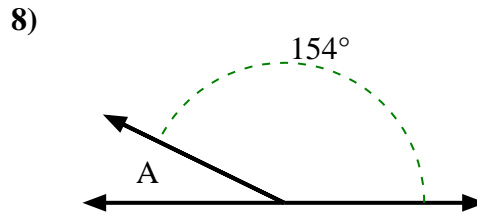
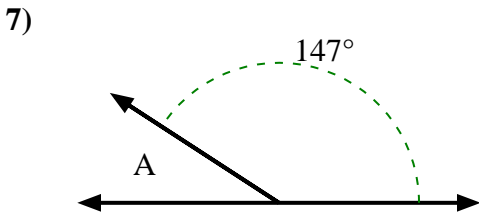
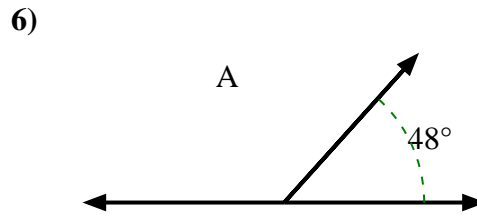
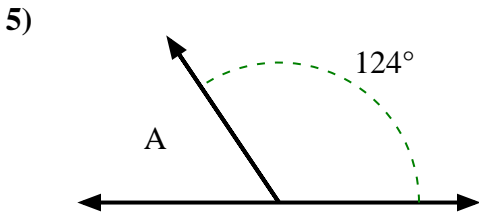
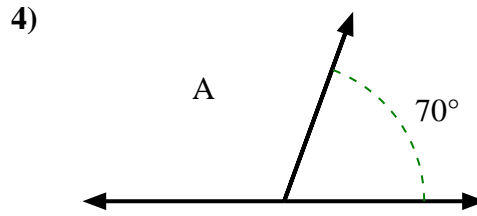
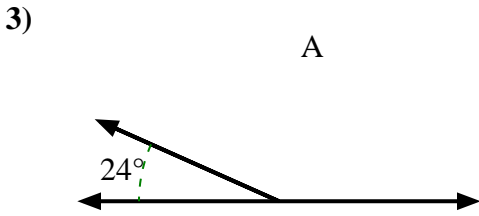


Finden Sie den Wert von 'A' in der Menge der Zusatzwinkel.

**Antworten**



- 1. \_\_\_\_\_
- 2. \_\_\_\_\_
- 3. \_\_\_\_\_
- 4. \_\_\_\_\_
- 5. \_\_\_\_\_
- 6. \_\_\_\_\_
- 7. \_\_\_\_\_
- 8. \_\_\_\_\_
- 9. \_\_\_\_\_
- 10. \_\_\_\_\_

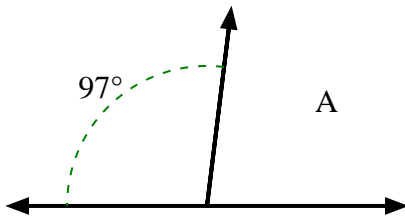




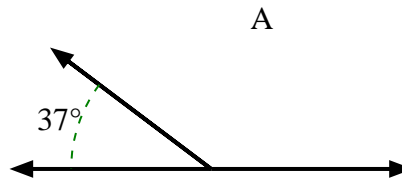
Finden Sie den Wert von 'A' in der Menge der Zusatzwinkel.

**Antworten**

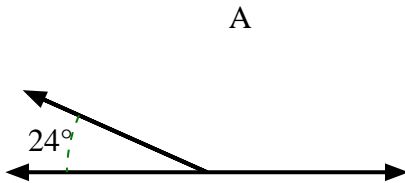
1)



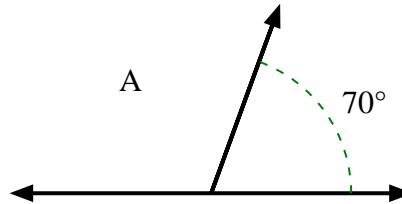
2)



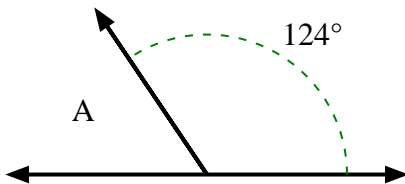
3)



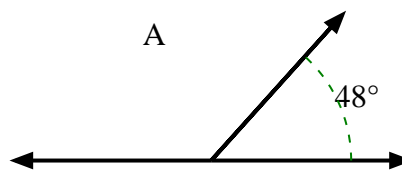
4)



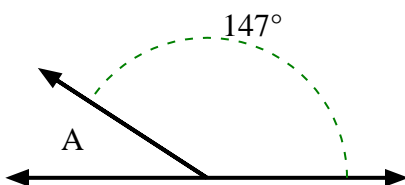
5)



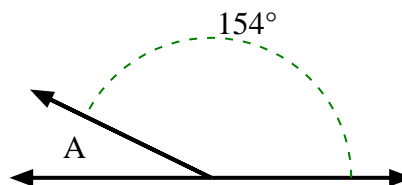
6)



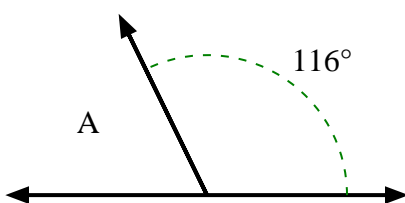
7)



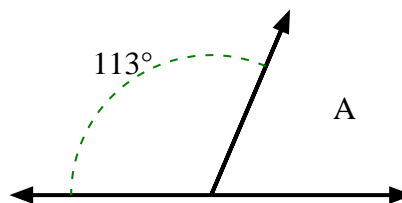
8)



9)



10)

1. **83°**2. **143°**3. **156°**4. **110°**5. **56°**6. **132°**7. **33°**8. **26°**9. **64°**10. **67°**