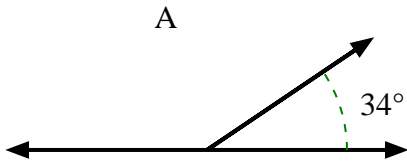




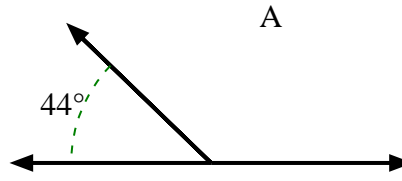
Finden Sie den Wert von 'A' in der Menge der Zusatzwinkel.

**Antworten**

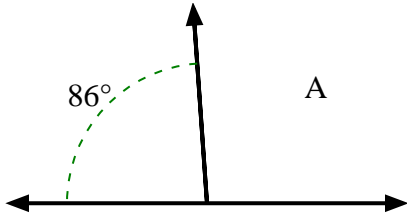
1)



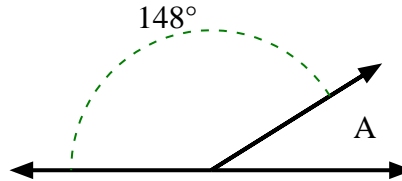
2)



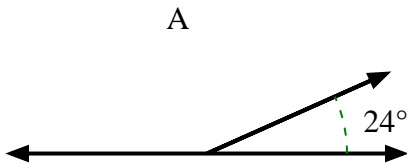
3)



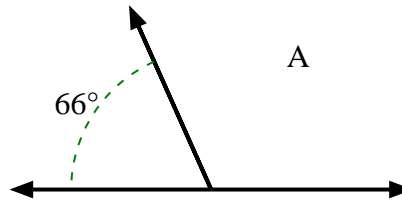
4)



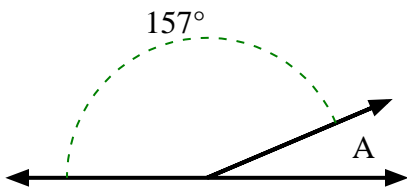
5)



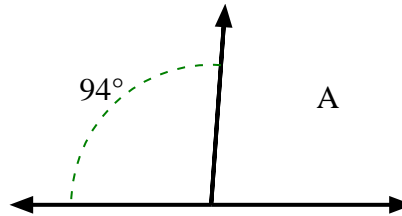
6)



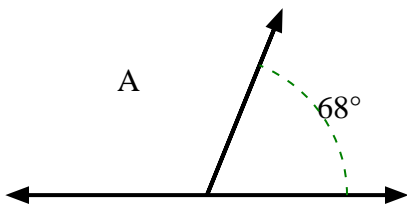
7)



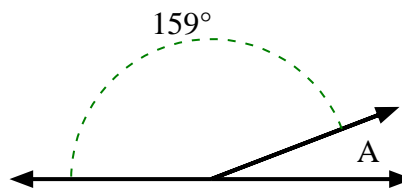
8)



9)



10)



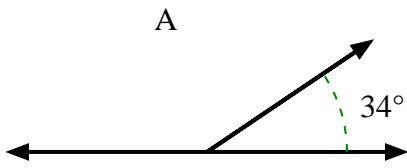
1. \_\_\_\_\_
2. \_\_\_\_\_
3. \_\_\_\_\_
4. \_\_\_\_\_
5. \_\_\_\_\_
6. \_\_\_\_\_
7. \_\_\_\_\_
8. \_\_\_\_\_
9. \_\_\_\_\_
10. \_\_\_\_\_



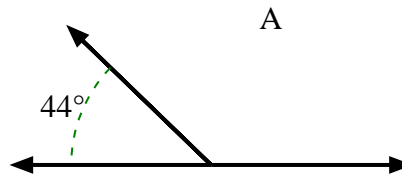
Finden Sie den Wert von 'A' in der Menge der Zusatzwinkel.

**Antworten**

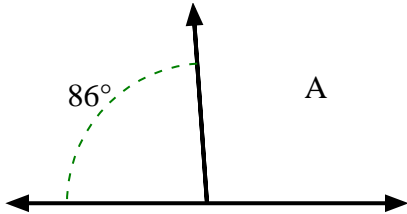
1)



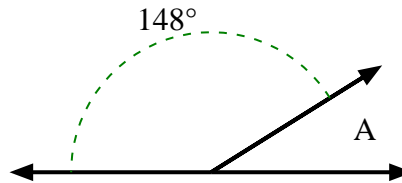
2)



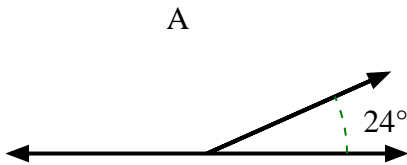
3)



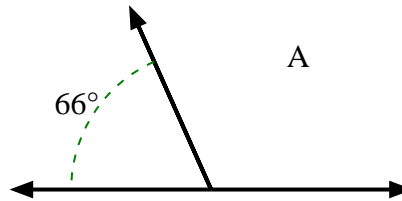
4)



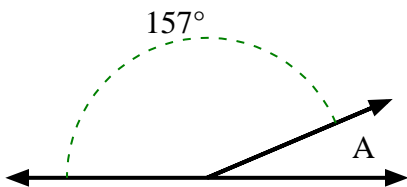
5)



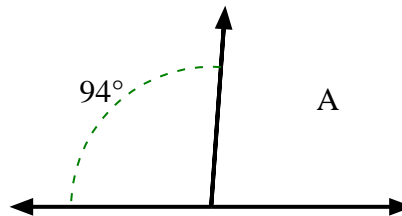
6)



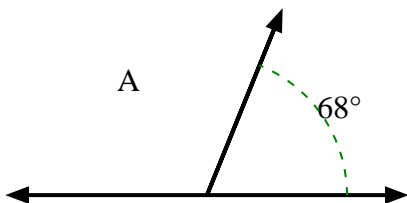
7)



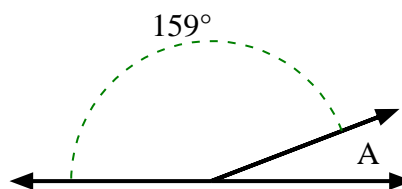
8)



9)



10)

1. **146°**2. **136°**3. **94°**4. **32°**5. **156°**6. **114°**7. **23°**8. **86°**9. **112°**10. **21°**