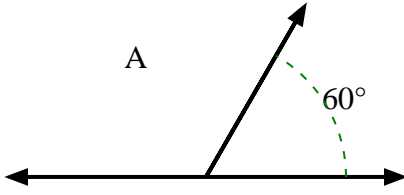




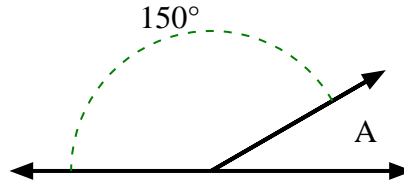
Finden Sie den Wert von 'A' in der Menge der Zusatzwinkel.

**Antworten**

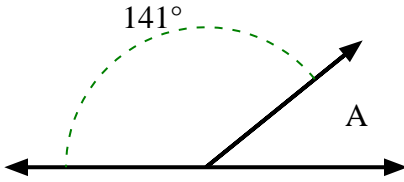
1)



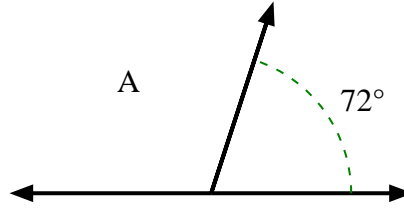
2)



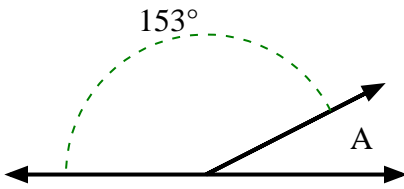
3)



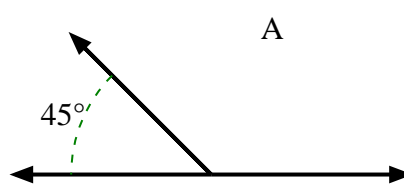
4)



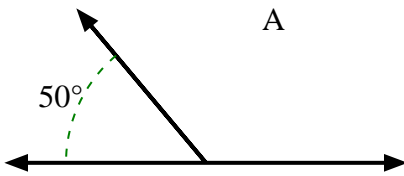
5)



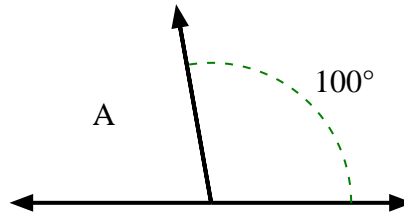
6)



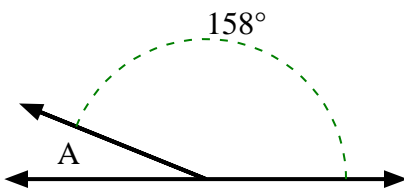
7)



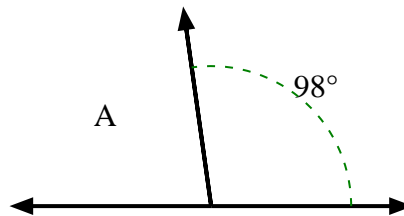
8)



9)



10)



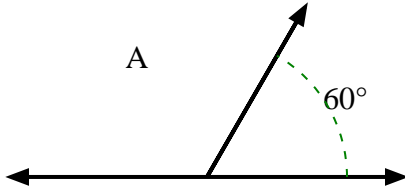
1. \_\_\_\_\_
2. \_\_\_\_\_
3. \_\_\_\_\_
4. \_\_\_\_\_
5. \_\_\_\_\_
6. \_\_\_\_\_
7. \_\_\_\_\_
8. \_\_\_\_\_
9. \_\_\_\_\_
10. \_\_\_\_\_



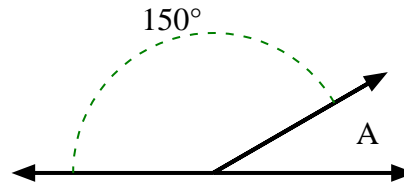
Finden Sie den Wert von 'A' in der Menge der Zusatzwinkel.

**Antworten**

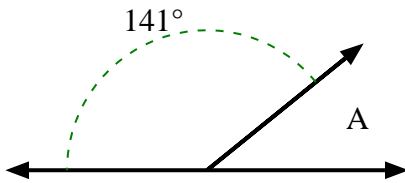
1)



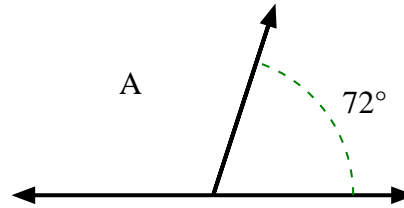
2)



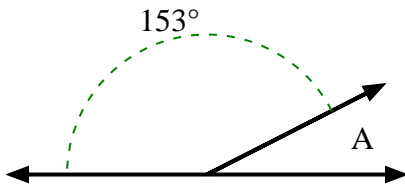
3)



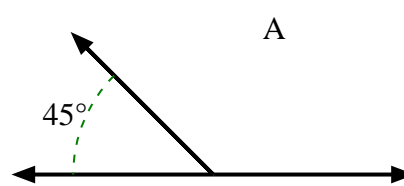
4)



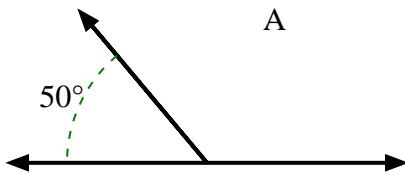
5)



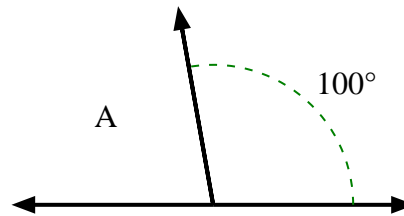
6)



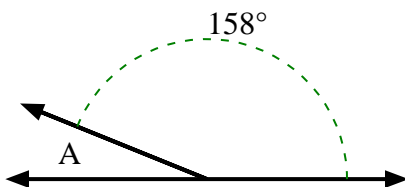
7)



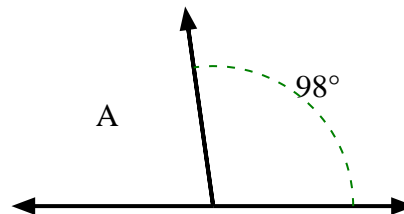
8)



9)



10)

1. **120°**2. **30°**3. **39°**4. **108°**5. **27°**6. **135°**7. **130°**8. **80°**9. **22°**10. **82°**