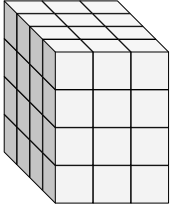


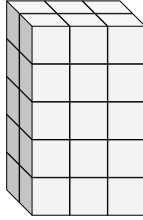


Finde die Länge, Breite und Höhe des rechteckigen Körpers. Bestimme danach das Volumen.

Bsp)



1)



Bsp. 4 3 4 48

1. \_\_\_\_\_

2. \_\_\_\_\_

3. \_\_\_\_\_

4. \_\_\_\_\_

5. \_\_\_\_\_

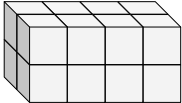
6. \_\_\_\_\_

7. \_\_\_\_\_

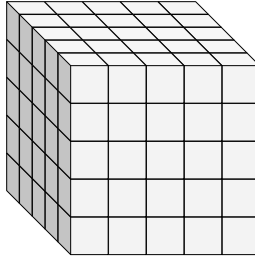
8. \_\_\_\_\_

9. \_\_\_\_\_

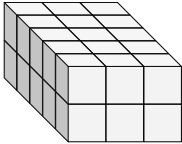
2)



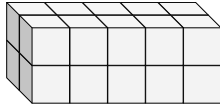
3)



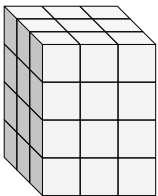
4)



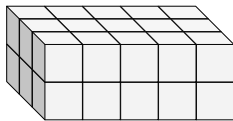
5)



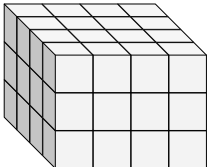
6)



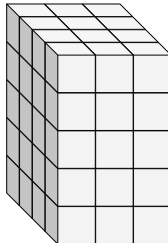
7)



8)



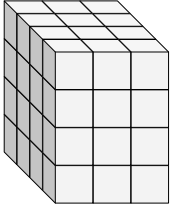
9)



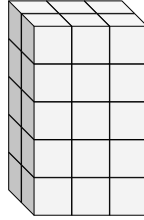


Finde die Länge, Breite und Höhe des rechteckigen Körpers. Bestimme danach das Volumen.

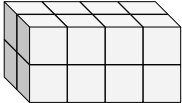
Bsp)



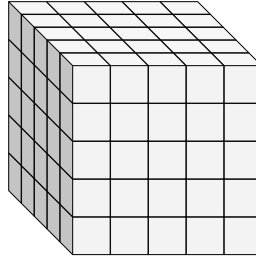
1)



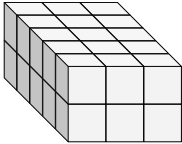
2)



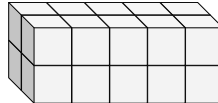
3)



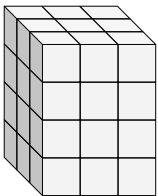
4)



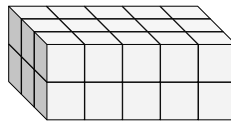
5)



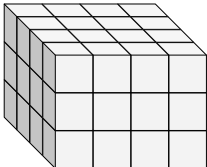
6)



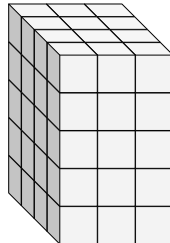
7)



8)



9)



**Antworten**

Bsp. 4 3 4 48

1. 2 3 5 30

2. 2 4 2 16

3. 5 5 5 125

4. 5 3 2 30

5. 2 5 2 20

6. 3 3 4 36

7. 3 5 2 30

8. 4 4 3 48

9. 4 3 5 60