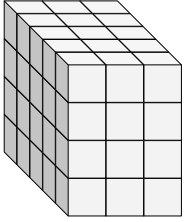


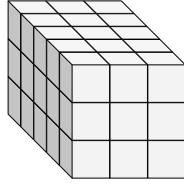


Finde die Länge, Breite und Höhe des rechteckigen Körpers. Bestimme danach das Volumen.

Bsp)



1)



Antworten

Bsp. 5 3 4 60

1. _____

2. _____

3. _____

4. _____

5. _____

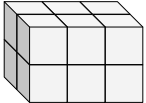
6. _____

7. _____

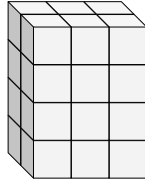
8. _____

9. _____

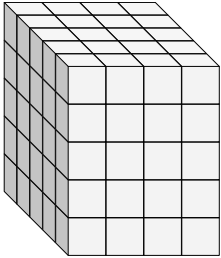
2)



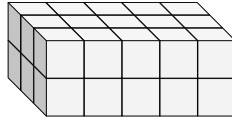
3)



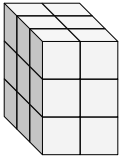
4)



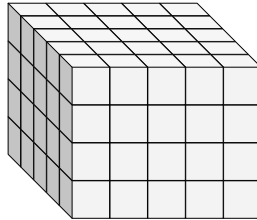
5)



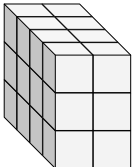
6)



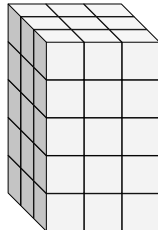
7)



8)



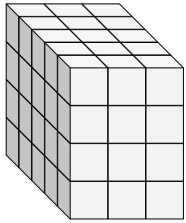
9)



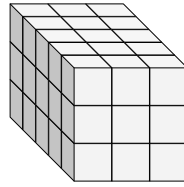


Finde die Länge, Breite und Höhe des rechteckigen Körpers. Bestimme danach das Volumen.

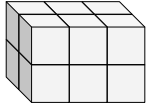
Bsp)



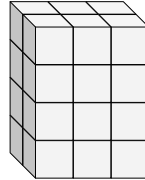
1)



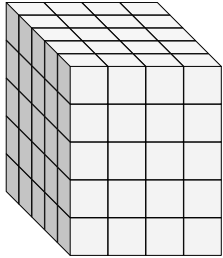
2)



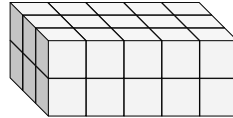
3)



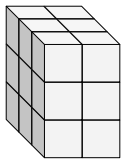
4)



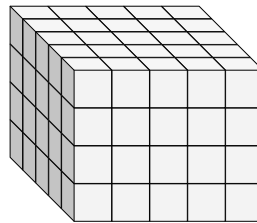
5)



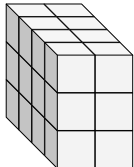
6)



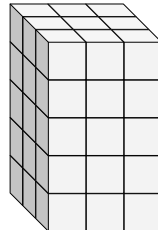
7)



8)



9)



Antworten

Bsp. 5 3 4 60

1. 5 3 3 45

2. 2 3 2 12

3. 2 3 4 24

4. 5 4 5 100

5. 3 5 2 30

6. 3 2 3 18

7. 5 5 4 100

8. 4 2 3 24

9. 3 3 5 45