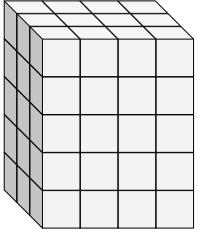


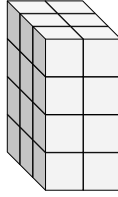


Finde die Länge, Breite und Höhe des rechteckigen Körpers. Bestimme danach das Volumen.

Bsp)



1)



Bsp. 3 4 5 60

1. \_\_\_\_\_

2. \_\_\_\_\_

3. \_\_\_\_\_

4. \_\_\_\_\_

5. \_\_\_\_\_

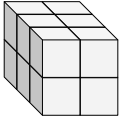
6. \_\_\_\_\_

7. \_\_\_\_\_

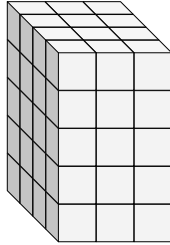
8. \_\_\_\_\_

9. \_\_\_\_\_

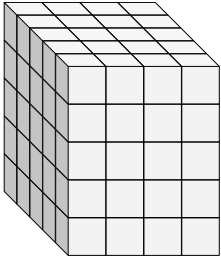
2)



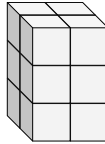
3)



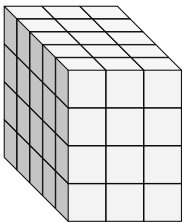
4)



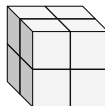
5)



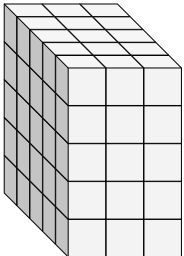
6)



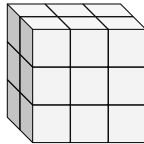
7)



8)



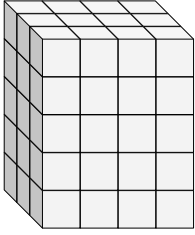
9)



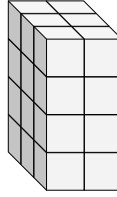


Finde die Länge, Breite und Höhe des rechteckigen Körpers. Bestimme danach das Volumen.

Bsp)



1)



**Antworten**

Bsp. 3 4 5 60

1. 3 2 4 24

2. 3 2 2 12

3. 4 3 5 60

4. 5 4 5 100

5. 2 2 3 12

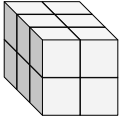
6. 5 3 4 60

7. 2 2 2 8

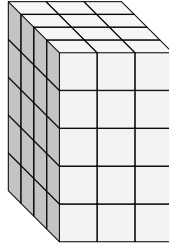
8. 5 3 5 75

9. 2 3 3 18

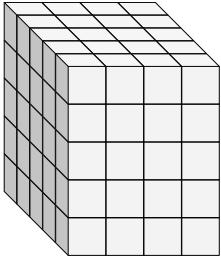
2)



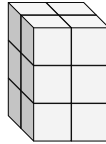
3)



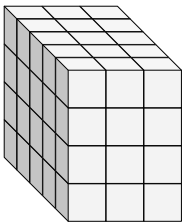
4)



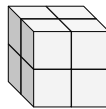
5)



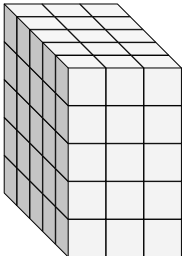
6)



7)



8)



9)

