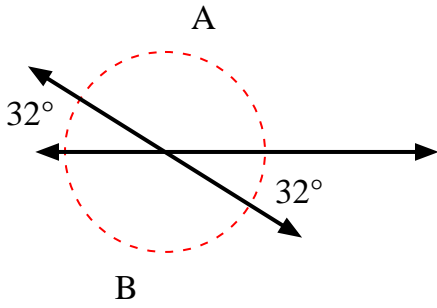


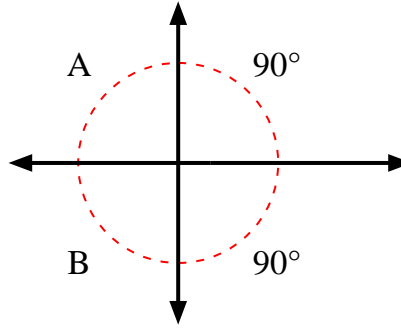


Finden Sie den Wert von Winkel 'A' und Winkel 'B'.

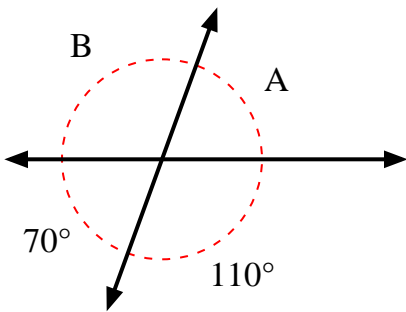
1)



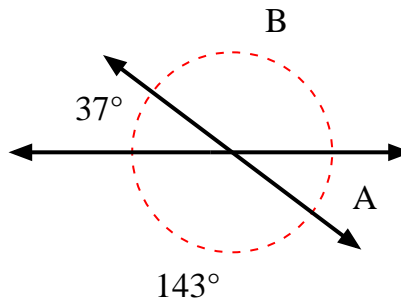
2)



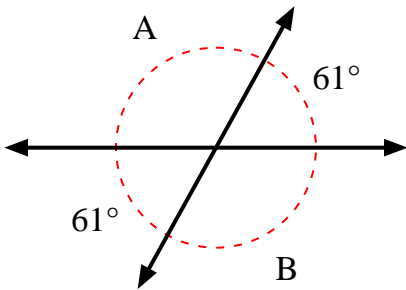
3)



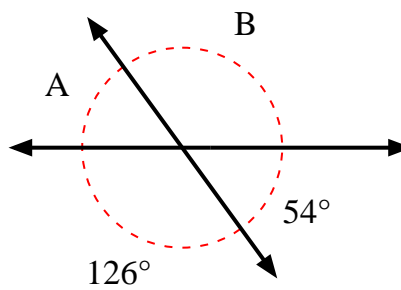
4)



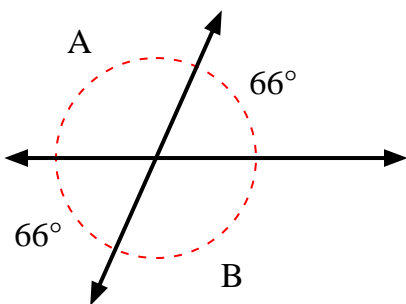
5)



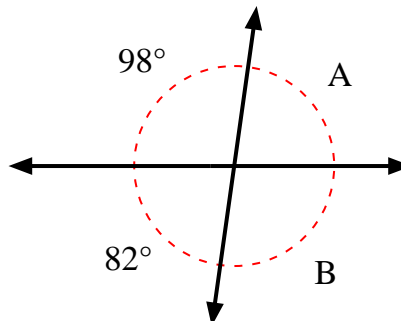
6)



7)



8)



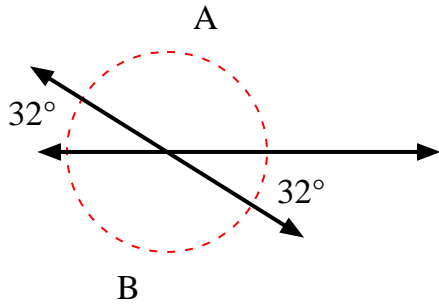
**Antworten**

1. \_\_\_\_\_
2. \_\_\_\_\_
3. \_\_\_\_\_
4. \_\_\_\_\_
5. \_\_\_\_\_
6. \_\_\_\_\_
7. \_\_\_\_\_
8. \_\_\_\_\_

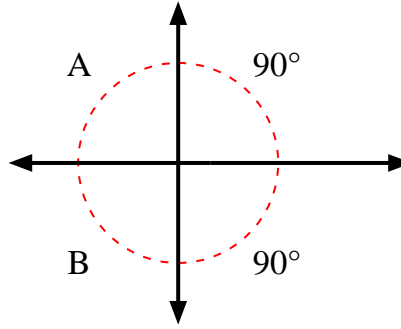


Finden Sie den Wert von Winkel 'A' und Winkel 'B'.

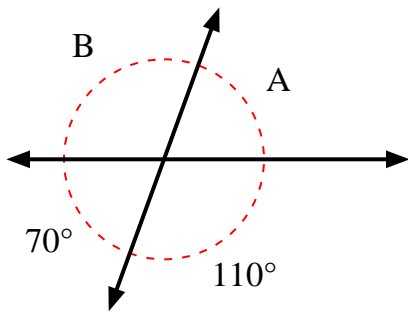
1)



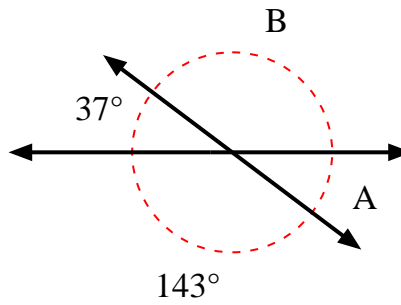
2)



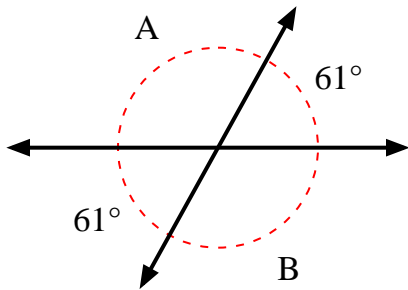
3)



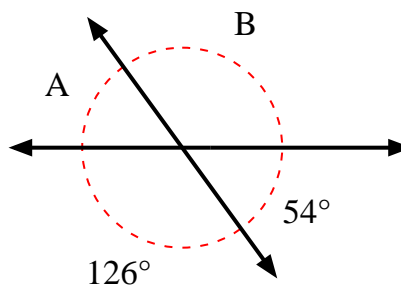
4)



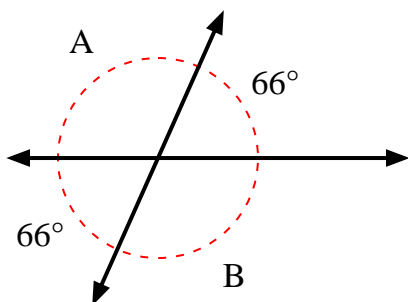
5)



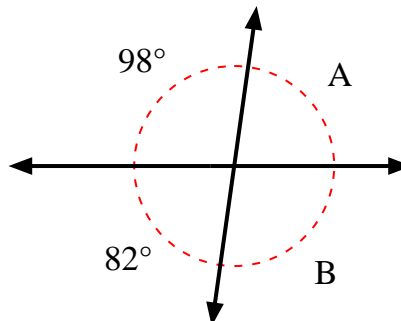
6)



7)



8)



**Antworten**

1.	<b>148°</b>	<b>148°</b>
2.	<b>90°</b>	<b>90°</b>
3.	<b>70°</b>	<b>110°</b>
4.	<b>37°</b>	<b>143°</b>
5.	<b>119°</b>	<b>119°</b>
6.	<b>54°</b>	<b>126°</b>
7.	<b>114°</b>	<b>114°</b>
8.	<b>82°</b>	<b>98°</b>