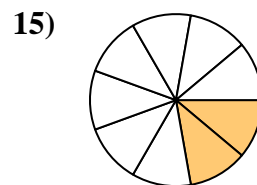
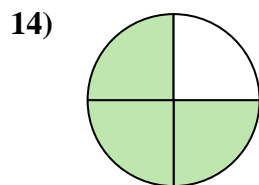
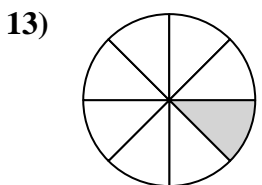
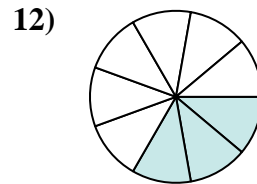
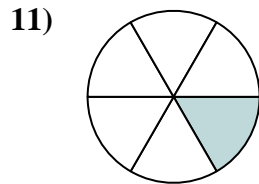
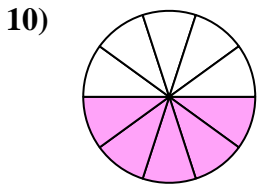
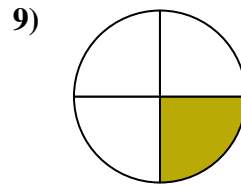
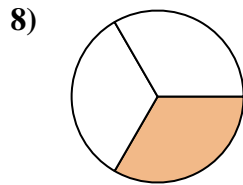
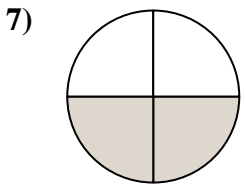
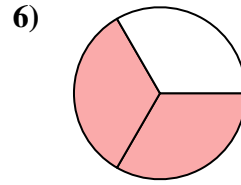
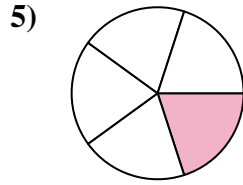
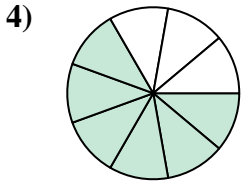
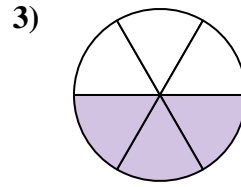
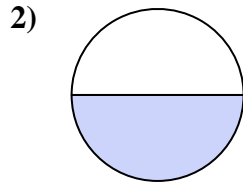
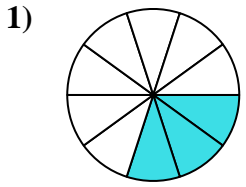




Finden Sie den Winkel (in Grad) des schattierten Teils des Kreises.

**Antworten**



1. \_\_\_\_\_

2. \_\_\_\_\_

3. \_\_\_\_\_

4. \_\_\_\_\_

5. \_\_\_\_\_

6. \_\_\_\_\_

7. \_\_\_\_\_

8. \_\_\_\_\_

9. \_\_\_\_\_

10. \_\_\_\_\_

11. \_\_\_\_\_

12. \_\_\_\_\_

13. \_\_\_\_\_

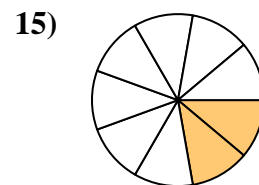
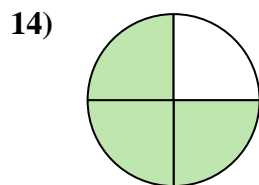
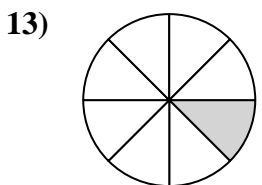
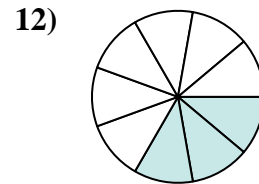
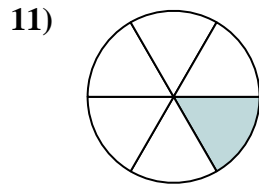
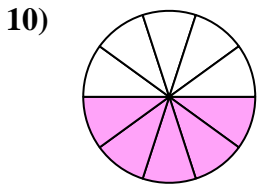
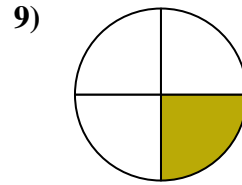
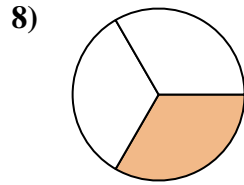
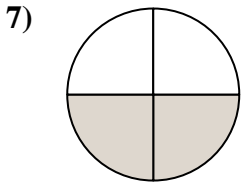
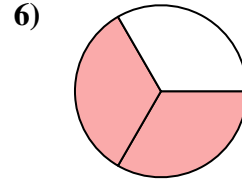
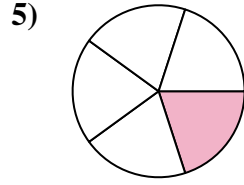
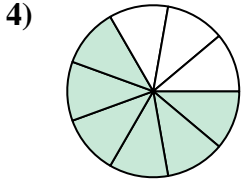
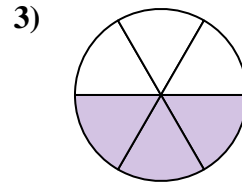
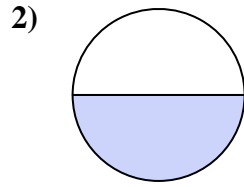
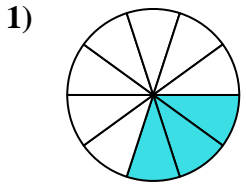
14. \_\_\_\_\_

15. \_\_\_\_\_



Finden Sie den Winkel (in Grad) des schattierten Teils des Kreises.

**Antworten**



1. 108

2. 180

3. 180

4. 240

5. 72

6. 240

7. 180

8. 120

9. 90

10. 180

11. 60

12. 120

13. 45

14. 270

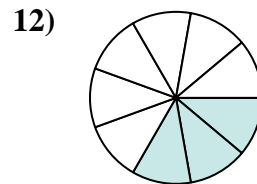
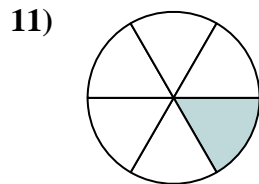
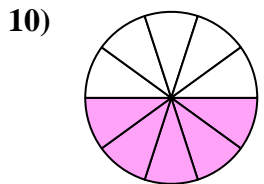
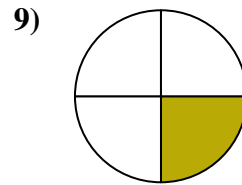
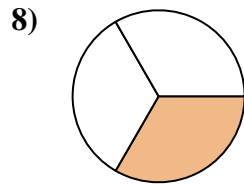
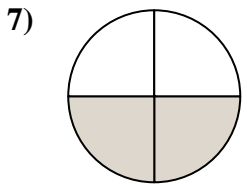
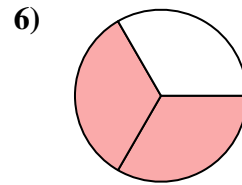
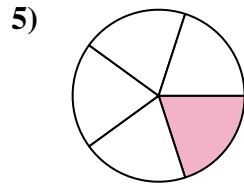
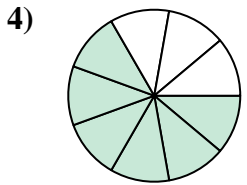
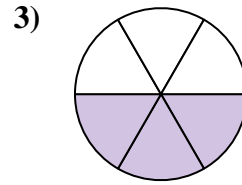
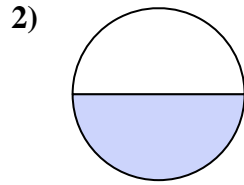
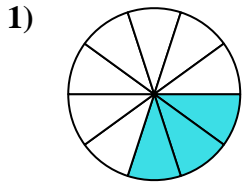
15. 80



Finden Sie den Winkel (in Grad) des schattierten Teils des Kreises.

**Antworten**

72	180	240	108	90
120	180	60	240	180
120	180			



1. \_\_\_\_\_
2. \_\_\_\_\_
3. \_\_\_\_\_
4. \_\_\_\_\_
5. \_\_\_\_\_
6. \_\_\_\_\_
7. \_\_\_\_\_
8. \_\_\_\_\_
9. \_\_\_\_\_
10. \_\_\_\_\_
11. \_\_\_\_\_
12. \_\_\_\_\_