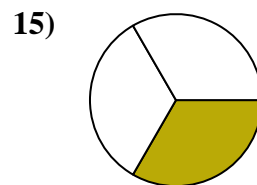
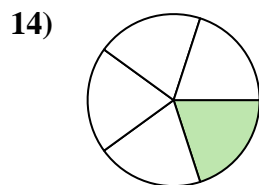
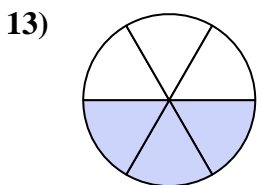
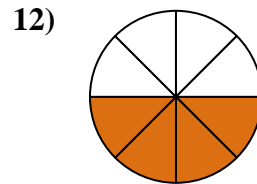
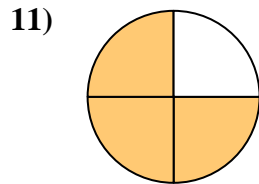
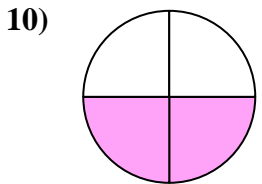
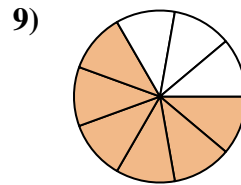
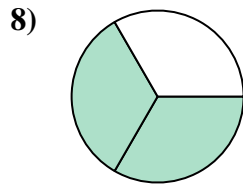
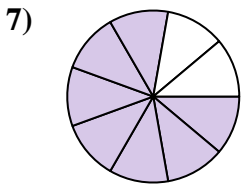
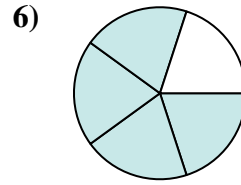
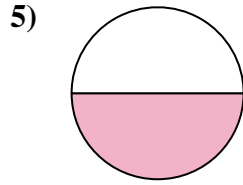
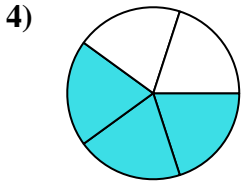
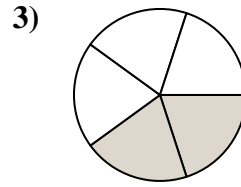
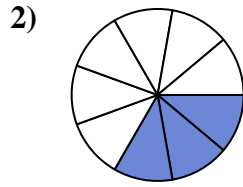
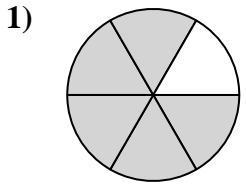




Finden Sie den Winkel (in Grad) des schattierten Teils des Kreises.

**Antworten**

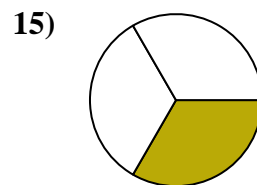
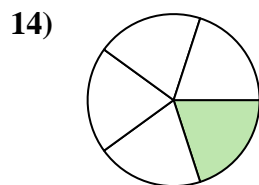
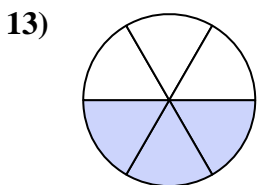
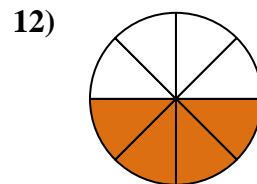
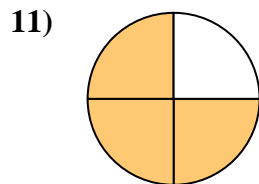
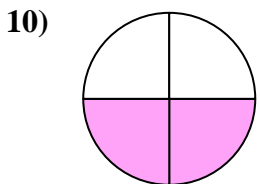
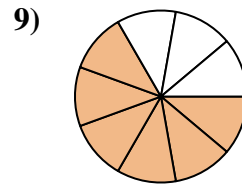
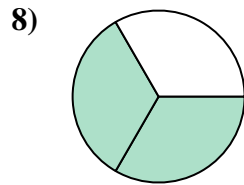
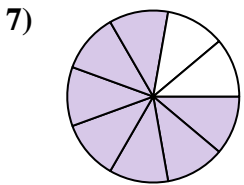
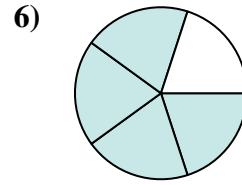
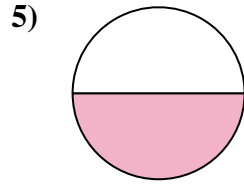
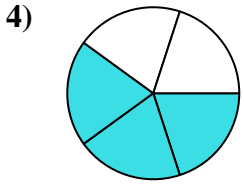
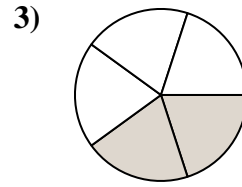
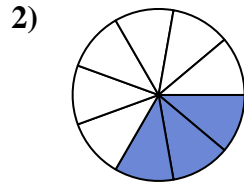
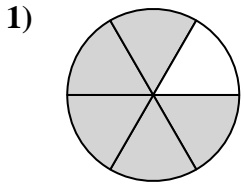


- 1. \_\_\_\_\_
- 2. \_\_\_\_\_
- 3. \_\_\_\_\_
- 4. \_\_\_\_\_
- 5. \_\_\_\_\_
- 6. \_\_\_\_\_
- 7. \_\_\_\_\_
- 8. \_\_\_\_\_
- 9. \_\_\_\_\_
- 10. \_\_\_\_\_
- 11. \_\_\_\_\_
- 12. \_\_\_\_\_
- 13. \_\_\_\_\_
- 14. \_\_\_\_\_
- 15. \_\_\_\_\_



Finden Sie den Winkel (in Grad) des schattierten Teils des Kreises.

**Antworten**



- 1. 300
- 2. 120
- 3. 144
- 4. 216
- 5. 180
- 6. 288
- 7. 280
- 8. 240
- 9. 240
- 10. 180
- 11. 270
- 12. 180
- 13. 180
- 14. 72
- 15. 120



Finden Sie den Winkel (in Grad) des schattierten Teils des Kreises.

**Antworten**

240

180

180

240

270

120

144

288

280

300

216

180

1. \_\_\_\_\_

2. \_\_\_\_\_

3. \_\_\_\_\_

4. \_\_\_\_\_

5. \_\_\_\_\_

6. \_\_\_\_\_

7. \_\_\_\_\_

8. \_\_\_\_\_

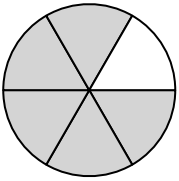
9. \_\_\_\_\_

10. \_\_\_\_\_

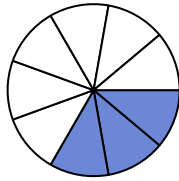
11. \_\_\_\_\_

12. \_\_\_\_\_

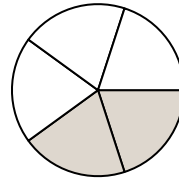
1)



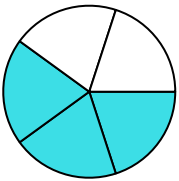
2)



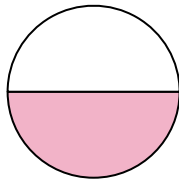
3)



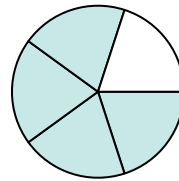
4)



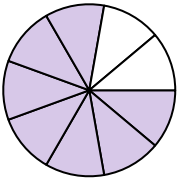
5)



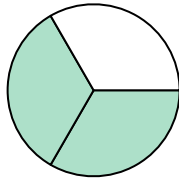
6)



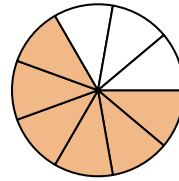
7)



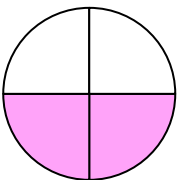
8)



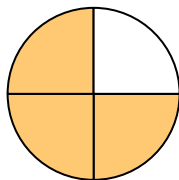
9)



10)



11)



12)

