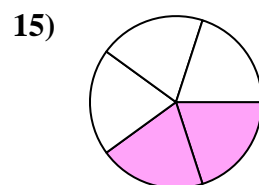
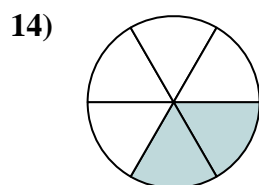
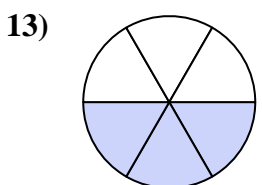
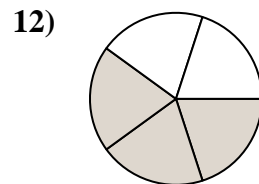
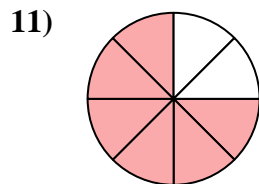
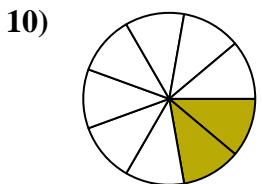
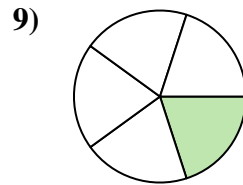
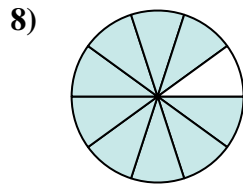
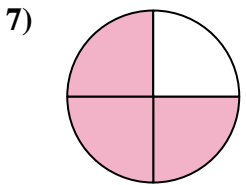
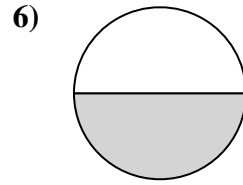
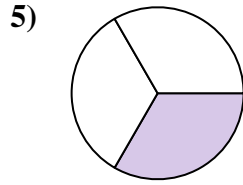
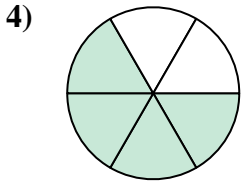
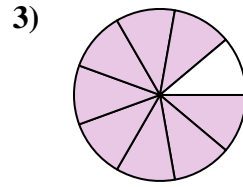
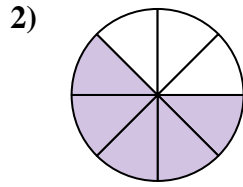
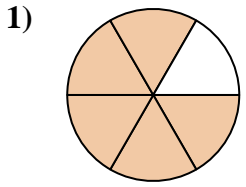




Finden Sie den Winkel (in Grad) des schattierten Teils des Kreises.

Antworten

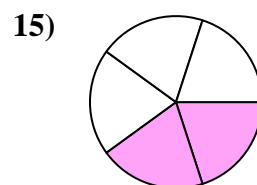
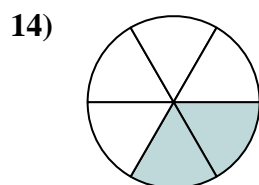
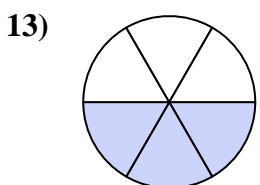
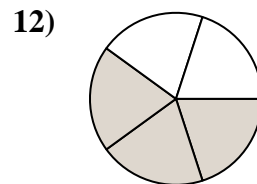
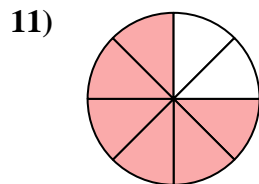
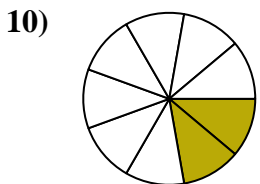
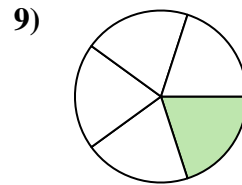
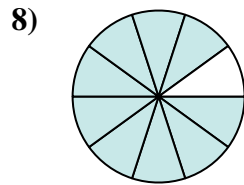
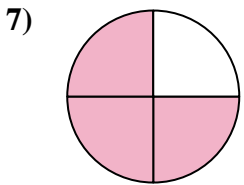
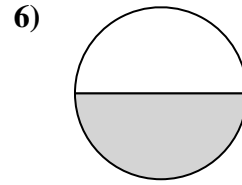
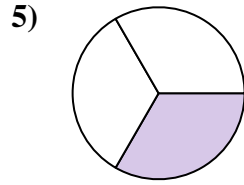
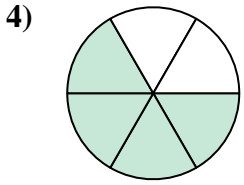
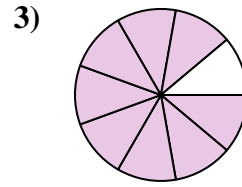
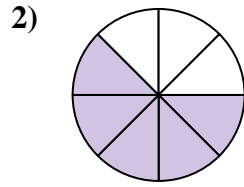
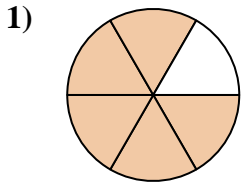


- 1. _____
- 2. _____
- 3. _____
- 4. _____
- 5. _____
- 6. _____
- 7. _____
- 8. _____
- 9. _____
- 10. _____
- 11. _____
- 12. _____
- 13. _____
- 14. _____
- 15. _____



Finden Sie den Winkel (in Grad) des schattierten Teils des Kreises.

Antworten



1. 300

2. 225

3. 320

4. 240

5. 120

6. 180

7. 270

8. 324

9. 72

10. 80

11. 270

12. 216

13. 180

14. 120

15. 144



Finden Sie den Winkel (in Grad) des schattierten Teils des Kreises.

Antworten

270

180

216

72

320

80

240

225

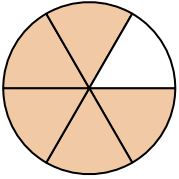
300

120

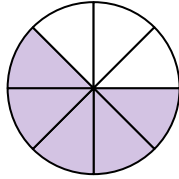
270

324

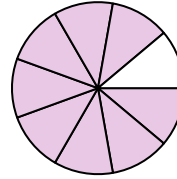
1)



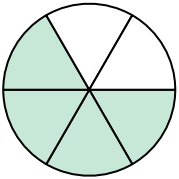
2)



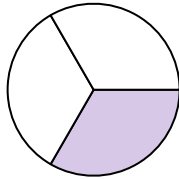
3)



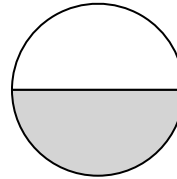
4)



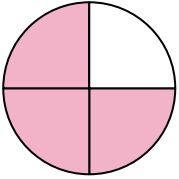
5)



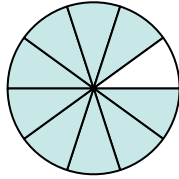
6)



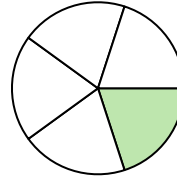
7)



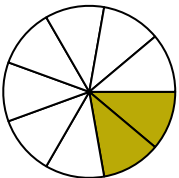
8)



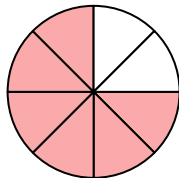
9)



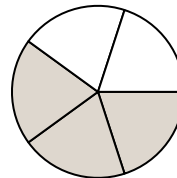
10)



11)



12)



1. _____

2. _____

3. _____

4. _____

5. _____

6. _____

7. _____

8. _____

9. _____

10. _____

11. _____

12. _____