



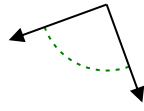
Stelle fest, ob der gezeigte Winkel spitzwinklig, stumpfwinklig oder geradwinklig ist.

Antworten

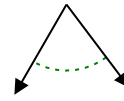
Bsp)



1)



2)

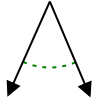


Bsp. stumpfwinklig

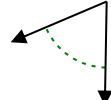
1. _____

2. _____

3)



4)



5)

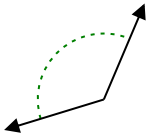


3. _____

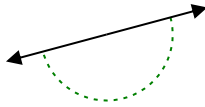
4. _____

5. _____

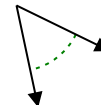
6)



7)



8)

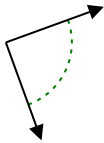


6. _____

7. _____

8. _____

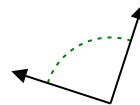
9)



10)



11)

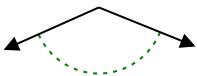


9. _____

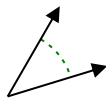
10. _____

11. _____

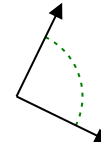
12)



13)



14)

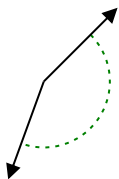


12. _____

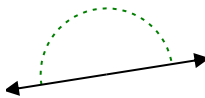
13. _____

14. _____

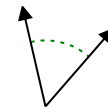
15)



16)



17)

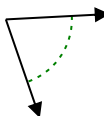


15. _____

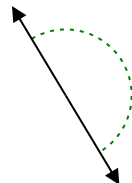
16. _____

17. _____

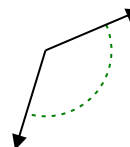
18)



19)



20)



18. _____

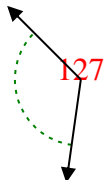
19. _____

20. _____

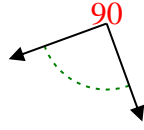


Stelle fest, ob der gezeigte Winkel spitzwinklig, stumpfwinklig, rechtwinklig oder geradwinklig ist.

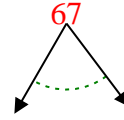
Bsp)



1)



2)

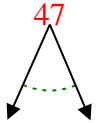


Bsp. stumpfwinklig

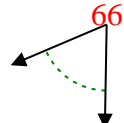
1. rechtwinklig

2. spitzwinklig

3)



4)



5)

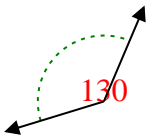


3. spitzwinklig

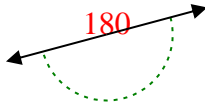
4. spitzwinklig

5. stumpfwinklig

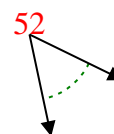
6)



7)



8)

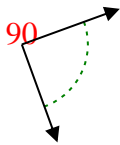


6. stumpfwinklig

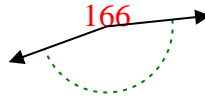
7. gestreckt

8. spitzwinklig

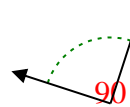
9)



10)



11)

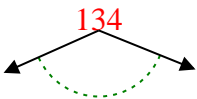


9. rechtwinklig

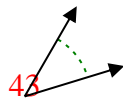
10. stumpfwinklig

11. rechtwinklig

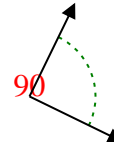
12)



13)



14)

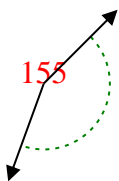


12. stumpfwinklig

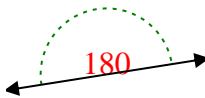
13. spitzwinklig

14. rechtwinklig

15)



16)



17)

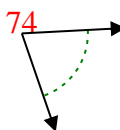


15. stumpfwinklig

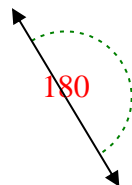
16. gestreckt

17. spitzwinklig

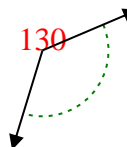
18)



19)



20)



18. spitzwinklig

19. gestreckt

20. stumpfwinklig