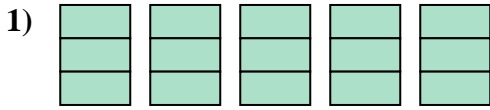


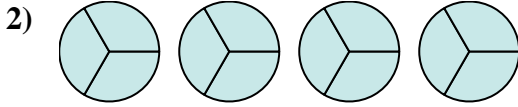


Schreiben Sie den schattierten Betrag als Bruch.

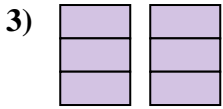
**Antworten**



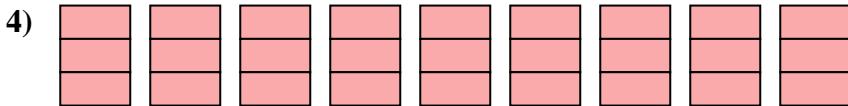
1. \_\_\_\_\_



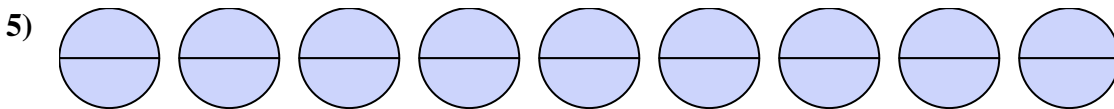
2. \_\_\_\_\_



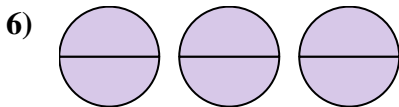
3. \_\_\_\_\_



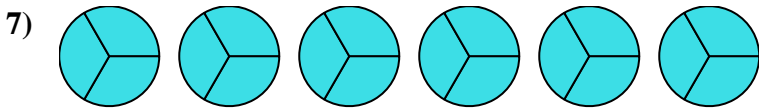
4. \_\_\_\_\_



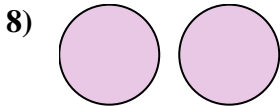
5. \_\_\_\_\_



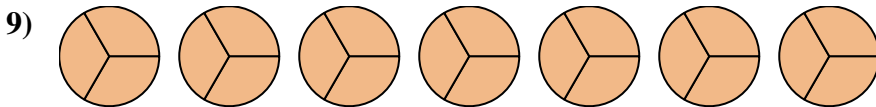
6. \_\_\_\_\_



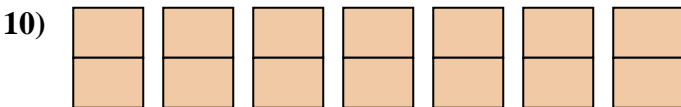
7. \_\_\_\_\_



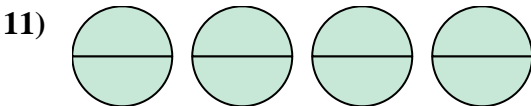
8. \_\_\_\_\_



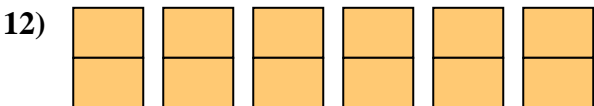
9. \_\_\_\_\_



10. \_\_\_\_\_



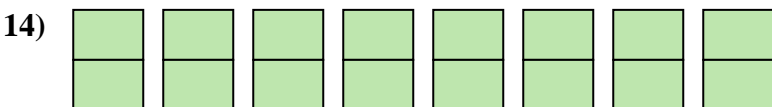
11. \_\_\_\_\_



12. \_\_\_\_\_



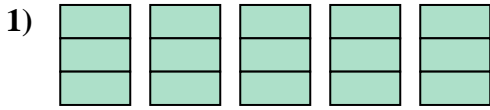
13. \_\_\_\_\_



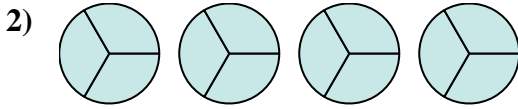
14. \_\_\_\_\_



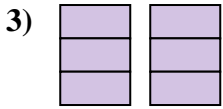
Schreiben Sie den schattierten Betrag als Bruch.

**Antworten**

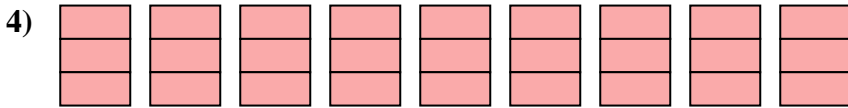
1.  $\frac{15}{3}$



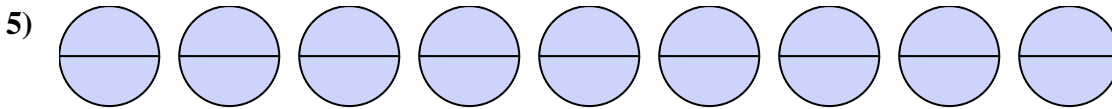
2.  $\frac{12}{3}$



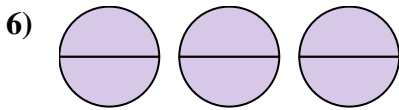
3.  $\frac{6}{3}$



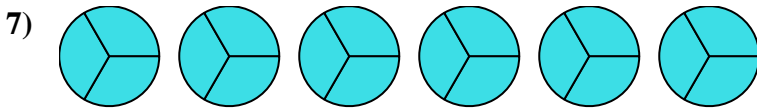
4.  $\frac{27}{3}$



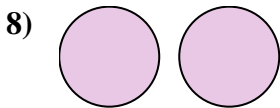
5.  $\frac{18}{2}$



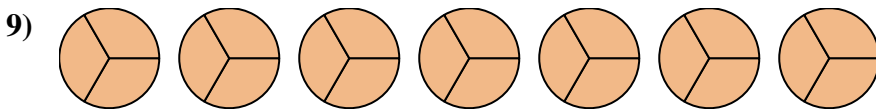
6.  $\frac{6}{2}$



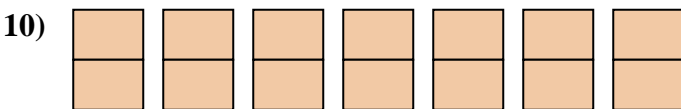
7.  $\frac{18}{3}$



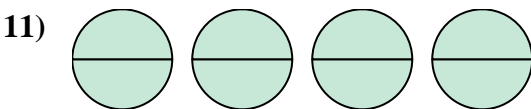
8.  $\frac{2}{1}$



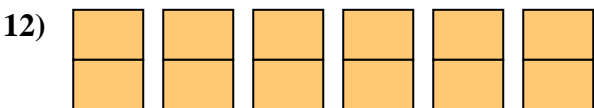
9.  $\frac{21}{3}$



10.  $\frac{14}{2}$



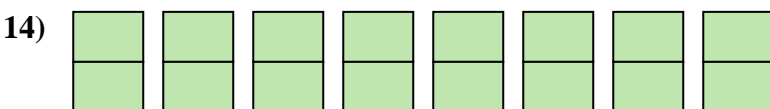
11.  $\frac{8}{2}$



12.  $\frac{12}{2}$



13.  $\frac{4}{2}$



14.  $\frac{16}{2}$