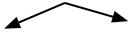




Bestimme, ob der gezeigte Winkel 'mehr', 'weniger' oder 'gleich' 90° ist.

Antworten

Bsp)



1)



2)

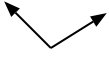


Bsp. mehr

1. _____

2. _____

3)



4)



5)

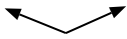


3. _____

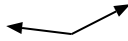
4. _____

5. _____

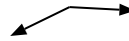
6)



7)



8)



6. _____

7. _____

8. _____

9)



10)



11)



9. _____

10. _____

11. _____

12)



13)



14)



12. _____

13. _____

14. _____

15)



16)



17)



15. _____

16. _____

17. _____

18)



19)



20)



18. _____

19. _____

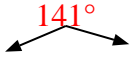
20. _____



Bestimme, ob der gezeigte Winkel 'mehr', 'weniger' oder 'gleich' 90° ist.

Antworten

Bsp)



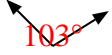
1)



2)

Bsp. mehr1. weniger2. gleich3. mehr4. gleich5. gleich6. mehr7. mehr8. mehr9. weniger10. weniger11. weniger12. gleich13. weniger14. gleich15. gleich16. mehr17. gleich18. weniger19. mehr20. weniger

3)



4)




5)



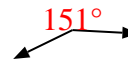
6)



7)



8)



9)



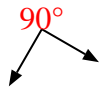
10)



11)



12)



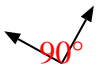
13)



14)



15)



16)



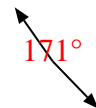
17)



18)



19)



20)

