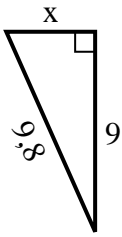


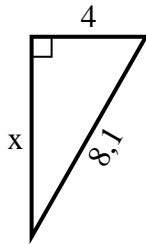


Finden Sie den Wert von X.

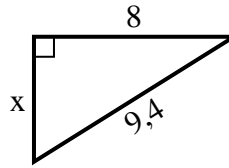
1) Umfang = 22,8 u



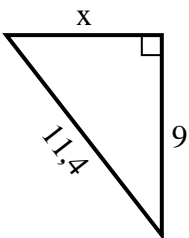
2) Umfang = 19,1 u



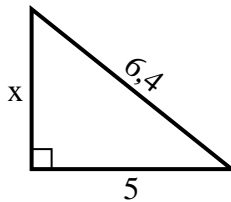
3) Umfang = 22,4 u



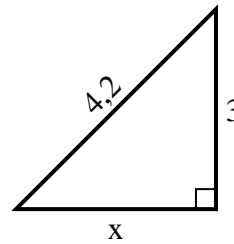
4) Umfang = 27,4 u



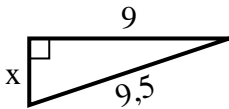
5) Umfang = 15,4 u



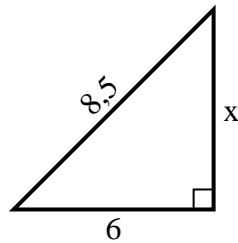
6) Umfang = 10,2 u



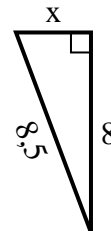
7) Umfang = 21,5 u



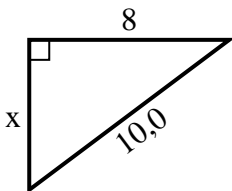
8) Umfang = 20,5 u



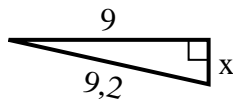
9) Umfang = 19,5 u



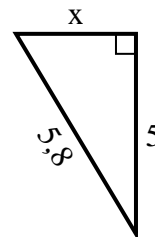
10) Umfang = 24 u



11) Umfang = 20,2 u



12) Umfang = 13,8 u

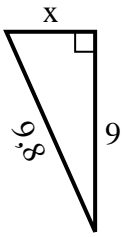


Antworten

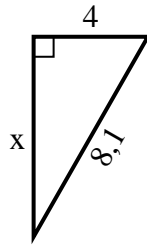
1. _____
2. _____
3. _____
4. _____
5. _____
6. _____
7. _____
8. _____
9. _____
10. _____
11. _____
12. _____

**Finden Sie den Wert von X.****Antworten**

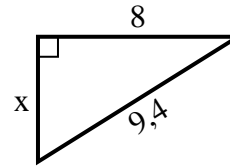
1) Umfang = 22,8 u



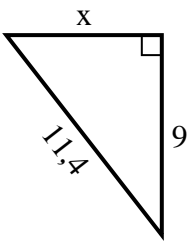
2) Umfang = 19,1 u



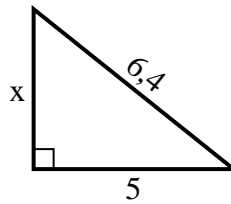
3) Umfang = 22,4 u



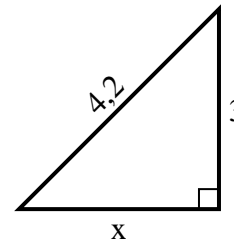
4) Umfang = 27,4 u



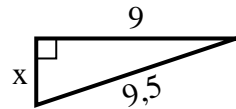
5) Umfang = 15,4 u



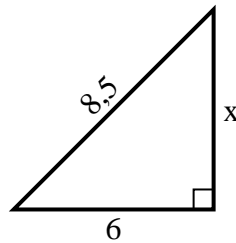
6) Umfang = 10,2 u



7) Umfang = 21,5 u



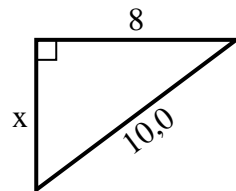
8) Umfang = 20,5 u



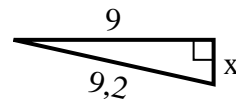
9) Umfang = 19,5 u



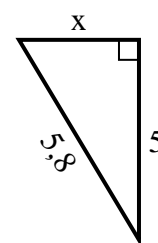
10) Umfang = 24 u



11) Umfang = 20,2 u



12) Umfang = 13,8 u



1. 4
2. 7
3. 5
4. 7
5. 4
6. 3
7. 3
8. 6
9. 3
10. 6
11. 2
12. 3