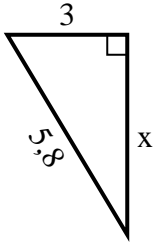


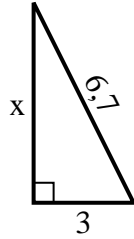


Finden Sie den Wert von X.

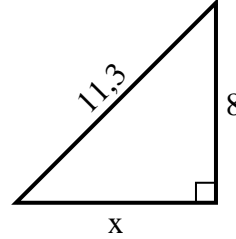
1) Umfang = 13,8 u



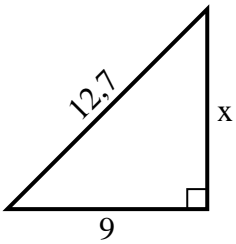
2) Umfang = 15,7 u



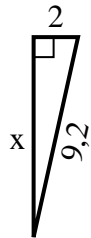
3) Umfang = 27,3 u



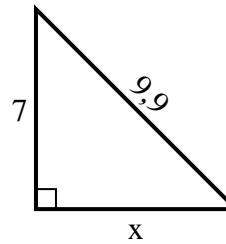
4) Umfang = 30,7 u



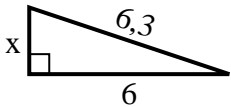
5) Umfang = 20,2 u



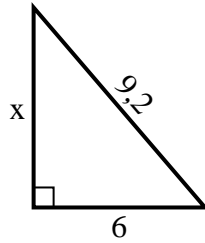
6) Umfang = 23,9 u



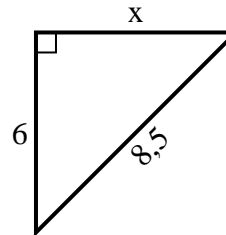
7) Umfang = 14,3 u



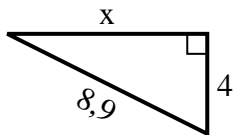
8) Umfang = 22,2 u



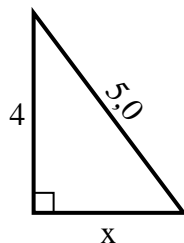
9) Umfang = 20,5 u



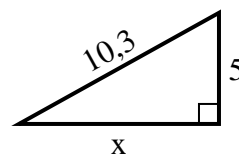
10) Umfang = 20,9 u



11) Umfang = 12 u



12) Umfang = 24,3 u

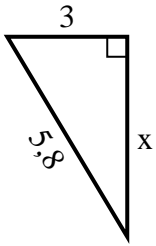


Antworten

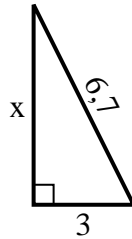
1. _____
2. _____
3. _____
4. _____
5. _____
6. _____
7. _____
8. _____
9. _____
10. _____
11. _____
12. _____

**Finden Sie den Wert von X.**

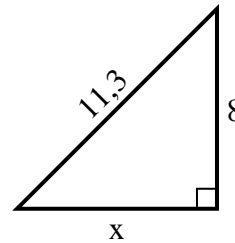
1) Umfang = 13,8 u



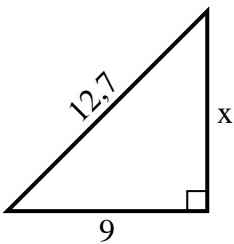
2) Umfang = 15,7 u



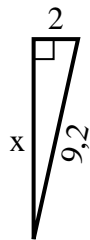
3) Umfang = 27,3 u



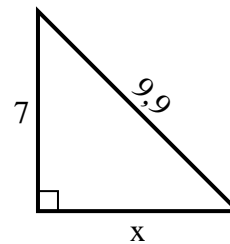
4) Umfang = 30,7 u



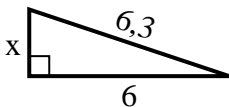
5) Umfang = 20,2 u



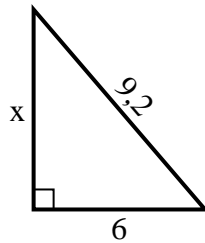
6) Umfang = 23,9 u



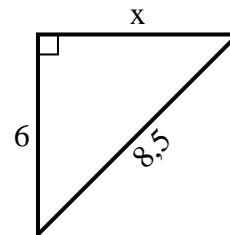
7) Umfang = 14,3 u



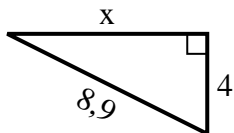
8) Umfang = 22,2 u



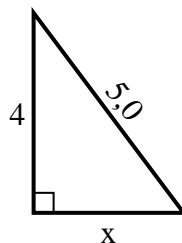
9) Umfang = 20,5 u



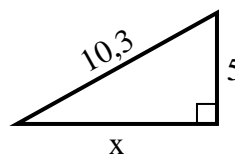
10) Umfang = 20,9 u



11) Umfang = 12 u



12) Umfang = 24,3 u

**Antworten**1. 52. 63. 84. 95. 96. 77. 28. 79. 610. 811. 312. 9