



Löse jede Aufgabe.

Antworten

1) $1 + 1 = \underline{\quad}$

2) $2 + 1 = \underline{\quad}$

3) $1 + 4 = \underline{\quad}$

4) $3 + 0 = \underline{\quad}$

5) $3 + 2 = \underline{\quad}$

6) $4 + 0 = \underline{\quad}$

7) $1 + 2 = \underline{\quad}$

8) $5 + 0 = \underline{\quad}$

9) $5 - 2 = \underline{\quad}$

10) $4 - 4 = \underline{\quad}$

11) $5 - 5 = \underline{\quad}$

12) $2 - 2 = \underline{\quad}$

13) $3 - 3 = \underline{\quad}$

14) $4 - 2 = \underline{\quad}$

15) $5 - 3 = \underline{\quad}$

16) $2 - 1 = \underline{\quad}$

1. _____

2. _____

3. _____

4. _____

5. _____

6. _____

7. _____

8. _____

9. _____

10. _____

11. _____

12. _____

13. _____

14. _____

15. _____

16. _____



Löse jede Aufgabe.

1) $1 + 1 = \underline{2}$

2) $2 + 1 = \underline{3}$

3) $1 + 4 = \underline{5}$

4) $3 + 0 = \underline{3}$

5) $3 + 2 = \underline{5}$

6) $4 + 0 = \underline{4}$

7) $1 + 2 = \underline{3}$

8) $5 + 0 = \underline{5}$

9) $5 - 2 = \underline{3}$

10) $4 - 4 = \underline{0}$

11) $5 - 5 = \underline{0}$

12) $2 - 2 = \underline{0}$

13) $3 - 3 = \underline{0}$

14) $4 - 2 = \underline{2}$

15) $5 - 3 = \underline{2}$

16) $2 - 1 = \underline{1}$

Antworten1. 22. 33. 54. 35. 56. 47. 38. 59. 310. 011. 012. 013. 014. 215. 216. 1



Löse jede Aufgabe.

Antworten

1) 1 + 1 = _____
 +

2) 2 + 1 = _____
 +

3) 1 + 4 = _____
 +

4) 3 + 0 = _____

5) 3 + 2 = _____
 +

6) 4 + 0 = _____

7) 1 + 2 = _____
 +

8) 5 + 0 = _____

9) 5 - 2 = _____
 -

10) 4 - 4 = _____
 -

11) 5 - 5 = _____
 -

12) 2 - 2 = _____
 -

13) 3 - 3 = _____
 -

14) 4 - 2 = _____
 -

15) 5 - 3 = _____
 -

16) 2 - 1 = _____
 -

1. _____
2. _____
3. _____
4. _____
5. _____
6. _____
7. _____
8. _____
9. _____
10. _____
11. _____
12. _____
13. _____
14. _____
15. _____
16. _____



Löse jede Aufgabe.

Antworten

1) $5 + 0 = \underline{\quad}$

2) $4 + 0 = \underline{\quad}$

3) $2 + 0 = \underline{\quad}$

4) $1 + 1 = \underline{\quad}$

5) $4 + 1 = \underline{\quad}$

6) $1 + 4 = \underline{\quad}$

7) $1 + 2 = \underline{\quad}$

8) $2 + 3 = \underline{\quad}$

9) $4 - 4 = \underline{\quad}$

10) $5 - 5 = \underline{\quad}$

11) $2 - 2 = \underline{\quad}$

12) $5 - 3 = \underline{\quad}$

13) $5 - 4 = \underline{\quad}$

14) $3 - 3 = \underline{\quad}$

15) $4 - 1 = \underline{\quad}$

16) $3 - 2 = \underline{\quad}$

- 1. _____
- 2. _____
- 3. _____
- 4. _____
- 5. _____
- 6. _____
- 7. _____
- 8. _____
- 9. _____
- 10. _____
- 11. _____
- 12. _____
- 13. _____
- 14. _____
- 15. _____
- 16. _____



Löse jede Aufgabe.

1) $5 + 0 = \underline{5}$

2) $4 + 0 = \underline{4}$

3) $2 + 0 = \underline{2}$

4) $1 + 1 = \underline{2}$

5) $4 + 1 = \underline{5}$

6) $1 + 4 = \underline{5}$

7) $1 + 2 = \underline{3}$

8) $2 + 3 = \underline{5}$

9) $4 - 4 = \underline{0}$

10) $5 - 5 = \underline{0}$

11) $2 - 2 = \underline{0}$

12) $5 - 3 = \underline{2}$

13) $5 - 4 = \underline{1}$

14) $3 - 3 = \underline{0}$

15) $4 - 1 = \underline{3}$

16) $3 - 2 = \underline{1}$

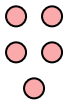
Antworten1. 52. 43. 24. 25. 56. 57. 38. 59. 010. 011. 012. 213. 114. 015. 316. 1




Löse jede Aufgabe.

Antworten


1) $5 + 0 = \underline{\quad}$





2) $4 + 0 = \underline{\quad}$





3) $2 + 0 = \underline{\quad}$





4) $1 + 1 = \underline{\quad}$



5) $4 + 1 = \underline{\quad}$



6) $1 + 4 = \underline{\quad}$

7) $1 + 2 = \underline{\quad}$



8) $2 + 3 = \underline{\quad}$



9) $4 - 4 = \underline{\quad}$






10) $5 - 5 = \underline{\quad}$



11) $2 - 2 = \underline{\quad}$



12) $5 - 3 = \underline{\quad}$



13) $5 - 4 = \underline{\quad}$



14) $3 - 3 = \underline{\quad}$

15) $4 - 1 = \underline{\quad}$

16) $3 - 2 = \underline{\quad}$

1. _____

2. _____

3. _____

4. _____

5. _____

6. _____

7. _____

8. _____

9. _____

10. _____

11. _____

12. _____

13. _____

14. _____

15. _____

16. _____



Löse jede Aufgabe.

Antworten

1) $3 + 2 = \underline{\quad}$

2) $5 + 0 = \underline{\quad}$

3) $2 + 1 = \underline{\quad}$

4) $2 + 3 = \underline{\quad}$

5) $1 + 2 = \underline{\quad}$

6) $3 + 0 = \underline{\quad}$

7) $4 + 0 = \underline{\quad}$

8) $2 + 0 = \underline{\quad}$

9) $1 - 1 = \underline{\quad}$

10) $5 - 4 = \underline{\quad}$

11) $5 - 5 = \underline{\quad}$

12) $3 - 1 = \underline{\quad}$

13) $2 - 2 = \underline{\quad}$

14) $4 - 4 = \underline{\quad}$

15) $5 - 2 = \underline{\quad}$

16) $5 - 1 = \underline{\quad}$

- 1. _____
- 2. _____
- 3. _____
- 4. _____
- 5. _____
- 6. _____
- 7. _____
- 8. _____
- 9. _____
- 10. _____
- 11. _____
- 12. _____
- 13. _____
- 14. _____
- 15. _____
- 16. _____



Löse jede Aufgabe.

1) $3 + 2 = \underline{5}$

2) $5 + 0 = \underline{5}$

3) $2 + 1 = \underline{3}$

4) $2 + 3 = \underline{5}$

5) $1 + 2 = \underline{3}$

6) $3 + 0 = \underline{3}$

7) $4 + 0 = \underline{4}$

8) $2 + 0 = \underline{2}$

9) $1 - 1 = \underline{0}$

10) $5 - 4 = \underline{1}$

11) $5 - 5 = \underline{0}$

12) $3 - 1 = \underline{2}$

13) $2 - 2 = \underline{0}$

14) $4 - 4 = \underline{0}$

15) $5 - 2 = \underline{3}$

16) $5 - 1 = \underline{4}$

Antworten1. 52. 53. 34. 55. 36. 37. 48. 29. 010. 111. 012. 213. 014. 015. 316. 4



Löse jede Aufgabe.

Antworten

1) $3 + 2 = \underline{\quad}$

2) $5 + 0 = \underline{\quad}$

1. _____

2. _____

3) $2 + 1 = \underline{\quad}$

4) $2 + 3 = \underline{\quad}$

3. _____

4. _____

5) $1 + 2 = \underline{\quad}$

6) $3 + 0 = \underline{\quad}$

5. _____

6. _____

7) $4 + 0 = \underline{\quad}$

8) $2 + 0 = \underline{\quad}$

7. _____

8. _____

9) $1 - 1 = \underline{\quad}$

10) $5 - 4 = \underline{\quad}$

9. _____

10. _____

11) $5 - 5 = \underline{\quad}$

12) $3 - 1 = \underline{\quad}$

11. _____

12. _____

13. _____

14. _____

13) $2 - 2 = \underline{\quad}$

14) $4 - 4 = \underline{\quad}$

15. _____

16. _____

15) $5 - 2 = \underline{\quad}$

16) $5 - 1 = \underline{\quad}$



Löse jede Aufgabe.

Antworten

1) $2 + 1 = \underline{\quad}$

2) $4 + 1 = \underline{\quad}$

3) $2 + 0 = \underline{\quad}$

4) $2 + 2 = \underline{\quad}$

5) $1 + 1 = \underline{\quad}$

6) $3 + 0 = \underline{\quad}$

7) $3 + 2 = \underline{\quad}$

8) $1 + 3 = \underline{\quad}$

9) $3 - 2 = \underline{\quad}$

10) $5 - 5 = \underline{\quad}$

11) $5 - 4 = \underline{\quad}$

12) $5 - 3 = \underline{\quad}$

13) $4 - 4 = \underline{\quad}$

14) $2 - 1 = \underline{\quad}$

15) $3 - 1 = \underline{\quad}$

16) $2 - 2 = \underline{\quad}$

- 1. _____
- 2. _____
- 3. _____
- 4. _____
- 5. _____
- 6. _____
- 7. _____
- 8. _____
- 9. _____
- 10. _____
- 11. _____
- 12. _____
- 13. _____
- 14. _____
- 15. _____
- 16. _____



Löse jede Aufgabe.

1) $2 + 1 = \underline{3}$

2) $4 + 1 = \underline{5}$

3) $2 + 0 = \underline{2}$

4) $2 + 2 = \underline{4}$

5) $1 + 1 = \underline{2}$

6) $3 + 0 = \underline{3}$

7) $3 + 2 = \underline{5}$

8) $1 + 3 = \underline{4}$

9) $3 - 2 = \underline{1}$

10) $5 - 5 = \underline{0}$

11) $5 - 4 = \underline{1}$

12) $5 - 3 = \underline{2}$

13) $4 - 4 = \underline{0}$

14) $2 - 1 = \underline{1}$

15) $3 - 1 = \underline{2}$



16) $2 - 2 = \underline{0}$



Antworten1. 32. 53. 24. 45. 26. 37. 58. 49. 110. 011. 112. 213. 014. 115. 216. 0






Löse jede Aufgabe.



Antworten


1) $2 + 1 = \underline{\quad}$
 + 



2) $4 + 1 = \underline{\quad}$
 + 



3) $2 + 0 = \underline{\quad}$




4) $2 + 2 = \underline{\quad}$
 + 



5) $1 + 1 = \underline{\quad}$
 + 



6) $3 + 0 = \underline{\quad}$




7) $3 + 2 = \underline{\quad}$
 + 



8) $1 + 3 = \underline{\quad}$
 + 



9) $3 - 2 = \underline{\quad}$
 - 



10) $5 - 5 = \underline{\quad}$
 - 



11) $5 - 4 = \underline{\quad}$
 - 

12) $5 - 3 = \underline{\quad}$
 - 

13) $4 - 4 = \underline{\quad}$
 - 

14) $2 - 1 = \underline{\quad}$
 - 

15) $3 - 1 = \underline{\quad}$
 - 

16) $2 - 2 = \underline{\quad}$
 - 

1. _____
2. _____
3. _____
4. _____
5. _____
6. _____
7. _____
8. _____
9. _____
10. _____
11. _____
12. _____
13. _____
14. _____
15. _____
16. _____



Löse jede Aufgabe.

1) $3 + 2 = \underline{\quad}$

2) $5 + 0 = \underline{\quad}$

3) $3 + 1 = \underline{\quad}$

4) $3 + 0 = \underline{\quad}$

5) $2 + 0 = \underline{\quad}$

6) $4 + 0 = \underline{\quad}$

7) $1 + 3 = \underline{\quad}$

8) $1 + 4 = \underline{\quad}$

9) $3 - 3 = \underline{\quad}$

10) $4 - 3 = \underline{\quad}$

11) $5 - 2 = \underline{\quad}$

12) $4 - 1 = \underline{\quad}$

13) $5 - 4 = \underline{\quad}$

14) $5 - 3 = \underline{\quad}$

15) $4 - 2 = \underline{\quad}$

16) $3 - 2 = \underline{\quad}$

Antworten

1. _____

2. _____

3. _____

4. _____

5. _____

6. _____

7. _____

8. _____

9. _____

10. _____

11. _____

12. _____

13. _____

14. _____

15. _____

16. _____



Löse jede Aufgabe.

1) $3 + 2 = \underline{5}$

2) $5 + 0 = \underline{5}$

3) $3 + 1 = \underline{4}$

4) $3 + 0 = \underline{3}$

5) $2 + 0 = \underline{2}$

6) $4 + 0 = \underline{4}$

7) $1 + 3 = \underline{4}$

8) $1 + 4 = \underline{5}$

9) $3 - 3 = \underline{0}$

10) $4 - 3 = \underline{1}$

11) $5 - 2 = \underline{3}$

12) $4 - 1 = \underline{3}$

13) $5 - 4 = \underline{1}$

14) $5 - 3 = \underline{2}$

15) $4 - 2 = \underline{2}$

16) $3 - 2 = \underline{1}$


Antworten1. 52. 53. 44. 35. 26. 47. 48. 59. 010. 111. 312. 313. 114. 215. 216. 1



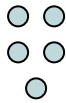
Löse jede Aufgabe.

Antworten


1) $3 + 2 = \underline{\quad}$




2) $5 + 0 = \underline{\quad}$




3) $3 + 1 = \underline{\quad}$




4) $3 + 0 = \underline{\quad}$




5) $2 + 0 = \underline{\quad}$



6) $4 + 0 = \underline{\quad}$




7) $1 + 3 = \underline{\quad}$



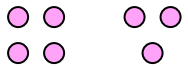
8) $1 + 4 = \underline{\quad}$



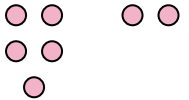
9) $3 - 3 = \underline{\quad}$




10) $4 - 3 = \underline{\quad}$



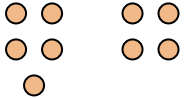
11) $5 - 2 = \underline{\quad}$



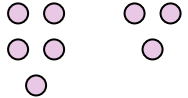
12) $4 - 1 = \underline{\quad}$




13) $5 - 4 = \underline{\quad}$




14) $5 - 3 = \underline{\quad}$



15) $4 - 2 = \underline{\quad}$



16) $3 - 2 = \underline{\quad}$



1. _____
2. _____
3. _____
4. _____
5. _____
6. _____
7. _____
8. _____
9. _____
10. _____
11. _____
12. _____
13. _____
14. _____
15. _____
16. _____



Löse jede Aufgabe.

Antworten

1) $2 + 2 = \underline{\quad}$

2) $5 + 0 = \underline{\quad}$

3) $3 + 0 = \underline{\quad}$

4) $1 + 1 = \underline{\quad}$

5) $4 + 1 = \underline{\quad}$

6) $2 + 3 = \underline{\quad}$

7) $1 + 4 = \underline{\quad}$

8) $1 + 3 = \underline{\quad}$

9) $5 - 5 = \underline{\quad}$

10) $5 - 1 = \underline{\quad}$

11) $5 - 4 = \underline{\quad}$

12) $5 - 3 = \underline{\quad}$

13) $5 - 2 = \underline{\quad}$

14) $4 - 4 = \underline{\quad}$

15) $3 - 3 = \underline{\quad}$

16) $3 - 1 = \underline{\quad}$

1. _____

2. _____

3. _____

4. _____

5. _____

6. _____

7. _____

8. _____

9. _____

10. _____

11. _____

12. _____

13. _____

14. _____

15. _____

16. _____



Löse jede Aufgabe.

1) $2 + 2 = \underline{4}$

2) $5 + 0 = \underline{5}$

3) $3 + 0 = \underline{3}$

4) $1 + 1 = \underline{2}$

5) $4 + 1 = \underline{5}$

6) $2 + 3 = \underline{5}$

7) $1 + 4 = \underline{5}$

8) $1 + 3 = \underline{4}$

9) $5 - 5 = \underline{0}$

10) $5 - 1 = \underline{4}$

11) $5 - 4 = \underline{1}$

12) $5 - 3 = \underline{2}$

13) $5 - 2 = \underline{3}$

14) $4 - 4 = \underline{0}$

15) $3 - 3 = \underline{0}$


16) $3 - 1 = \underline{2}$

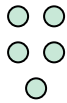
Antworten1. 42. 53. 34. 25. 56. 57. 58. 49. 010. 411. 112. 213. 314. 015. 016. 2





Löse jede Aufgabe.


Antworten


1) $2 + 2 = \underline{\quad}$



2) $5 + 0 = \underline{\quad}$



3) $3 + 0 = \underline{\quad}$


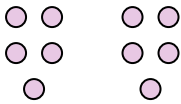
4) $1 + 1 = \underline{\quad}$


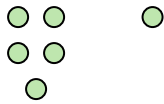
5) $4 + 1 = \underline{\quad}$


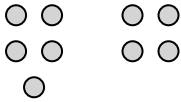
6) $2 + 3 = \underline{\quad}$


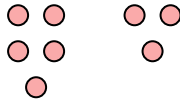
7) $1 + 4 = \underline{\quad}$


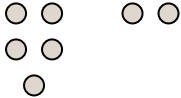
8) $1 + 3 = \underline{\quad}$


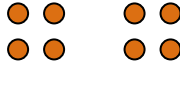
9) $5 - 5 = \underline{\quad}$



10) $5 - 1 = \underline{\quad}$



11) $5 - 4 = \underline{\quad}$


12) $5 - 3 = \underline{\quad}$


13) $5 - 2 = \underline{\quad}$


14) $4 - 4 = \underline{\quad}$


15) $3 - 3 = \underline{\quad}$


16) $3 - 1 = \underline{\quad}$


1. _____
2. _____
3. _____
4. _____
5. _____
6. _____
7. _____
8. _____
9. _____
10. _____
11. _____
12. _____
13. _____
14. _____
15. _____
16. _____



Löse jede Aufgabe.

Antworten

1) $4 + 0 = \underline{\quad}$

2) $5 + 0 = \underline{\quad}$

3) $4 + 1 = \underline{\quad}$

4) $2 + 2 = \underline{\quad}$

5) $1 + 2 = \underline{\quad}$

6) $3 + 1 = \underline{\quad}$

7) $1 + 0 = \underline{\quad}$

8) $1 + 1 = \underline{\quad}$

9) $3 - 2 = \underline{\quad}$

10) $4 - 1 = \underline{\quad}$

11) $5 - 5 = \underline{\quad}$

12) $2 - 1 = \underline{\quad}$

13) $5 - 4 = \underline{\quad}$

14) $5 - 1 = \underline{\quad}$

15) $4 - 3 = \underline{\quad}$

16) $4 - 4 = \underline{\quad}$

1. _____

2. _____

3. _____

4. _____

5. _____

6. _____

7. _____

8. _____

9. _____

10. _____

11. _____

12. _____

13. _____

14. _____

15. _____

16. _____



Löse jede Aufgabe.

1) $4 + 0 = \underline{4}$

2) $5 + 0 = \underline{5}$

3) $4 + 1 = \underline{5}$

4) $2 + 2 = \underline{4}$

5) $1 + 2 = \underline{3}$

6) $3 + 1 = \underline{4}$

7) $1 + 0 = \underline{1}$

8) $1 + 1 = \underline{2}$

9) $3 - 2 = \underline{1}$

10) $4 - 1 = \underline{3}$

11) $5 - 5 = \underline{0}$

12) $2 - 1 = \underline{1}$

13) $5 - 4 = \underline{1}$

14) $5 - 1 = \underline{4}$

15) $4 - 3 = \underline{1}$

16) $4 - 4 = \underline{0}$


Antworten1. 42. 53. 54. 45. 36. 47. 18. 29. 110. 311. 012. 113. 114. 415. 116. 0



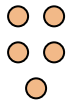
Löse jede Aufgabe.

Antworten

1) $4 + 0 = \underline{\quad}$




2) $5 + 0 = \underline{\quad}$




1. _____

2. _____

3) $4 + 1 = \underline{\quad}$




4) $2 + 2 = \underline{\quad}$




3. _____

4. _____

5) $1 + 2 = \underline{\quad}$




6) $3 + 1 = \underline{\quad}$




5. _____

6. _____

7) $1 + 0 = \underline{\quad}$




8) $1 + 1 = \underline{\quad}$



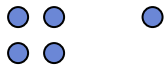
7. _____

8. _____

9) $3 - 2 = \underline{\quad}$



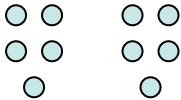
10) $4 - 1 = \underline{\quad}$




9. _____

10. _____

11) $5 - 5 = \underline{\quad}$



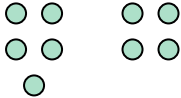
12) $2 - 1 = \underline{\quad}$



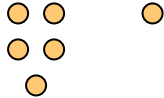
11. _____

12. _____

13) $5 - 4 = \underline{\quad}$




14) $5 - 1 = \underline{\quad}$




13. _____

14. _____

15) $4 - 3 = \underline{\quad}$



16) $4 - 4 = \underline{\quad}$



15. _____

16. _____



Löse jede Aufgabe.

Antworten

1) $2 + 2 = \underline{\quad}$

2) $3 + 2 = \underline{\quad}$

3) $5 + 0 = \underline{\quad}$

4) $4 + 1 = \underline{\quad}$

5) $1 + 3 = \underline{\quad}$

6) $2 + 3 = \underline{\quad}$

7) $2 + 1 = \underline{\quad}$

8) $3 + 1 = \underline{\quad}$

9) $4 - 3 = \underline{\quad}$

10) $5 - 5 = \underline{\quad}$

11) $4 - 4 = \underline{\quad}$

12) $3 - 3 = \underline{\quad}$

13) $5 - 4 = \underline{\quad}$

14) $5 - 2 = \underline{\quad}$

15) $4 - 2 = \underline{\quad}$

16) $3 - 2 = \underline{\quad}$

1. _____

2. _____

3. _____

4. _____

5. _____

6. _____

7. _____

8. _____

9. _____

10. _____

11. _____

12. _____

13. _____

14. _____

15. _____

16. _____



Löse jede Aufgabe.

1) $2 + 2 = \underline{4}$

2) $3 + 2 = \underline{5}$

3) $5 + 0 = \underline{5}$

4) $4 + 1 = \underline{5}$

5) $1 + 3 = \underline{4}$

6) $2 + 3 = \underline{5}$

7) $2 + 1 = \underline{3}$

8) $3 + 1 = \underline{4}$

9) $4 - 3 = \underline{1}$

10) $5 - 5 = \underline{0}$

11) $4 - 4 = \underline{0}$

12) $3 - 3 = \underline{0}$

13) $5 - 4 = \underline{1}$

14) $5 - 2 = \underline{3}$

15) $4 - 2 = \underline{2}$

16) $3 - 2 = \underline{1}$

Antworten1. 42. 53. 54. 55. 46. 57. 38. 49. 110. 011. 012. 013. 114. 315. 216. 1



Löse jede Aufgabe.

Antworten

1) 2 + 2 = _____
 +

2) 3 + 2 = _____
 +

3) 5 + 0 = _____

4) 4 + 1 = _____
 +

5) 1 + 3 = _____
 +

6) 2 + 3 = _____
 +

7) 2 + 1 = _____
 +

8) 3 + 1 = _____
 +

9) 4 - 3 = _____
 -

10) 5 - 5 = _____
 -

11) 4 - 4 = _____
 -

12) 3 - 3 = _____
 -

13) 5 - 4 = _____
 -

14) 5 - 2 = _____
 -

15) 4 - 2 = _____
 -

16) 3 - 2 = _____
 -

- 1. _____
- 2. _____
- 3. _____
- 4. _____
- 5. _____
- 6. _____
- 7. _____
- 8. _____
- 9. _____
- 10. _____
- 11. _____
- 12. _____
- 13. _____
- 14. _____
- 15. _____
- 16. _____



Löse jede Aufgabe.

Antworten

1) $4 + 1 = \underline{\quad}$

2) $1 + 3 = \underline{\quad}$

1. _____

3) $3 + 2 = \underline{\quad}$

4) $4 + 0 = \underline{\quad}$

2. _____

5) $1 + 2 = \underline{\quad}$

6) $5 + 0 = \underline{\quad}$

3. _____

4. _____

5. _____

7) $2 + 2 = \underline{\quad}$

8) $2 + 0 = \underline{\quad}$

6. _____

7. _____

8. _____

9) $5 - 4 = \underline{\quad}$

10) $5 - 5 = \underline{\quad}$

9. _____

10. _____

11. _____

11) $4 - 2 = \underline{\quad}$

12) $4 - 3 = \underline{\quad}$

12. _____

13. _____

14. _____

13) $3 - 2 = \underline{\quad}$

14) $1 - 1 = \underline{\quad}$

15. _____

16. _____

15) $3 - 1 = \underline{\quad}$

16) $5 - 2 = \underline{\quad}$



Löse jede Aufgabe.

Antworten

1) $4 + 1 = \underline{5}$

2) $1 + 3 = \underline{4}$

1. 5

3) $3 + 2 = \underline{5}$

4) $4 + 0 = \underline{4}$

2. 4

5) $1 + 2 = \underline{3}$

6) $5 + 0 = \underline{5}$

3. 54. 45. 36. 5

7) $2 + 2 = \underline{4}$

8) $2 + 0 = \underline{2}$

7. 48. 29. 1

9) $5 - 4 = \underline{1}$

10) $5 - 5 = \underline{0}$

10. 011. 212. 1

11) $4 - 2 = \underline{2}$

12) $4 - 3 = \underline{1}$

13. 114. 015. 2

13) $3 - 2 = \underline{1}$

14) $1 - 1 = \underline{0}$

16. 3

15) $3 - 1 = \underline{2}$


16) $5 - 2 = \underline{3}$




Löse jede Aufgabe.

Antworten


1) $4 + 1 = \underline{\quad}$




2) $1 + 3 = \underline{\quad}$




3) $3 + 2 = \underline{\quad}$



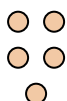
4) $4 + 0 = \underline{\quad}$




5) $1 + 2 = \underline{\quad}$




6) $5 + 0 = \underline{\quad}$



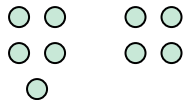
7) $2 + 2 = \underline{\quad}$



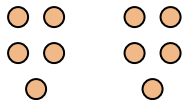
8) $2 + 0 = \underline{\quad}$



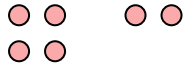
9) $5 - 4 = \underline{\quad}$




10) $5 - 5 = \underline{\quad}$




11) $4 - 2 = \underline{\quad}$




12) $4 - 3 = \underline{\quad}$




13) $3 - 2 = \underline{\quad}$



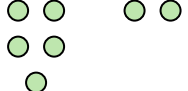
14) $1 - 1 = \underline{\quad}$



15) $3 - 1 = \underline{\quad}$



16) $5 - 2 = \underline{\quad}$



1. _____
2. _____
3. _____
4. _____
5. _____
6. _____
7. _____
8. _____
9. _____
10. _____
11. _____
12. _____
13. _____
14. _____
15. _____
16. _____



Löse jede Aufgabe.

Antworten

1) $4 + 1 = \underline{\quad}$

2) $2 + 2 = \underline{\quad}$

3) $2 + 3 = \underline{\quad}$

4) $3 + 2 = \underline{\quad}$

5) $1 + 4 = \underline{\quad}$

6) $5 + 0 = \underline{\quad}$

7) $1 + 3 = \underline{\quad}$

8) $3 + 1 = \underline{\quad}$

9) $5 - 3 = \underline{\quad}$

10) $5 - 5 = \underline{\quad}$

11) $5 - 4 = \underline{\quad}$

12) $4 - 4 = \underline{\quad}$

13) $2 - 1 = \underline{\quad}$

14) $4 - 2 = \underline{\quad}$

15) $3 - 1 = \underline{\quad}$

16) $4 - 3 = \underline{\quad}$

- 1. _____
- 2. _____
- 3. _____
- 4. _____
- 5. _____
- 6. _____
- 7. _____
- 8. _____
- 9. _____
- 10. _____
- 11. _____
- 12. _____
- 13. _____
- 14. _____
- 15. _____
- 16. _____



Löse jede Aufgabe.

1) $4 + 1 = \underline{5}$

2) $2 + 2 = \underline{4}$

3) $2 + 3 = \underline{5}$

4) $3 + 2 = \underline{5}$

5) $1 + 4 = \underline{5}$

6) $5 + 0 = \underline{5}$

7) $1 + 3 = \underline{4}$

8) $3 + 1 = \underline{4}$

9) $5 - 3 = \underline{2}$

10) $5 - 5 = \underline{0}$

11) $5 - 4 = \underline{1}$

12) $4 - 4 = \underline{0}$

13) $2 - 1 = \underline{1}$

14) $4 - 2 = \underline{2}$

15) $3 - 1 = \underline{2}$

16) $4 - 3 = \underline{1}$


Antworten1. 52. 43. 54. 55. 56. 57. 48. 49. 210. 011. 112. 013. 114. 215. 216. 1




Löse jede Aufgabe.

Antworten


1) $4 + 1 = \underline{\quad}$




2) $2 + 2 = \underline{\quad}$




3) $2 + 3 = \underline{\quad}$



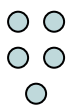
4) $3 + 2 = \underline{\quad}$




5) $1 + 4 = \underline{\quad}$




6) $5 + 0 = \underline{\quad}$



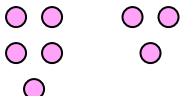
7) $1 + 3 = \underline{\quad}$



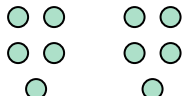
8) $3 + 1 = \underline{\quad}$



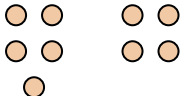
9) $5 - 3 = \underline{\quad}$




10) $5 - 5 = \underline{\quad}$




11) $5 - 4 = \underline{\quad}$




12) $4 - 4 = \underline{\quad}$




13) $2 - 1 = \underline{\quad}$



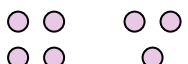
14) $4 - 2 = \underline{\quad}$



15) $3 - 1 = \underline{\quad}$



16) $4 - 3 = \underline{\quad}$



1. _____
2. _____
3. _____
4. _____
5. _____
6. _____
7. _____
8. _____
9. _____
10. _____
11. _____
12. _____
13. _____
14. _____
15. _____
16. _____