



Löse jede Aufgabe.

Antworten

1) $4 + 1 = \underline{\quad}$

2) $2 + 2 = \underline{\quad}$

3) $2 + 3 = \underline{\quad}$

4) $3 + 2 = \underline{\quad}$

5) $1 + 4 = \underline{\quad}$

6) $5 + 0 = \underline{\quad}$

7) $1 + 3 = \underline{\quad}$

8) $3 + 1 = \underline{\quad}$

9) $5 - 3 = \underline{\quad}$

10) $5 - 5 = \underline{\quad}$

11) $5 - 4 = \underline{\quad}$

12) $4 - 4 = \underline{\quad}$

13) $2 - 1 = \underline{\quad}$

14) $4 - 2 = \underline{\quad}$

15) $3 - 1 = \underline{\quad}$

16) $4 - 3 = \underline{\quad}$

- 1. _____
- 2. _____
- 3. _____
- 4. _____
- 5. _____
- 6. _____
- 7. _____
- 8. _____
- 9. _____
- 10. _____
- 11. _____
- 12. _____
- 13. _____
- 14. _____
- 15. _____
- 16. _____



Löse jede Aufgabe.

1) $4 + 1 = \underline{5}$

2) $2 + 2 = \underline{4}$

3) $2 + 3 = \underline{5}$

4) $3 + 2 = \underline{5}$

5) $1 + 4 = \underline{5}$

6) $5 + 0 = \underline{5}$

7) $1 + 3 = \underline{4}$

8) $3 + 1 = \underline{4}$

9) $5 - 3 = \underline{2}$

10) $5 - 5 = \underline{0}$

11) $5 - 4 = \underline{1}$

12) $4 - 4 = \underline{0}$

13) $2 - 1 = \underline{1}$

14) $4 - 2 = \underline{2}$

15) $3 - 1 = \underline{2}$

16) $4 - 3 = \underline{1}$


Antworten1. 52. 43. 54. 55. 56. 57. 48. 49. 210. 011. 112. 013. 114. 215. 216. 1




Löse jede Aufgabe.

Antworten


1) $4 + 1 = \underline{\quad}$




2) $2 + 2 = \underline{\quad}$




3) $2 + 3 = \underline{\quad}$




4) $3 + 2 = \underline{\quad}$




5) $1 + 4 = \underline{\quad}$




6) $5 + 0 = \underline{\quad}$




7) $1 + 3 = \underline{\quad}$



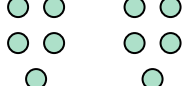
8) $3 + 1 = \underline{\quad}$



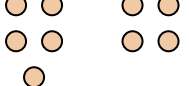
9) $5 - 3 = \underline{\quad}$




10) $5 - 5 = \underline{\quad}$




11) $5 - 4 = \underline{\quad}$




12) $4 - 4 = \underline{\quad}$




13) $2 - 1 = \underline{\quad}$




14) $4 - 2 = \underline{\quad}$



15) $3 - 1 = \underline{\quad}$



16) $4 - 3 = \underline{\quad}$



1. _____

2. _____

3. _____

4. _____

5. _____

6. _____

7. _____

8. _____

9. _____

10. _____

11. _____

12. _____

13. _____

14. _____

15. _____

16. _____