




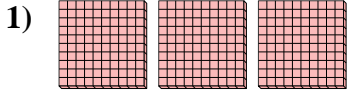
Verwenden Sie die Blöcke, um die Gesamtmengen zu bestimmen.

Antworten



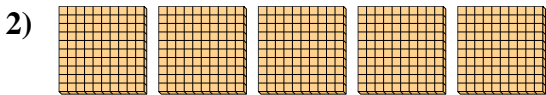
 2 hundertern = 20 zehnern = 200 einern

Bsp. 2 20 200



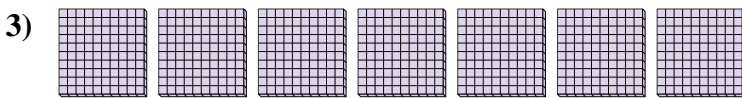
 hundertern = zehnern = einern

1. _____



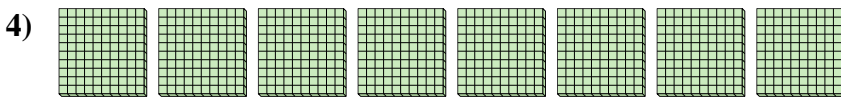
 hundertern = zehnern = einern

2. _____




 hundertern = zehnern = einern

3. _____



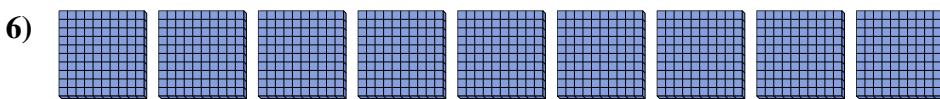
 hundertern = zehnern = einern

4. _____



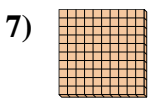
 hundertern = zehnern = einern

5. _____




 hundertern = zehnern = einern

6. _____



 hundertern = zehnern = einern

7. _____




 hundertern = zehnern = einern

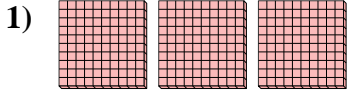
8. _____



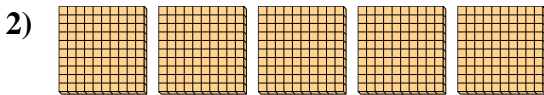
Verwenden Sie die Blöcke, um die Gesamtmengen zu bestimmen.



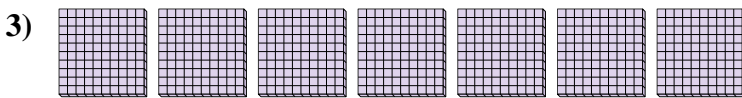
2 hundert = 20 zehner = 200 einern



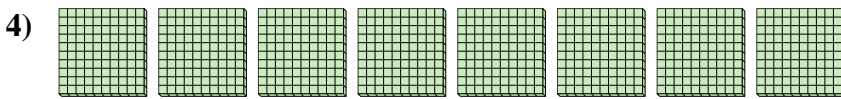
3 hundert = 30 zehner = 300 einern




5 hundert = 50 zehner = 500 einern



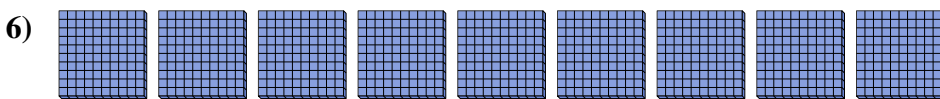
7 hundert = 70 zehner = 700 einern



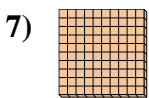
8 hundert = 80 zehner = 800 einern




6 hundert = 60 zehner = 600 einern



9 hundert = 90 zehner = 900 einern



1 hundert = 10 zehner = 100 einern



4 hundert = 40 zehner = 400 einern

Antworten

Bsp.	<u>2</u>	<u>20</u>	<u>200</u>
1.	<u>3</u>	<u>30</u>	<u>300</u>
2.	<u>5</u>	<u>50</u>	<u>500</u>
3.	<u>7</u>	<u>70</u>	<u>700</u>
4.	<u>8</u>	<u>80</u>	<u>800</u>
5.	<u>6</u>	<u>60</u>	<u>600</u>
6.	<u>9</u>	<u>90</u>	<u>900</u>
7.	<u>1</u>	<u>10</u>	<u>100</u>
8.	<u>4</u>	<u>40</u>	<u>400</u>