


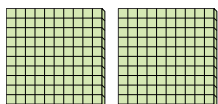


Verwenden Sie die Blöcke, um die Gesamtmengen zu bestimmen.

Bsp)


3 hundertern = 30 zehnern = 300 einern

1)




_____ hundertern = _____ zehnern = _____ einern

2)



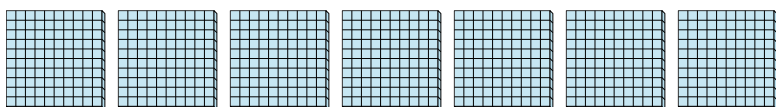
_____ hundertern = _____ zehnern = _____ einern

3)



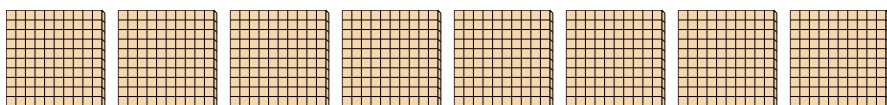
_____ hundertern = _____ zehnern = _____ einern

4)



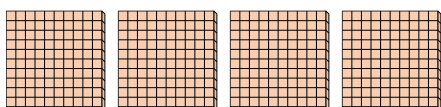
_____ hundertern = _____ zehnern = _____ einern

5)




_____ hundertern = _____ zehnern = _____ einern

6)




_____ hundertern = _____ zehnern = _____ einern

7)



_____ hundertern = _____ zehnern = _____ einern

8)



_____ hundertern = _____ zehnern = _____ einern

AntwortenBsp. 3 30 300

1. _____

2. _____

3. _____

4. _____

5. _____

6. _____

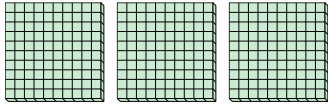
7. _____

8. _____




Verwenden Sie die Blöcke, um die Gesamtmengen zu bestimmen.

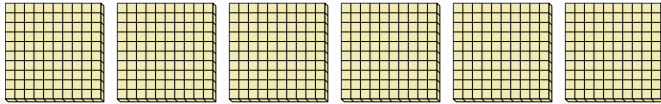
Bsp)

3 hundert = 30 zehner = 300 einern


1)

2 hundert = 20 zehner = 200 einern

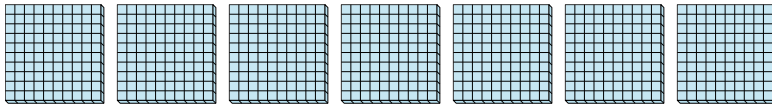
2)

6 hundert = 60 zehner = 600 einern

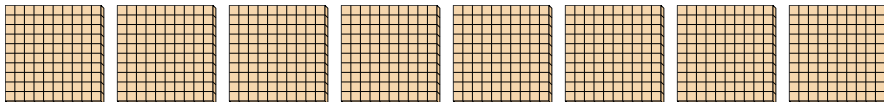
3)

9 hundert = 90 zehner = 900 einern

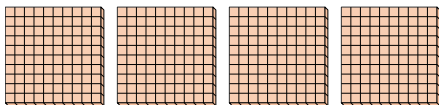
4)

7 hundert = 70 zehner = 700 einern

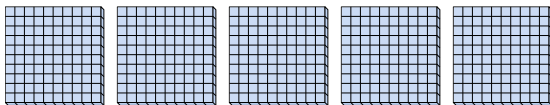
5)

8 hundert = 80 zehner = 800 einern


6)

4 hundert = 40 zehner = 400 einern

7)

5 hundert = 50 zehner = 500 einern

8)

1 hundert = 10 zehner = 100 einern**Antworten**Bsp. 3 30 3001. 2 20 2002. 6 60 6003. 9 90 9004. 7 70 7005. 8 80 8006. 4 40 4007. 5 50 5008. 1 10 100