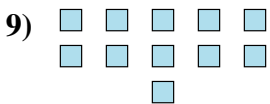
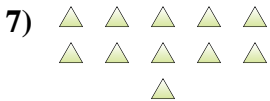
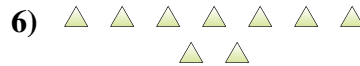
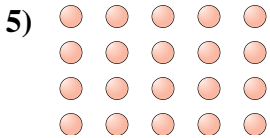
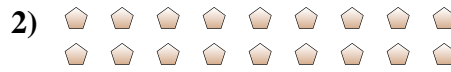




Bestimme, ob die Anzahl der Formen im Feld gerade oder ungerade ist.

Antworten



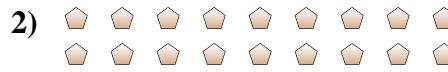
- 1. _____
- 2. _____
- 3. _____
- 4. _____
- 5. _____
- 6. _____
- 7. _____
- 8. _____
- 9. _____
- 10. _____



Bestimme, ob die Anzahl der Formen im Feld gerade oder ungerade ist.



7



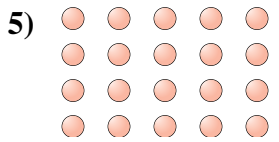
18



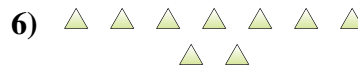
6



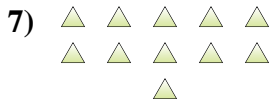
7



20



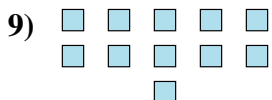
9



11



5



11



6

Antworten

1. ungerade

2. gerade

3. gerade

4. ungerade

5. gerade

6. ungerade

7. ungerade

8. ungerade

9. ungerade

10. gerade