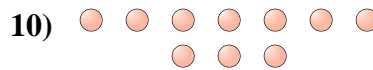
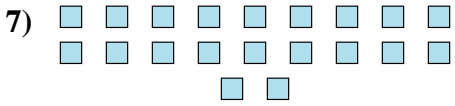
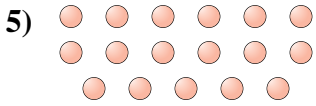
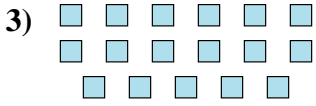
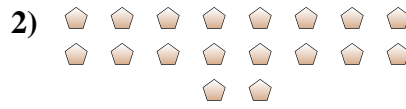




Bestimme, ob die Anzahl der Formen im Feld gerade oder ungerade ist.

**Antworten**



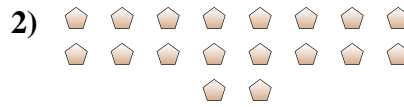
- 1. \_\_\_\_\_
- 2. \_\_\_\_\_
- 3. \_\_\_\_\_
- 4. \_\_\_\_\_
- 5. \_\_\_\_\_
- 6. \_\_\_\_\_
- 7. \_\_\_\_\_
- 8. \_\_\_\_\_
- 9. \_\_\_\_\_
- 10. \_\_\_\_\_



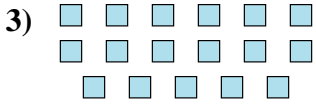
Bestimme, ob die Anzahl der Formen im Feld gerade oder ungerade ist.



19



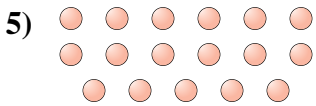
18



17



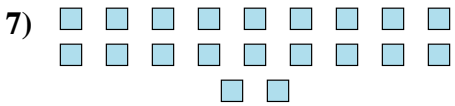
15



17



13



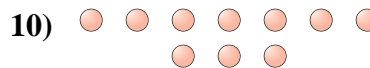
20



7



6



10

**Antworten**

1. ungerade
2. gerade
3. ungerade
4. ungerade
5. ungerade
6. ungerade
7. gerade
8. ungerade
9. gerade
10. gerade