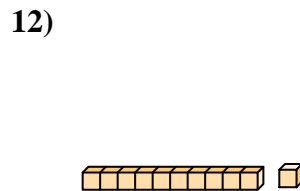
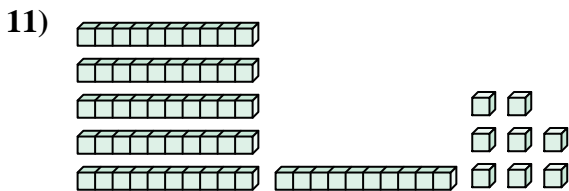
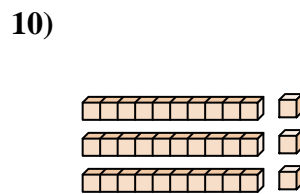
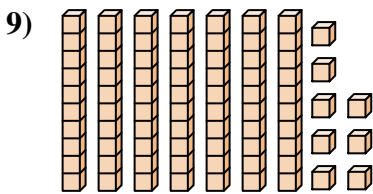
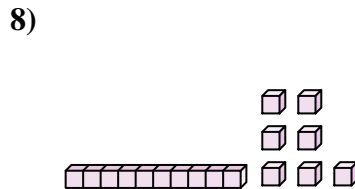
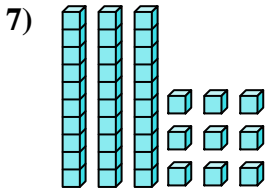
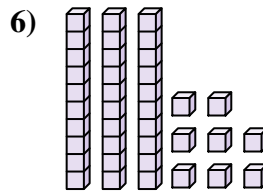
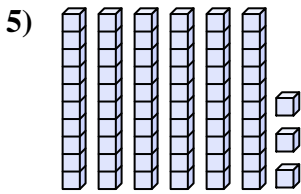
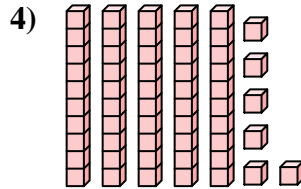
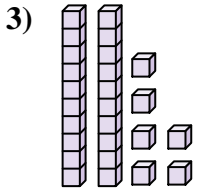
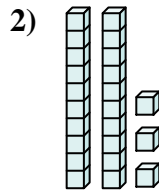
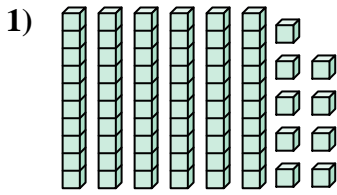




Zähle die Gesamtzahl aller kleinen Blöcke.

**Antworten**

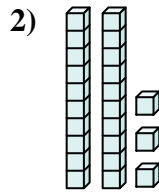
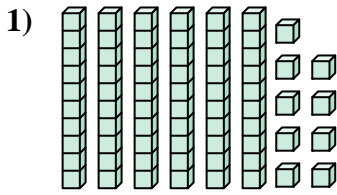


- 1. \_\_\_\_\_
- 2. \_\_\_\_\_
- 3. \_\_\_\_\_
- 4. \_\_\_\_\_
- 5. \_\_\_\_\_
- 6. \_\_\_\_\_
- 7. \_\_\_\_\_
- 8. \_\_\_\_\_
- 9. \_\_\_\_\_
- 10. \_\_\_\_\_
- 11. \_\_\_\_\_
- 12. \_\_\_\_\_

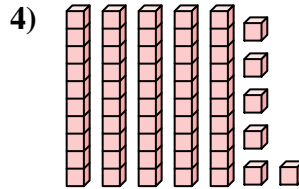
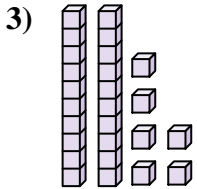


Zähle die Gesamtzahl aller kleinen Blöcke.

**Antworten**

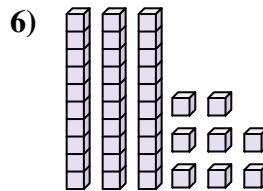
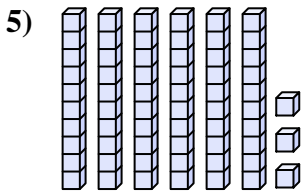


1. 69



2. 23

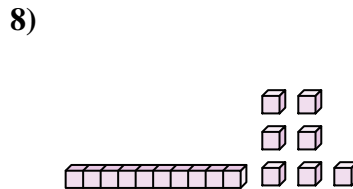
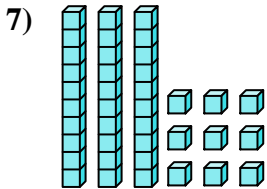
3. 26



4. 56

5. 63

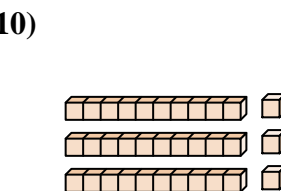
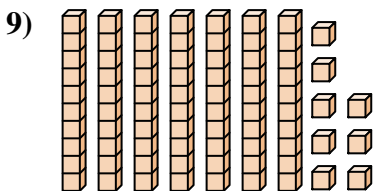
6. 38



7. 39

8. 17

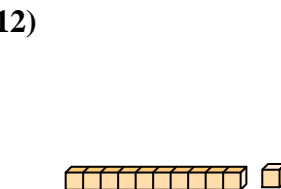
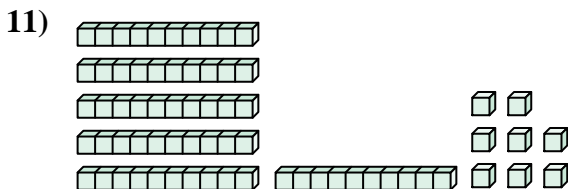
9. 78



10. 33

11. 68

12. 11





Zähle die Gesamtzahl aller kleinen Blöcke.

23

26

39

17

69

63

56

78

38

33

**Antworten**

1. \_\_\_\_\_

2. \_\_\_\_\_

3. \_\_\_\_\_

4. \_\_\_\_\_

5. \_\_\_\_\_

6. \_\_\_\_\_

7. \_\_\_\_\_

8. \_\_\_\_\_

9. \_\_\_\_\_

10. \_\_\_\_\_

