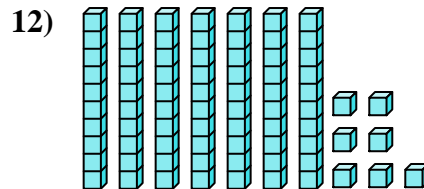
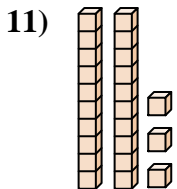
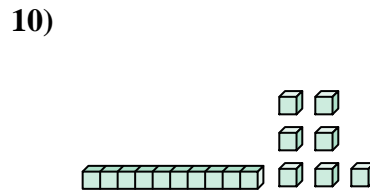
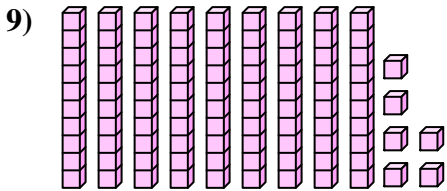
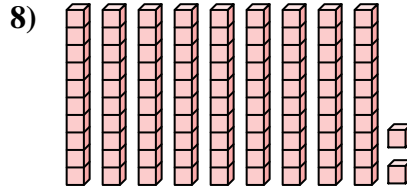
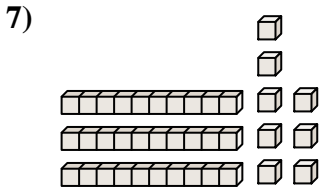
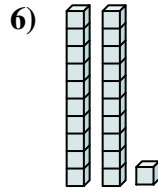
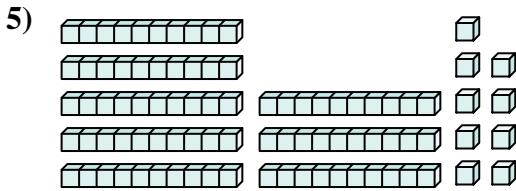
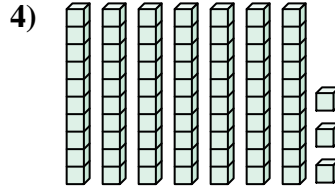
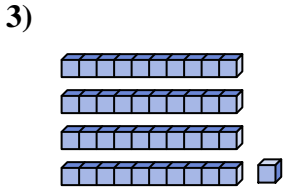
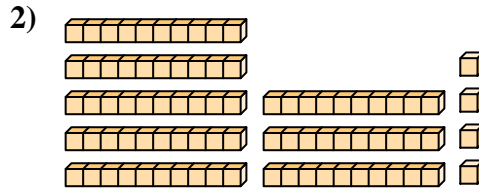
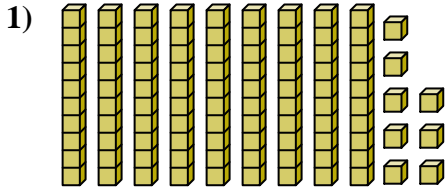




Zähle die Gesamtzahl aller kleinen Blöcke.

**Antworten**



1. \_\_\_\_\_

2. \_\_\_\_\_

3. \_\_\_\_\_

4. \_\_\_\_\_

5. \_\_\_\_\_

6. \_\_\_\_\_

7. \_\_\_\_\_

8. \_\_\_\_\_

9. \_\_\_\_\_

10. \_\_\_\_\_

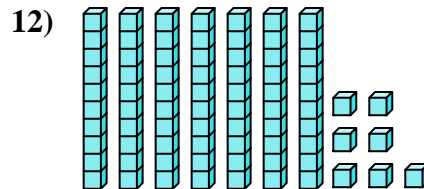
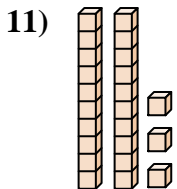
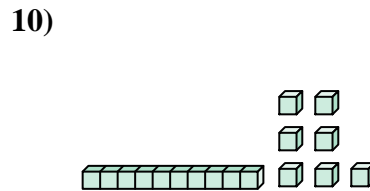
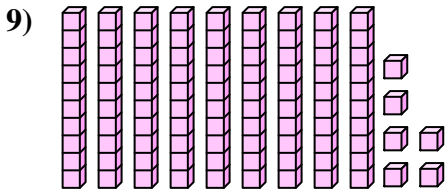
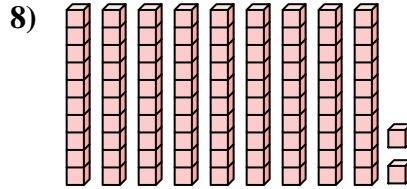
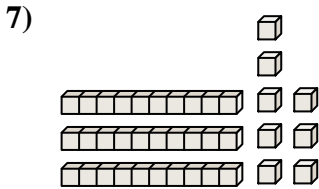
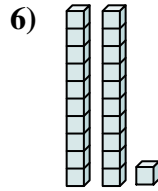
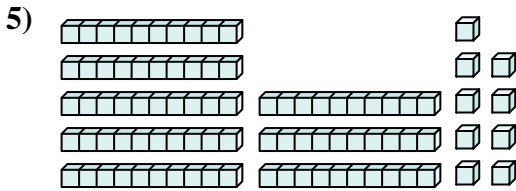
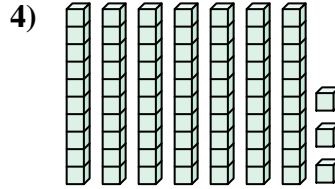
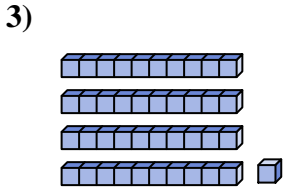
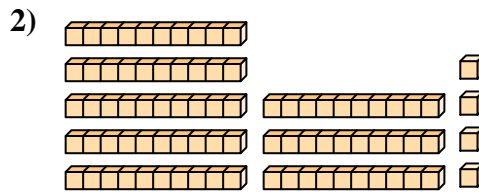
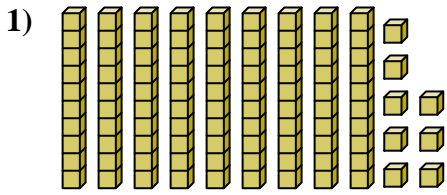
11. \_\_\_\_\_

12. \_\_\_\_\_



Zähle die Gesamtzahl aller kleinen Blöcke.

**Antworten**



1. 98

2. 84

3. 41

4. 73

5. 89

6. 21

7. 38

8. 92

9. 96

10. 17

11. 23

12. 77



Zähle die Gesamtzahl aller kleinen Blöcke.

**Antworten**

38

96

98

92

21

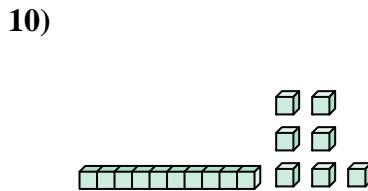
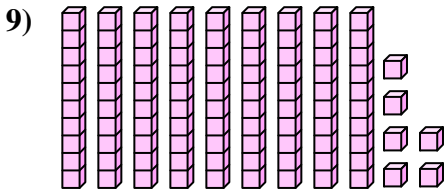
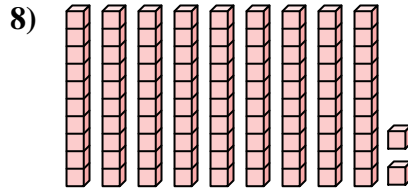
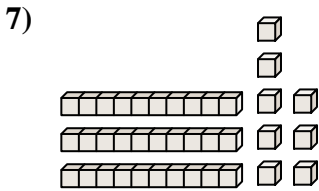
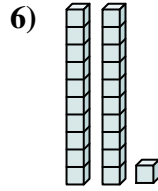
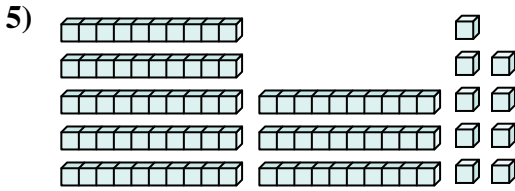
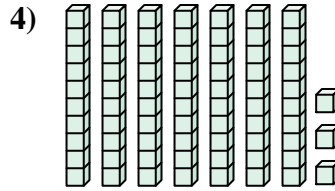
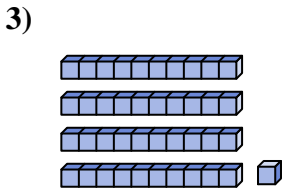
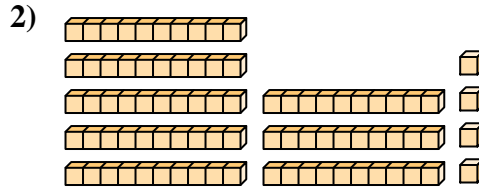
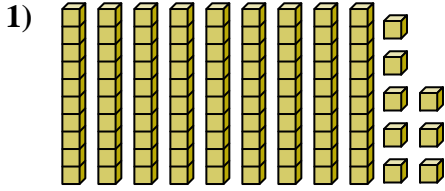
41

89

84

73

17



1. \_\_\_\_\_
2. \_\_\_\_\_
3. \_\_\_\_\_
4. \_\_\_\_\_
5. \_\_\_\_\_
6. \_\_\_\_\_
7. \_\_\_\_\_
8. \_\_\_\_\_
9. \_\_\_\_\_
10. \_\_\_\_\_