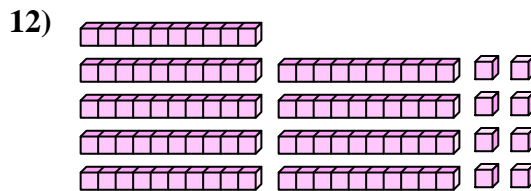
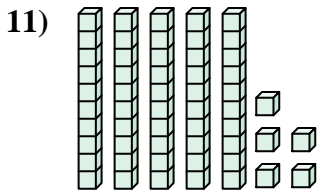
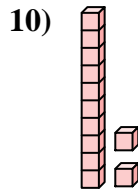
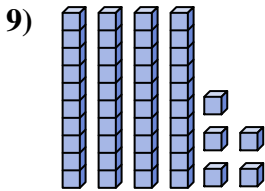
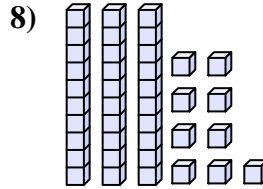
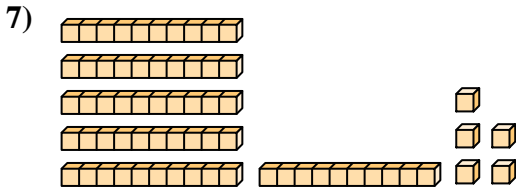
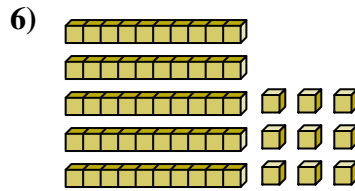
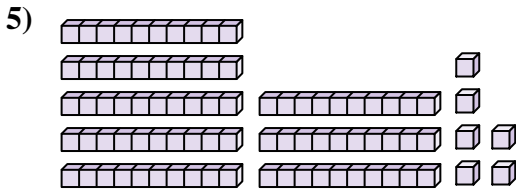

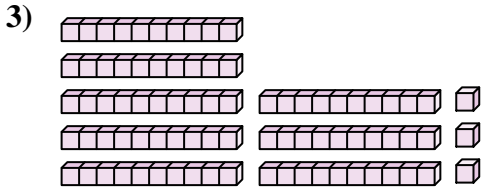
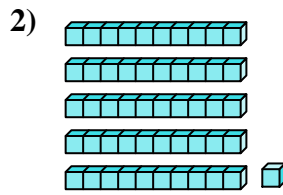





Zähle die Gesamtzahl aller kleinen Blöcke.

**Antworten**

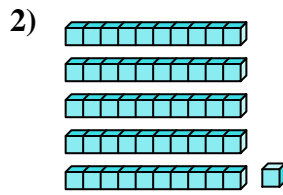



- 1. \_\_\_\_\_
- 2. \_\_\_\_\_
- 3. \_\_\_\_\_
- 4. \_\_\_\_\_
- 5. \_\_\_\_\_
- 6. \_\_\_\_\_
- 7. \_\_\_\_\_
- 8. \_\_\_\_\_
- 9. \_\_\_\_\_
- 10. \_\_\_\_\_
- 11. \_\_\_\_\_
- 12. \_\_\_\_\_


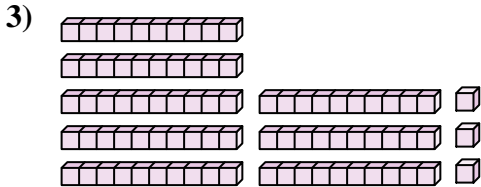


Zähle die Gesamtzahl aller kleinen Blöcke.

**Antworten**



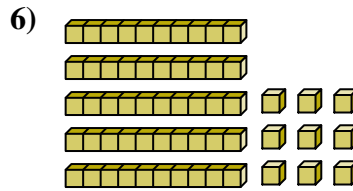
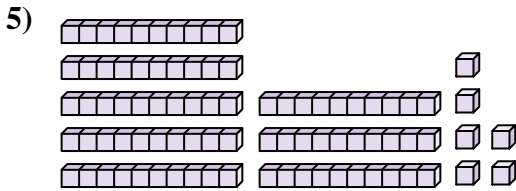
1. 82



2. 51

3. 83

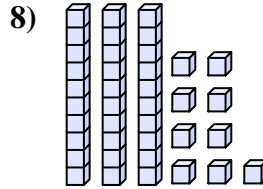
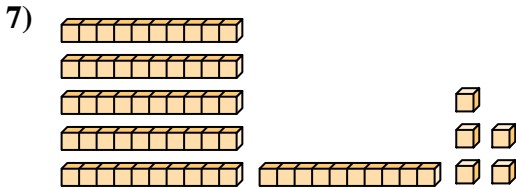
4. 54



5. 86

6. 59

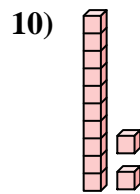
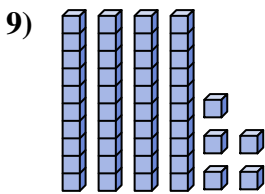
7. 65



8. 39

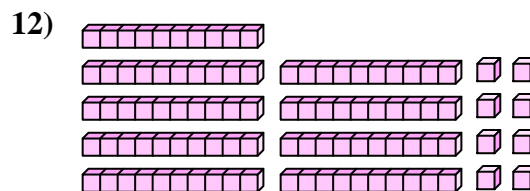
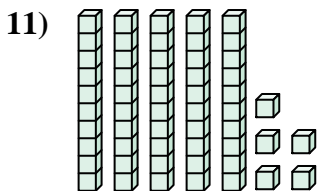
9. 45

10. 12



11. 55

12. 98





Zähle die Gesamtzahl aller kleinen Blöcke.

**Antworten**

51

45

54

39

65

86

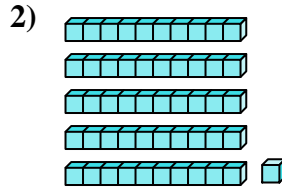
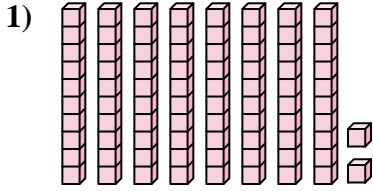
59

82

12

83

1. \_\_\_\_\_


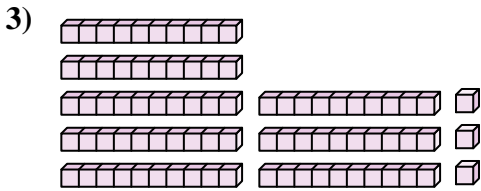


2. \_\_\_\_\_

3. \_\_\_\_\_

4. \_\_\_\_\_

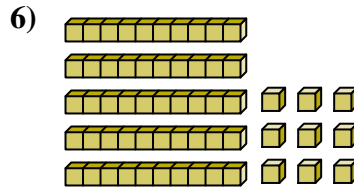
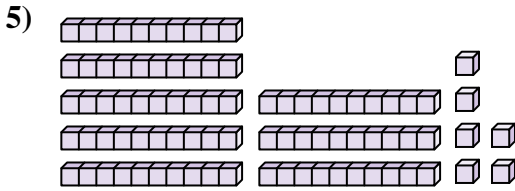
5. \_\_\_\_\_



6. \_\_\_\_\_

7. \_\_\_\_\_

8. \_\_\_\_\_



9. \_\_\_\_\_

10. \_\_\_\_\_

