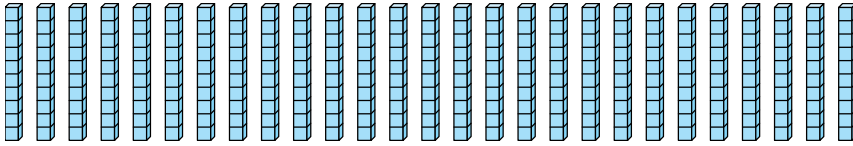




Bestimmen Sie, wie viele Gruppen von 100 aus den angezeigten Blöcken erstellt werden können.

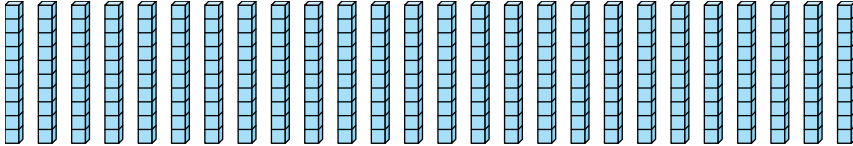
Antworten

Bsp)



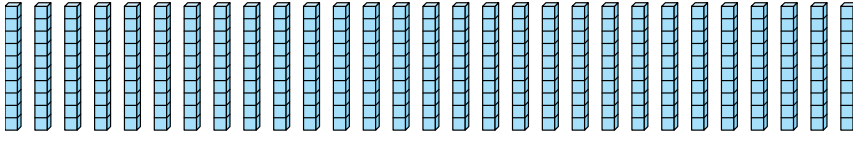
Bsp. 2

1)



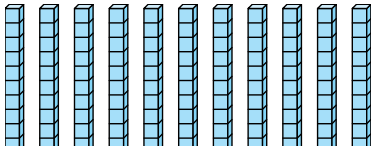
1. _____

2)



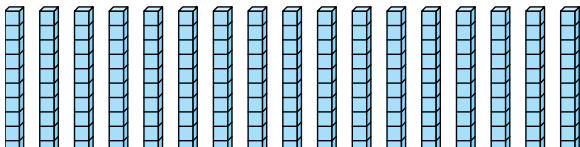
2. _____

3)



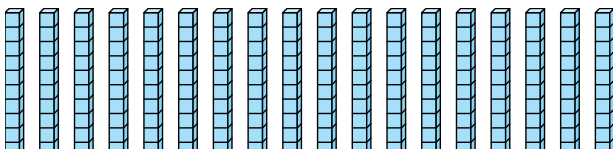
3. _____

4)



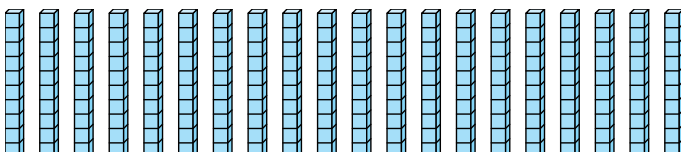
4. _____

5)



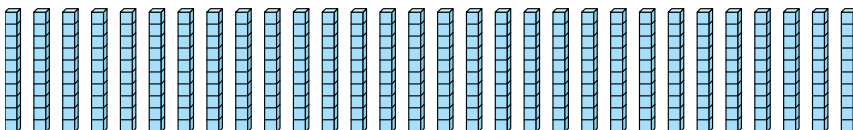
5. _____

6)



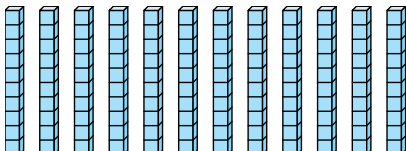
6. _____

7)



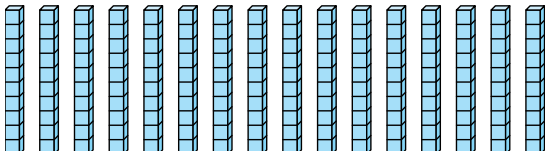
7. _____

8)



8. _____

9)



9. _____



Bestimmen Sie, wie viele Gruppen von 100 aus den angezeigten Blöcken erstellt werden können.

Bsp)

1)

2)

3)

4)

5)

6)

7)

8)

9)

Antworten

Bsp. 2

1. 2

2. 2

3. 1

4. 1

5. 1

6. 2

7. 3

8. 1

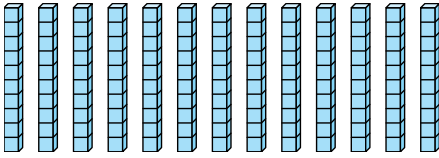
9. 1



Bestimmen Sie, wie viele Gruppen von 100 aus den angezeigten Blöcken erstellt werden können.

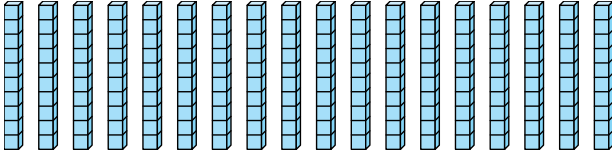
Antworten

Bsp)



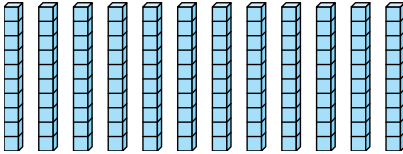
Bsp. 1

1)



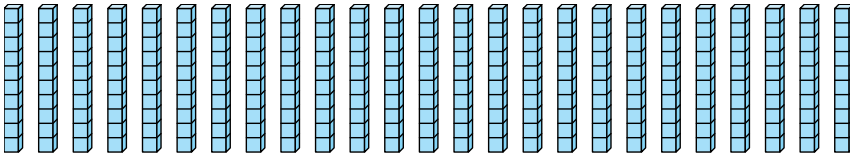
1. _____

2)



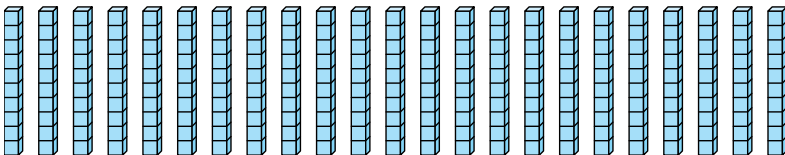
2. _____

3)



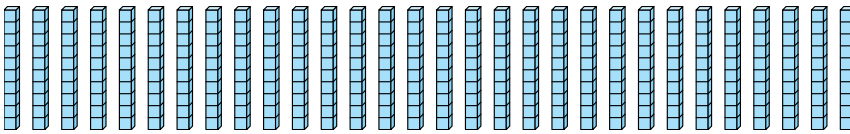
3. _____

4)



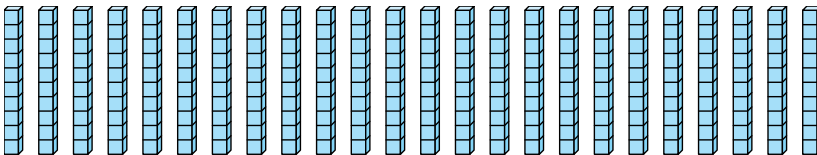
4. _____

5)



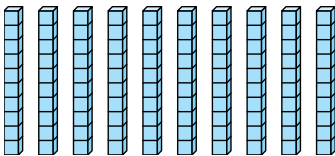
5. _____

6)



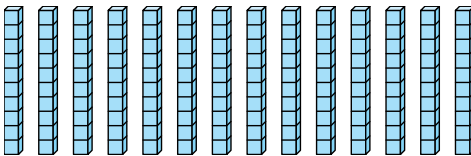
6. _____

7)



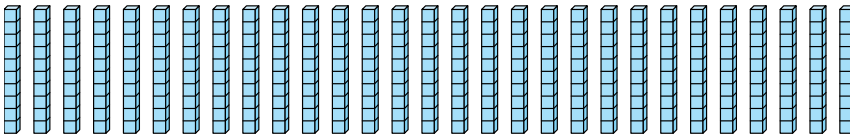
7. _____

8)



8. _____

9)



9. _____



Bestimmen Sie, wie viele Gruppen von 100 aus den angezeigten Blöcken erstellt werden können.

Bsp)

1)

2)

3)

4)

5)

6)

7)

8)

9)

Antworten

Bsp. 1

1. 1

2. 1

3. 2

4. 2

5. 3

6. 2

7. 1

8. 1

9. 2

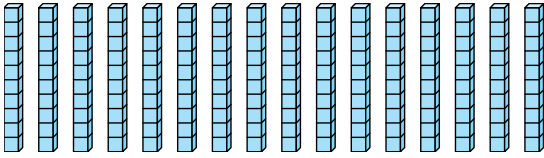


Bestimmen Sie, wie viele Gruppen von 100 aus den angezeigten Blöcken erstellt werden können.

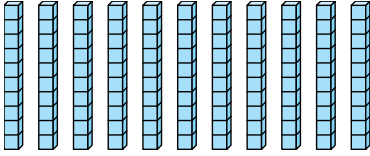
Antworten

Bsp)

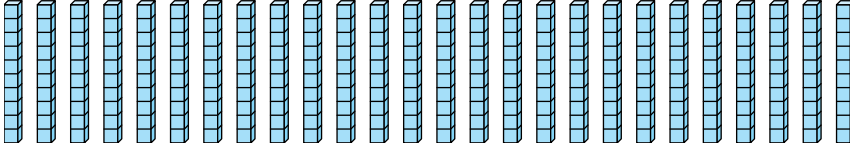
Bsp. 1



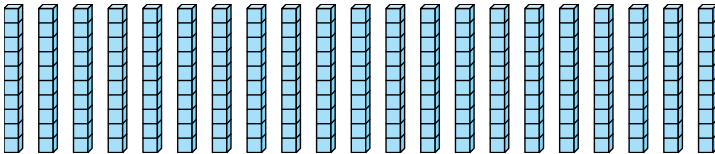
1)



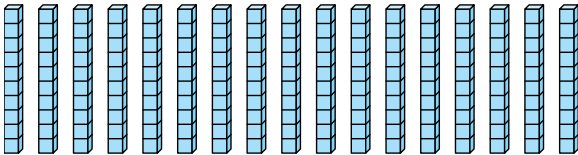
2)



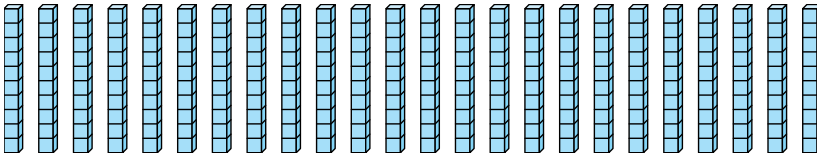
3)



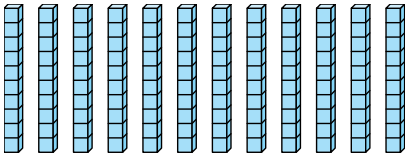
4)



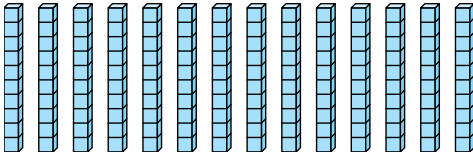
5)



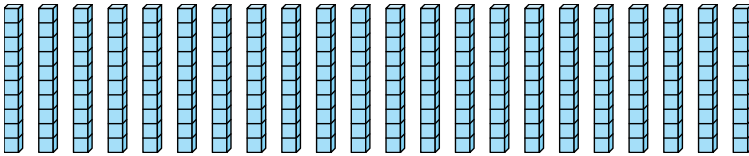
6)



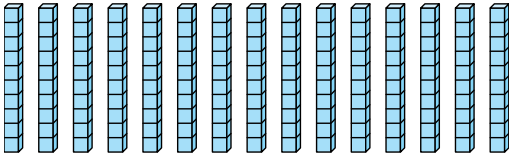
7)



8)



9)



- 1. _____
- 2. _____
- 3. _____
- 4. _____
- 5. _____
- 6. _____
- 7. _____
- 8. _____
- 9. _____



Bestimmen Sie, wie viele Gruppen von 100 aus den angezeigten Blöcken erstellt werden können.

Bsp)

1)

2)

3)

4)

5)

6)

7)

8)

9)

Antworten

Bsp. 1

1. 1

2. 2

3. 2

4. 1

5. 2

6. 1

7. 1

8. 2

9. 1

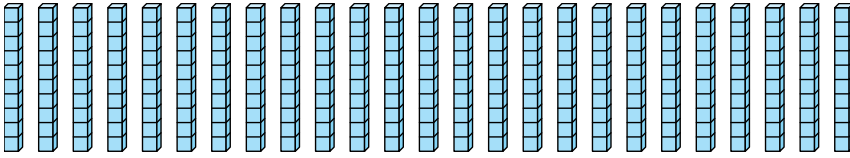


Bestimmen Sie, wie viele Gruppen von 100 aus den angezeigten Blöcken erstellt werden können.

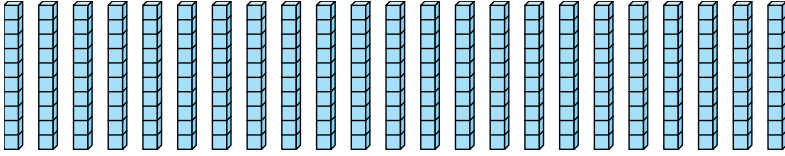
Antworten

Bsp)

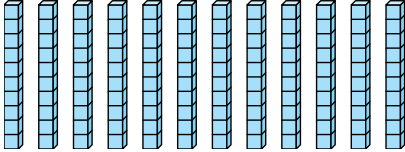
Bsp. 2



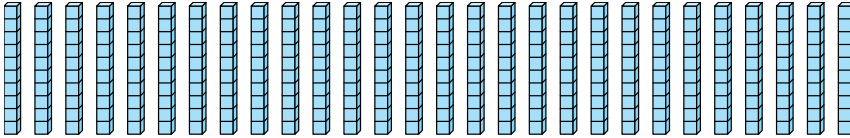
1)



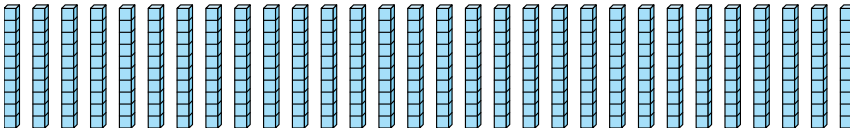
2)



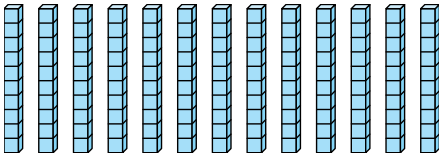
3)



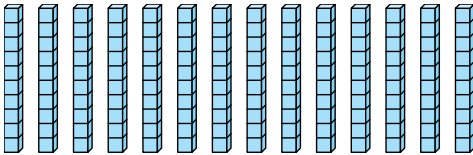
4)



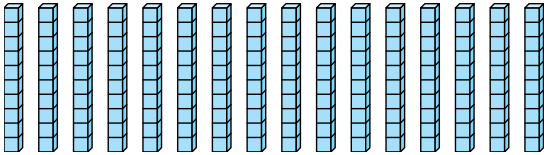
5)



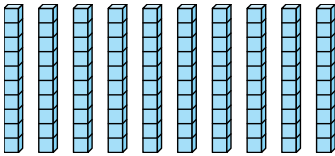
6)



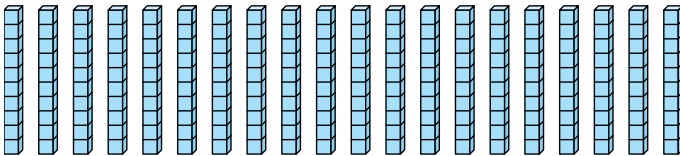
7)



8)



9)



1. _____

2. _____

3. _____

4. _____

5. _____

6. _____

7. _____

8. _____

9. _____



Bestimmen Sie, wie viele Gruppen von 100 aus den angezeigten Blöcken erstellt werden können.

Bsp)

1)

2)

3)

4)

5)

6)

7)

8)

9)

Antworten

Bsp. 2

1. 2

2. 1

3. 2

4. 3

5. 1

6. 1

7. 1

8. 1

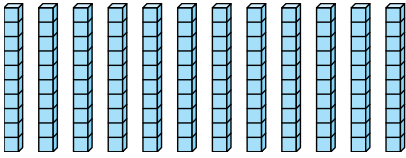
9. 2



Bestimmen Sie, wie viele Gruppen von 100 aus den angezeigten Blöcken erstellt werden können.

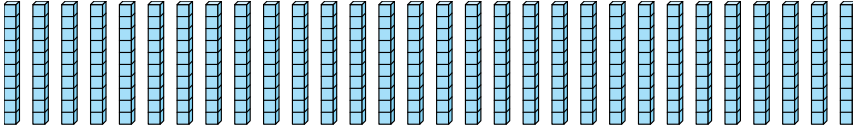
Antworten

Bsp)



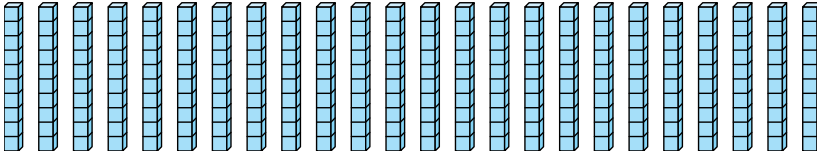
Bsp. 1

1)



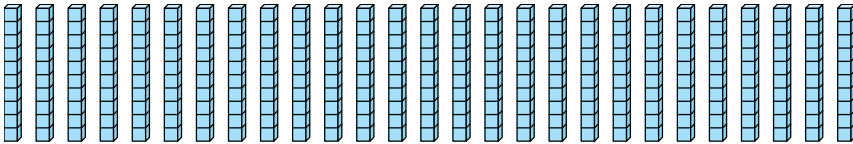
1. _____

2)



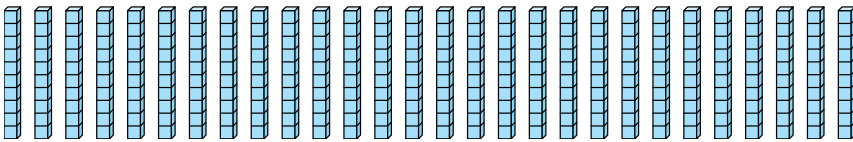
2. _____

3)



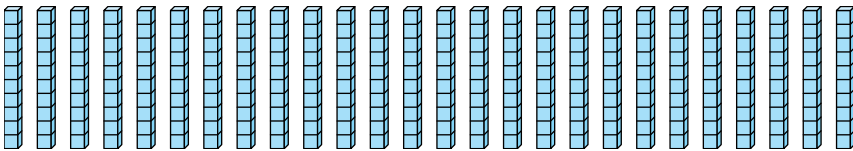
3. _____

4)



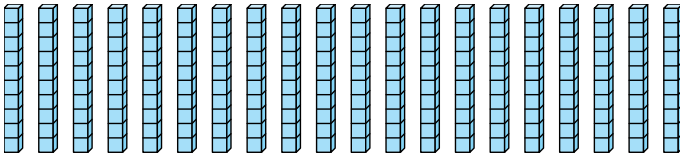
4. _____

5)



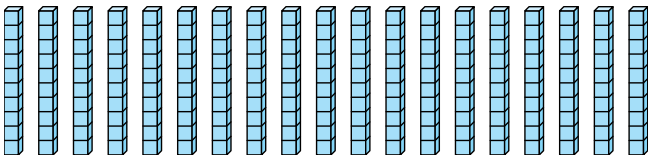
5. _____

6)



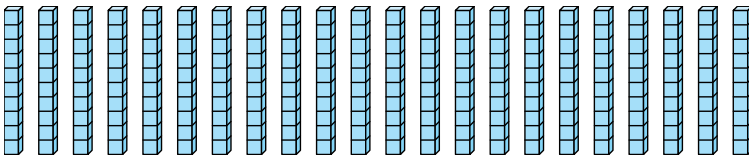
6. _____

7)



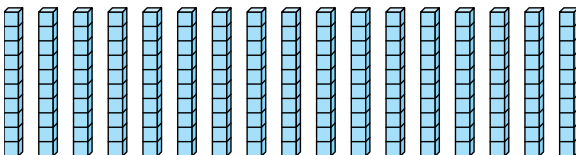
7. _____

8)



8. _____

9)

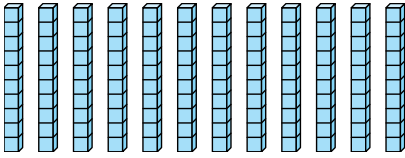


9. _____

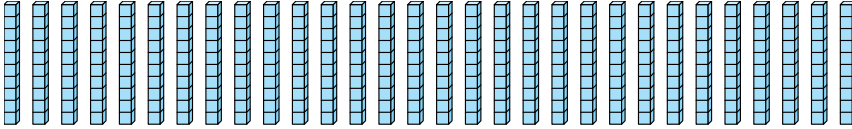


Bestimmen Sie, wie viele Gruppen von 100 aus den angezeigten Blöcken erstellt werden können.

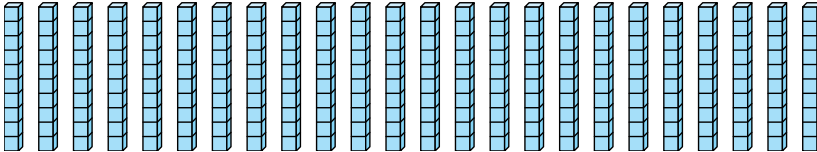
Bsp)



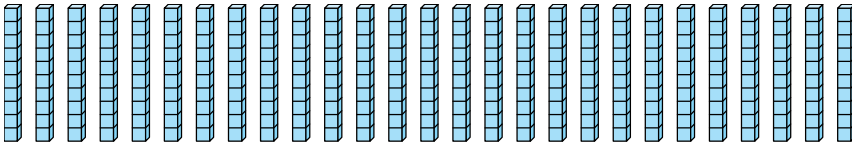
1)



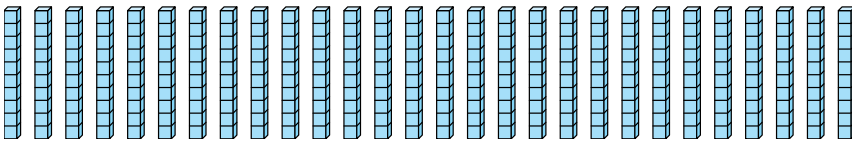
2)



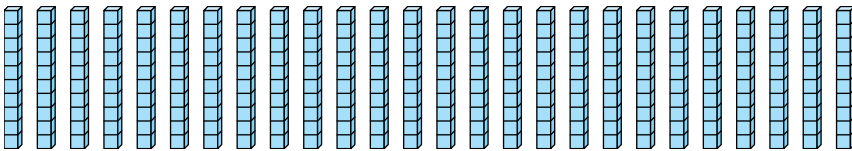
3)



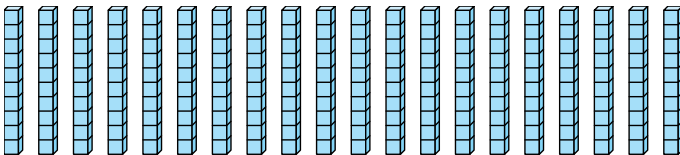
4)



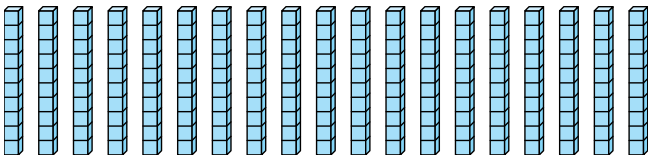
5)



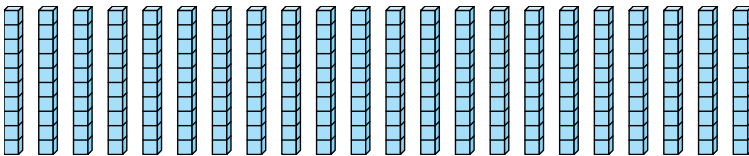
6)



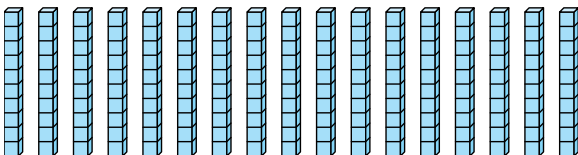
7)



8)



9)

**Antworten**Bsp. 11. 32. 23. 24. 25. 26. 27. 18. 29. 1

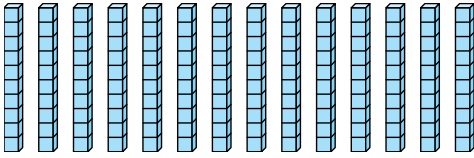


Bestimmen Sie, wie viele Gruppen von 100 aus den angezeigten Blöcken erstellt werden können.

Antworten

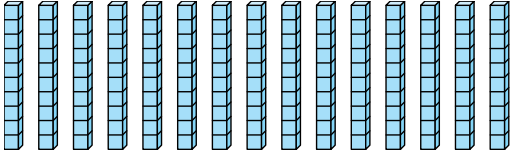
Bsp)

Bsp. 1



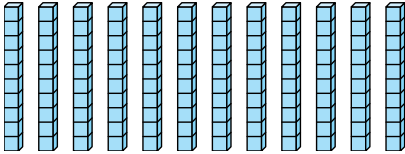
1. _____

1)



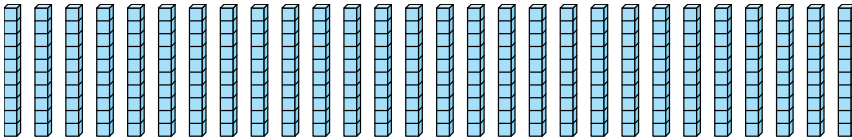
2. _____

2)



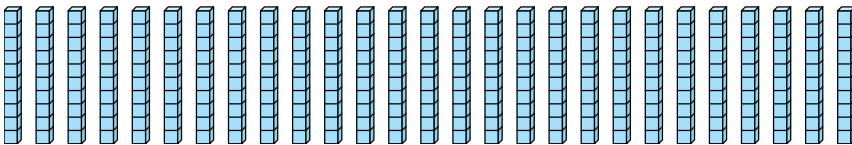
3. _____

3)



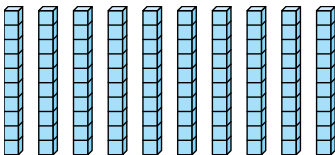
4. _____

4)



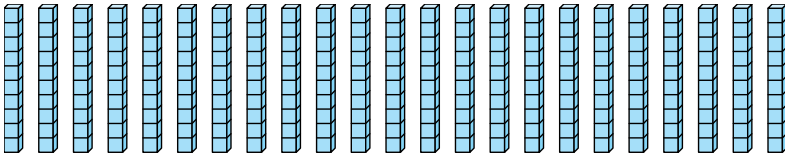
5. _____

5)



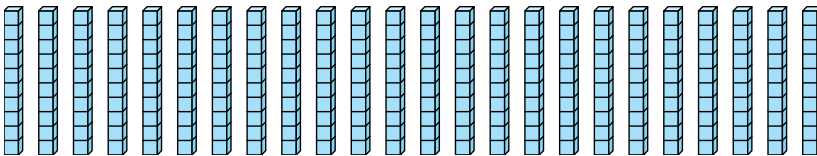
6. _____

6)



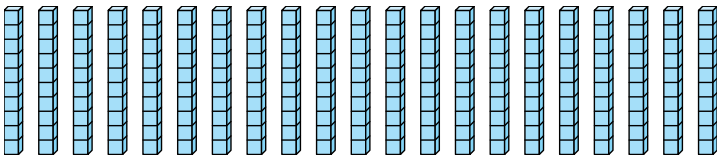
7. _____

7)



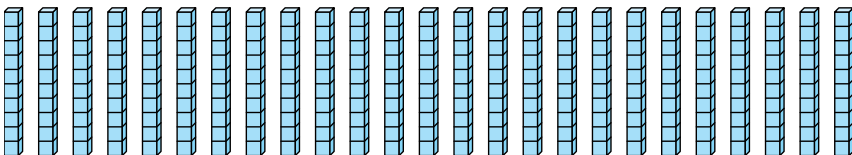
8. _____

8)



9. _____

9)





Bestimmen Sie, wie viele Gruppen von 100 aus den angezeigten Blöcken erstellt werden können.

Bsp)

1)

2)

3)

4)

5)

6)

7)

8)

9)

Antworten

Bsp. 1

1. 1

2. 1

3. 2

4. 2

5. 1

6. 2

7. 2

8. 2

9. 2



Bestimmen Sie, wie viele Gruppen von 100 aus den angezeigten Blöcken erstellt werden können.

Bsp)

1)

2)

3)

4)

5)

6)

7)

8)

9)

Antworten

Bsp. 3

1. _____

2. _____

3. _____

4. _____

5. _____

6. _____

7. _____

8. _____

9. _____



Bestimmen Sie, wie viele Gruppen von 100 aus den angezeigten Blöcken erstellt werden können.

Bsp)

1)

2)

3)

4)

5)

6)

7)

8)

9)

Antworten

Bsp. 3

1. 1

2. 1

3. 1

4. 1

5. 1

6. 2

7. 2

8. 2

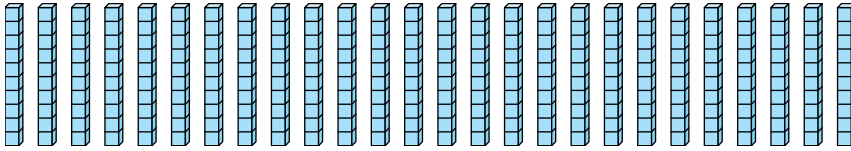
9. 1



Bestimmen Sie, wie viele Gruppen von 100 aus den angezeigten Blöcken erstellt werden können.

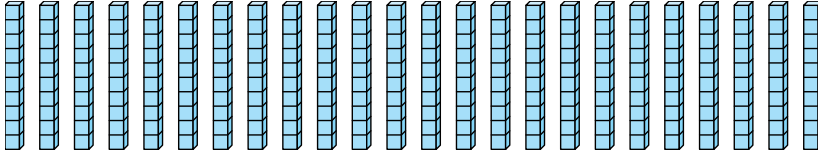
Antworten

Bsp)



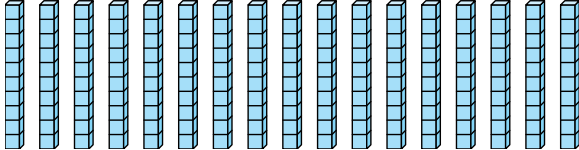
Bsp. 2

1)



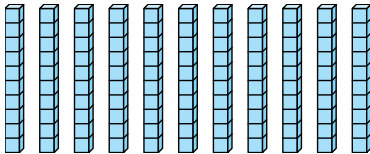
1. _____

2)



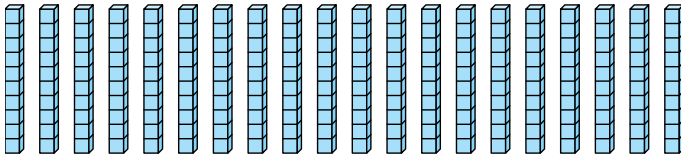
2. _____

3)



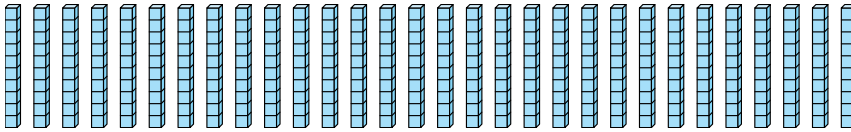
3. _____

4)



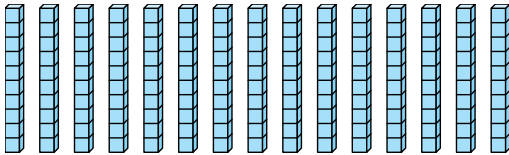
4. _____

5)



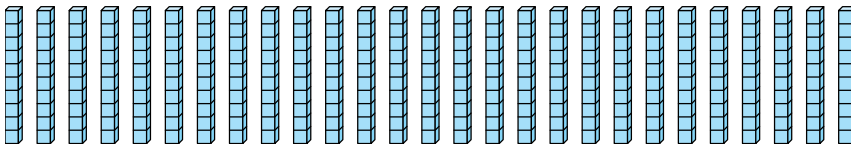
5. _____

6)



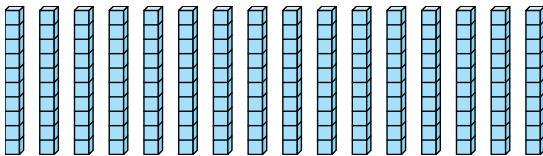
6. _____

7)



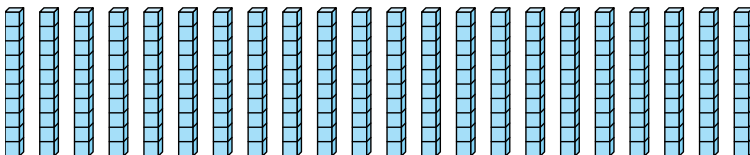
7. _____

8)



8. _____

9)

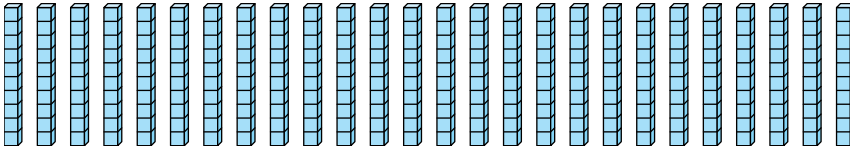


9. _____

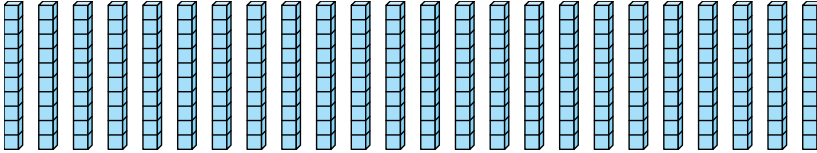


Bestimmen Sie, wie viele Gruppen von 100 aus den angezeigten Blöcken erstellt werden können.

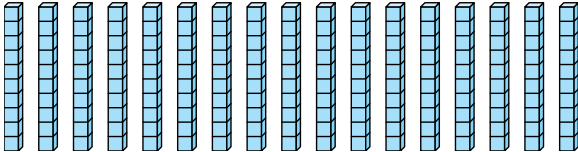
Bsp)



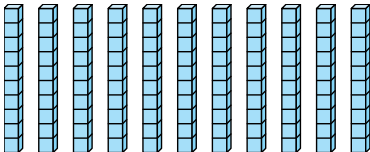
1)



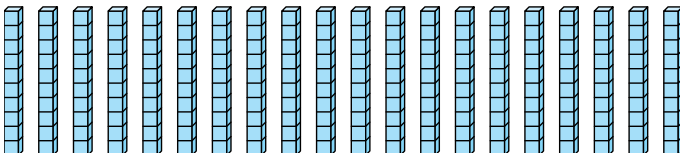
2)



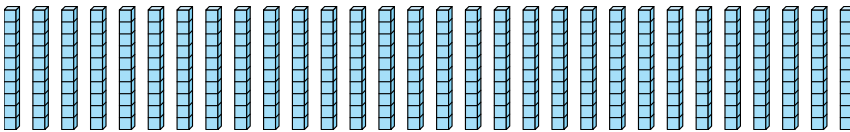
3)



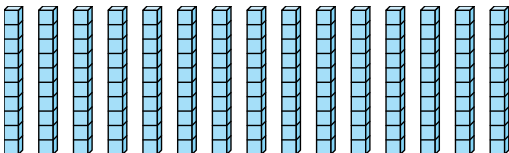
4)



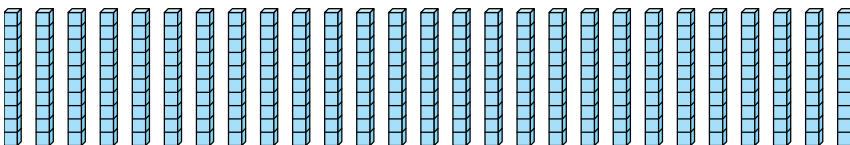
5)



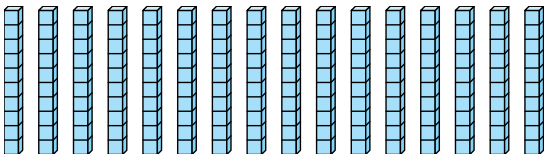
6)



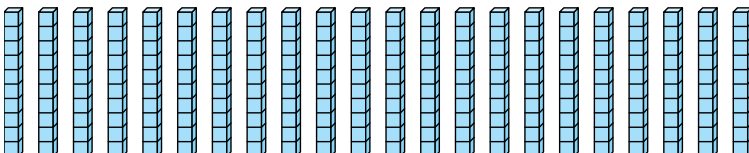
7)



8)



9)

AntwortenBsp. 21. 22. 13. 14. 25. 36. 17. 28. 19. 2

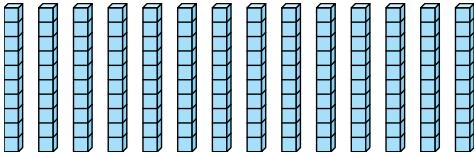


Bestimmen Sie, wie viele Gruppen von 100 aus den angezeigten Blöcken erstellt werden können.

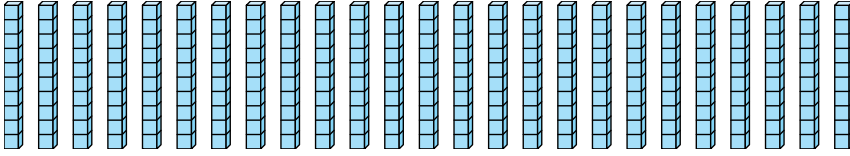
Antworten

Bsp)

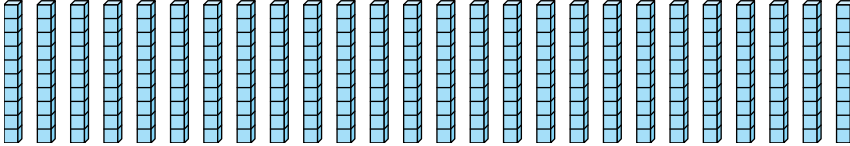
Bsp. 1



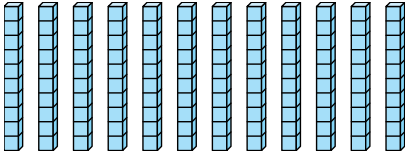
1)



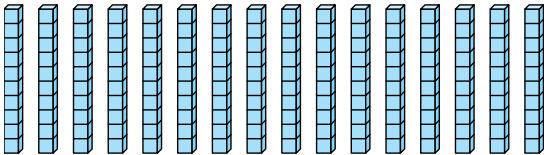
2)



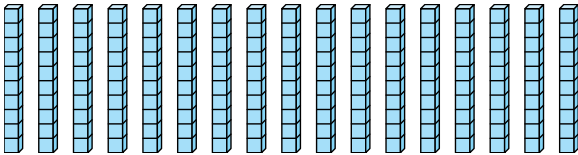
3)



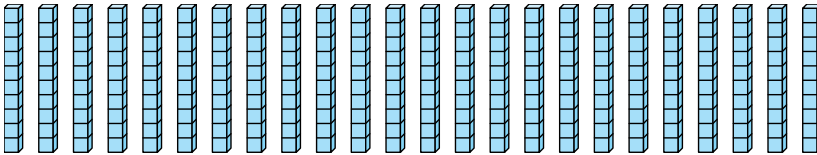
4)



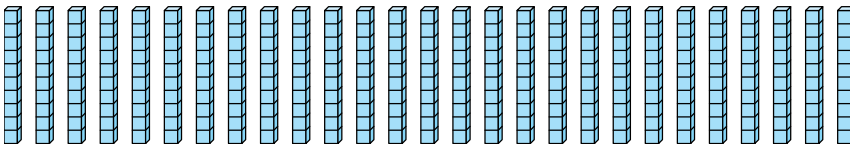
5)



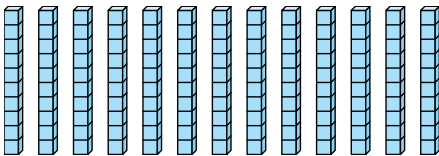
6)



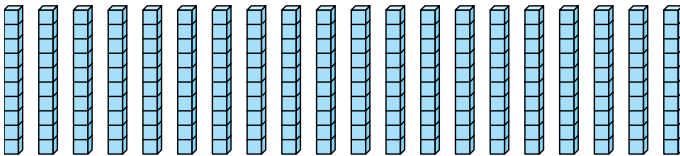
7)



8)



9)



1. _____

2. _____

3. _____

4. _____

5. _____

6. _____

7. _____

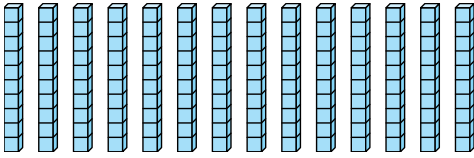
8. _____

9. _____



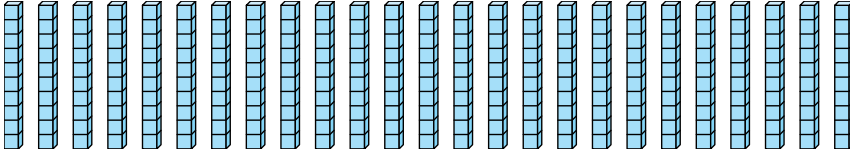
Bestimmen Sie, wie viele Gruppen von 100 aus den angezeigten Blöcken erstellt werden können.

Bsp)



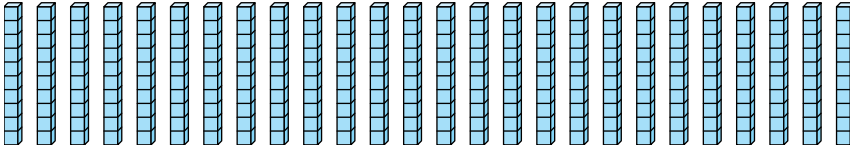
Bsp. 1

1)



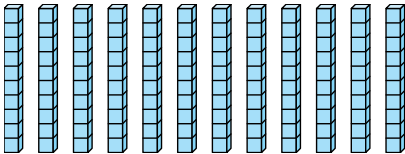
1. 2

2)



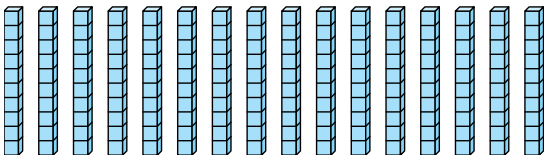
2. 2

3)



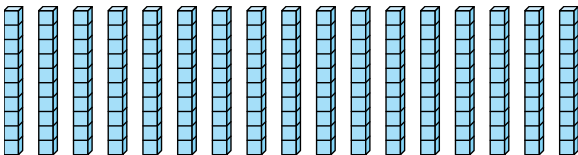
3. 1

4)



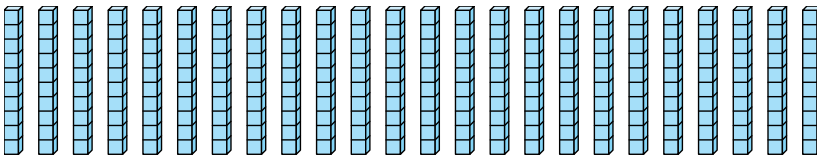
4. 1

5)



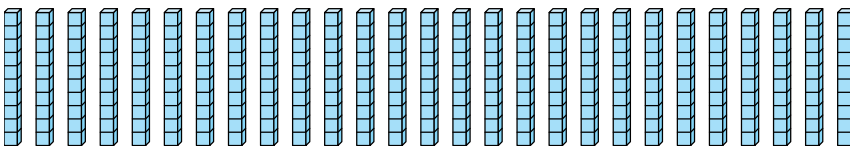
5. 1

6)



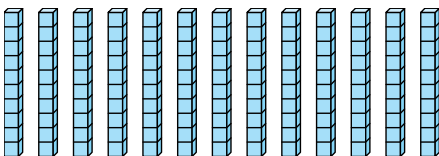
6. 2

7)



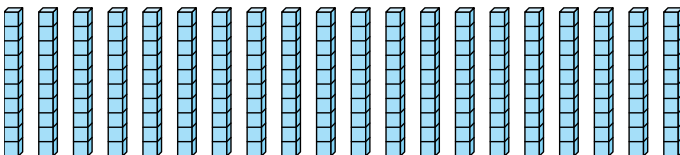
7. 2

8)



8. 1

9)



9. 2

Antworten

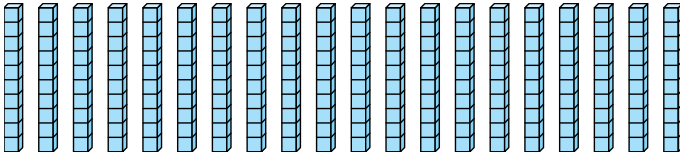


Bestimmen Sie, wie viele Gruppen von 100 aus den angezeigten Blöcken erstellt werden können.

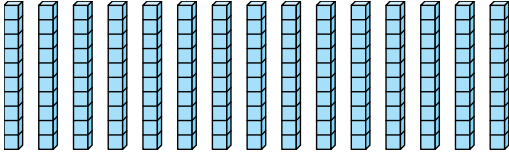
Antworten

Bsp)

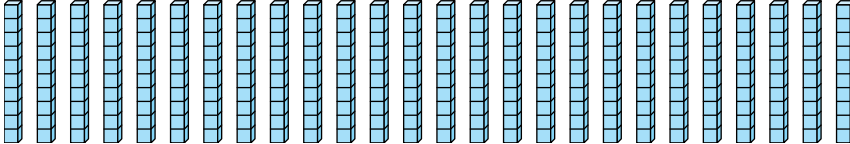
Bsp. 2



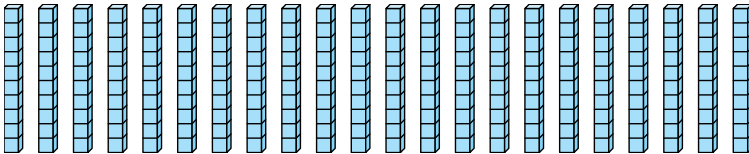
1)



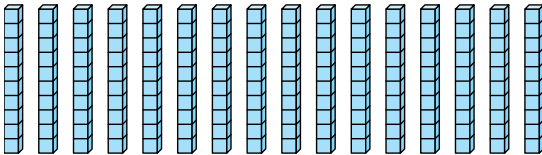
2)



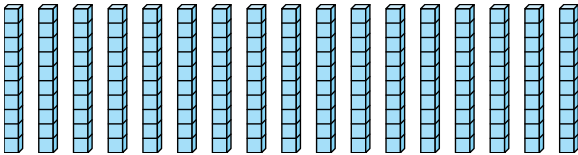
3)



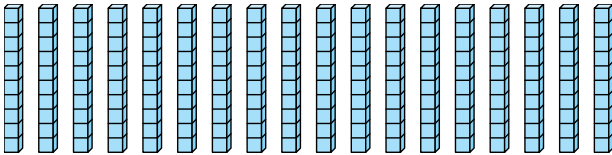
4)



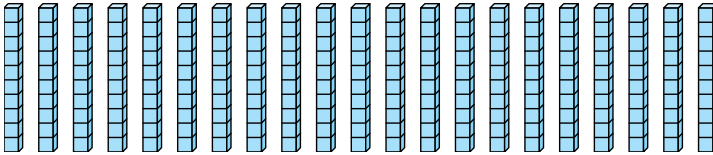
5)



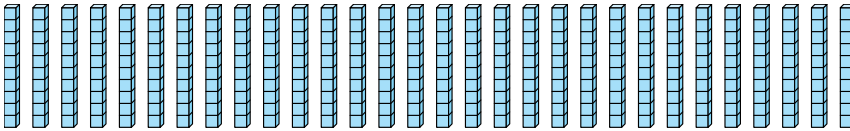
6)



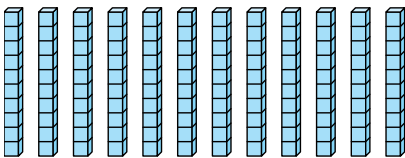
7)



8)



9)

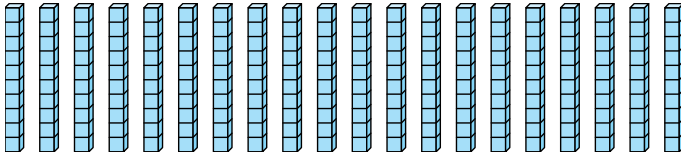


- 1. _____
- 2. _____
- 3. _____
- 4. _____
- 5. _____
- 6. _____
- 7. _____
- 8. _____
- 9. _____

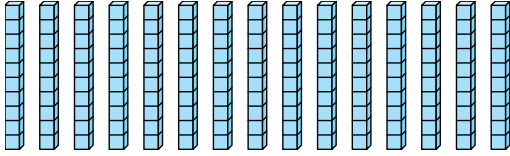


Bestimmen Sie, wie viele Gruppen von 100 aus den angezeigten Blöcken erstellt werden können.

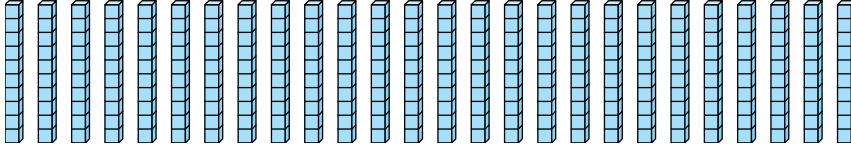
Bsp)



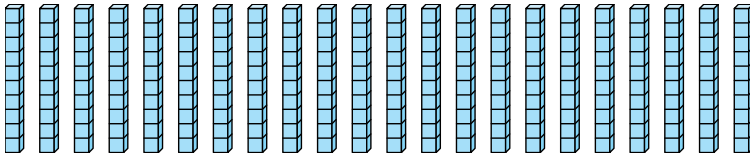
1)



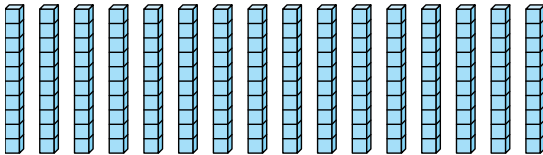
2)



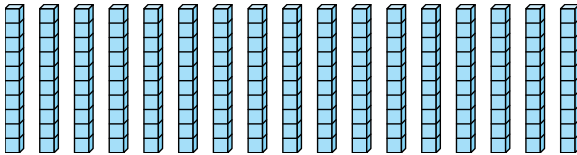
3)



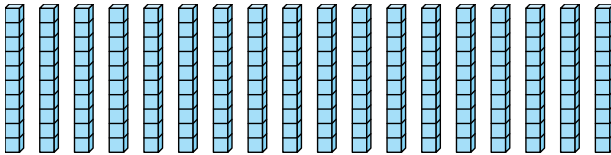
4)



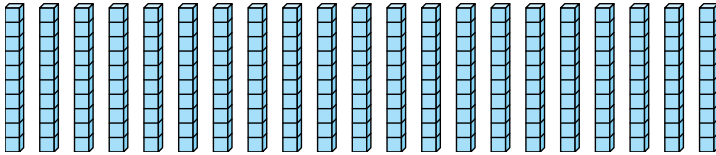
5)



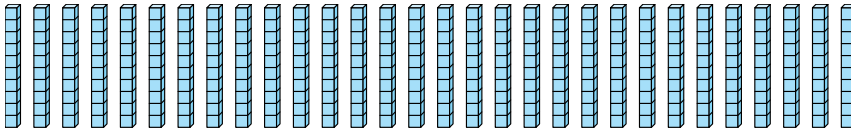
6)



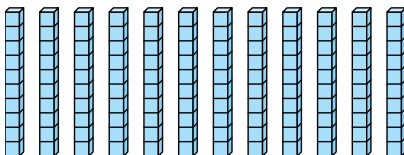
7)



8)



9)



Antworten

Bsp. 2

1. 1

2. 2

3. 2

4. 1

5. 1

6. 1

7. 2

8. 3

9. 1