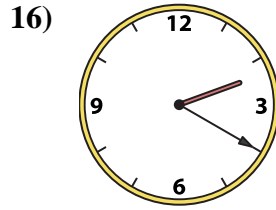
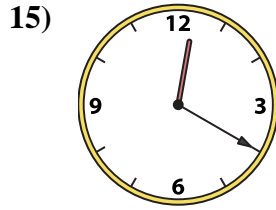
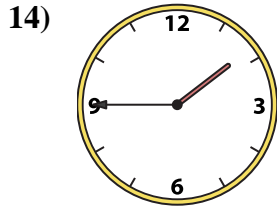
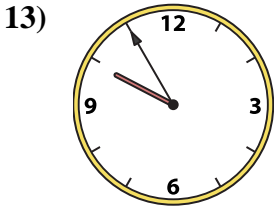
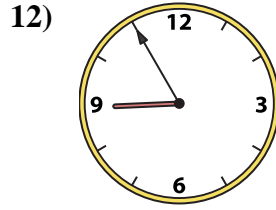
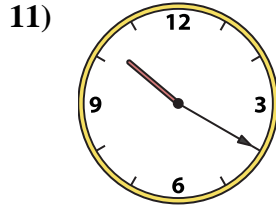
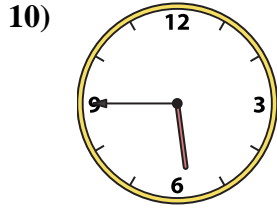
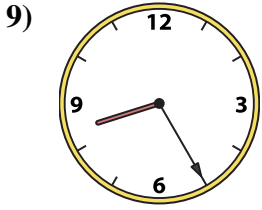
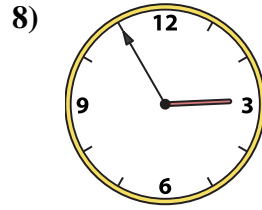
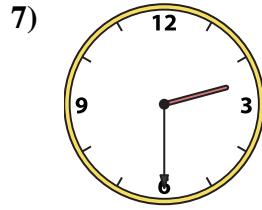
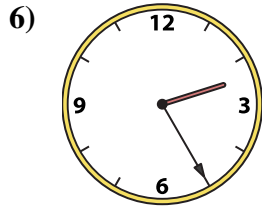
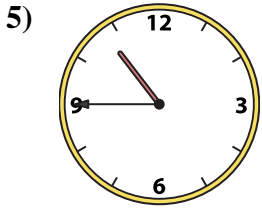
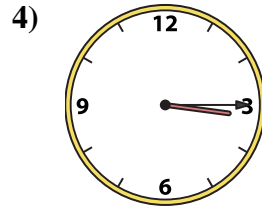
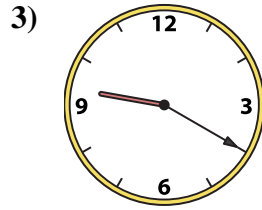
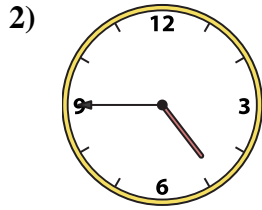
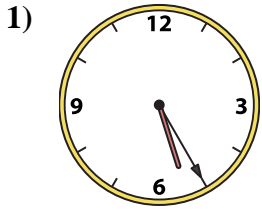




Passen Sie die analoge Uhr an die digitale Uhr an.

Antworten



1. _____
2. _____
3. _____
4. _____
5. _____
6. _____
7. _____
8. _____
9. _____
10. _____
11. _____
12. _____
13. _____
14. _____
15. _____
16. _____

A. 12:20

B. 8:25

C. 1:45

D. 3:15

E. 2:55

F. 4:45

G. 2:20

H. 2:25

I. 10:45

J. 9:20

K. 10:20

L. 5:45

M. 2:30

N. 9:55

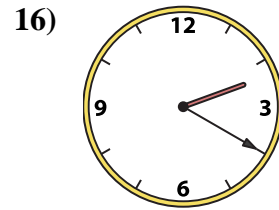
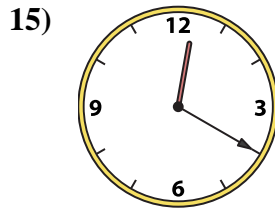
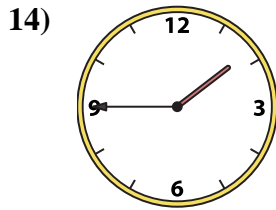
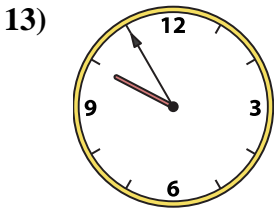
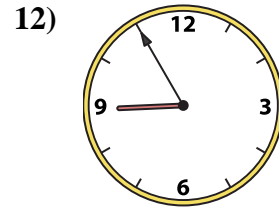
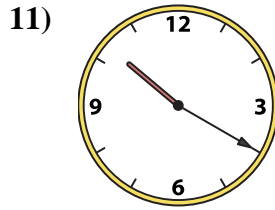
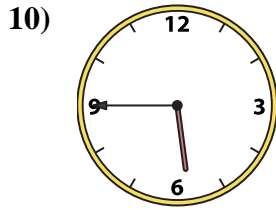
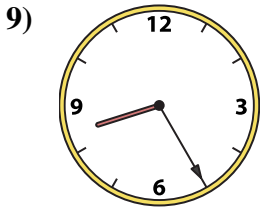
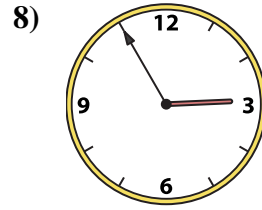
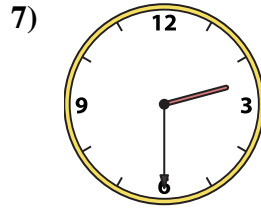
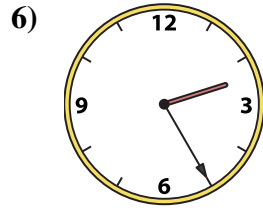
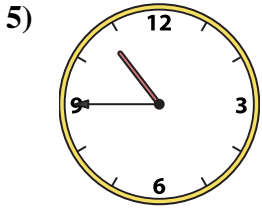
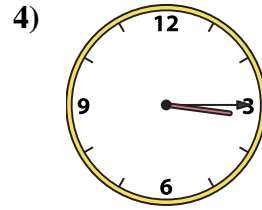
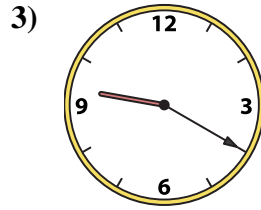
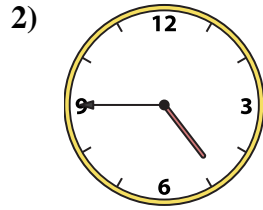
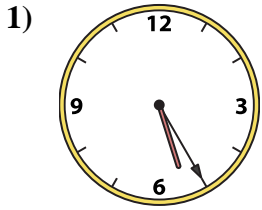
O. 8:55

P. 5:25



Passen Sie die analoge Uhr an die digitale Uhr an.

Antworten



A. **12:20**

B. **8:25**

C. **1:45**

D. **3:15**

E. **2:55**

F. **4:45**

G. **2:20**

H. **2:25**

I. **10:45**

J. **9:20**

K. **10:20**

L. **5:45**

M. **2:30**

N. **9:55**

O. **8:55**

P. **5:25**

1. **P**

2. **F**

3. **J**

4. **D**

5. **I**

6. **H**

7. **M**

8. **E**

9. **B**

10. **L**

11. **K**

12. **O**

13. **N**

14. **C**

15. **A**

16. **G**