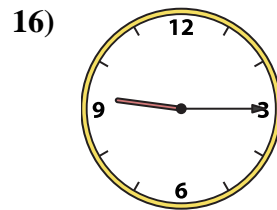
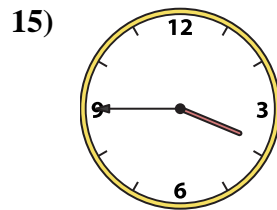
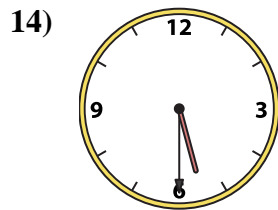
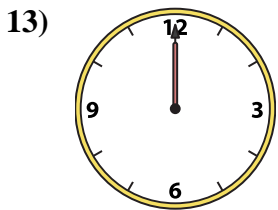
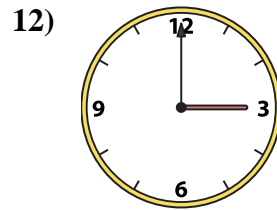
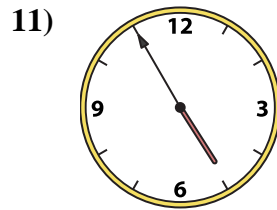
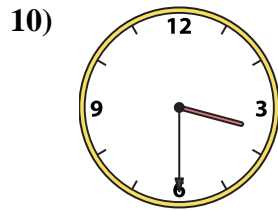
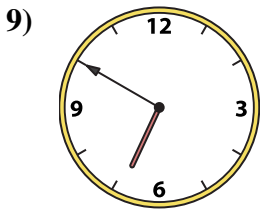
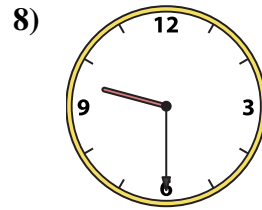
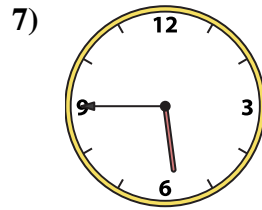
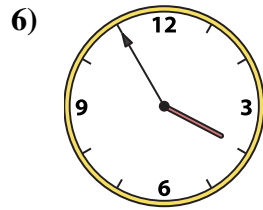
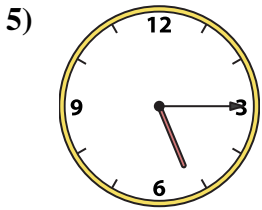
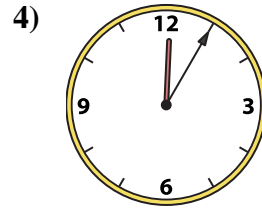
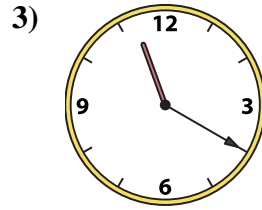
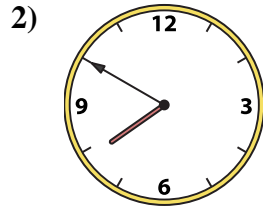





Passen Sie die analoge Uhr an die digitale Uhr an.

Antworten



1. _____
2. _____
3. _____
4. _____
5. _____
6. _____
7. _____
8. _____
9. _____
10. _____
11. _____
12. _____
13. _____
14. _____
15. _____
16. _____

A. 5:45

B. 3:00

C. 3:45

D. 12:05

E. 3:30

F. 6:50

G. 7:50

H. 12:00

I. 9:30

J. 3:55

K. 4:55

L. 8:55

M. 5:15

N. 9:15

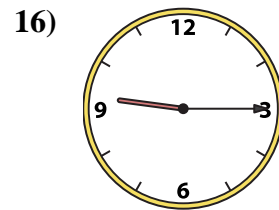
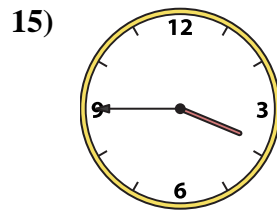
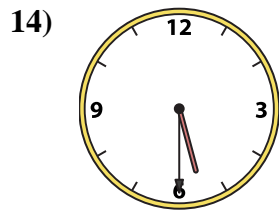
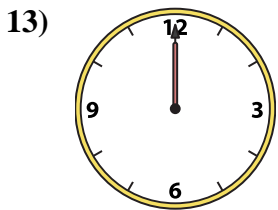
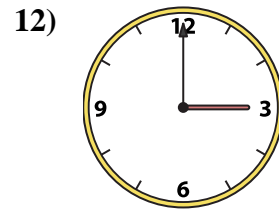
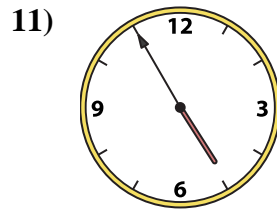
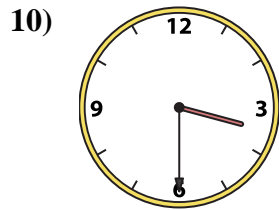
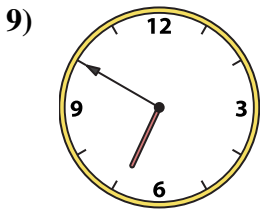
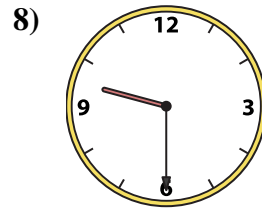
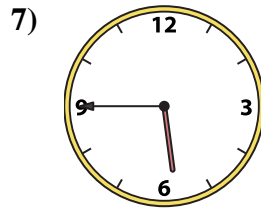
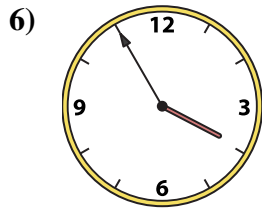
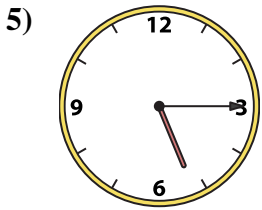
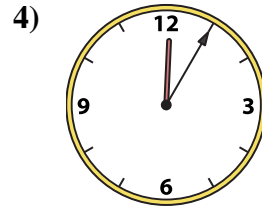
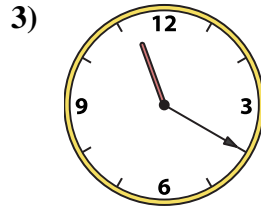
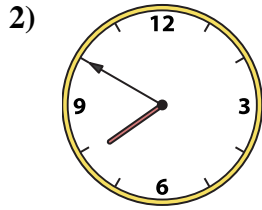

O. 11:20

P. 5:30



Passen Sie die analoge Uhr an die digitale Uhr an.

Antworten



A. **5:45**

B. **3:00**

C. **3:45**

D. **12:05**

E. **3:30**

F. **6:50**

G. **7:50**

H. **12:00**

I. **9:30**

J. **3:55**

K. **4:55**

L. **8:55**

M. **5:15**

N. **9:15**

O. **11:20**

P. **5:30**

1. **L**

2. **G**

3. **O**

4. **D**

5. **M**

6. **J**

7. **A**

8. **I**

9. **F**

10. **E**

11. **K**

12. **B**

13. **H**

14. **P**

15. **C**

16. **N**