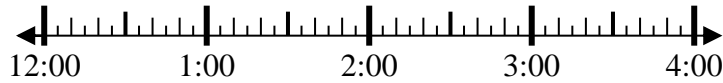




Löse jede Aufgabe.

Antworten

1) Beginn: 12:10
 Elapsed: 1 Std. und 25 Min.
 Ende: _____



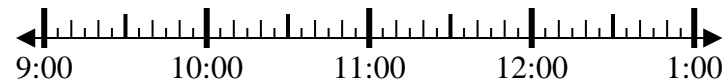
1. _____

2) Beginn: 6:40
 Elapsed: 2 Std. und 10 Min.
 Ende: _____



2. _____

3) Beginn: 9:05
 Elapsed: 2 Std. und 50 Min.
 Ende: _____



3. _____

4) Beginn: 10:45
 Elapsed: 2 Std. und 40 Min.
 Ende: _____



4. _____

5) Beginn: 5:35
 Elapsed: 1 Std. und 30 Min.
 Ende: _____



5. _____

6) Beginn: 8:15
 Elapsed: 2 Std. und 25 Min.
 Ende: _____



6. _____

7) Beginn: 4:10
 Elapsed: 2 Std. und 55 Min.
 Ende: _____



7. _____

8) Beginn: 4:00
 Elapsed: 2 Std. und 20 Min.
 Ende: _____



8. _____

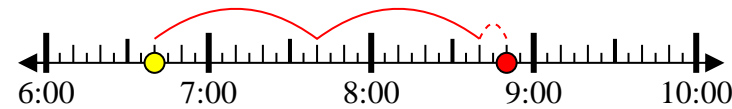


Löse jede Aufgabe.

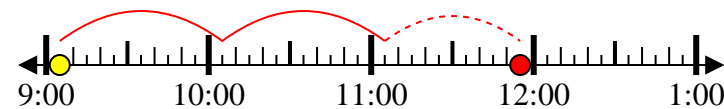
- 1) Beginn: 12:10
 Elapsed: 1 Std. und 25 Min.
 Ende: 1:35



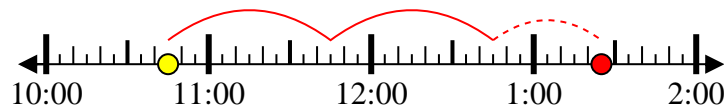
- 2) Beginn: 6:40
 Elapsed: 2 Std. und 10 Min.
 Ende: 8:50



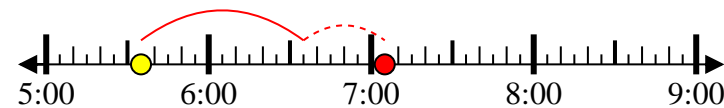
- 3) Beginn: 9:05
 Elapsed: 2 Std. und 50 Min.
 Ende: 11:55



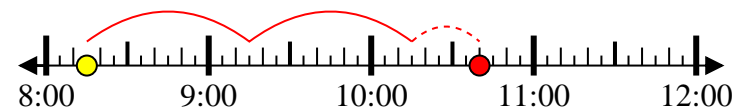
- 4) Beginn: 10:45
 Elapsed: 2 Std. und 40 Min.
 Ende: 1:25



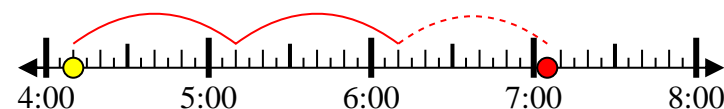
- 5) Beginn: 5:35
 Elapsed: 1 Std. und 30 Min.
 Ende: 7:05



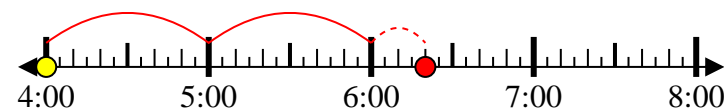
- 6) Beginn: 8:15
 Elapsed: 2 Std. und 25 Min.
 Ende: 10:40



- 7) Beginn: 4:10
 Elapsed: 2 Std. und 55 Min.
 Ende: 7:05



- 8) Beginn: 4:00
 Elapsed: 2 Std. und 20 Min.
 Ende: 6:20

**Antworten**

1. 1:35
 2. 8:50
 3. 11:55
 4. 1:25
 5. 7:05
 6. 10:40
 7. 7:05
 8. 6:20