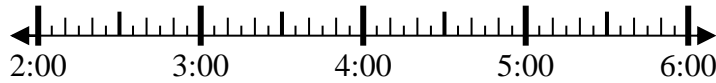




Löse jede Aufgabe.

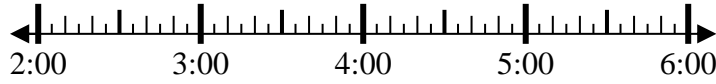
Antworten

1) Beginn: 2:15
 Elapsed: 1 Std. und 40 Min.
 Ende: _____



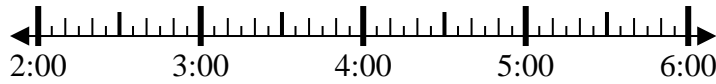
1. _____

2) Beginn: 2:10
 Elapsed: 2 Std. und 45 Min.
 Ende: _____



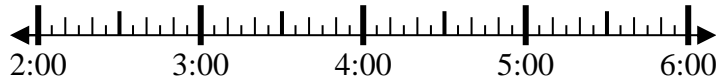
2. _____

3) Beginn: 2:45
 Elapsed: 2 Std. und 10 Min.
 Ende: _____



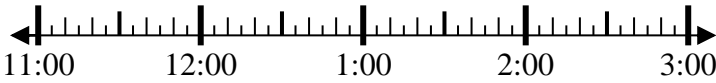
3. _____

4) Beginn: 2:20
 Elapsed: 1 Std. und 20 Min.
 Ende: _____



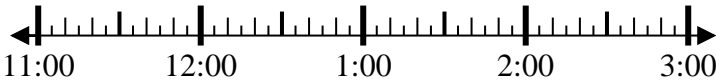
4. _____

5) Beginn: 11:05
 Elapsed: 2 Std. und 25 Min.
 Ende: _____



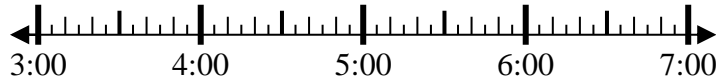
5. _____

6) Beginn: 11:05
 Elapsed: 2 Std. und 20 Min.
 Ende: _____



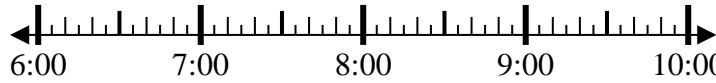
6. _____

7) Beginn: 3:45
 Elapsed: 2 Std. und 20 Min.
 Ende: _____



7. _____

8) Beginn: 6:20
 Elapsed: 1 Std. und 30 Min.
 Ende: _____

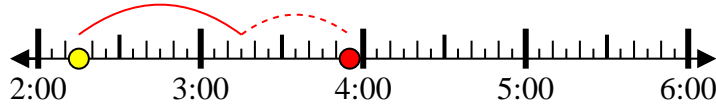


8. _____

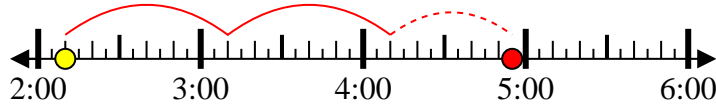


Löse jede Aufgabe.

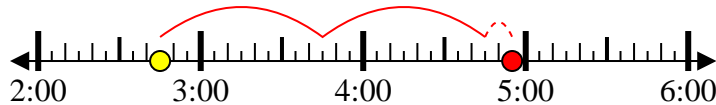
1) Beginn: 2:15

Elapsed: 1 Std. und 40
Min.Ende: 3:55

2) Beginn: 2:10

Elapsed: 2 Std. und 45
Min.Ende: 4:55

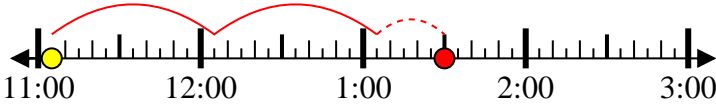
3) Beginn: 2:45

Elapsed: 2 Std. und 10
Min.Ende: 4:55

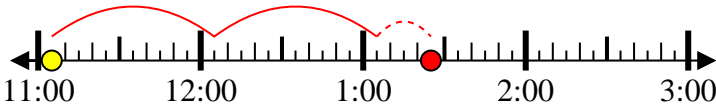
4) Beginn: 2:20

Elapsed: 1 Std. und 20
Min.Ende: 3:40

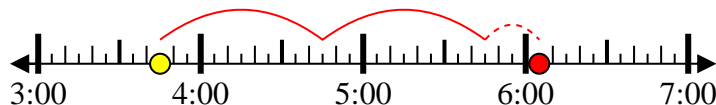
5) Beginn: 11:05

Elapsed: 2 Std. und 25
Min.Ende: 1:30

6) Beginn: 11:05

Elapsed: 2 Std. und 20
Min.Ende: 1:25

7) Beginn: 3:45

Elapsed: 2 Std. und 20
Min.Ende: 6:05

8) Beginn: 6:20

Elapsed: 1 Std. und 30
Min.Ende: 7:50**Antworten**1. 3:552. 4:553. 4:554. 3:405. 1:306. 1:257. 6:058. 7:50