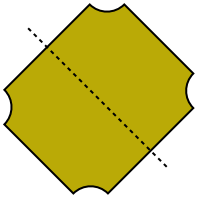




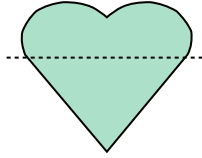
Bestimme, ob die Linie durch jede Figur eine symmetrische Linie ist.

**Antworten**

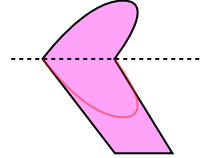
Bsp)



1)



2)



Bsp. **ja**

1. \_\_\_\_\_

2. \_\_\_\_\_

3. \_\_\_\_\_

4. \_\_\_\_\_

5. \_\_\_\_\_

6. \_\_\_\_\_

7. \_\_\_\_\_

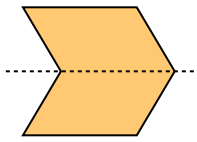
8. \_\_\_\_\_

9. \_\_\_\_\_


10. \_\_\_\_\_

11. \_\_\_\_\_

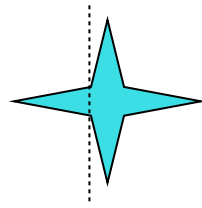
3)



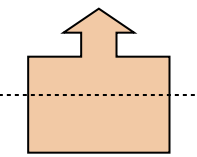
4)



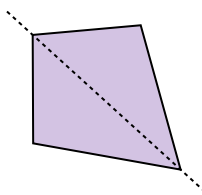
5)



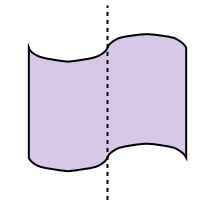
6)



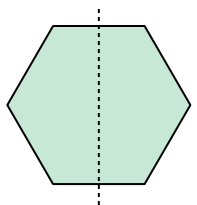
7)



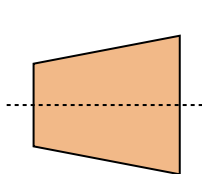
8)



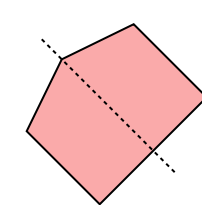
9)



10)

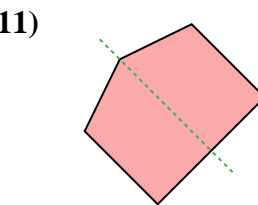
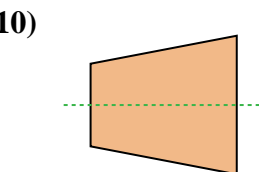
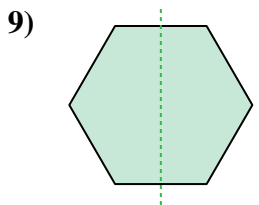
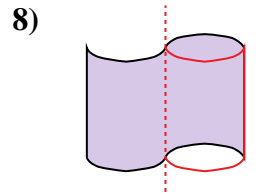
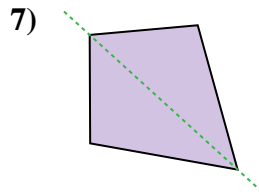
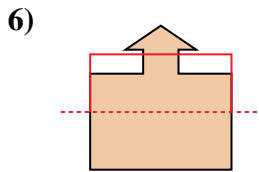
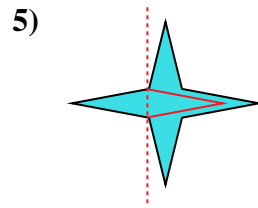
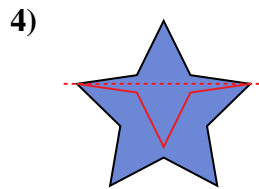
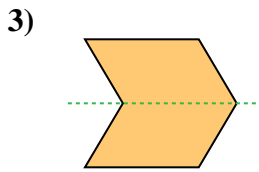
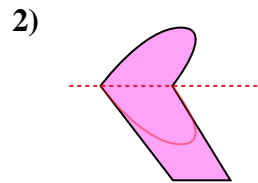
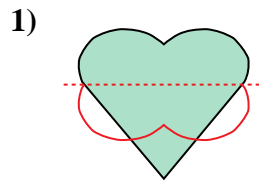
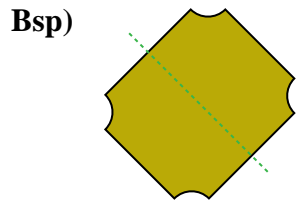


11)





Bestimme, ob die Linie durch jede Figur eine symmetrische Linie ist.



**Antworten**

Bsp. ja

1. no

2. no

3. ja

4. no

5. no

6. no

7. ja

8. no

9. ja

10. ja

11. ja