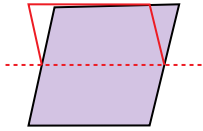




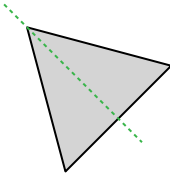


Bestimme, ob die Linie durch jede Figur eine symmetrische Linie ist.

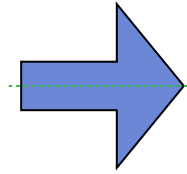
Bsp)



1)



2)



**Antworten**

Bsp. no

1. ja

2. ja

3. ja

4. no

5. ja

6. ja

7. no

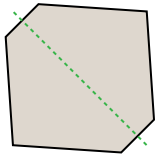
8. ja

9. ja

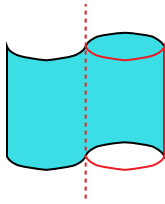
10. ja

11. ja


3)



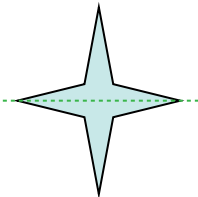
4)



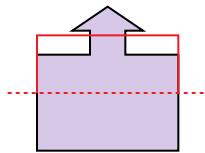
5)



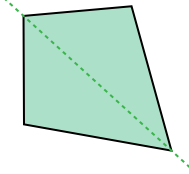
6)



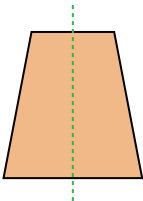
7)



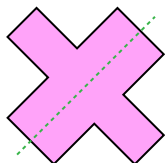
8)



9)



10)



11)

