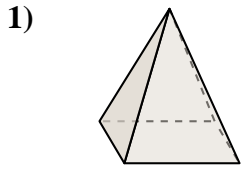


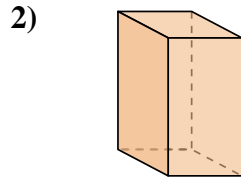


Bestimme, welche Auswahlmöglichkeit AM BESTEN den gezeigten Körper darstellt.

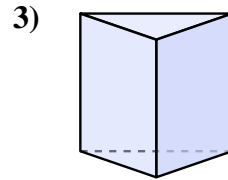
Antworten



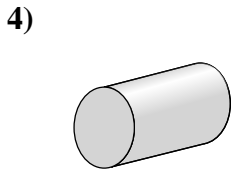
- 1)
- A. rectangular pyramid
 - B. triangular prism
 - C. rectangular prism
 - D. cube



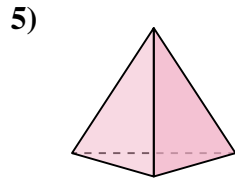
- 2)
- A. cone
 - B. triangular prism
 - C. rectangular pyramid
 - D. rectangular prism



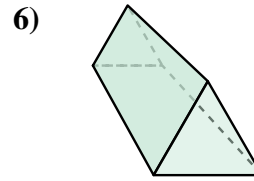
- 3)
- A. cube
 - B. cone
 - C. triangular prism
 - D. cylinder



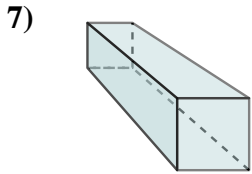
- 4)
- A. rectangular prism
 - B. rectangular pyramid
 - C. cylinder
 - D. sphere



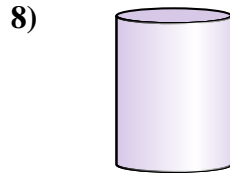
- 5)
- A. cube
 - B. triangular pyramid
 - C. rectangular prism
 - D. cylinder



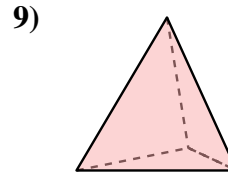
- 6)
- A. cone
 - B. sphere
 - C. triangular prism
 - D. cylinder



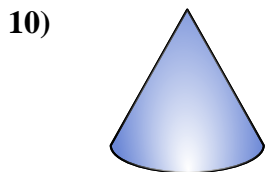
- 7)
- A. rectangular pyramid
 - B. cube
 - C. rectangular prism
 - D. triangular prism



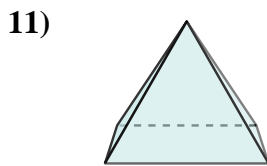
- 8)
- A. triangular prism
 - B. cube
 - C. cylinder
 - D. cone



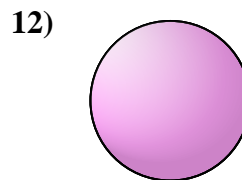
- 9)
- A. cylinder
 - B. cone
 - C. triangular pyramid
 - D. cube



- 10)
- A. cylinder
 - B. rectangular pyramid
 - C. cone
 - D. rectangular prism



- 11)
- A. triangular pyramid
 - B. cone
 - C. rectangular prism
 - D. rectangular pyramid



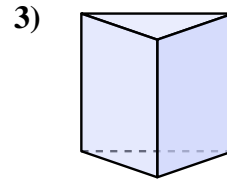
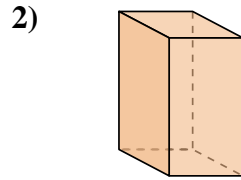
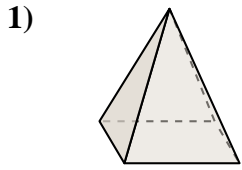
- 12)
- A. triangular pyramid
 - B. rectangular prism
 - C. cone
 - D. sphere

- 1. _____
- 2. _____
- 3. _____
- 4. _____
- 5. _____
- 6. _____
- 7. _____
- 8. _____
- 9. _____
- 10. _____
- 11. _____
- 12. _____



Bestimme, welche Auswahlmöglichkeit AM BESTEN den gezeigten Körper darstellt.

Antworten



- A. rectangular pyramid
- B. triangular prism
- C. rectangular prism
- D. cube

- A. cone
- B. triangular prism
- C. rectangular pyramid
- D. rectangular prism

- A. cube
- B. cone
- C. triangular prism
- D. cylinder

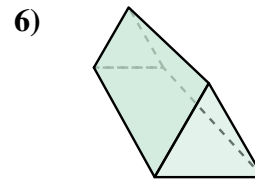
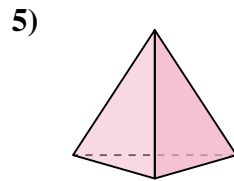
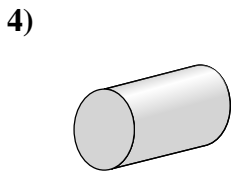
1. **A**

2. **D**

3. **C**

4. **C**

5. **B**



- A. rectangular prism
- B. rectangular pyramid
- C. cylinder
- D. sphere

- A. cube
- B. triangular pyramid
- C. rectangular prism
- D. cylinder

- A. cone
- B. sphere
- C. triangular prism
- D. cylinder

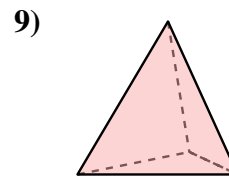
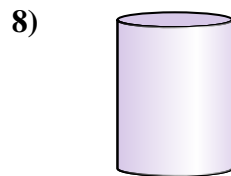
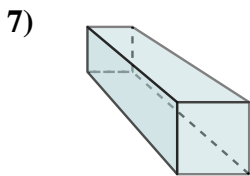
6. **C**

7. **C**

8. **C**

9. **C**

10. **C**



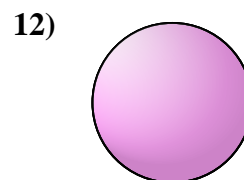
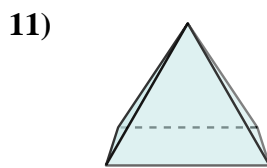
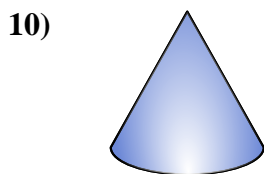
- A. rectangular pyramid
- B. cube
- C. rectangular prism
- D. triangular prism

- A. triangular prism
- B. cube
- C. cylinder
- D. cone

- A. cylinder
- B. cone
- C. triangular pyramid
- D. cube

11. **D**

12. **D**



- A. cylinder
- B. rectangular pyramid
- C. cone
- D. rectangular prism

- A. triangular pyramid
- B. cone
- C. rectangular prism
- D. rectangular pyramid

- A. triangular pyramid
- B. rectangular prism
- C. cone
- D. sphere