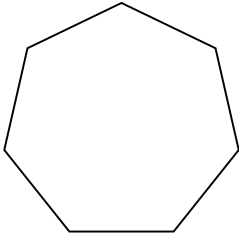


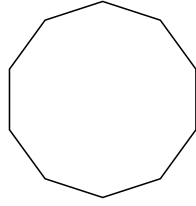


Identifiziere die Art der gezeigten Form.

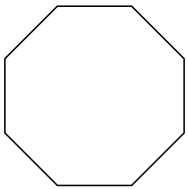
1)



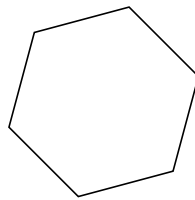
2)



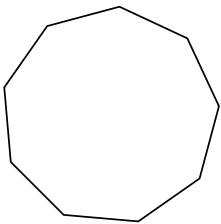
3)



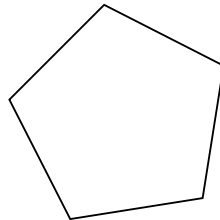
4)



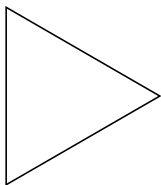
5)




6)



7)



8)



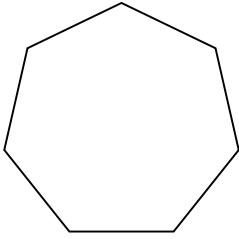
**Antworten**

- 1. \_\_\_\_\_
- 2. \_\_\_\_\_
- 3. \_\_\_\_\_
- 4. \_\_\_\_\_
- 5. \_\_\_\_\_
- 6. \_\_\_\_\_
- 7. \_\_\_\_\_
- 8. \_\_\_\_\_

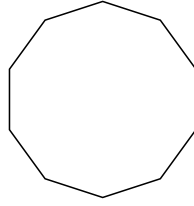


Identifiziere die Art der gezeigten Form.

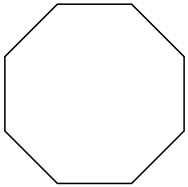
1)



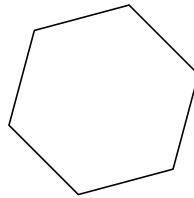
2)



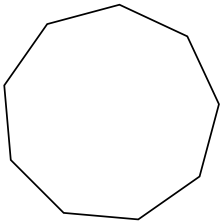
3)



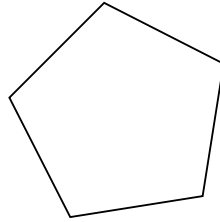
4)



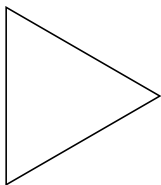
5)




6)



7)



8)



**Antworten**

1. Siebeneck

2. Zehneck

3. Achteck

4. Sechseck

5. Neuneck

6. Fünfeck

7. triangle

8. Viereck